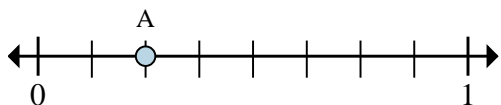




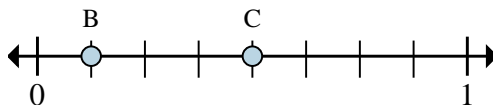
Solve each problem.

Ex)



- This numberline is divided into how many pieces?
- What is the location of A (written as a fraction)?

1)



- On this numberline what is the value of 0 written as a fraction?
- On this numberline from B to C is how far (written as a fraction)?

Answers

Ex. 8 2/8

1. _____

2. _____

3. _____

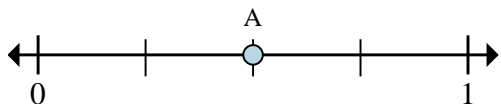
4. _____

5. _____

6. _____

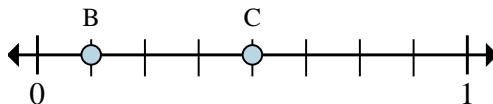
7. _____

2)



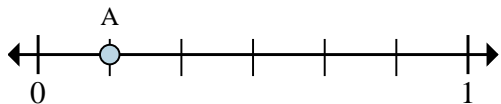
- This numberline is divided into how many pieces?
- What is the location of A (written as a fraction)?

3)



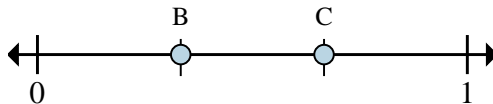
- On this numberline what is the value of 0 written as a fraction?
- On this numberline from B to C is how far (written as a fraction)?

4)



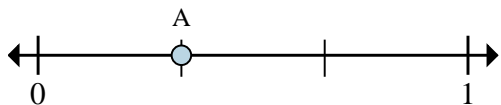
- This numberline is divided into how many pieces?
- What is the location of A (written as a fraction)?

5)



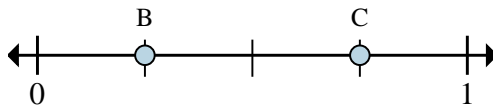
- On this numberline what is the value of 0 written as a fraction?
- On this numberline from B to C is how far (written as a fraction)?

6)



- This numberline is divided into how many pieces?
- What is the location of A (written as a fraction)?

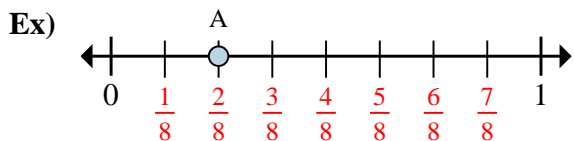
7)



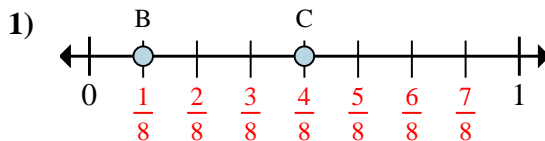
- On this numberline what is the value of 1 written as a fraction?
- On this numberline from B to C is how far (written as a fraction)?



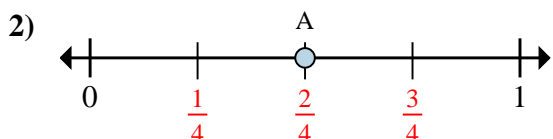
Solve each problem.



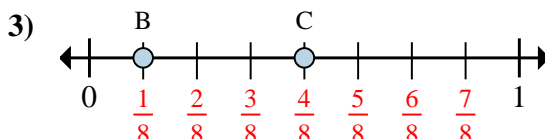
- This numberline is divided into how many pieces?
- What is the location of A (written as a fraction)?



- On this numberline what is the value of 0 written as a fraction?
- On this numberline from B to C is how far (written as a fraction)?



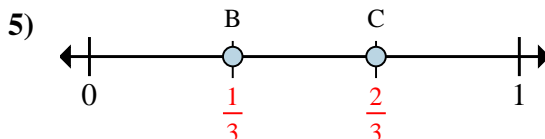
- This numberline is divided into how many pieces?
- What is the location of A (written as a fraction)?



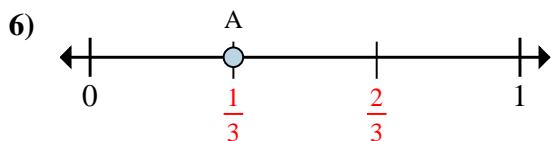
- On this numberline what is the value of 0 written as a fraction?
- On this numberline from B to C is how far (written as a fraction)?



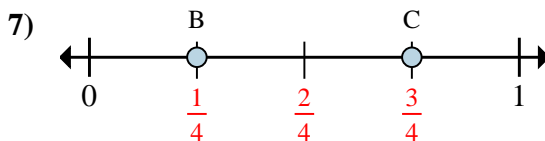
- This numberline is divided into how many pieces?
- What is the location of A (written as a fraction)?



- On this numberline what is the value of 0 written as a fraction?
- On this numberline from B to C is how far (written as a fraction)?



- This numberline is divided into how many pieces?
- What is the location of A (written as a fraction)?



- On this numberline what is the value of 1 written as a fraction?
- On this numberline from B to C is how far (written as a fraction)?

Answers

Ex.	<u>8</u>	<u>2/8</u>
1.	<u>0/8</u>	<u>3/8</u>
2.	<u>4</u>	<u>2/4</u>
3.	<u>0/8</u>	<u>3/8</u>
4.	<u>6</u>	<u>1/6</u>
5.	<u>0/3</u>	<u>1/3</u>
6.	<u>3</u>	<u>1/3</u>
7.	<u>4/4</u>	<u>2/4</u>