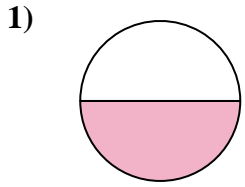


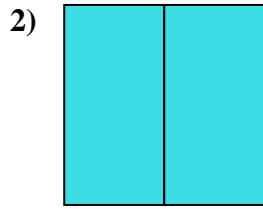


Determine which letter best describes the shaded portion.

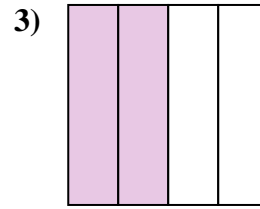
Answers



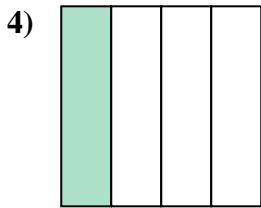
- A. one-half
- B. two-halves
- C. one-fourth



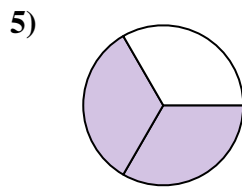
- A. three-fourths
- B. one-quarter
- C. two-halves



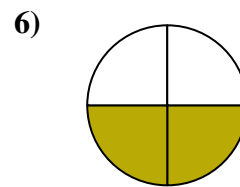
- A. two-quarters
- B. one-half
- C. three-fourths



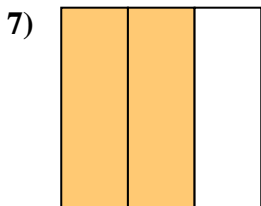
- A. three-fourths
- B. one-fourth
- C. two-halves



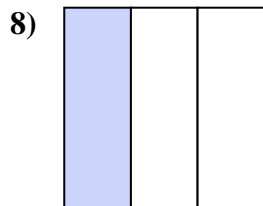
- A. three-fourths
- B. two-thirds
- C. two-quarters



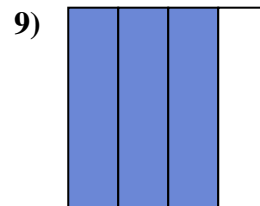
- A. three-fourths
- B. two-fourths
- C. four-fourths



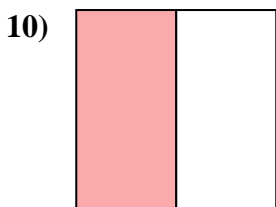
- A. one-quarter
- B. four-quarters
- C. two-thirds



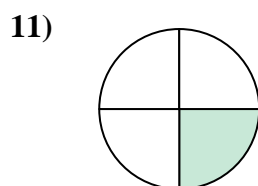
- A. three-fourths
- B. one-third
- C. two-halves



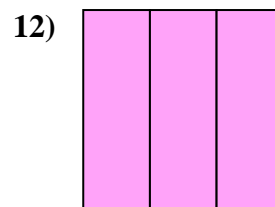
- A. four-fourths
- B. three-fourths
- C. two-quarters



- A. two-halves
- B. one-quarter
- C. one-half



- A. four-fourths
- B. one-half
- C. one-quarter

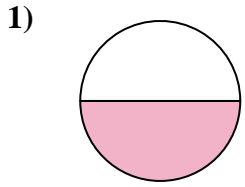


- A. three-thirds
- B. two-halves
- C. one-quarter

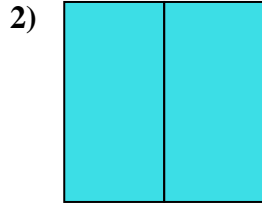
- 1. _____
- 2. _____
- 3. _____
- 4. _____
- 5. _____
- 6. _____
- 7. _____
- 8. _____
- 9. _____
- 10. _____
- 11. _____
- 12. _____



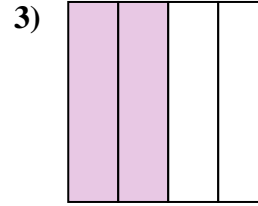
Determine which letter best describes the shaded portion.



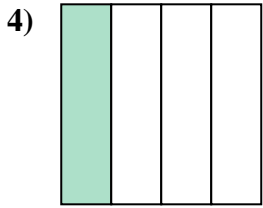
- A. one-half
- B. two-halves
- C. one-fourth



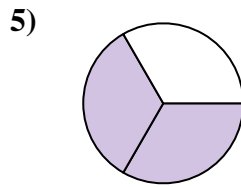
- A. three-fourths
- B. one-quarter
- C. two-halves



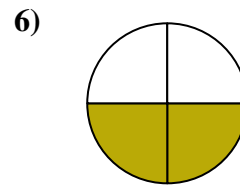
- A. two-quarters
- B. one-half
- C. three-fourths



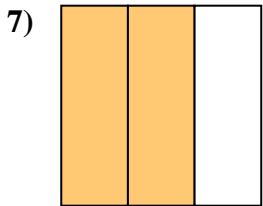
- A. three-fourths
- B. one-fourth
- C. two-halves



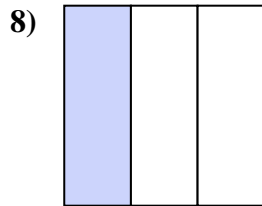
- A. three-fourths
- B. two-thirds
- C. two-quarters



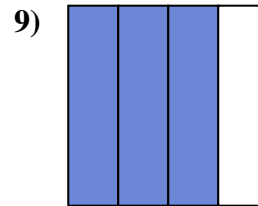
- A. three-fourths
- B. two-fourths
- C. four-fourths



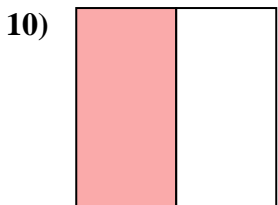
- A. one-quarter
- B. four-quarters
- C. two-thirds



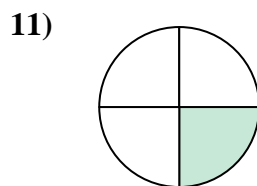
- A. three-fourths
- B. one-third
- C. two-halves



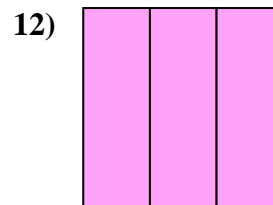
- A. four-fourths
- B. three-fourths
- C. two-quarters



- A. two-halves
- B. one-quarter
- C. one-half



- A. four-fourths
- B. one-half
- C. one-quarter



- A. three-thirds
- B. two-halves
- C. one-quarter

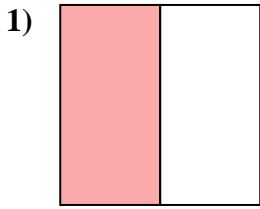
Answers

- 1. **A**
- 2. **C**
- 3. **A**
- 4. **B**
- 5. **B**
- 6. **B**
- 7. **C**
- 8. **B**
- 9. **B**
- 10. **C**
- 11. **C**
- 12. **A**

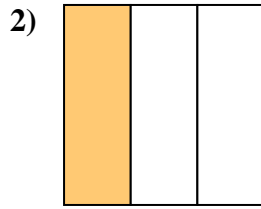


Determine which letter best describes the shaded portion.

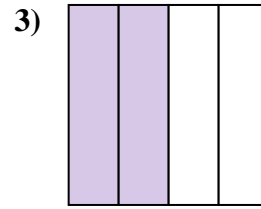
Answers



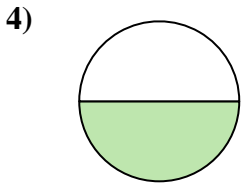
- A. one-half
- B. one-quarter
- C. two-quarters



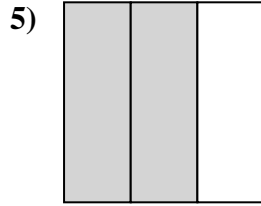
- A. one-fourth
- B. one-third
- C. two-halves



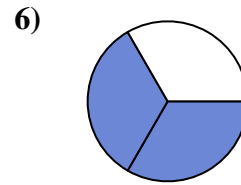
- A. two-halves
- B. two-quarters
- C. four-fourths



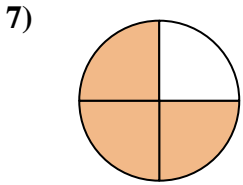
- A. one-half
- B. four-quarters
- C. three-fourths



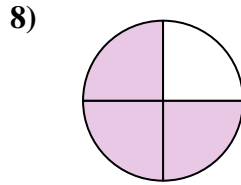
- A. two-thirds
- B. two-quarters
- C. four-quarters



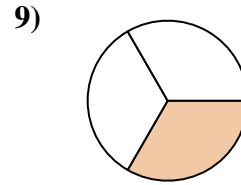
- A. two-thirds
- B. two-halves
- C. one-quarter



- A. four-fourths
- B. one-quarter
- C. three-fourths



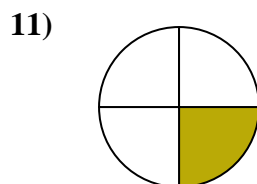
- A. three-quarters
- B. two-halves
- C. four-quarters



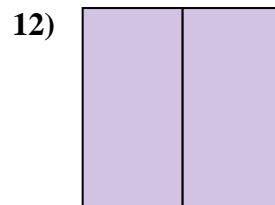
- A. one-third
- B. two-fourths
- C. four-fourths



- A. one-quarter
- B. three-thirds
- C. two-quarters



- A. one-fourth
- B. four-fourths
- C. two-halves

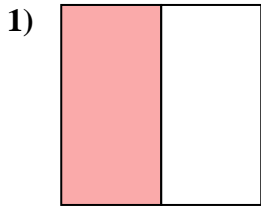


- A. three-quarters
- B. two-fourths
- C. two-halves

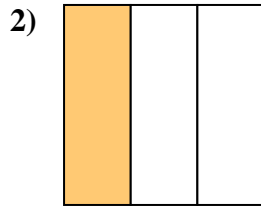
- 1. _____
- 2. _____
- 3. _____
- 4. _____
- 5. _____
- 6. _____
- 7. _____
- 8. _____
- 9. _____
- 10. _____
- 11. _____
- 12. _____



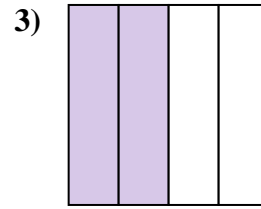
Determine which letter best describes the shaded portion.



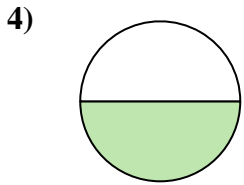
- A. one-half
- B. one-quarter
- C. two-quarters



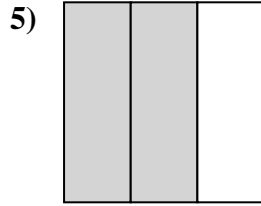
- A. one-fourth
- B. one-third
- C. two-halves



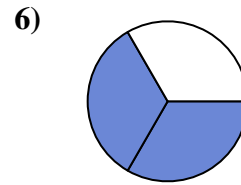
- A. two-halves
- B. two-quarters
- C. four-fourths



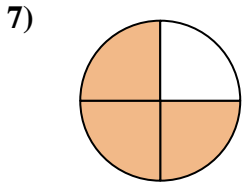
- A. one-half
- B. four-quarters
- C. three-fourths



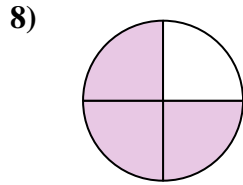
- A. two-thirds
- B. two-quarters
- C. four-quarters



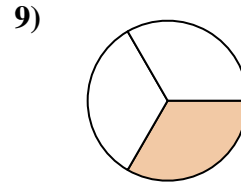
- A. two-thirds
- B. two-halves
- C. one-quarter



- A. four-fourths
- B. one-quarter
- C. three-fourths



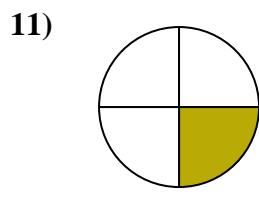
- A. three-quarters
- B. two-halves
- C. four-quarters



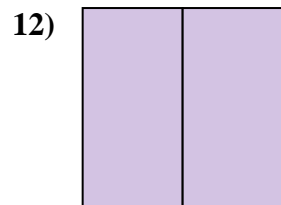
- A. one-third
- B. two-fourths
- C. four-fourths



- A. one-quarter
- B. three-thirds
- C. two-quarters



- A. one-fourth
- B. four-fourths
- C. two-halves



- A. three-quarters
- B. two-fourths
- C. two-halves

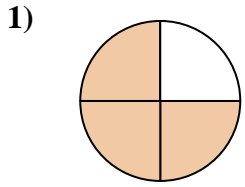
Answers

- 1. **A**
- 2. **B**
- 3. **B**
- 4. **A**
- 5. **A**
- 6. **A**
- 7. **C**
- 8. **A**
- 9. **A**
- 10. **B**
- 11. **A**
- 12. **C**

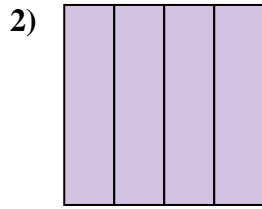


Determine which letter best describes the shaded portion.

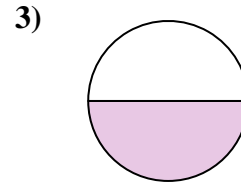
Answers



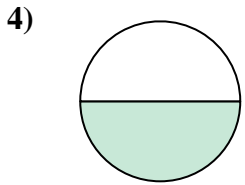
- A. four-fourths
- B. two-halves
- C. three-fourths



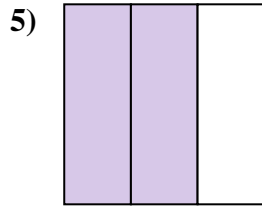
- A. one-half
- B. four-fourths
- C. one-quarter



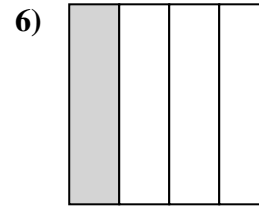
- A. one-half
- B. two-halves
- C. three-quarters



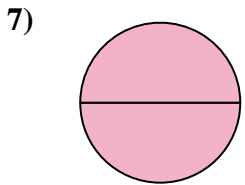
- A. one-half
- B. two-fourths
- C. two-halves



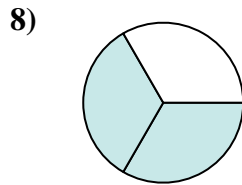
- A. two-quarters
- B. one-fourth
- C. two-thirds



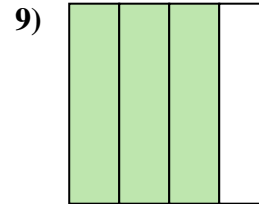
- A. four-quarters
- B. two-halves
- C. one-quarter



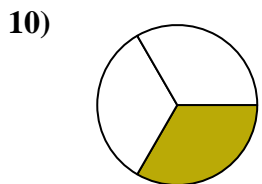
- A. one-fourth
- B. two-halves
- C. one-half



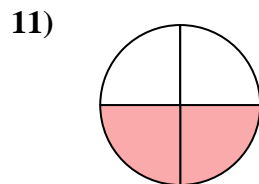
- A. one-half
- B. two-halves
- C. two-thirds



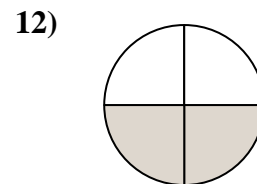
- A. four-fourths
- B. two-halves
- C. three-fourths



- A. one-fourth
- B. one-half
- C. one-third



- A. four-fourths
- B. one-quarter
- C. two-quarters

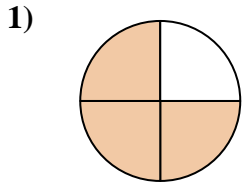


- A. two-fourths
- B. two-halves
- C. one-fourth

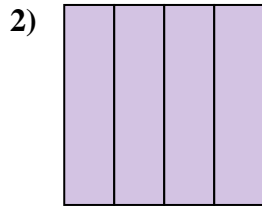
- 1. _____
- 2. _____
- 3. _____
- 4. _____
- 5. _____
- 6. _____
- 7. _____
- 8. _____
- 9. _____
- 10. _____
- 11. _____
- 12. _____



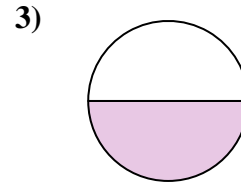
Determine which letter best describes the shaded portion.



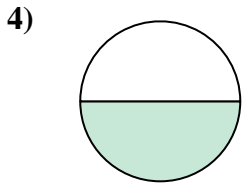
- A. four-fourths
- B. two-halves
- C. three-fourths



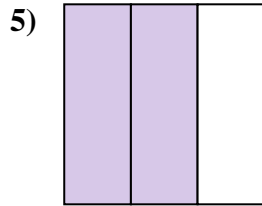
- A. one-half
- B. four-fourths
- C. one-quarter



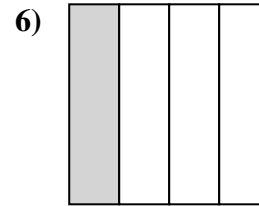
- A. one-half
- B. two-halves
- C. three-quarters



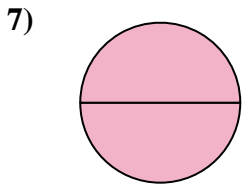
- A. one-half
- B. two-fourths
- C. two-halves



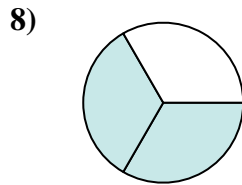
- A. two-quarters
- B. one-fourth
- C. two-thirds



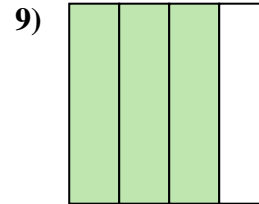
- A. four-quarters
- B. two-halves
- C. one-quarter



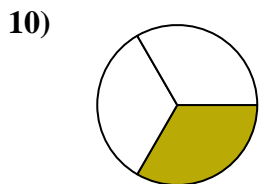
- A. one-fourth
- B. two-halves
- C. one-half



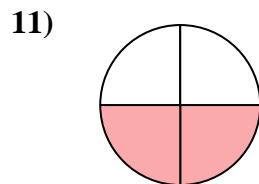
- A. one-half
- B. two-halves
- C. two-thirds



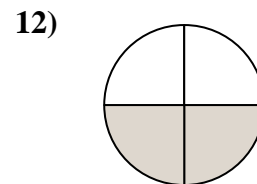
- A. four-fourths
- B. two-halves
- C. three-fourths



- A. one-fourth
- B. one-half
- C. one-third



- A. four-fourths
- B. one-quarter
- C. two-quarters



- A. two-fourths
- B. two-halves
- C. one-fourth

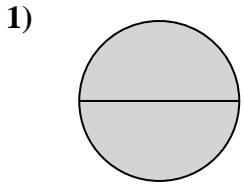
Answers

- 1. **C**
- 2. **B**
- 3. **A**
- 4. **A**
- 5. **C**
- 6. **C**
- 7. **B**
- 8. **C**
- 9. **C**
- 10. **C**
- 11. **C**
- 12. **A**

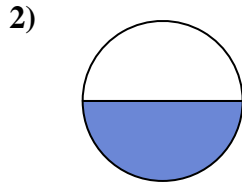


Determine which letter best describes the shaded portion.

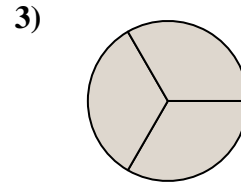
Answers



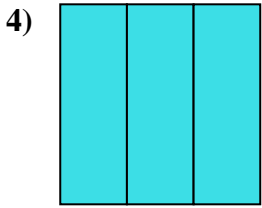
- A. two-halves
- B. one-fourth
- C. four-fourths



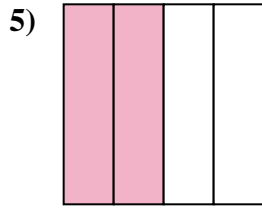
- A. two-halves
- B. one-half
- C. two-fourths



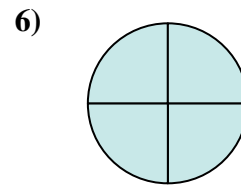
- A. two-fourths
- B. three-thirds
- C. one-half



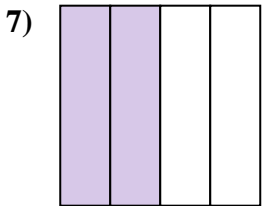
- A. three-thirds
- B. four-quarters
- C. one-half



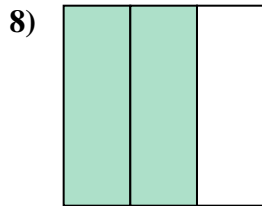
- A. two-fourths
- B. one-quarter
- C. four-quarters



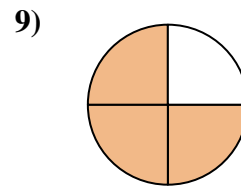
- A. one-fourth
- B. two-halves
- C. four-quarters



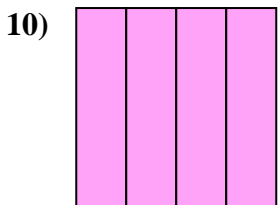
- A. four-fourths
- B. two-halves
- C. two-quarters



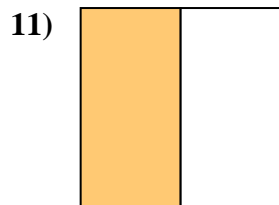
- A. three-quarters
- B. two-fourths
- C. two-thirds



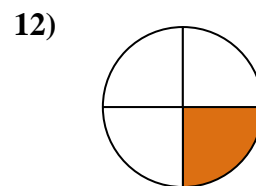
- A. three-fourths
- B. two-halves
- C. one-quarter



- A. four-fourths
- B. two-fourths
- C. one-fourth



- A. two-halves
- B. one-half
- C. three-fourths

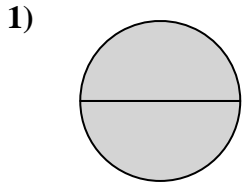


- A. two-halves
- B. one-half
- C. one-fourth

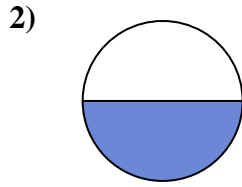
1. _____
2. _____
3. _____
4. _____
5. _____
6. _____
7. _____
8. _____
9. _____
10. _____
11. _____
12. _____



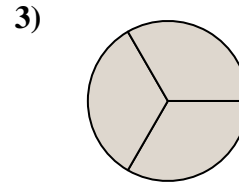
Determine which letter best describes the shaded portion.



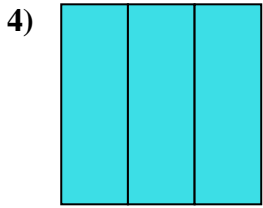
- A. two-halves
- B. one-fourth
- C. four-fourths



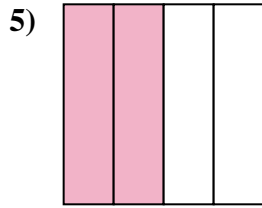
- A. two-halves
- B. one-half
- C. two-fourths



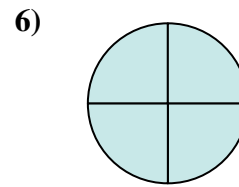
- A. two-fourths
- B. three-thirds
- C. one-half



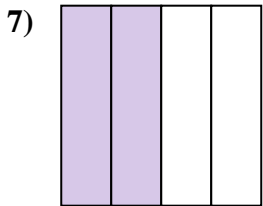
- A. three-thirds
- B. four-quarters
- C. one-half



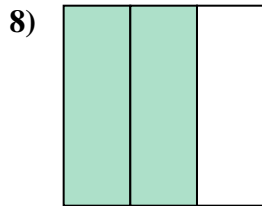
- A. two-fourths
- B. one-quarter
- C. four-quarters



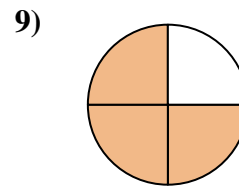
- A. one-fourth
- B. two-halves
- C. four-quarters



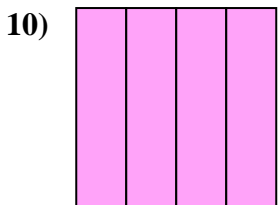
- A. four-fourths
- B. two-halves
- C. two-quarters



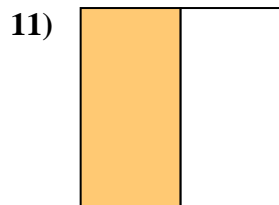
- A. three-quarters
- B. two-fourths
- C. two-thirds



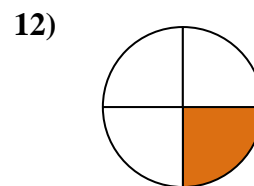
- A. three-fourths
- B. two-halves
- C. one-quarter



- A. four-fourths
- B. two-fourths
- C. one-fourth



- A. two-halves
- B. one-half
- C. three-fourths



- A. two-halves
- B. one-half
- C. one-fourth

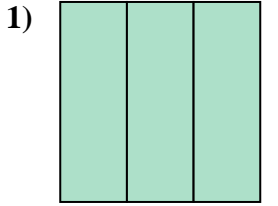
Answers

- 1. **A**
- 2. **B**
- 3. **B**
- 4. **A**
- 5. **A**
- 6. **C**
- 7. **C**
- 8. **C**
- 9. **A**
- 10. **A**
- 11. **B**
- 12. **C**

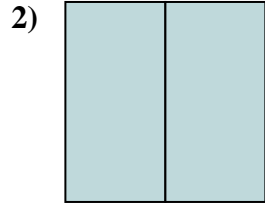


Determine which letter best describes the shaded portion.

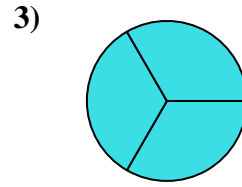
Answers



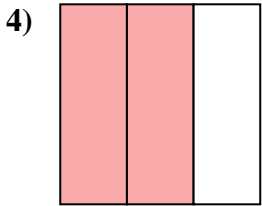
- A. three-quarters
- B. three-thirds
- C. two-halves



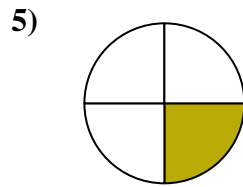
- A. three-fourths
- B. two-halves
- C. two-fourths



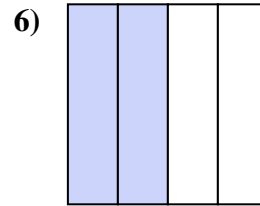
- A. three-fourths
- B. two-quarters
- C. three-thirds



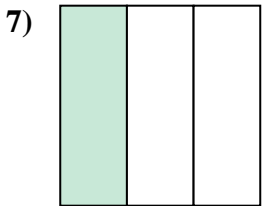
- A. two-thirds
- B. four-quarters
- C. one-fourth



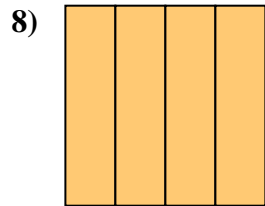
- A. two-fourths
- B. one-quarter
- C. two-halves



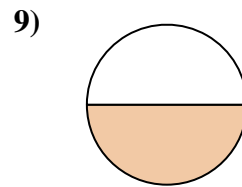
- A. one-quarter
- B. one-half
- C. two-fourths



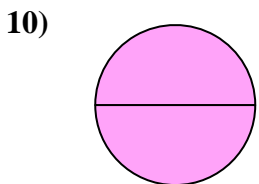
- A. four-quarters
- B. one-third
- C. one-quarter



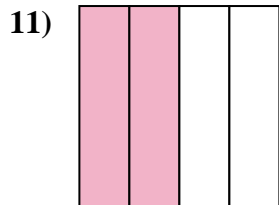
- A. four-quarters
- B. one-half
- C. two-halves



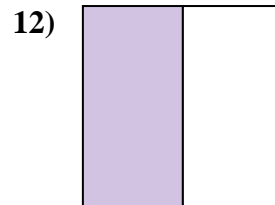
- A. one-fourth
- B. two-halves
- C. one-half



- A. four-quarters
- B. two-halves
- C. three-fourths



- A. two-quarters
- B. one-quarter
- C. three-fourths

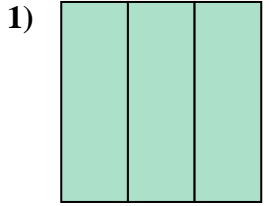


- A. four-fourths
- B. one-half
- C. three-quarters

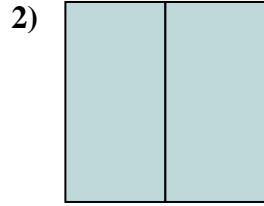
- 1. _____
- 2. _____
- 3. _____
- 4. _____
- 5. _____
- 6. _____
- 7. _____
- 8. _____
- 9. _____
- 10. _____
- 11. _____
- 12. _____



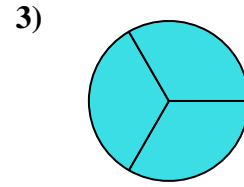
Determine which letter best describes the shaded portion.



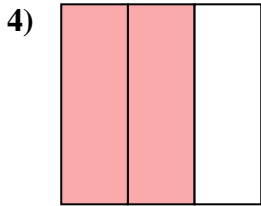
- A. three-quarters
- B. three-thirds
- C. two-halves



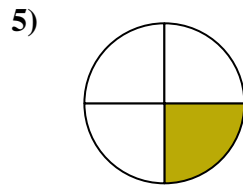
- A. three-fourths
- B. two-halves
- C. two-fourths



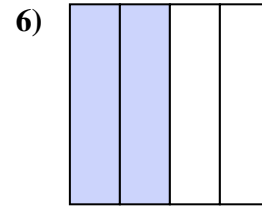
- A. three-fourths
- B. two-quarters
- C. three-thirds



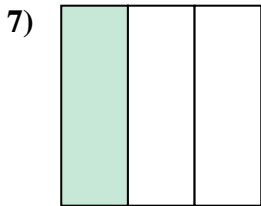
- A. two-thirds
- B. four-quarters
- C. one-fourth



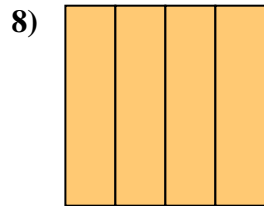
- A. two-fourths
- B. one-quarter
- C. two-halves



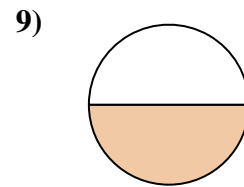
- A. one-quarter
- B. one-half
- C. two-fourths



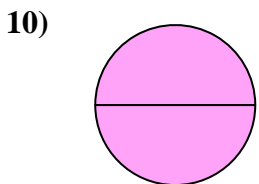
- A. four-quarters
- B. one-third
- C. one-quarter



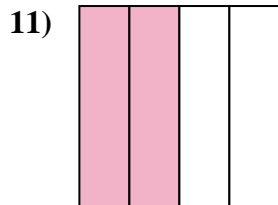
- A. four-quarters
- B. one-half
- C. two-halves



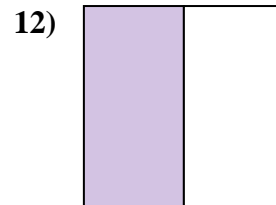
- A. one-fourth
- B. two-halves
- C. one-half



- A. four-quarters
- B. two-halves
- C. three-fourths



- A. two-quarters
- B. one-quarter
- C. three-fourths



- A. four-fourths
- B. one-half
- C. three-quarters

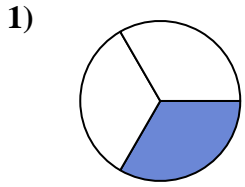
Answers

- 1. **B**
- 2. **B**
- 3. **C**
- 4. **A**
- 5. **B**
- 6. **C**
- 7. **B**
- 8. **A**
- 9. **C**
- 10. **B**
- 11. **A**
- 12. **B**

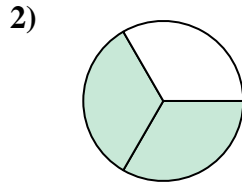


Determine which letter best describes the shaded portion.

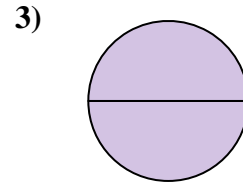
Answers



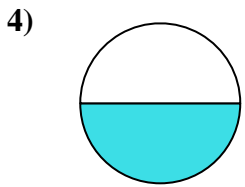
- A. four-quarters
- B. one-quarter
- C. one-third



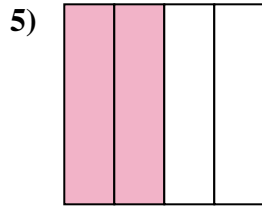
- A. two-thirds
- B. one-half
- C. one-quarter



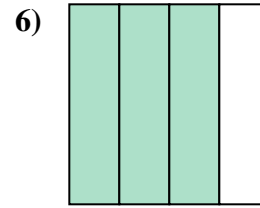
- A. one-fourth
- B. two-quarters
- C. two-halves



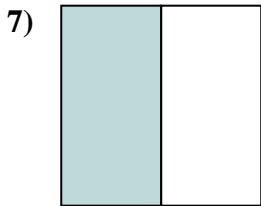
- A. one-half
- B. four-quarters
- C. three-fourths



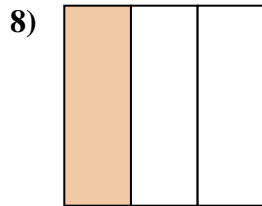
- A. four-quarters
- B. two-halves
- C. two-fourths



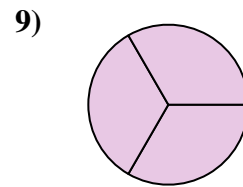
- A. one-fourth
- B. four-quarters
- C. three-quarters



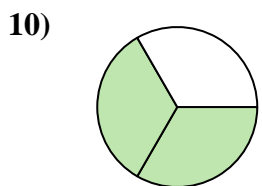
- A. two-fourths
- B. two-halves
- C. one-half



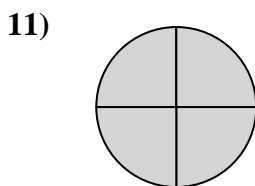
- A. two-fourths
- B. one-third
- C. three-fourths



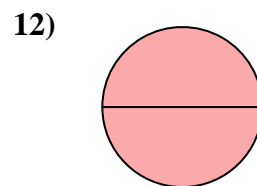
- A. three-thirds
- B. one-half
- C. three-quarters



- A. four-fourths
- B. two-thirds
- C. three-fourths



- A. one-fourth
- B. four-quarters
- C. one-half



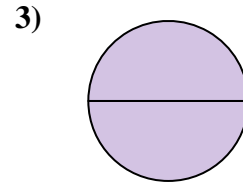
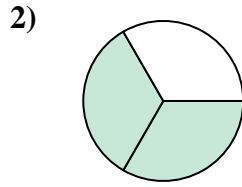
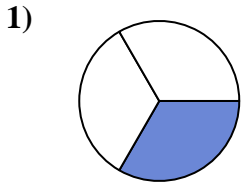
- A. two-halves
- B. two-fourths
- C. four-fourths

1. _____
2. _____
3. _____
4. _____
5. _____
6. _____
7. _____
8. _____
9. _____
10. _____
11. _____
12. _____



Determine which letter best describes the shaded portion.

Answers



1. **C**

- A. four-quarters
- B. one-quarter
- C. one-third

- A. two-thirds
- B. one-half
- C. one-quarter

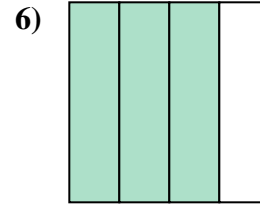
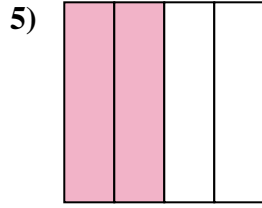
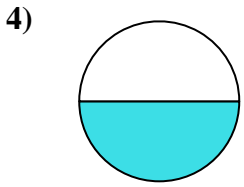
- A. one-fourth
- B. two-quarters
- C. two-halves

2. **A**

3. **C**

4. **A**

5. **C**



6. **C**

- A. one-half
- B. four-quarters
- C. three-fourths

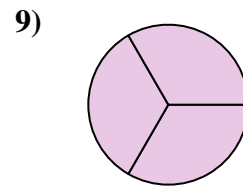
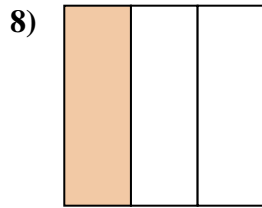
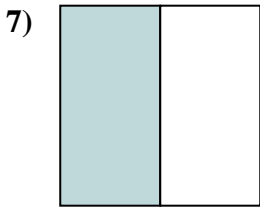
- A. four-quarters
- B. two-halves
- C. two-fourths

- A. one-fourth
- B. four-quarters
- C. three-quarters

7. **C**

8. **B**

9. **A**



- A. two-fourths
- B. two-halves
- C. one-half

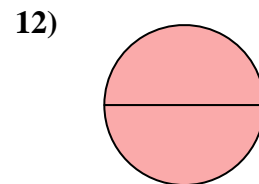
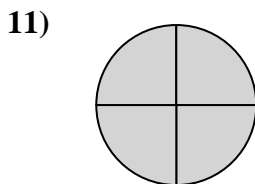
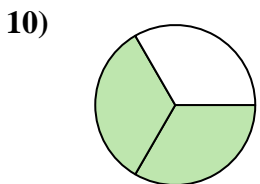
- A. two-fourths
- B. one-third
- C. three-fourths

- A. three-thirds
- B. one-half
- C. three-quarters

10. **B**

11. **B**

12. **A**



- A. four-fourths
- B. two-thirds
- C. three-fourths

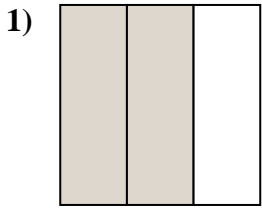
- A. one-fourth
- B. four-quarters
- C. one-half

- A. two-halves
- B. two-fourths
- C. four-fourths

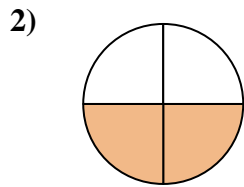


Determine which letter best describes the shaded portion.

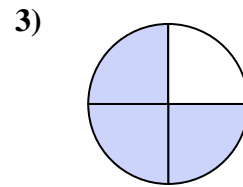
Answers



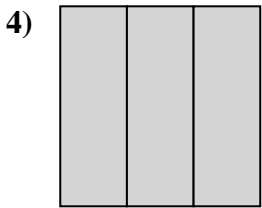
- A. two-thirds
- B. two-fourths
- C. two-halves



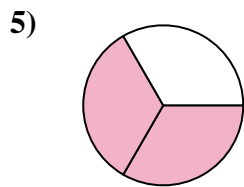
- A. four-fourths
- B. two-fourths
- C. one-half



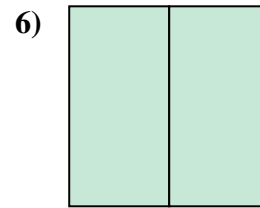
- A. three-fourths
- B. four-quarters
- C. two-halves



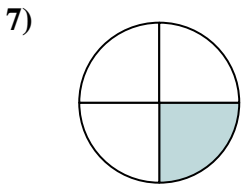
- A. three-thirds
- B. one-fourth
- C. two-halves



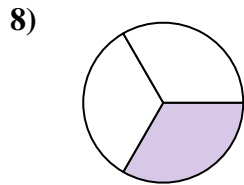
- A. two-halves
- B. two-fourths
- C. two-thirds



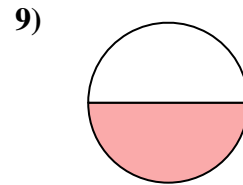
- A. one-fourth
- B. two-fourths
- C. two-halves



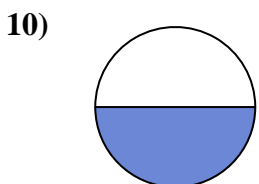
- A. two-halves
- B. three-fourths
- C. one-fourth



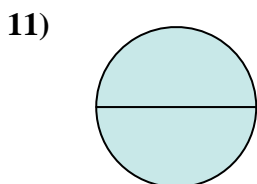
- A. two-halves
- B. two-fourths
- C. one-third



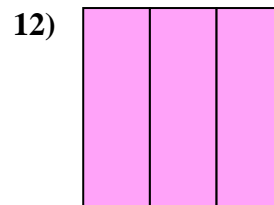
- A. two-halves
- B. four-fourths
- C. one-half



- A. two-fourths
- B. one-fourth
- C. one-half



- A. two-halves
- B. three-fourths
- C. four-quarters



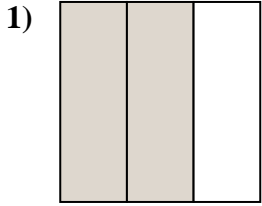
- A. three-thirds
- B. one-fourth
- C. three-quarters

- 1. _____
- 2. _____
- 3. _____
- 4. _____
- 5. _____
- 6. _____
- 7. _____
- 8. _____
- 9. _____
- 10. _____
- 11. _____
- 12. _____

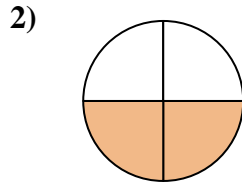


Determine which letter best describes the shaded portion.

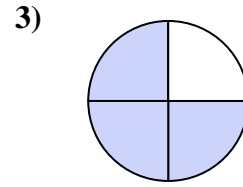
Answers



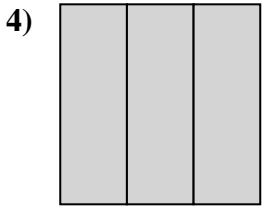
- A. two-thirds
- B. two-fourths
- C. two-halves



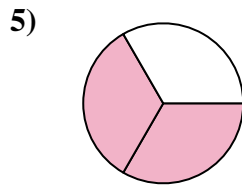
- A. four-fourths
- B. two-fourths
- C. one-half



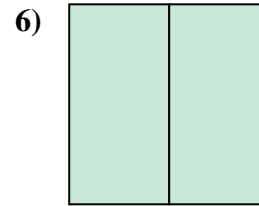
- A. three-fourths
- B. four-quarters
- C. two-halves



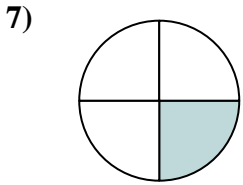
- A. three-thirds
- B. one-fourth
- C. two-halves



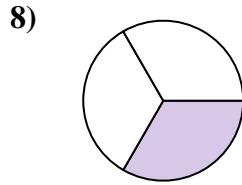
- A. two-halves
- B. two-fourths
- C. two-thirds



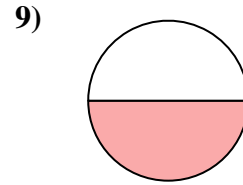
- A. one-fourth
- B. two-fourths
- C. two-halves



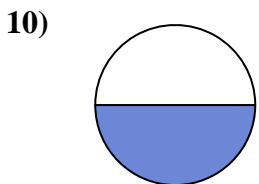
- A. two-halves
- B. three-fourths
- C. one-fourth



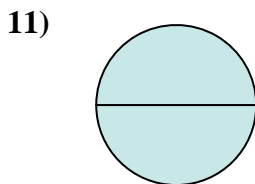
- A. two-halves
- B. two-fourths
- C. one-third



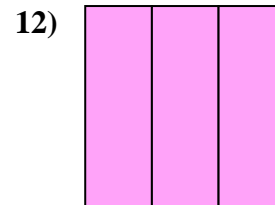
- A. two-halves
- B. four-fourths
- C. one-half



- A. two-fourths
- B. one-fourth
- C. one-half



- A. two-halves
- B. three-fourths
- C. four-quarters



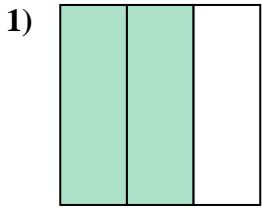
- A. three-thirds
- B. one-fourth
- C. three-quarters

- 1. **A**
- 2. **B**
- 3. **A**
- 4. **A**
- 5. **C**
- 6. **C**
- 7. **C**
- 8. **C**
- 9. **C**
- 10. **C**
- 11. **A**
- 12. **A**

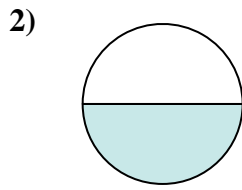


Determine which letter best describes the shaded portion.

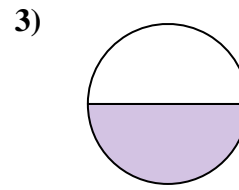
Answers



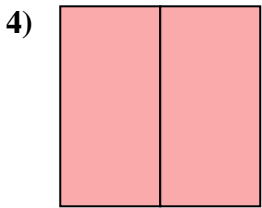
- A. two-halves
- B. two-thirds
- C. one-quarter



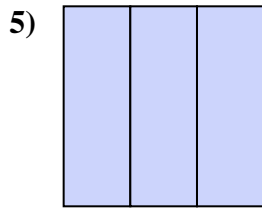
- A. one-fourth
- B. two-quarters
- C. one-half



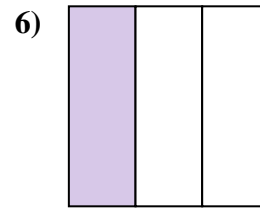
- A. two-fourths
- B. one-half
- C. two-halves



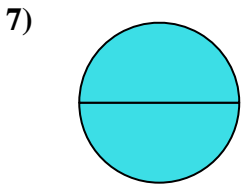
- A. two-halves
- B. two-quarters
- C. one-half



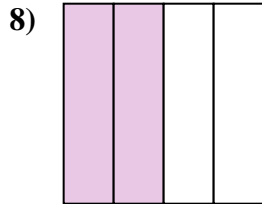
- A. three-fourths
- B. three-thirds
- C. one-fourth



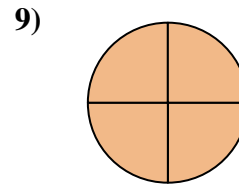
- A. two-halves
- B. one-third
- C. one-quarter



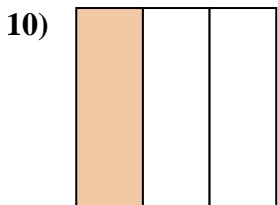
- A. four-fourths
- B. one-half
- C. two-halves



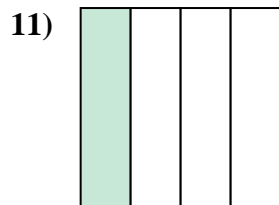
- A. three-quarters
- B. two-quarters
- C. two-halves



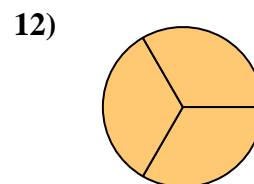
- A. one-half
- B. four-fourths
- C. two-fourths



- A. one-third
- B. one-half
- C. two-halves



- A. three-quarters
- B. two-halves
- C. one-quarter

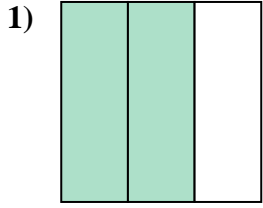


- A. three-thirds
- B. two-halves
- C. one-half

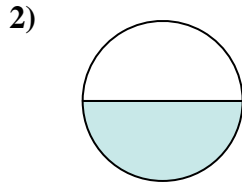
- 1. _____
- 2. _____
- 3. _____
- 4. _____
- 5. _____
- 6. _____
- 7. _____
- 8. _____
- 9. _____
- 10. _____
- 11. _____
- 12. _____



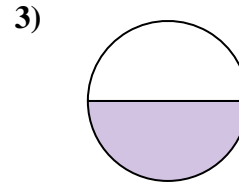
Determine which letter best describes the shaded portion.



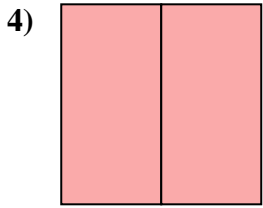
- A. two-halves
- B. two-thirds
- C. one-quarter



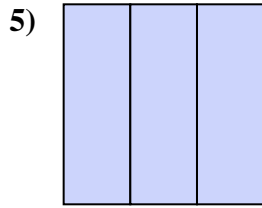
- A. one-fourth
- B. two-quarters
- C. one-half



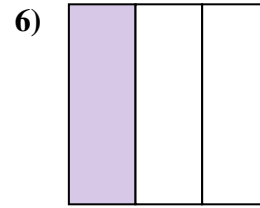
- A. two-fourths
- B. one-half
- C. two-halves



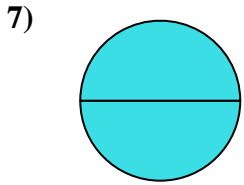
- A. two-halves
- B. two-quarters
- C. one-half



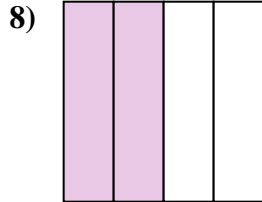
- A. three-fourths
- B. three-thirds
- C. one-fourth



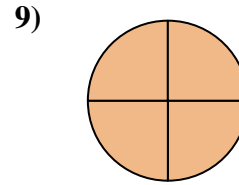
- A. two-halves
- B. one-third
- C. one-quarter



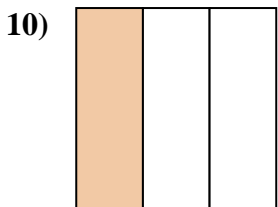
- A. four-fourths
- B. one-half
- C. two-halves



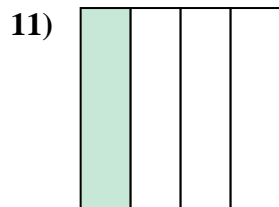
- A. three-quarters
- B. two-quarters
- C. two-halves



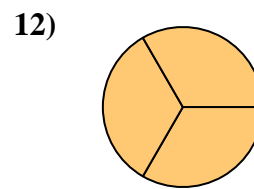
- A. one-half
- B. four-fourths
- C. two-fourths



- A. one-third
- B. one-half
- C. two-halves



- A. three-quarters
- B. two-halves
- C. one-quarter



- A. three-thirds
- B. two-halves
- C. one-half

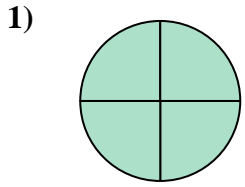
Answers

- 1. **B**
- 2. **C**
- 3. **B**
- 4. **A**
- 5. **B**
- 6. **B**
- 7. **C**
- 8. **B**
- 9. **B**
- 10. **A**
- 11. **C**
- 12. **A**

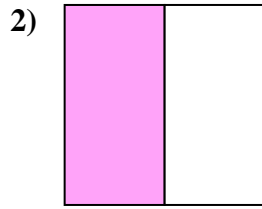


Determine which letter best describes the shaded portion.

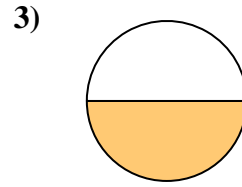
Answers



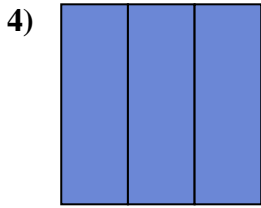
- A. one-fourth
- B. three-fourths
- C. four-fourths



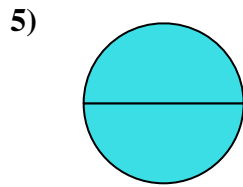
- A. three-quarters
- B. one-quarter
- C. one-half



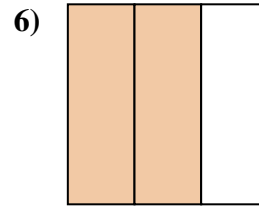
- A. two-quarters
- B. three-quarters
- C. one-half



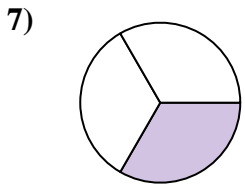
- A. two-halves
- B. one-half
- C. three-thirds



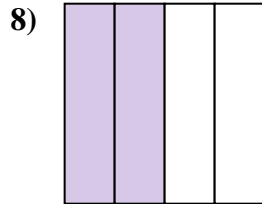
- A. two-halves
- B. one-quarter
- C. two-fourths



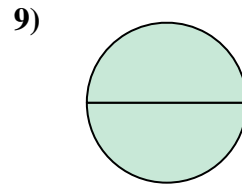
- A. two-thirds
- B. two-halves
- C. one-fourth



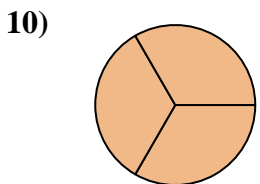
- A. four-fourths
- B. two-halves
- C. one-third



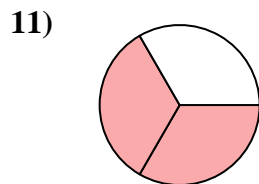
- A. one-half
- B. two-quarters
- C. three-quarters



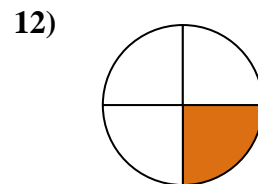
- A. two-quarters
- B. four-fourths
- C. two-halves



- A. three-thirds
- B. one-fourth
- C. two-halves



- A. one-quarter
- B. two-thirds
- C. four-quarters



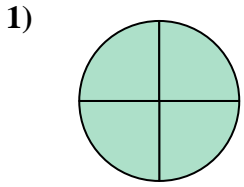
- A. one-fourth
- B. three-quarters
- C. two-halves

- 1. _____
- 2. _____
- 3. _____
- 4. _____
- 5. _____
- 6. _____
- 7. _____
- 8. _____
- 9. _____
- 10. _____
- 11. _____
- 12. _____

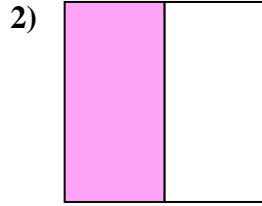


Determine which letter best describes the shaded portion.

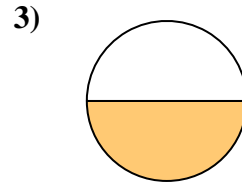
Answers



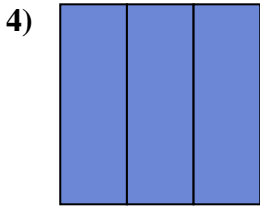
- A. one-fourth
- B. three-fourths
- C. four-fourths



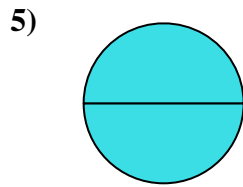
- A. three-quarters
- B. one-quarter
- C. one-half



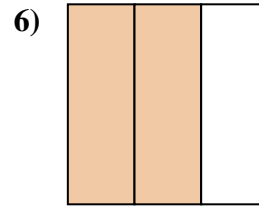
- A. two-quarters
- B. three-quarters
- C. one-half



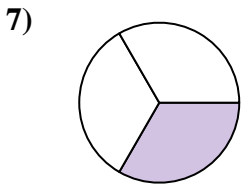
- A. two-halves
- B. one-half
- C. three-thirds



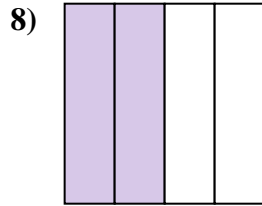
- A. two-halves
- B. one-quarter
- C. two-fourths



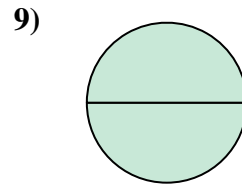
- A. two-thirds
- B. two-halves
- C. one-fourth



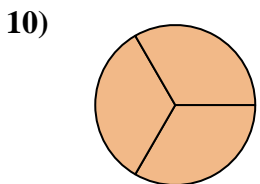
- A. four-fourths
- B. two-halves
- C. one-third



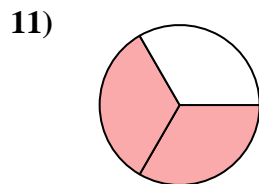
- A. one-half
- B. two-quarters
- C. three-quarters



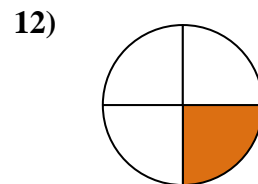
- A. two-quarters
- B. four-fourths
- C. two-halves



- A. three-thirds
- B. one-fourth
- C. two-halves



- A. one-quarter
- B. two-thirds
- C. four-quarters



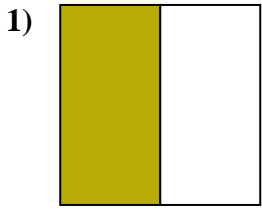
- A. one-fourth
- B. three-quarters
- C. two-halves

- 1. **C**
- 2. **C**
- 3. **C**
- 4. **C**
- 5. **A**
- 6. **A**
- 7. **C**
- 8. **B**
- 9. **C**
- 10. **A**
- 11. **B**
- 12. **A**

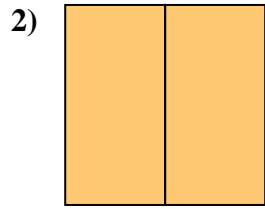


Determine which letter best describes the shaded portion.

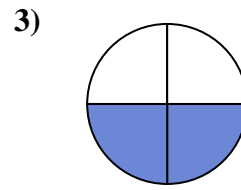
Answers



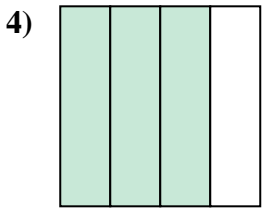
- A. two-fourths
- B. one-half
- C. two-halves



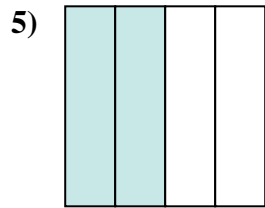
- A. two-halves
- B. four-fourths
- C. three-quarters



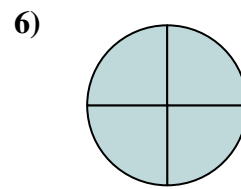
- A. one-quarter
- B. three-fourths
- C. two-quarters



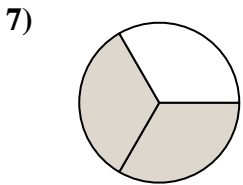
- A. one-fourth
- B. three-quarters
- C. two-fourths



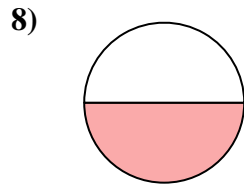
- A. two-quarters
- B. three-fourths
- C. two-halves



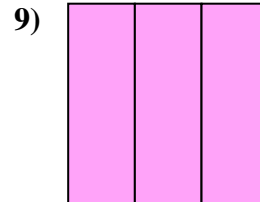
- A. four-quarters
- B. two-halves
- C. two-fourths



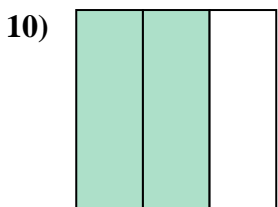
- A. one-quarter
- B. two-halves
- C. two-thirds



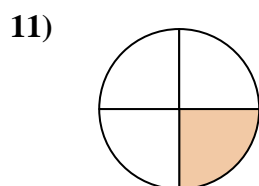
- A. four-fourths
- B. two-halves
- C. one-half



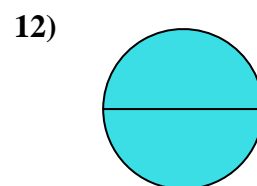
- A. one-half
- B. three-thirds
- C. four-quarters



- A. two-halves
- B. two-thirds
- C. three-fourths



- A. four-quarters
- B. three-fourths
- C. one-quarter




- A. two-halves
- B. one-quarter
- C. one-half

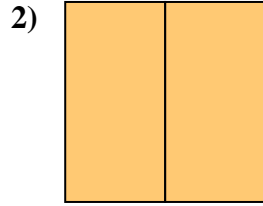
- 1. _____
- 2. _____
- 3. _____
- 4. _____
- 5. _____
- 6. _____
- 7. _____
- 8. _____
- 9. _____
- 10. _____
- 11. _____
- 12. _____



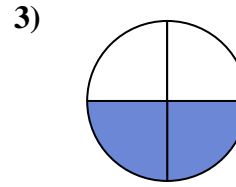
Determine which letter best describes the shaded portion.



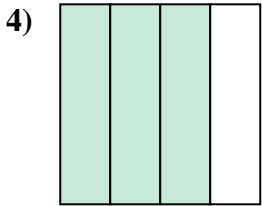
- A. two-fourths
- B. one-half
- C. two-halves



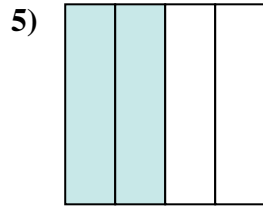
- A. two-halves
- B. four-fourths
- C. three-quarters



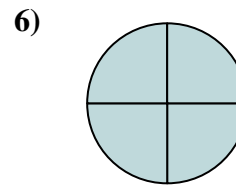
- A. one-quarter
- B. three-fourths
- C. two-quarters



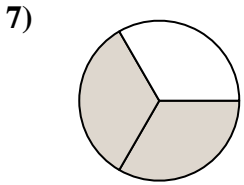
- A. one-fourth
- B. three-quarters
- C. two-fourths



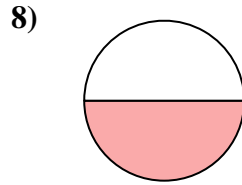
- A. two-quarters
- B. three-fourths
- C. two-halves



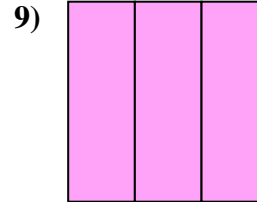
- A. four-quarters
- B. two-halves
- C. two-fourths



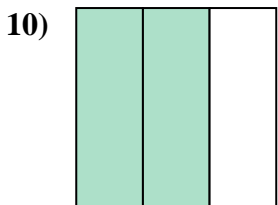
- A. one-quarter
- B. two-halves
- C. two-thirds



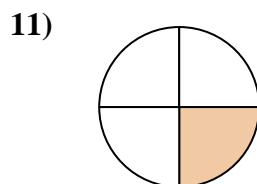
- A. four-fourths
- B. two-halves
- C. one-half



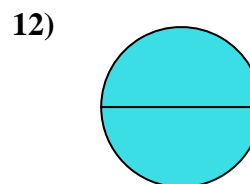
- A. one-half
- B. three-thirds
- C. four-quarters



- A. two-halves
- B. two-thirds
- C. three-fourths



- A. four-quarters
- B. three-fourths
- C. one-quarter



- A. two-halves
- B. one-quarter
- C. one-half

Answers

- 1. **B**
- 2. **A**
- 3. **C**
- 4. **B**
- 5. **A**
- 6. **A**
- 7. **C**
- 8. **C**
- 9. **B**
- 10. **B**
- 11. **C**
- 12. **A**