


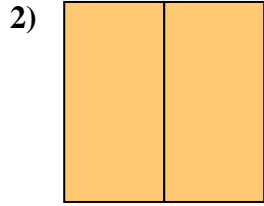


Determine which letter best describes the shaded portion.

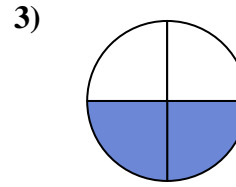
Answers



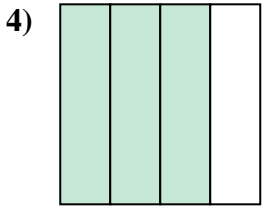
- A. two-fourths
- B. one-half
- C. two-halves



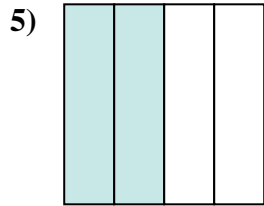
- A. two-halves
- B. four-fourths
- C. three-quarters



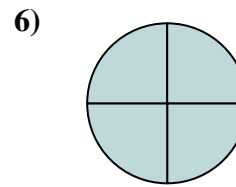
- A. one-quarter
- B. three-fourths
- C. two-quarters



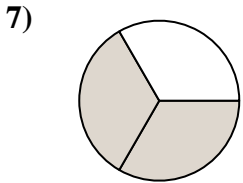
- A. one-fourth
- B. three-quarters
- C. two-fourths



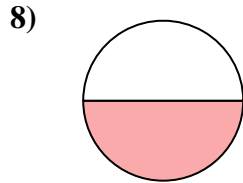
- A. two-quarters
- B. three-fourths
- C. two-halves



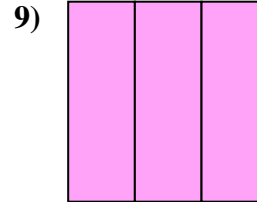
- A. four-quarters
- B. two-halves
- C. two-fourths



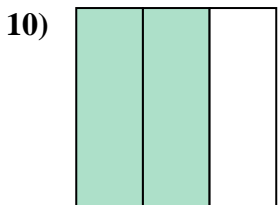
- A. one-quarter
- B. two-halves
- C. two-thirds



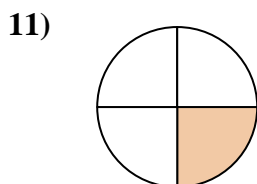
- A. four-fourths
- B. two-halves
- C. one-half



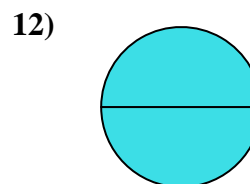
- A. one-half
- B. three-thirds
- C. four-quarters



- A. two-halves
- B. two-thirds
- C. three-fourths



- A. four-quarters
- B. three-fourths
- C. one-quarter




- A. two-halves
- B. one-quarter
- C. one-half

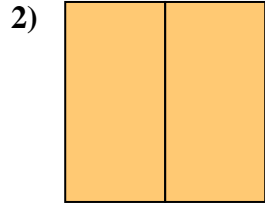
- 1. _____
- 2. _____
- 3. _____
- 4. _____
- 5. _____
- 6. _____
- 7. _____
- 8. _____
- 9. _____
- 10. _____
- 11. _____
- 12. _____



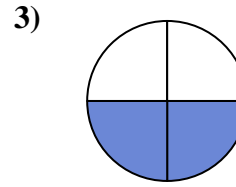
Determine which letter best describes the shaded portion.



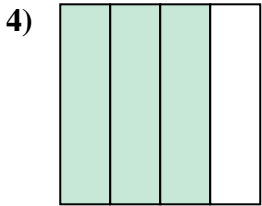
- A. two-fourths
- B. one-half
- C. two-halves



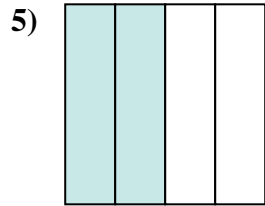
- A. two-halves
- B. four-fourths
- C. three-quarters



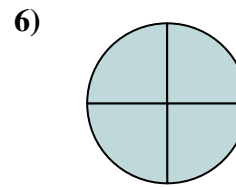
- A. one-quarter
- B. three-fourths
- C. two-quarters



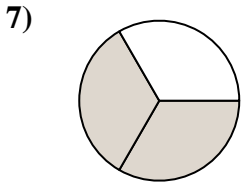
- A. one-fourth
- B. three-quarters
- C. two-fourths



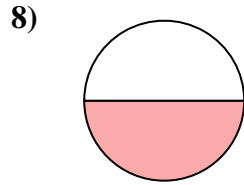
- A. two-quarters
- B. three-fourths
- C. two-halves



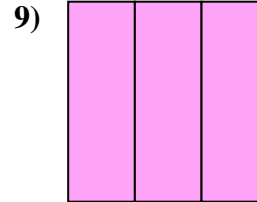
- A. four-quarters
- B. two-halves
- C. two-fourths



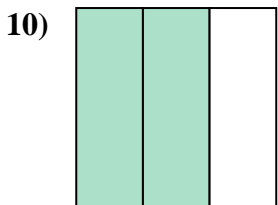
- A. one-quarter
- B. two-halves
- C. two-thirds



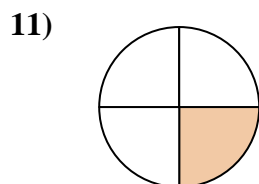
- A. four-fourths
- B. two-halves
- C. one-half



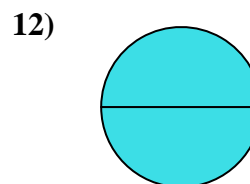
- A. one-half
- B. three-thirds
- C. four-quarters



- A. two-halves
- B. two-thirds
- C. three-fourths



- A. four-quarters
- B. three-fourths
- C. one-quarter



- A. two-halves
- B. one-quarter
- C. one-half

Answers

- 1. **B**
- 2. **A**
- 3. **C**
- 4. **B**
- 5. **A**
- 6. **A**
- 7. **C**
- 8. **C**
- 9. **B**
- 10. **B**
- 11. **C**
- 12. **A**