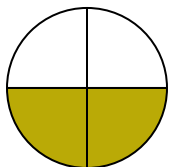



**Determine which letter best describes the shaded portion.****Answers**

1)




- A. three-fourths
B. two-fourths
C. two-halves

2)



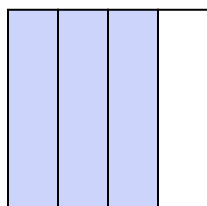
- A. one-fourth
B. one-half
C. four-fourths

3)



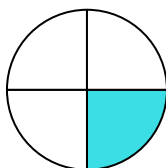
- A. four-fourths
B. two-halves
C. three-quarters

4)



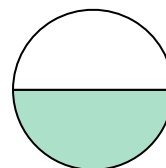
- A. four-fourths
B. three-quarters
C. one-half

5)




- A. two-halves
B. two-quarters
C. one-fourth

6)



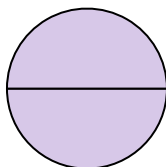
- A. one-half
B. two-quarters
C. two-halves

7)



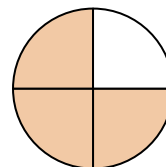
- A. two-halves
B. four-quarters
C. one-quarter

8)



- A. four-quarters
B. two-halves
C. one-half

9)



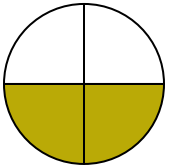
- A. one-half
B. four-fourths
C. three-quarters

1. _____
2. _____
3. _____
4. _____
5. _____
6. _____
7. _____
8. _____
9. _____



Determine which letter best describes the shaded portion.

1)




- A. three-fourths
B. two-fourths
C. two-halves

2)



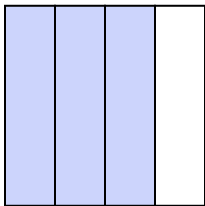
- A. one-fourth
B. one-half
C. four-fourths

3)



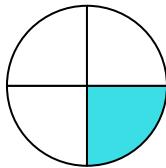
- A. four-fourths
B. two-halves
C. three-quarters

4)



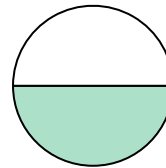
- A. four-fourths
B. three-quarters
C. one-half

5)



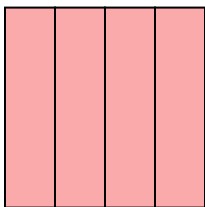
- A. two-halves
B. two-quarters
C. one-fourth

6)



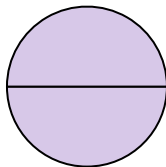
- A. one-half
B. two-quarters
C. two-halves

7)



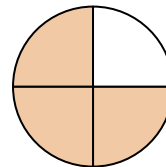
- A. two-halves
B. four-quarters
C. one-quarter

8)



- A. four-quarters
B. two-halves
C. one-half

9)



- A. one-half
B. four-fourths
C. three-quarters

Answers

1. **B**
2. **B**
3. **B**
4. **B**
5. **C**
6. **A**
7. **B**
8. **B**
9. **C**