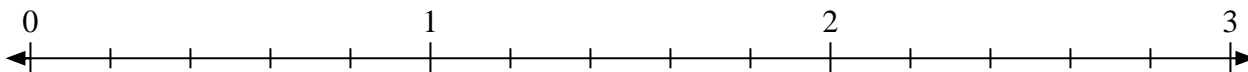


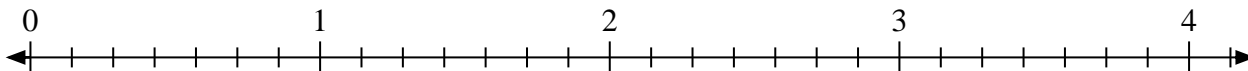


Solve each problem.

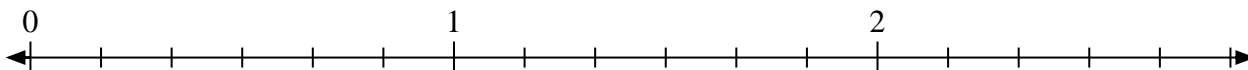
- 1) Mark the location of
- $\frac{8}{5}$



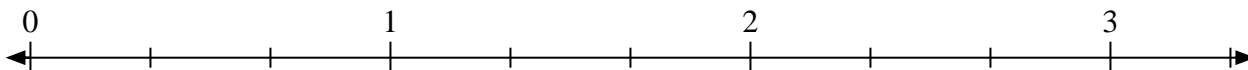
- 2) Mark the location of
- $\frac{14}{7}$




- 3) Mark the location of
- $\frac{10}{6}$



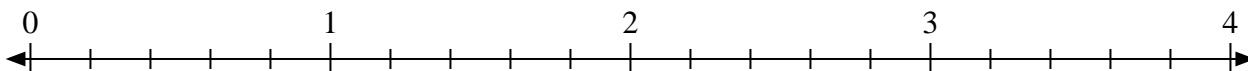
- 4) Mark the location of
- $\frac{7}{3}$



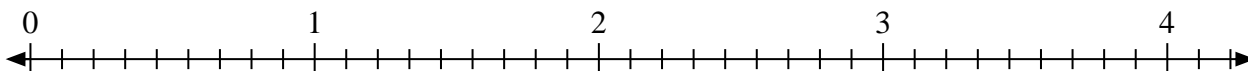
- 5) Mark the location of
- $\frac{3}{2}$



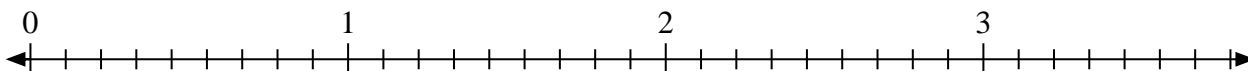
- 6) Mark the location of
- $\frac{11}{5}$



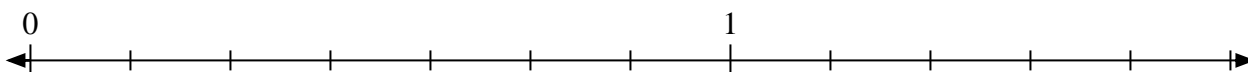
- 7) Mark the location of
- $\frac{15}{9}$




- 8) Mark the location of
- $\frac{21}{9}$



- 9) Mark the location of
- $\frac{8}{7}$



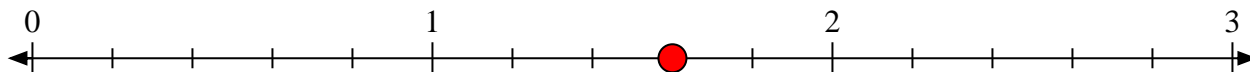
- 10) Mark the location of
- $\frac{6}{2}$



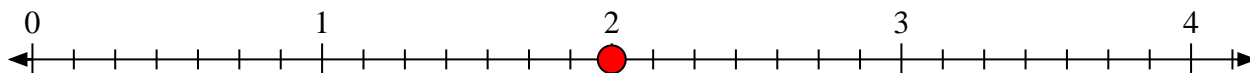


Solve each problem.

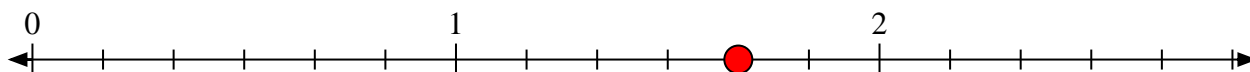
- 1) Mark the location of
- $\frac{8}{5}$



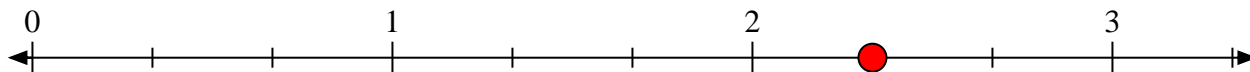
- 2) Mark the location of
- $\frac{14}{7}$




- 3) Mark the location of
- $\frac{10}{6}$



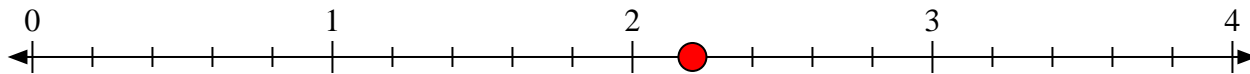
- 4) Mark the location of
- $\frac{7}{3}$



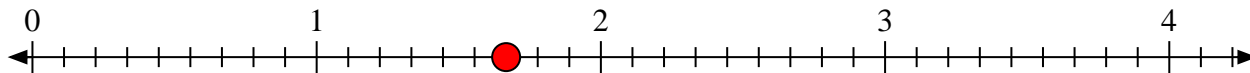
- 5) Mark the location of
- $\frac{3}{2}$



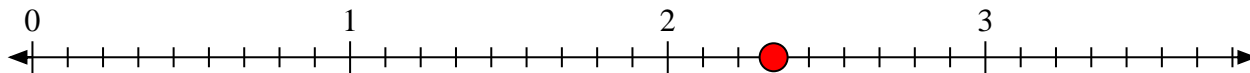
- 6) Mark the location of
- $\frac{11}{5}$



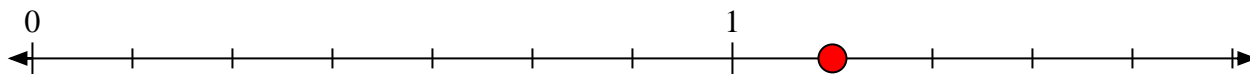
- 7) Mark the location of
- $\frac{15}{9}$



- 8) Mark the location of
- $\frac{21}{9}$



- 9) Mark the location of
- $\frac{8}{7}$



- 10) Mark the location of
- $\frac{6}{2}$

