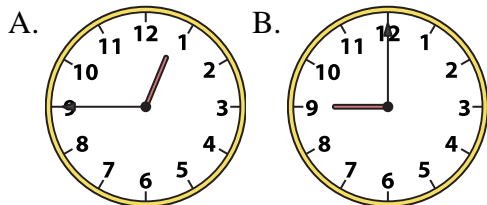




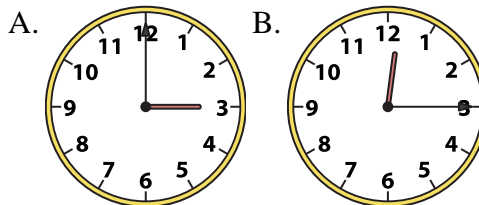
Determine which clock accurately shows the time.

Answers

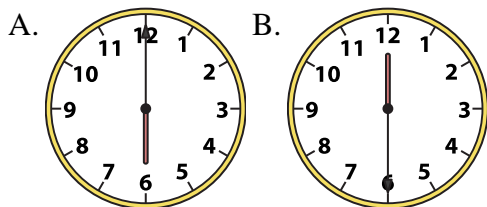
1) 9:00



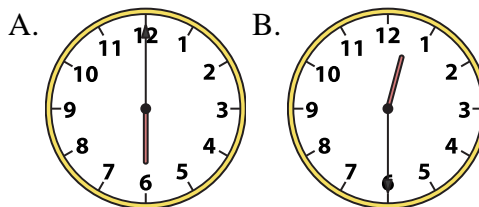
2) 12:15



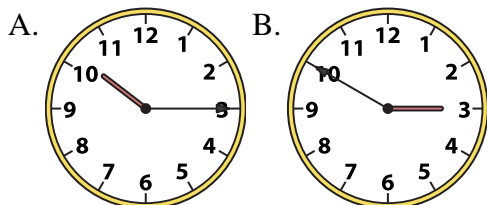
3) 6:00



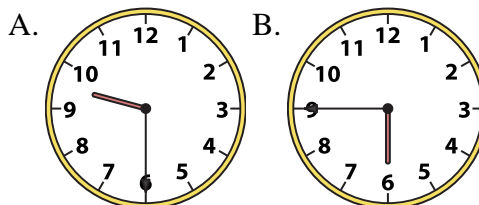
4) 12:30



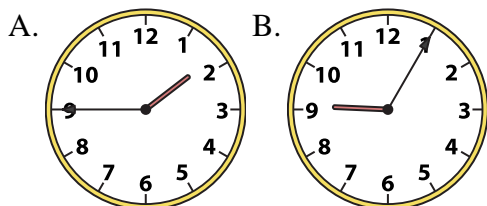
5) 10:15



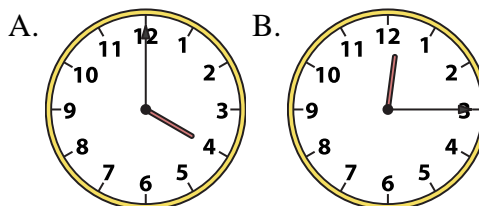
6) 9:30



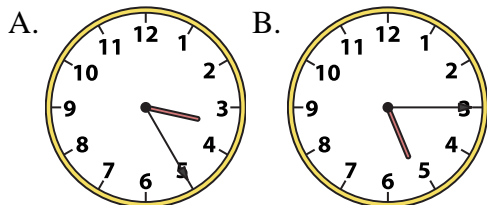
7) 1:45



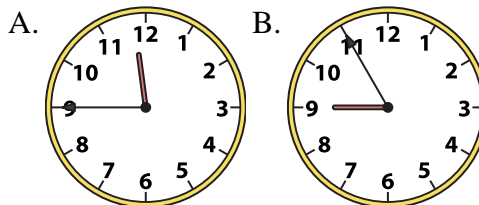
8) 12:15



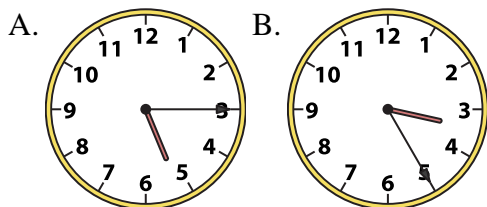
9) 5:15



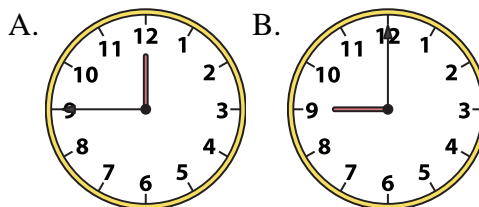
10) 11:45



11) 5:15



12) 9:00



1. _____
2. _____
3. _____
4. _____
5. _____
6. _____
7. _____
8. _____
9. _____
10. _____
11. _____
12. _____

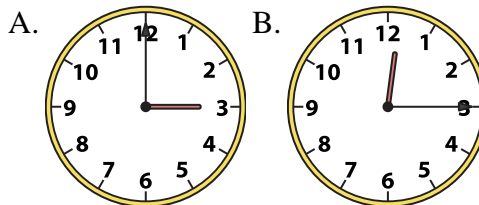
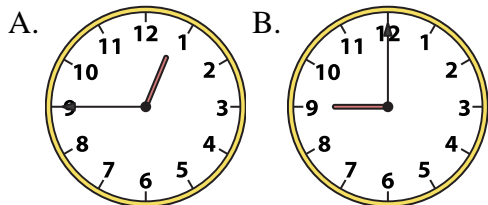


Determine which clock accurately shows the time.

Answers

1) 9:00

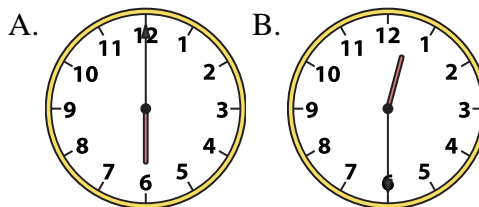
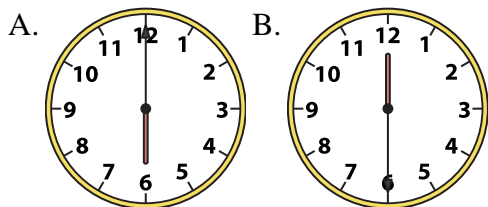
2) 12:15



1. **B**

3) 6:00

4) 12:30



2. **B**

3. **A**

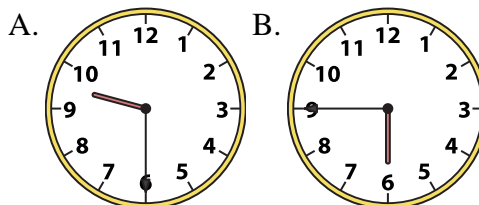
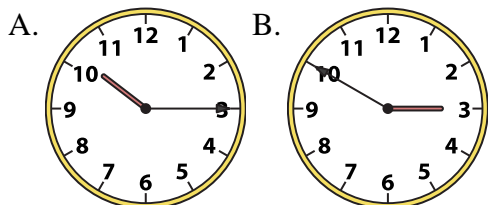
4. **B**

5. **A**

6. **A**

5) 10:15

6) 9:30



7. **A**

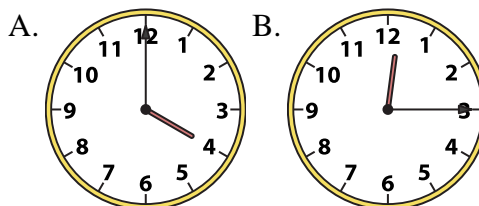
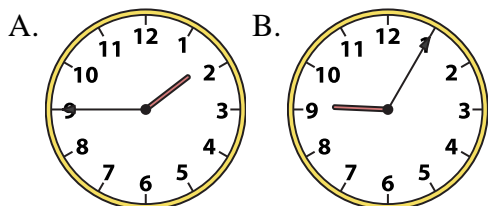
8. **B**

9. **B**

10. **A**

7) 1:45

8) 12:15

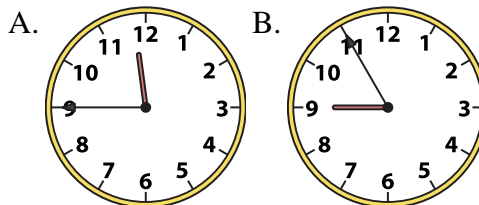
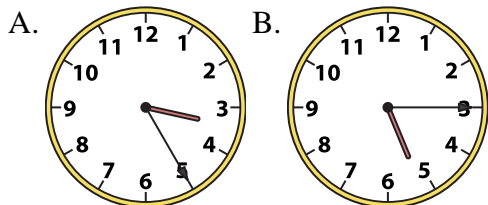


11. **A**

12. **B**

9) 5:15

10) 11:45



11) 5:15

12) 9:00

