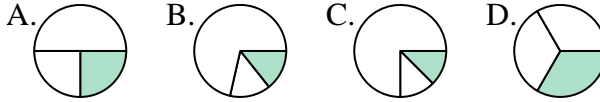




Determine which letter best represents each fraction.

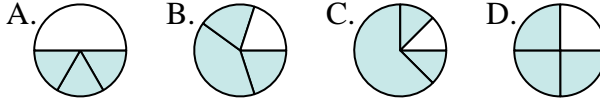
**Answers**

1) Which choice best represents  $\frac{1}{3}$ ?



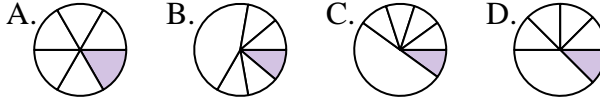
1. \_\_\_\_\_

2) Which choice best represents  $\frac{3}{4}$ ?



2. \_\_\_\_\_

3) Which choice best represents  $\frac{1}{6}$ ?



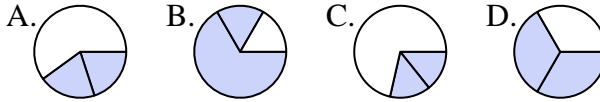
3. \_\_\_\_\_

4) Which choice best represents  $\frac{5}{8}$ ?



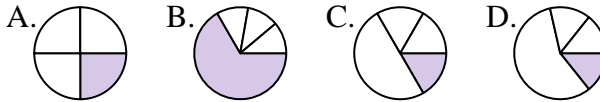
4. \_\_\_\_\_

5) Which choice best represents  $\frac{2}{3}$ ?



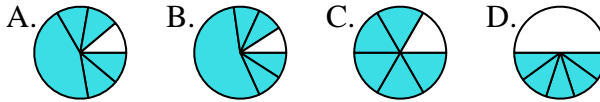
5. \_\_\_\_\_

6) Which choice best represents  $\frac{1}{4}$ ?



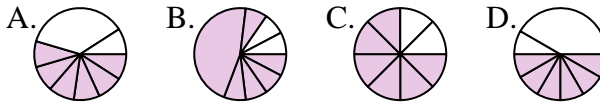
6. \_\_\_\_\_

7) Which choice best represents  $\frac{5}{6}$ ?



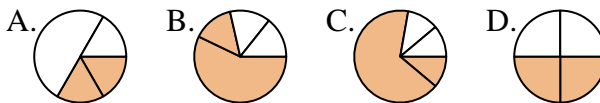
7. \_\_\_\_\_

8) Which choice best represents  $\frac{6}{8}$ ?



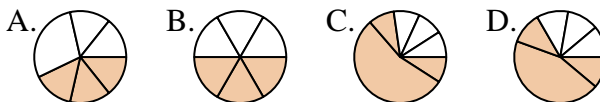
8. \_\_\_\_\_

9) Which choice best represents  $\frac{2}{4}$ ?



9. \_\_\_\_\_

10) Which choice best represents  $\frac{3}{6}$ ?



10. \_\_\_\_\_

11) Which choice best represents  $\frac{2}{8}$ ?



11. \_\_\_\_\_

12) Which choice best represents  $\frac{4}{6}$ ?



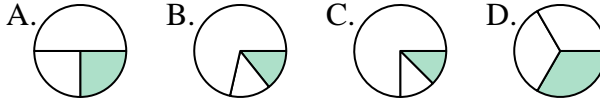
12. \_\_\_\_\_



Determine which letter best represents each fraction.

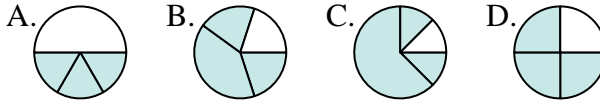
**Answers**

1) Which choice best represents  $\frac{1}{3}$ ?



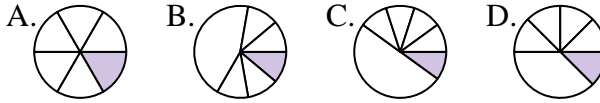
1.     **D**    

2) Which choice best represents  $\frac{3}{4}$ ?



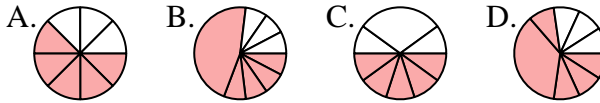
2.     **D**    

3) Which choice best represents  $\frac{1}{6}$ ?



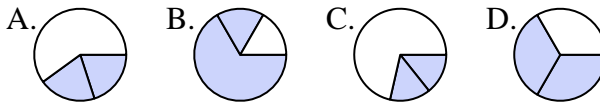
3.     **A**    

4) Which choice best represents  $\frac{5}{8}$ ?



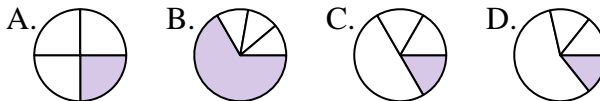
4.     **A**    

5) Which choice best represents  $\frac{2}{3}$ ?



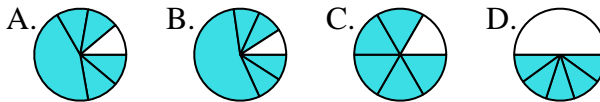
5.     **D**    

6) Which choice best represents  $\frac{1}{4}$ ?



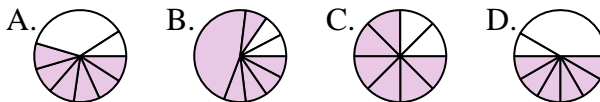
6.     **A**    

7) Which choice best represents  $\frac{5}{6}$ ?



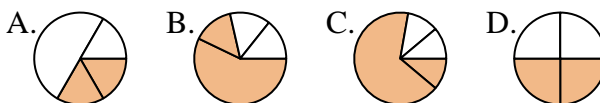
7.     **C**    

8) Which choice best represents  $\frac{6}{8}$ ?



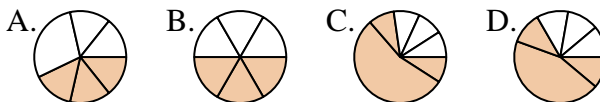
8.     **C**    

9) Which choice best represents  $\frac{2}{4}$ ?



9.     **D**    

10) Which choice best represents  $\frac{3}{6}$ ?



10.     **B**    

11) Which choice best represents  $\frac{2}{8}$ ?



11.     **C**    

12) Which choice best represents  $\frac{4}{6}$ ?



12.     **C**