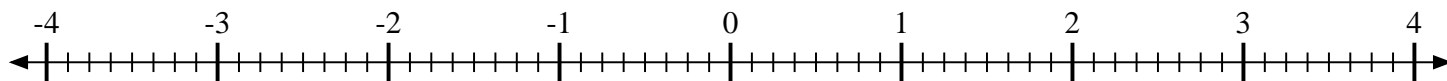
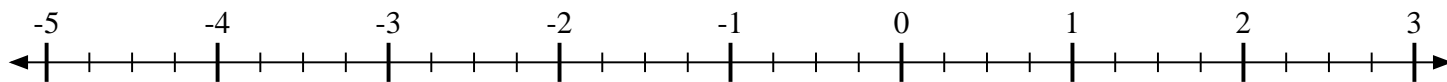


**Mark each location described.**

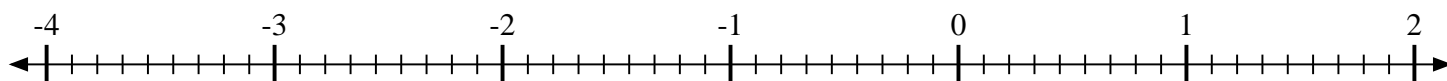
- 1) Mark the location of
- $-1\frac{3}{8}$



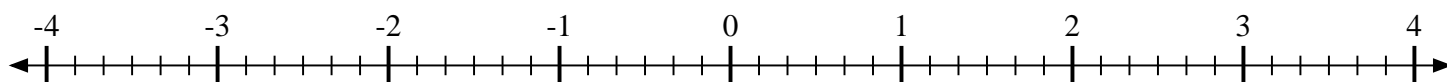
- 2) Mark the location of
- $-2\frac{3}{4}$



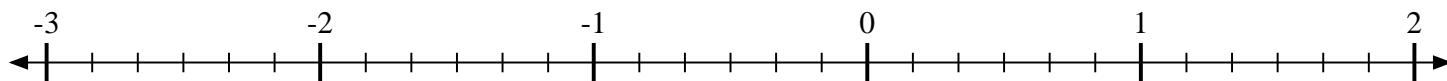
- 3) Mark the location of
- $1\frac{8}{9}$



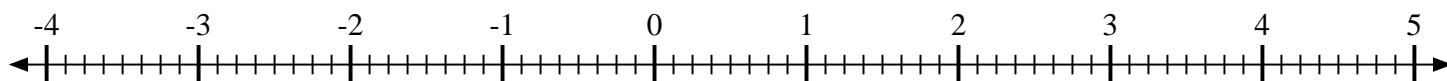
- 4) Mark the location of
- $-1\frac{5}{6}$



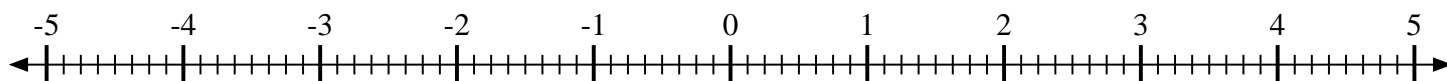
- 5) Mark the location of
- $-1\frac{3}{6}$



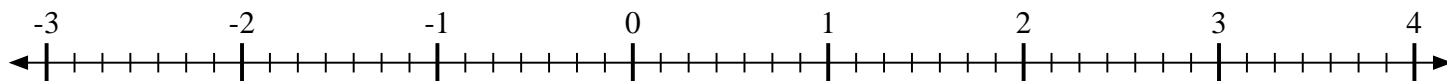
- 6) Mark the location of
- $-1\frac{2}{8}$



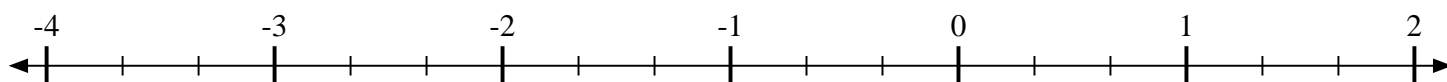
- 7) Mark the location of
- $2\frac{2}{8}$



- 8) Mark the location of
- $-2\frac{4}{7}$



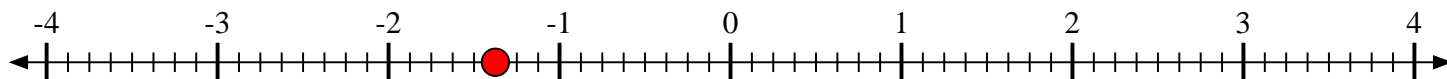
- 9) Mark the location of
- $-2\frac{2}{3}$



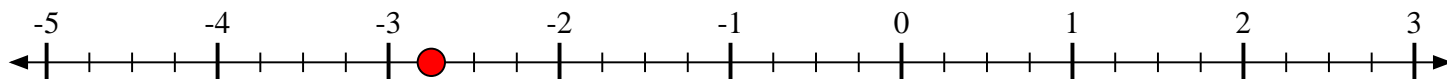


Mark each location described.

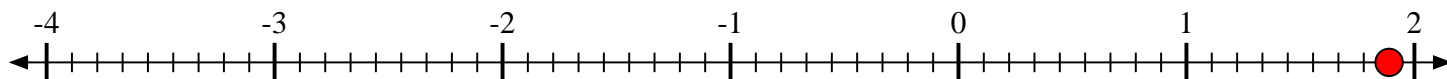
- 1) Mark the location of
- $-1\frac{3}{8}$



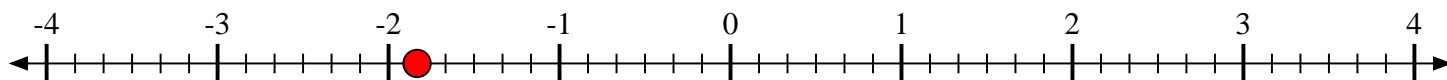
- 2) Mark the location of
- $-2\frac{3}{4}$



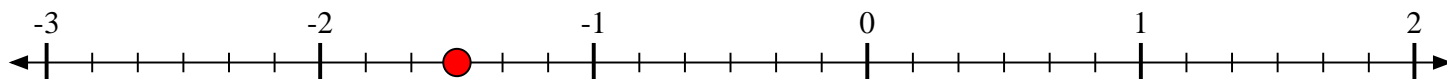
- 3) Mark the location of
- $1\frac{8}{9}$



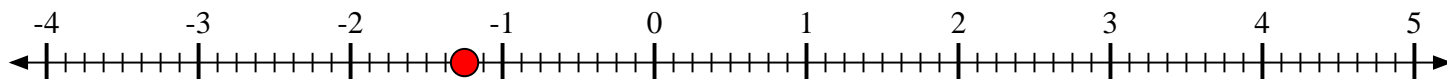
- 4) Mark the location of
- $-1\frac{5}{6}$



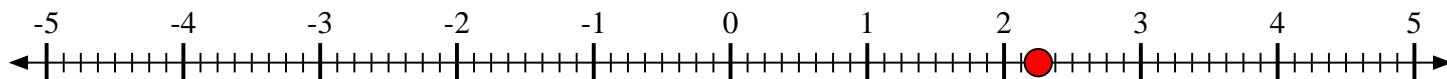
- 5) Mark the location of
- $-1\frac{3}{6}$



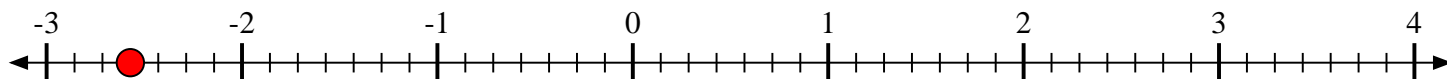
- 6) Mark the location of
- $-1\frac{2}{8}$



- 7) Mark the location of
- $2\frac{2}{8}$



- 8) Mark the location of
- $-2\frac{4}{7}$



- 9) Mark the location of
- $-2\frac{2}{3}$

