



Convert the fraction to a decimal.

$$\frac{9}{10}$$

$$\frac{63}{100}$$

Converting from a fraction to a decimal is simple as long as you remember the place values.

The example above is nine-tenths. Lets look at how we'd write that as a decimal.

We do the same thing for the problem above only make sure we're in the hundredths place.

tens
ones
tenths
hundredths

tens
ones
tenths
hundredths

tens
ones
tenths
hundredths

Answers

 Ex. **0.12**

1. _____

2. _____

3. _____

4. _____

5. _____

6. _____

7. _____

8. _____

9. _____

10. _____

11. _____

12. _____

13. _____

14. _____

15. _____

16. _____

17. _____

18. _____

19. _____

20. _____

Ex) $\frac{12}{100} = 0.12$

1) $\frac{8}{10} =$

2) $\frac{5}{10} =$

3) $\frac{51}{100} =$

4) $\frac{6}{10} =$

5) $\frac{8}{100} =$

6) $\frac{7}{10} =$

7) $\frac{1}{10} =$

8) $\frac{3}{10} =$

9) $\frac{59}{100} =$

10) $\frac{4}{10} =$

11) $\frac{5}{100} =$

12) $\frac{9}{100} =$

13) $\frac{58}{100} =$

14) $\frac{30}{100} =$

15) $\frac{4}{100} =$

16) $\frac{49}{100} =$

17) $\frac{1}{100} =$

18) $\frac{17}{100} =$


19) $\frac{7}{100} =$

20) $\frac{2}{100} =$



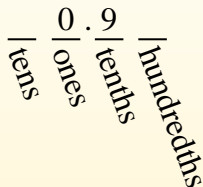
Convert the fraction to a decimal.

Converting from a fraction to a decimal is simple as long as you remember the place values.



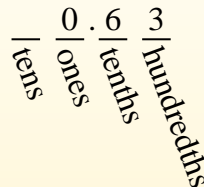
$$\frac{9}{10}$$

The example above is nine-tenths. Lets look at how we'd write that as a decimal.



$$\frac{63}{100}$$

We do the same thing for the problem above only make sure we're in the hundredths place.



Answers

Ex) $\frac{12}{100} = 0.12$

1) $\frac{8}{10} = 0.8$

2) $\frac{5}{10} = 0.5$

3) $\frac{51}{100} = 0.51$

4) $\frac{6}{10} = 0.6$

5) $\frac{8}{100} = 0.08$

6) $\frac{7}{10} = 0.7$

7) $\frac{1}{10} = 0.1$

8) $\frac{3}{10} = 0.3$

9) $\frac{59}{100} = 0.59$

10) $\frac{4}{10} = 0.4$

11) $\frac{5}{100} = 0.05$

12) $\frac{9}{100} = 0.09$

13) $\frac{58}{100} = 0.58$

14) $\frac{30}{100} = 0.30$

15) $\frac{4}{100} = 0.04$

16) $\frac{49}{100} = 0.49$

17) $\frac{1}{100} = 0.01$

18) $\frac{17}{100} = 0.17$

19) $\frac{7}{100} = 0.07$

20) $\frac{2}{100} = 0.02$

Ex. **0.12**

1. **0.8**

2. **0.5**

3. **0.51**

4. **0.6**

5. **0.08**

6. **0.7**

7. **0.1**

8. **0.3**

9. **0.59**

10. **0.4**

11. **0.05**

12. **0.09**

13. **0.58**

14. **0.30**

15. **0.04**

16. **0.49**

17. **0.01**

18. **0.17**

19. **0.07**

20. **0.02**