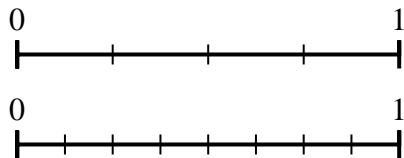




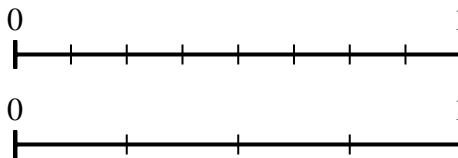
Use the number lines to answer the questions.

Answers

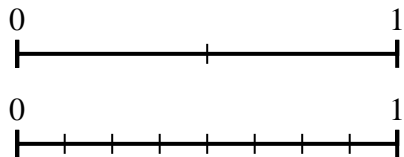
1) Using the number lines shown, what is the equivalent fraction to  $\frac{4}{4}$ ?



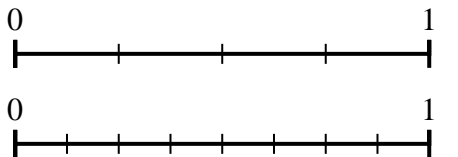
2) Using the number lines shown, what is the equivalent fraction to  $\frac{4}{8}$ ?



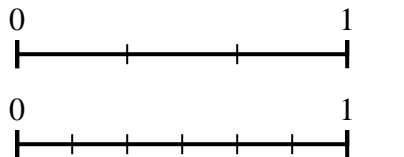
3) Using the number lines shown, what is the equivalent fraction to  $\frac{2}{2}$ ?



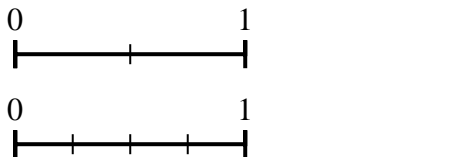
4) Using the number lines shown, what is the equivalent fraction to  $\frac{1}{4}$ ?



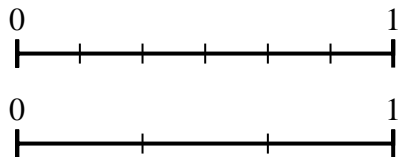
5) Using the number lines shown, what is the equivalent fraction to  $\frac{3}{3}$ ?



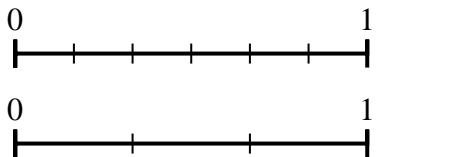
6) Using the number lines shown, what is the equivalent fraction to  $\frac{1}{2}$ ?



7) Using the number lines shown, what is the equivalent fraction to  $\frac{2}{6}$ ?



8) Using the number lines shown, what is the equivalent fraction to  $\frac{4}{6}$ ?

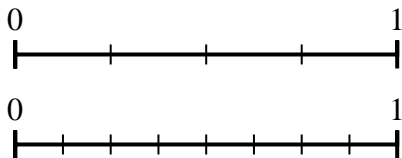


1. \_\_\_\_\_
2. \_\_\_\_\_
3. \_\_\_\_\_
4. \_\_\_\_\_
5. \_\_\_\_\_
6. \_\_\_\_\_
7. \_\_\_\_\_
8. \_\_\_\_\_

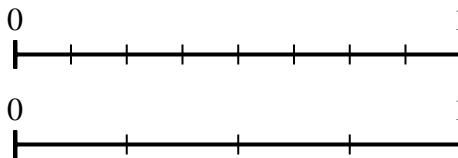


Use the number lines to answer the questions.

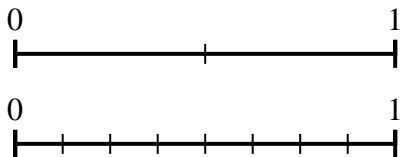
1) Using the number lines shown, what is the equivalent fraction to  $\frac{4}{4}$ ?



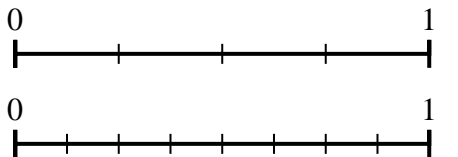
2) Using the number lines shown, what is the equivalent fraction to  $\frac{4}{8}$ ?



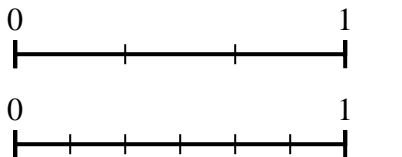
3) Using the number lines shown, what is the equivalent fraction to  $\frac{2}{2}$ ?



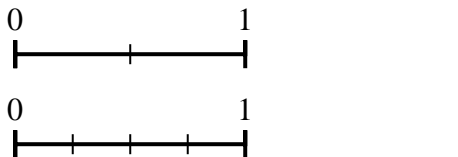
4) Using the number lines shown, what is the equivalent fraction to  $\frac{1}{4}$ ?



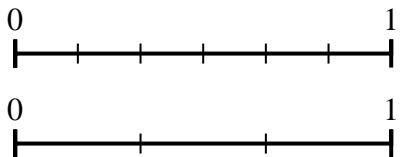
5) Using the number lines shown, what is the equivalent fraction to  $\frac{3}{3}$ ?



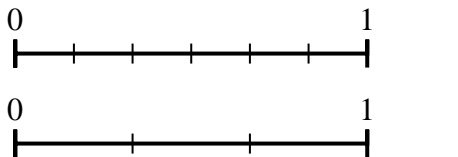
6) Using the number lines shown, what is the equivalent fraction to  $\frac{1}{2}$ ?



7) Using the number lines shown, what is the equivalent fraction to  $\frac{2}{6}$ ?



8) Using the number lines shown, what is the equivalent fraction to  $\frac{4}{6}$ ?



**Answers**

1.  $\frac{8}{8}$

2.  $\frac{2}{4}$

3.  $\frac{8}{8}$

4.  $\frac{2}{8}$

5.  $\frac{6}{6}$

6.  $\frac{2}{4}$

7.  $\frac{1}{3}$

8.  $\frac{2}{3}$