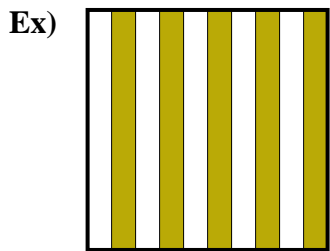


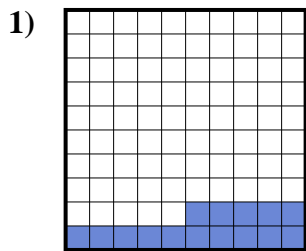


Determine the value written as a fraction , decimal & a percent.

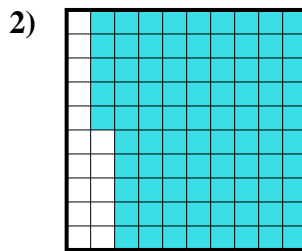
**Answers**



fraction  $\frac{5}{10}$   
 decimal 0.5  
 percent 50



fraction \_\_\_\_\_  
 decimal \_\_\_\_\_  
 percent \_\_\_\_\_



fraction \_\_\_\_\_  
 decimal \_\_\_\_\_  
 percent \_\_\_\_\_

Ex.  $\frac{5}{10}$  0.5 50%

1. \_\_\_\_\_

2. \_\_\_\_\_

3. \_\_\_\_\_

4. \_\_\_\_\_

5. \_\_\_\_\_

6. \_\_\_\_\_

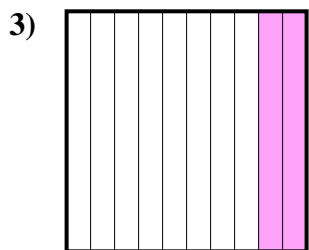
7. \_\_\_\_\_

8. \_\_\_\_\_

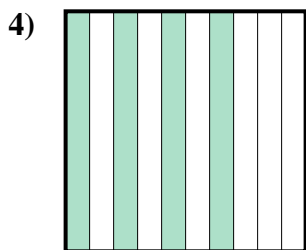
9. \_\_\_\_\_

10. \_\_\_\_\_

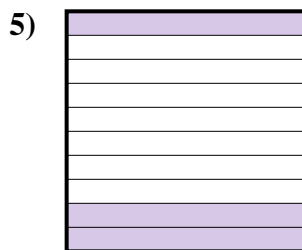
11. \_\_\_\_\_



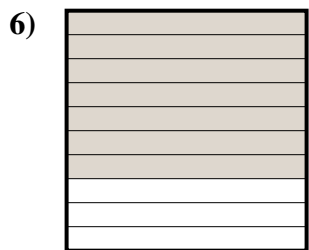
fraction \_\_\_\_\_  
 decimal \_\_\_\_\_  
 percent \_\_\_\_\_



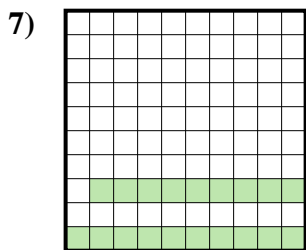
fraction \_\_\_\_\_  
 decimal \_\_\_\_\_  
 percent \_\_\_\_\_



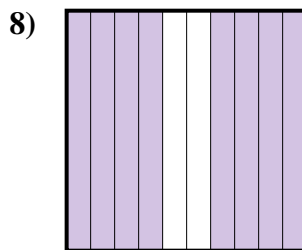
fraction \_\_\_\_\_  
 decimal \_\_\_\_\_  
 percent \_\_\_\_\_



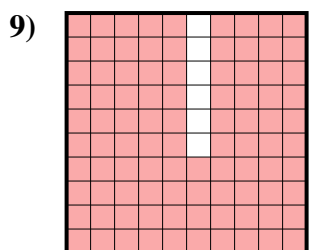
fraction \_\_\_\_\_  
 decimal \_\_\_\_\_  
 percent \_\_\_\_\_



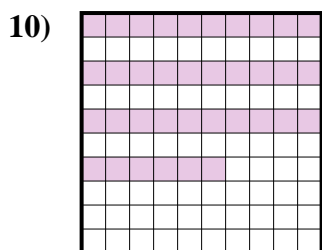
fraction \_\_\_\_\_  
 decimal \_\_\_\_\_  
 percent \_\_\_\_\_



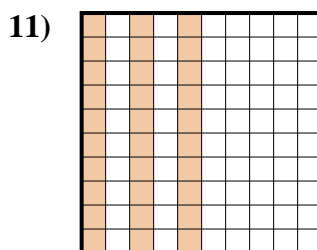
fraction \_\_\_\_\_  
 decimal \_\_\_\_\_  
 percent \_\_\_\_\_



fraction \_\_\_\_\_  
 decimal \_\_\_\_\_  
 percent \_\_\_\_\_



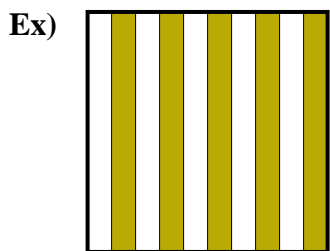
fraction \_\_\_\_\_  
 decimal \_\_\_\_\_  
 percent \_\_\_\_\_



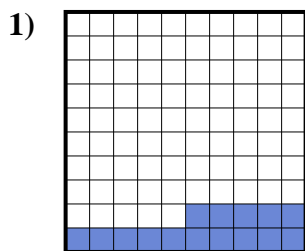
fraction \_\_\_\_\_  
 decimal \_\_\_\_\_  
 percent \_\_\_\_\_



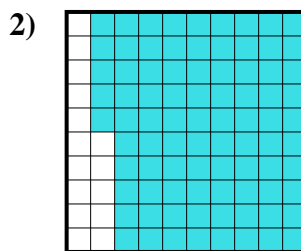
Determine the value written as a fraction , decimal & a percent.



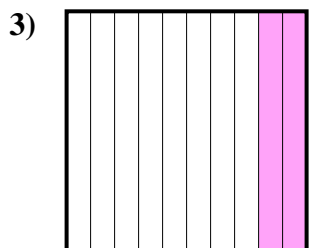
fraction  $\frac{5}{10}$   
 decimal  $0.5$   
 percent  $50$



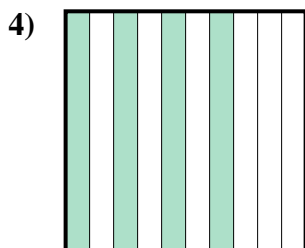
fraction  $\frac{15}{100}$   
 decimal  $0.15$   
 percent  $15$



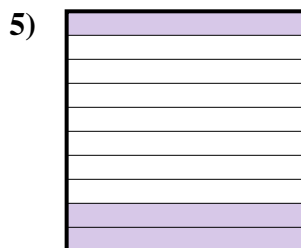
fraction  $\frac{85}{100}$   
 decimal  $0.85$   
 percent  $85$



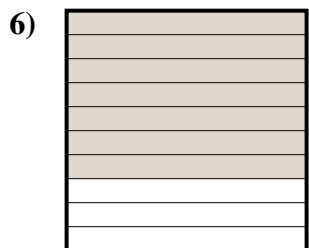
fraction  $\frac{2}{10}$   
 decimal  $0.2$   
 percent  $20$



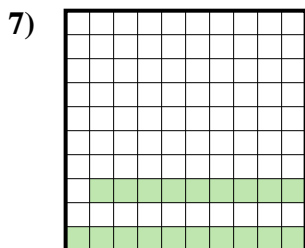
fraction  $\frac{4}{10}$   
 decimal  $0.4$   
 percent  $40$



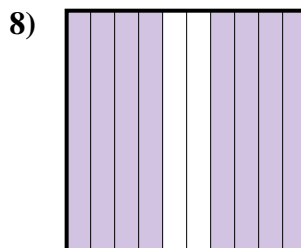
fraction  $\frac{3}{10}$   
 decimal  $0.3$   
 percent  $30$



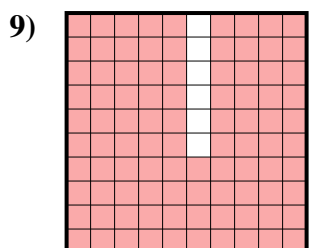
fraction  $\frac{7}{10}$   
 decimal  $0.7$   
 percent  $70$



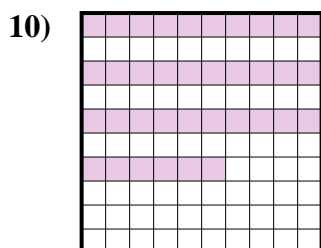
fraction  $\frac{19}{100}$   
 decimal  $0.19$   
 percent  $19$



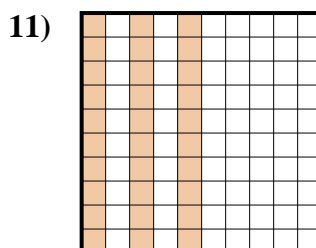
fraction  $\frac{8}{10}$   
 decimal  $0.8$   
 percent  $80$



fraction  $\frac{94}{100}$   
 decimal  $0.94$   
 percent  $94$



fraction  $\frac{36}{100}$   
 decimal  $0.36$   
 percent  $36$



fraction  $\frac{30}{100}$   
 decimal  $0.30$   
 percent  $30$

**Answers**

- Ex.  $\frac{5}{10}$  **0.5** **50%**  
 1.  $\frac{15}{100}$  **0.15** **15%**  
 2.  $\frac{85}{100}$  **0.85** **85%**  
 3.  $\frac{2}{10}$  **0.2** **20%**  
 4.  $\frac{4}{10}$  **0.4** **40%**  
 5.  $\frac{3}{10}$  **0.3** **30%**  
 6.  $\frac{7}{10}$  **0.7** **70%**  
 7.  $\frac{19}{100}$  **0.19** **19%**  
 8.  $\frac{8}{10}$  **0.8** **80%**  
 9.  $\frac{94}{100}$  **0.94** **94%**  
 10.  $\frac{36}{100}$  **0.36** **36%**  
 11.  $\frac{30}{100}$  **0.30** **30%**