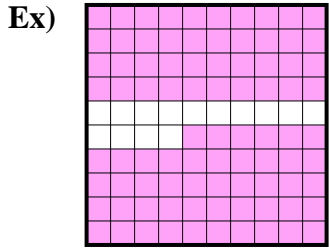


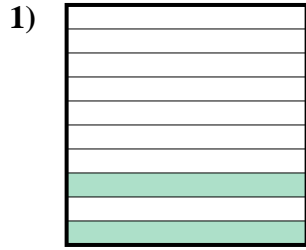


Determine the value written as a fraction , decimal & a percent.

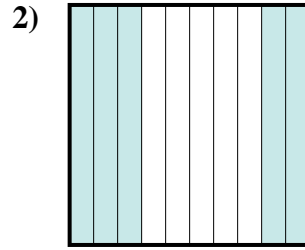
Answers



fraction $\frac{86}{100}$
 decimal 0.86
 percent 86



fraction _____
 decimal _____
 percent _____



fraction _____
 decimal _____
 percent _____

Ex. $\frac{86}{100}$ **0.86** **86%**

1. _____

2. _____

3. _____

4. _____

5. _____

6. _____

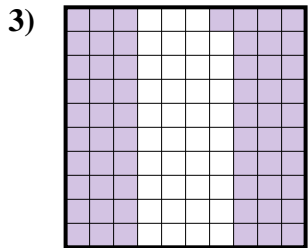
7. _____

8. _____

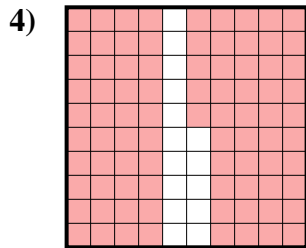
9. _____

10. _____

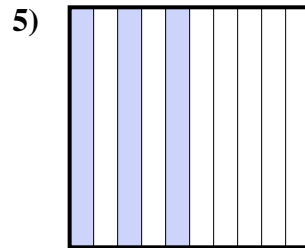
11. _____



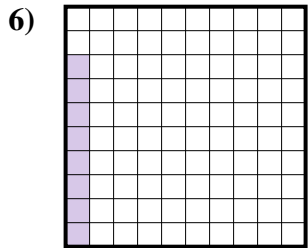
fraction _____
 decimal _____
 percent _____



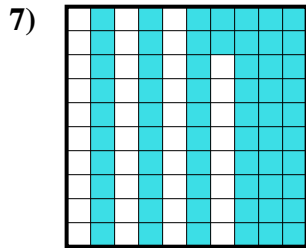
fraction _____
 decimal _____
 percent _____



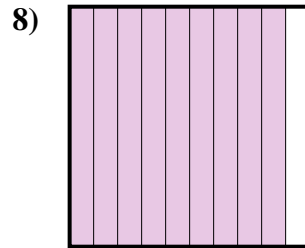
fraction _____
 decimal _____
 percent _____



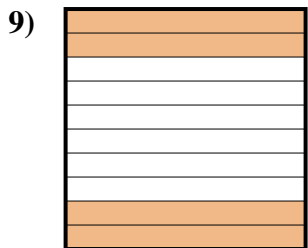
fraction _____
 decimal _____
 percent _____



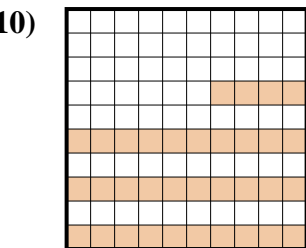
fraction _____
 decimal _____
 percent _____




fraction _____
 decimal _____
 percent _____



fraction _____
 decimal _____
 percent _____



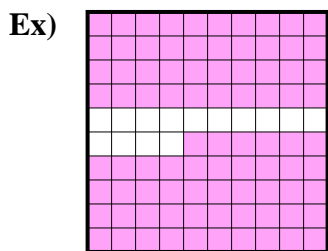
fraction _____
 decimal _____
 percent _____




fraction _____
 decimal _____
 percent _____



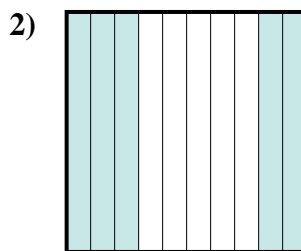
Determine the value written as a fraction , decimal & a percent.



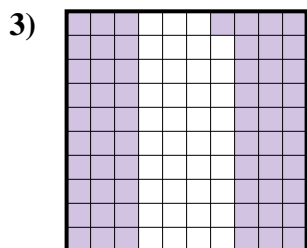
fraction $\frac{86}{100}$
 decimal 0.86
 percent 86



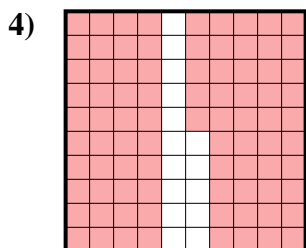
fraction $\frac{2}{10}$
 decimal 0.2
 percent 20



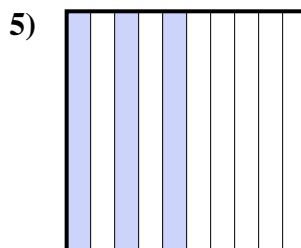
fraction $\frac{5}{10}$
 decimal 0.5
 percent 50



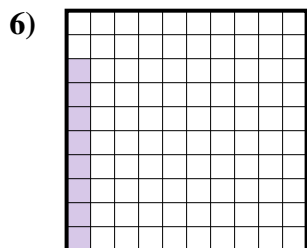
fraction $\frac{61}{100}$
 decimal 0.61
 percent 61



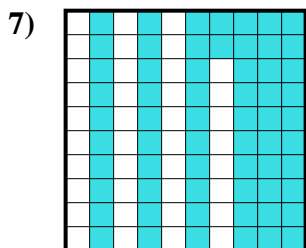
fraction $\frac{85}{100}$
 decimal 0.85
 percent 85



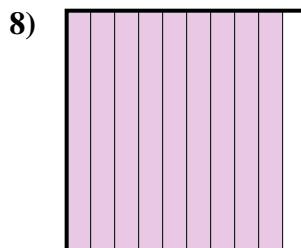
fraction $\frac{3}{10}$
 decimal 0.3
 percent 30



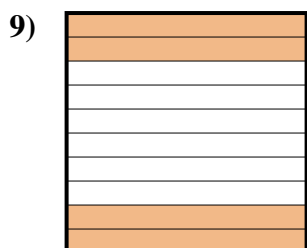
fraction $\frac{8}{100}$
 decimal 0.08
 percent 8



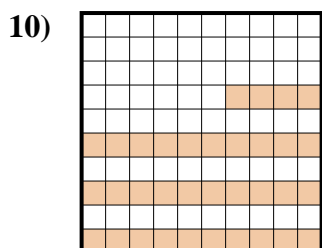
fraction $\frac{62}{100}$
 decimal 0.62
 percent 62



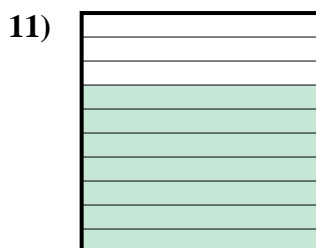
fraction $\frac{9}{10}$
 decimal 0.9
 percent 90



fraction $\frac{4}{10}$
 decimal 0.4
 percent 40



fraction $\frac{34}{100}$
 decimal 0.34
 percent 34



fraction $\frac{7}{10}$
 decimal 0.7
 percent 70

Answers

| | | | |
|-----|------------------|-------------|------------|
| Ex. | $\frac{86}{100}$ | 0.86 | 86% |
| 1. | $\frac{2}{10}$ | 0.2 | 20% |
| 2. | $\frac{5}{10}$ | 0.5 | 50% |
| 3. | $\frac{61}{100}$ | 0.61 | 61% |
| 4. | $\frac{85}{100}$ | 0.85 | 85% |
| 5. | $\frac{3}{10}$ | 0.3 | 30% |
| 6. | $\frac{8}{100}$ | 0.08 | 8% |
| 7. | $\frac{62}{100}$ | 0.62 | 62% |
| 8. | $\frac{9}{10}$ | 0.9 | 90% |
| 9. | $\frac{4}{10}$ | 0.4 | 40% |
| 10. | $\frac{34}{100}$ | 0.34 | 34% |
| 11. | $\frac{7}{10}$ | 0.7 | 70% |