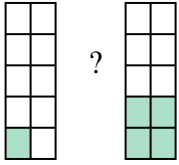




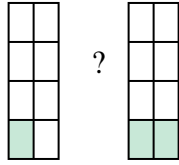
Compare the size of the fractions using $<$, $>$ or $=$.

Ex)



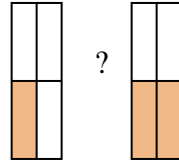
?

1)



?

2)



?

Answers

Ex. $\frac{1}{10}$ $<$ $\frac{4}{10}$

1. _____

2. _____

3. _____

4. _____

5. _____

6. _____

7. _____

8. _____

9. _____

10. _____

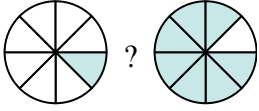
11. _____

12. _____

13. _____

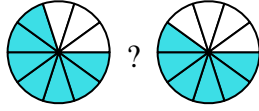
14. _____

3)



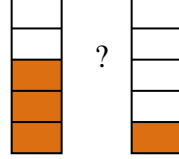
?

4)



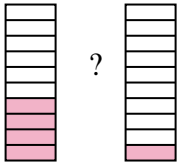
?

5)



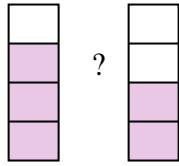
?

6)



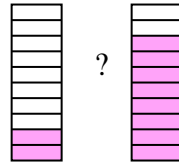
?

7)



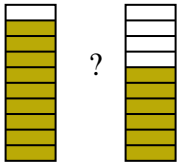
?

8)



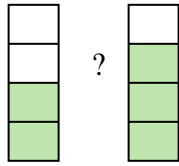
?

9)



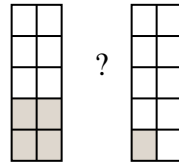
?

10)



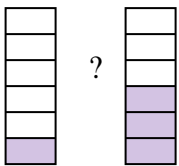
?

11)



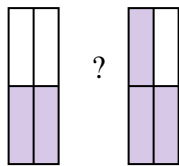
?

12)



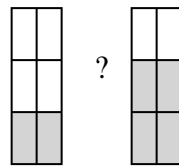
?

13)



?

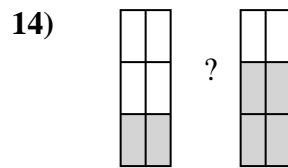
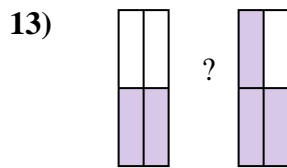
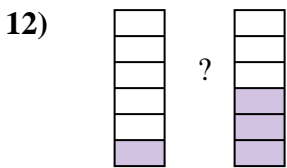
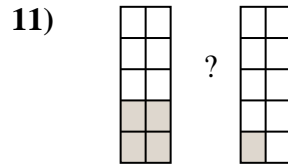
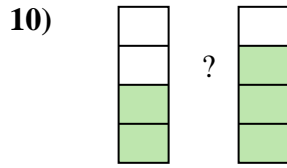
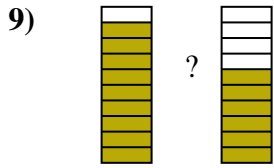
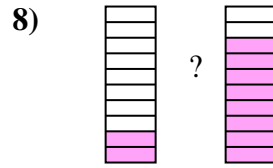
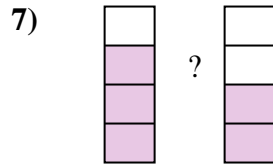
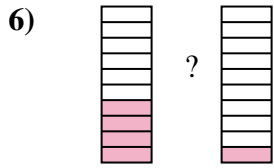
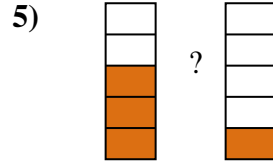
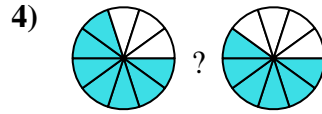
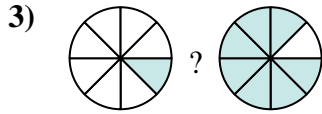
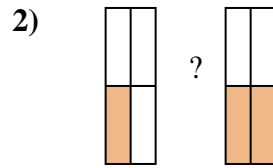
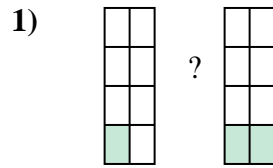
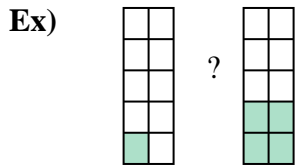
14)



?



Compare the size of the fractions using $<$, $>$ or $=$.



Answers

Ex. $\frac{1}{10} < \frac{4}{10}$

1. $\frac{1}{8} < \frac{2}{8}$

2. $\frac{1}{4} < \frac{2}{4}$

3. $\frac{1}{8} < \frac{7}{8}$

4. $\frac{7}{10} > \frac{6}{10}$

5. $\frac{3}{5} > \frac{1}{5}$

6. $\frac{4}{10} > \frac{1}{10}$

7. $\frac{3}{4} > \frac{2}{4}$

8. $\frac{2}{10} < \frac{8}{10}$

9. $\frac{9}{10} > \frac{6}{10}$

10. $\frac{2}{4} < \frac{3}{4}$

11. $\frac{4}{10} > \frac{1}{10}$

12. $\frac{1}{6} < \frac{3}{6}$

13. $\frac{2}{4} < \frac{3}{4}$

14. $\frac{2}{6} < \frac{4}{6}$