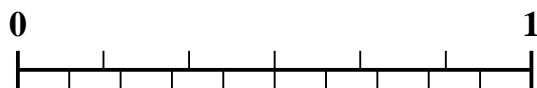


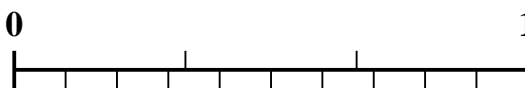


Use the number line to solve each problem.


1) Which amount is larger, $\frac{2}{6}$ or 0.15?



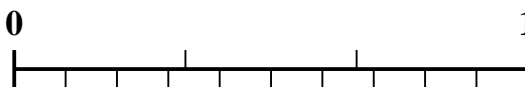
2) Which amount is larger, $\frac{1}{3}$ or 0.52?



3) Which amount is larger, $\frac{3}{5}$ or 0.48?



4) Which amount is larger, $\frac{2}{3}$ or 0.87?



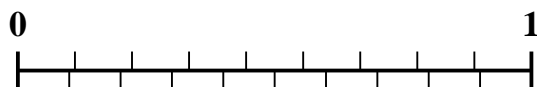
5) Which amount is larger, $\frac{5}{7}$ or 0.57?



6) Which amount is larger, $\frac{4}{7}$ or 0.75?



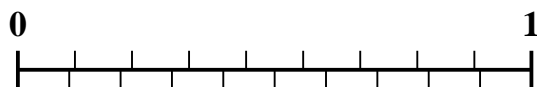
7) Which amount is larger, $\frac{3}{9}$ or 0.15?



8) Which amount is larger, $\frac{3}{4}$ or 0.9?



9) Which amount is larger, $\frac{7}{9}$ or 0.89?



10) Which amount is larger, $\frac{3}{10}$ or 0.15?



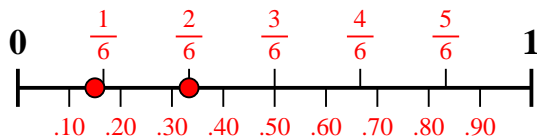
Answers

1. _____
2. _____
3. _____
4. _____
5. _____
6. _____
7. _____
8. _____
9. _____
10. _____

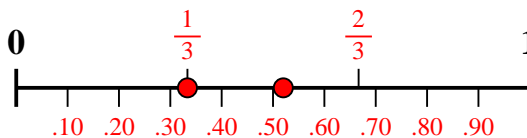


Use the number line to solve each problem.

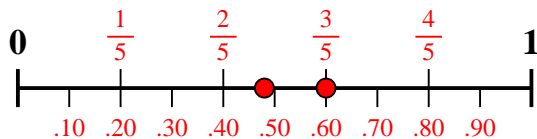
1) Which amount is larger, $\frac{2}{6}$ or 0.15?



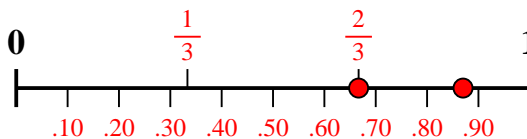
2) Which amount is larger, $\frac{1}{3}$ or 0.52?



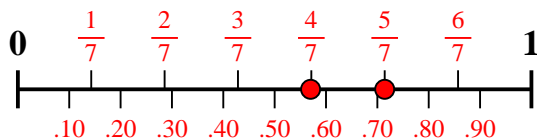
3) Which amount is larger, $\frac{3}{5}$ or 0.48?



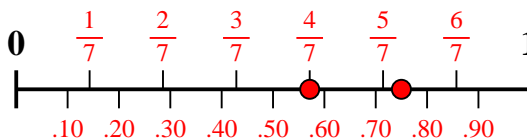
4) Which amount is larger, $\frac{2}{3}$ or 0.87?



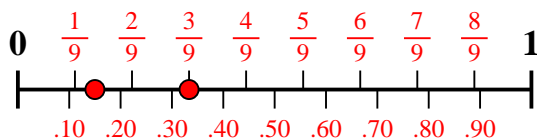
5) Which amount is larger, $\frac{5}{7}$ or 0.57?



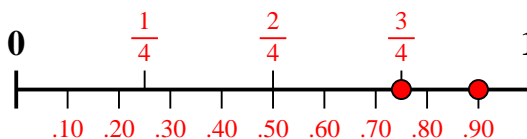
6) Which amount is larger, $\frac{4}{7}$ or 0.75?



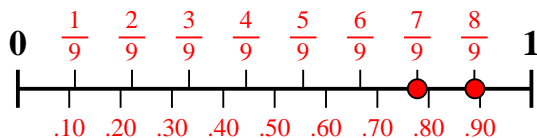
7) Which amount is larger, $\frac{3}{9}$ or 0.15?



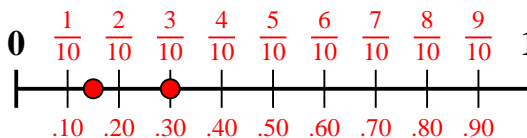
8) Which amount is larger, $\frac{3}{4}$ or 0.9?



9) Which amount is larger, $\frac{7}{9}$ or 0.89?



10) Which amount is larger, $\frac{3}{10}$ or 0.15?



Answers

1. $\frac{2}{6}$
2. **0.52**
3. $\frac{3}{5}$
4. **0.87**
5. $\frac{5}{7}$
6. **0.75**
7. $\frac{3}{9}$
8. **0.9**
9. **0.89**
10. $\frac{3}{10}$