




Match each equation to the answer and write the answer.


Answers

Ex) $\frac{1}{5} + \frac{1}{5}$




Ex. E

1) $\frac{1}{10} + \frac{1}{10} + \frac{1}{10} + \frac{1}{10} + \frac{1}{10} + \frac{1}{10} + \frac{1}{10}$



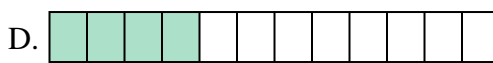
1. _____

2) $\frac{1}{12} + \frac{1}{12} + \frac{1}{12} + \frac{1}{12}$




2. _____

3) $\frac{1}{6} + \frac{1}{6}$




3. _____

4) $\frac{1}{8} + \frac{1}{8} + \frac{1}{8} + \frac{1}{8} + \frac{1}{8} + \frac{1}{8} + \frac{1}{8}$



4. _____

5) $\frac{1}{10} + \frac{1}{10} + \frac{1}{10} + \frac{1}{10} + \frac{1}{10} + \frac{1}{10}$




5. _____

6) $\frac{1}{5} + \frac{1}{5} + \frac{1}{5} + \frac{1}{5}$




6. _____

7) $\frac{1}{10} + \frac{1}{10} + \frac{1}{10} + \frac{1}{10}$



7. _____

8) $\frac{1}{4} + \frac{1}{4}$



8. _____

9) $\frac{1}{3} + \frac{1}{3}$




9. _____

10) $\frac{1}{8} + \frac{1}{8} + \frac{1}{8} + \frac{1}{8} + \frac{1}{8}$



10. _____

11) $\frac{1}{4} + \frac{1}{4} + \frac{1}{4}$




11. _____

12) $\frac{1}{10} + \frac{1}{10} + \frac{1}{10} + \frac{1}{10} + \frac{1}{10}$



12. _____

13) $\frac{1}{8} + \frac{1}{8} + \frac{1}{8}$




13. _____

14) $\frac{1}{8} + \frac{1}{8} + \frac{1}{8} + \frac{1}{8} + \frac{1}{8} + \frac{1}{8}$



14. _____

15) $\frac{1}{8} + \frac{1}{8} + \frac{1}{8} + \frac{1}{8}$




15. _____



Match each equation to the answer and write the answer.


Ex) $\frac{1}{5} + \frac{1}{5}$



Answers


Ex. E

1) $\frac{1}{10} + \frac{1}{10} + \frac{1}{10} + \frac{1}{10} + \frac{1}{10} + \frac{1}{10} + \frac{1}{10}$



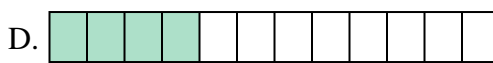
1. K

2) $\frac{1}{12} + \frac{1}{12} + \frac{1}{12} + \frac{1}{12}$




2. D

3) $\frac{1}{6} + \frac{1}{6}$




3. B

4) $\frac{1}{8} + \frac{1}{8} + \frac{1}{8} + \frac{1}{8} + \frac{1}{8} + \frac{1}{8} + \frac{1}{8}$



4. G

5) $\frac{1}{10} + \frac{1}{10} + \frac{1}{10} + \frac{1}{10} + \frac{1}{10} + \frac{1}{10}$




5. P

6) $\frac{1}{5} + \frac{1}{5} + \frac{1}{5} + \frac{1}{5}$




6. A

7) $\frac{1}{10} + \frac{1}{10} + \frac{1}{10} + \frac{1}{10}$



7. O

8) $\frac{1}{4} + \frac{1}{4}$



8. M

9) $\frac{1}{3} + \frac{1}{3}$




9. J

10) $\frac{1}{8} + \frac{1}{8} + \frac{1}{8} + \frac{1}{8} + \frac{1}{8}$



10. H

11) $\frac{1}{4} + \frac{1}{4} + \frac{1}{4}$



11. L

12) $\frac{1}{10} + \frac{1}{10} + \frac{1}{10} + \frac{1}{10} + \frac{1}{10}$



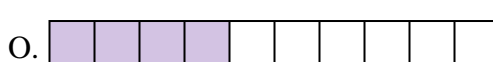
12. C

13) $\frac{1}{8} + \frac{1}{8} + \frac{1}{8}$




13. F

14) $\frac{1}{8} + \frac{1}{8} + \frac{1}{8} + \frac{1}{8} + \frac{1}{8} + \frac{1}{8}$



14. N

15) $\frac{1}{8} + \frac{1}{8} + \frac{1}{8} + \frac{1}{8}$



15. I