



Match each equation to the answer and write the answer.

Answers

Ex) $\frac{1}{4} + \frac{1}{4}$



Ex. **I**

1) $\frac{1}{10} + \frac{1}{10} + \frac{1}{10} + \frac{1}{10} + \frac{1}{10} + \frac{1}{10} + \frac{1}{10}$



1. _____

2) $\frac{1}{5} + \frac{1}{5}$



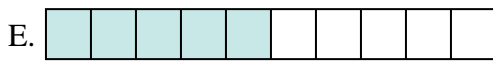
2. _____

3) $\frac{1}{5} + \frac{1}{5} + \frac{1}{5}$



3. _____

4) $\frac{1}{8} + \frac{1}{8}$



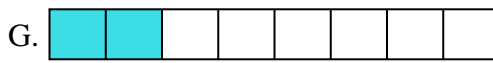
5. _____

5) $\frac{1}{10} + \frac{1}{10} + \frac{1}{10} + \frac{1}{10} + \frac{1}{10}$



6. _____

6) $\frac{1}{3} + \frac{1}{3}$



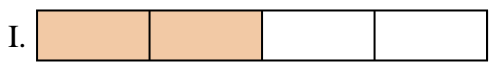
7. _____

7) $\frac{1}{10} + \frac{1}{10} + \frac{1}{10} + \frac{1}{10}$




8. _____

8) $\frac{1}{4} + \frac{1}{4} + \frac{1}{4}$




9. _____

9) $\frac{1}{12} + \frac{1}{12}$




10. _____

10) $\frac{1}{8} + \frac{1}{8} + \frac{1}{8} + \frac{1}{8} + \frac{1}{8} + \frac{1}{8}$




11. _____

11) $\frac{1}{12} + \frac{1}{12} + \frac{1}{12} + \frac{1}{12}$



12. _____

12) $\frac{1}{6} + \frac{1}{6} + \frac{1}{6}$




13. _____

13) $\frac{1}{5} + \frac{1}{5} + \frac{1}{5} + \frac{1}{5}$




14. _____

14) $\frac{1}{8} + \frac{1}{8} + \frac{1}{8} + \frac{1}{8}$



15. _____


15) $\frac{1}{10} + \frac{1}{10} + \frac{1}{10}$





Match each equation to the answer and write the answer.

Ex) $\frac{1}{4} + \frac{1}{4}$



Answers

Ex. I

1) $\frac{1}{10} + \frac{1}{10} + \frac{1}{10} + \frac{1}{10} + \frac{1}{10} + \frac{1}{10} + \frac{1}{10}$



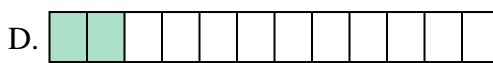
1. L

2) $\frac{1}{5} + \frac{1}{5}$




2. K

3) $\frac{1}{5} + \frac{1}{5} + \frac{1}{5}$




3. M

4) $\frac{1}{8} + \frac{1}{8}$



4. G

5) $\frac{1}{10} + \frac{1}{10} + \frac{1}{10} + \frac{1}{10} + \frac{1}{10}$



5. E

6) $\frac{1}{3} + \frac{1}{3}$



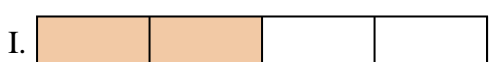
6. N

7) $\frac{1}{10} + \frac{1}{10} + \frac{1}{10} + \frac{1}{10}$



7. J

8) $\frac{1}{4} + \frac{1}{4} + \frac{1}{4}$



8. A

9) $\frac{1}{12} + \frac{1}{12}$




9. D

10) $\frac{1}{8} + \frac{1}{8} + \frac{1}{8} + \frac{1}{8} + \frac{1}{8} + \frac{1}{8}$




10. C

11) $\frac{1}{12} + \frac{1}{12} + \frac{1}{12} + \frac{1}{12}$



11. H

12) $\frac{1}{6} + \frac{1}{6} + \frac{1}{6}$




12. B

13) $\frac{1}{5} + \frac{1}{5} + \frac{1}{5} + \frac{1}{5}$




13. P

14) $\frac{1}{8} + \frac{1}{8} + \frac{1}{8} + \frac{1}{8}$



14. O

15) $\frac{1}{10} + \frac{1}{10} + \frac{1}{10}$



15. F