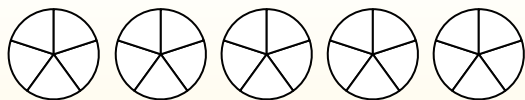




Use the visual model to solve each problem.

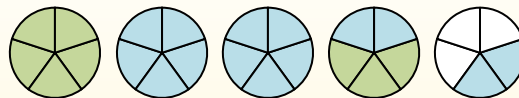
$$1\frac{3}{5} + 2\frac{4}{5} = ?$$



To solve a fraction addition problem one strategy is to shade in the whole amounts first (1 & 2).



Next fill in the fraction amounts ($\frac{3}{5}$ & $\frac{4}{5}$).



When all of the pieces are filled in we can see that $1\frac{3}{5} + 2\frac{4}{5} = 4\frac{2}{5}$

1) $2\frac{5}{12} + 2\frac{8}{12} =$

2) $3\frac{1}{4} + 2\frac{2}{4} =$

3) $3\frac{2}{5} + 3\frac{3}{5} =$

4) $1\frac{1}{4} + 1\frac{3}{4} =$

5) $3\frac{3}{6} + 2\frac{5}{6} =$

6) $3\frac{9}{10} + 1\frac{4}{10} =$

7) $3\frac{4}{12} + 3\frac{10}{12} =$

8) $1\frac{8}{10} + 2\frac{2}{10} =$

9) $3\frac{8}{10} + 1\frac{5}{10} =$

10) $3\frac{3}{12} + 1\frac{7}{12} =$

Answers

1. _____
2. _____
3. _____
4. _____
5. _____
6. _____
7. _____
8. _____
9. _____
10. _____



Use the visual model to solve each problem.

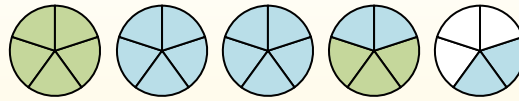
$$1\frac{3}{5} + 2\frac{4}{5} = ?$$



To solve a fraction addition problem one strategy is to shade in the whole amounts first (1 & 2).



Next fill in the fraction amounts ($\frac{3}{5}$ & $\frac{4}{5}$).



When all of the pieces are filled in we can see that $1\frac{3}{5} + 2\frac{4}{5} = 4\frac{2}{5}$

1) $2\frac{5}{12} + 2\frac{8}{12} =$

2) $3\frac{1}{4} + 2\frac{2}{4} =$

3) $3\frac{2}{5} + 3\frac{3}{5} =$

4) $1\frac{1}{4} + 1\frac{3}{4} =$

5) $3\frac{3}{6} + 2\frac{5}{6} =$

6) $3\frac{9}{10} + 1\frac{4}{10} =$

7) $3\frac{4}{12} + 3\frac{10}{12} =$

8) $1\frac{8}{10} + 2\frac{2}{10} =$

9) $3\frac{8}{10} + 1\frac{5}{10} =$

10) $3\frac{3}{12} + 1\frac{7}{12} =$

Answers

1. $5\frac{1}{12}$

2. $5\frac{3}{4}$

3. $7\frac{0}{5}$

4. $3\frac{0}{4}$

5. $6\frac{2}{6}$

6. $5\frac{3}{10}$

7. $7\frac{2}{12}$

8. $4\frac{0}{10}$

9. $5\frac{3}{10}$

10. $4\frac{10}{12}$