



Determine which letter best represents the sum.

1) $\frac{3}{4} + \frac{3}{4}$

3) $\frac{3}{8} + \frac{3}{8}$

5) $\frac{7}{8} + \frac{4}{8}$

7) $\frac{2}{4} + \frac{3}{4}$

9) $\frac{4}{6} + \frac{3}{6}$

11) $\frac{3}{4} + \frac{1}{4}$

13) $\frac{2}{5} + \frac{2}{5}$

2) $\frac{2}{6} + \frac{1}{6}$

4) $\frac{2}{3} + \frac{1}{3}$

6) $\frac{8}{12} + \frac{8}{12}$

8) $\frac{4}{12} + \frac{1}{12}$

10) $\frac{2}{8} + \frac{1}{8}$

12) $\frac{4}{10} + \frac{2}{10}$

14) $\frac{1}{2} + \frac{1}{2}$

Answers

1. _____

2. _____

3. _____

4. _____

5. _____

6. _____

7. _____

8. _____

9. _____

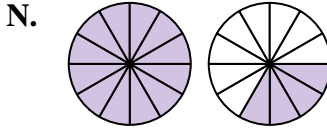
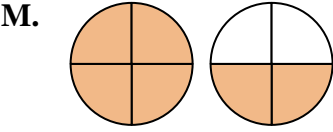
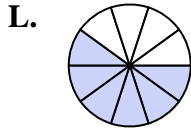
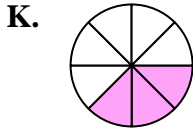
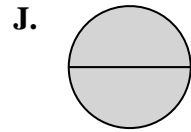
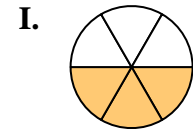
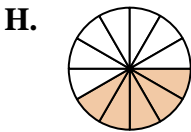
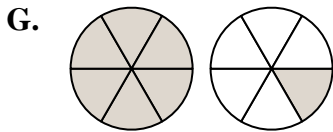
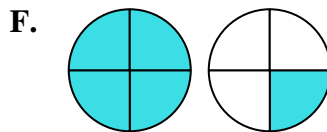
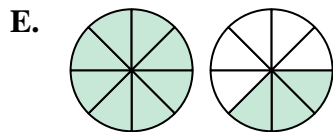
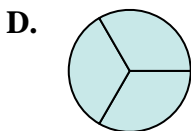
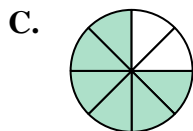
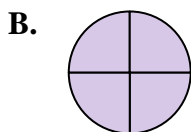
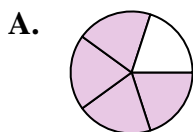
10. _____

11. _____

12. _____

13. _____

14. _____





Determine which letter best represents the sum.

1) $\frac{3}{4} + \frac{3}{4}$

3) $\frac{3}{8} + \frac{3}{8}$

5) $\frac{7}{8} + \frac{4}{8}$

7) $\frac{2}{4} + \frac{3}{4}$

9) $\frac{4}{6} + \frac{3}{6}$

11) $\frac{3}{4} + \frac{1}{4}$

13) $\frac{2}{5} + \frac{2}{5}$

2) $\frac{2}{6} + \frac{1}{6}$

4) $\frac{2}{3} + \frac{1}{3}$

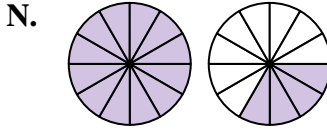
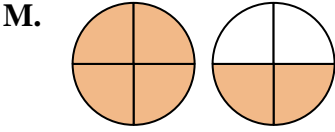
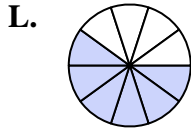
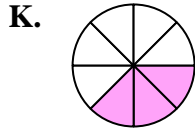
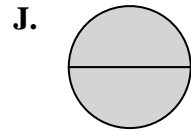
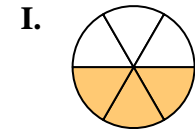
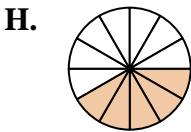
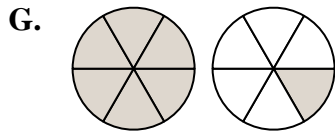
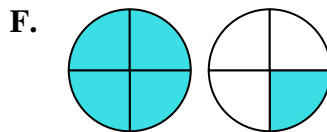
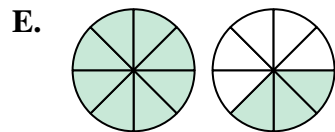
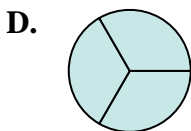
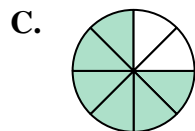
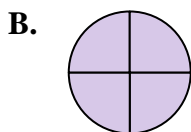
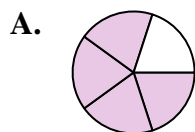
6) $\frac{8}{12} + \frac{8}{12}$

8) $\frac{4}{12} + \frac{1}{12}$

10) $\frac{2}{8} + \frac{1}{8}$

12) $\frac{4}{10} + \frac{2}{10}$

14) $\frac{1}{2} + \frac{1}{2}$



Answers

1. **M** $1\frac{2}{4}$

2. **I** $\frac{3}{6}$

3. **C** $\frac{6}{8}$

4. **D** $\frac{3}{3}$

5. **E** $1\frac{3}{8}$

6. **N** $1\frac{4}{12}$

7. **F** $1\frac{1}{4}$

8. **H** $\frac{5}{12}$

9. **G** $1\frac{1}{6}$

10. **K** $\frac{3}{8}$

11. **B** $\frac{4}{4}$

12. **L** $\frac{6}{10}$

13. **A** $\frac{4}{5}$

14. **J** $\frac{2}{2}$