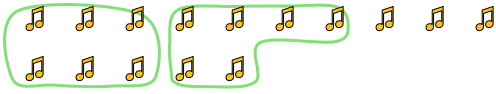




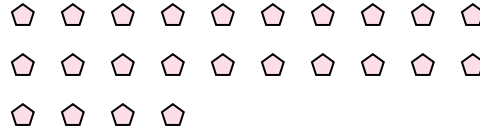
Use the shapes provided to answer the questions.

**Answers**

Ex) There are 15 shapes below. How many groups of 6 can you make with them? How many will you have left over?



1) There are 24 shapes below. How many groups of 9 can you make with them? How many will you have left over?




Ex. 2 3

2) There are 14 shapes below. How many groups of 6 can you make with them? How many will you have left over?



3) There are 15 shapes below. How many groups of 3 can you make with them? How many will you have left over?



1. \_\_\_\_\_

2. \_\_\_\_\_

3. \_\_\_\_\_

4. \_\_\_\_\_

5. \_\_\_\_\_

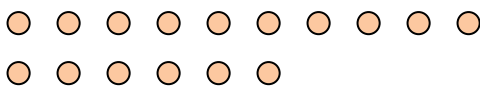
6. \_\_\_\_\_

7. \_\_\_\_\_

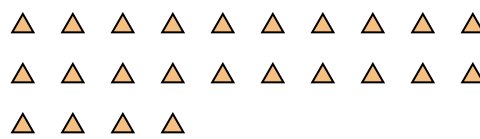
8. \_\_\_\_\_

9. \_\_\_\_\_


4) There are 16 shapes below. How many groups of 2 can you make with them? How many will you have left over?



5) There are 24 shapes below. How many groups of 7 can you make with them? How many will you have left over?



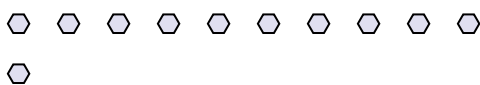
6) There are 27 shapes below. How many groups of 6 can you make with them? How many will you have left over?



7) There are 29 shapes below. How many groups of 7 can you make with them? How many will you have left over?



8) There are 11 shapes below. How many groups of 6 can you make with them? How many will you have left over?



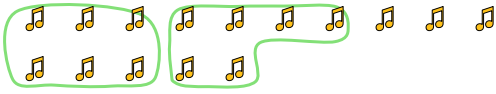
9) There are 29 shapes below. How many groups of 9 can you make with them? How many will you have left over?



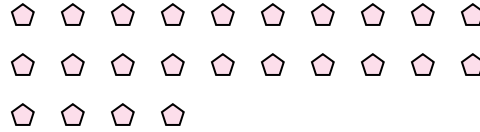


Use the shapes provided to answer the questions.

Ex) There are 15 shapes below. How many groups of 6 can you make with them? How many will you have left over?




1) There are 24 shapes below. How many groups of 9 can you make with them? How many will you have left over?



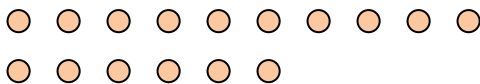
2) There are 14 shapes below. How many groups of 6 can you make with them? How many will you have left over?



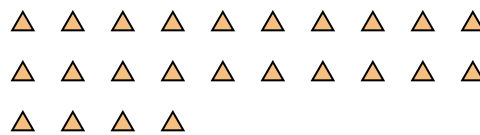
3) There are 15 shapes below. How many groups of 3 can you make with them? How many will you have left over?



4) There are 16 shapes below. How many groups of 2 can you make with them? How many will you have left over?



5) There are 24 shapes below. How many groups of 7 can you make with them? How many will you have left over?



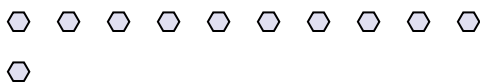
6) There are 27 shapes below. How many groups of 6 can you make with them? How many will you have left over?



7) There are 29 shapes below. How many groups of 7 can you make with them? How many will you have left over?



8) There are 11 shapes below. How many groups of 6 can you make with them? How many will you have left over?



9) There are 29 shapes below. How many groups of 9 can you make with them? How many will you have left over?



Answers

Ex. 2 3

1. 2 6

2. 2 2

3. 5 0

4. 8 0

5. 3 3

6. 4 3

7. 4 1

8. 1 5

9. 3 2