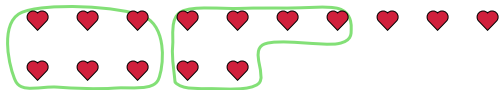


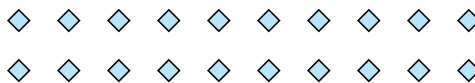


Use the shapes provided to answer the questions.

Ex) There are 15 shapes below. How many groups of 6 can you make with them? How many will you have left over?



1) There are 20 shapes below. How many groups of 8 can you make with them? How many will you have left over?



**Answers**

Ex. 2 3

1. \_\_\_\_\_

2. \_\_\_\_\_

3. \_\_\_\_\_

4. \_\_\_\_\_

5. \_\_\_\_\_

6. \_\_\_\_\_

7. \_\_\_\_\_

8. \_\_\_\_\_

9. \_\_\_\_\_

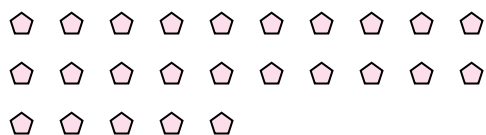
2) There are 10 shapes below. How many groups of 6 can you make with them? How many will you have left over?



3) There are 13 shapes below. How many groups of 5 can you make with them? How many will you have left over?



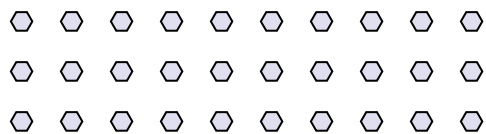
4) There are 25 shapes below. How many groups of 5 can you make with them? How many will you have left over?



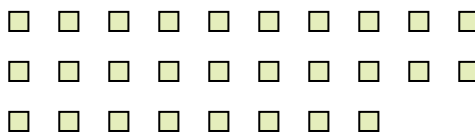
5) There are 13 shapes below. How many groups of 3 can you make with them? How many will you have left over?




6) There are 30 shapes below. How many groups of 4 can you make with them? How many will you have left over?



7) There are 28 shapes below. How many groups of 2 can you make with them? How many will you have left over?



8) There are 26 shapes below. How many groups of 6 can you make with them? How many will you have left over?



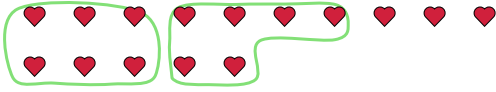
9) There are 20 shapes below. How many groups of 7 can you make with them? How many will you have left over?



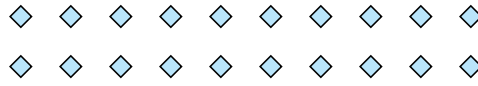


Use the shapes provided to answer the questions.

Ex) There are 15 shapes below. How many groups of 6 can you make with them? How many will you have left over?



1) There are 20 shapes below. How many groups of 8 can you make with them? How many will you have left over?



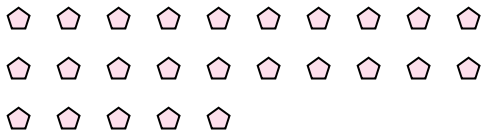
2) There are 10 shapes below. How many groups of 6 can you make with them? How many will you have left over?



3) There are 13 shapes below. How many groups of 5 can you make with them? How many will you have left over?



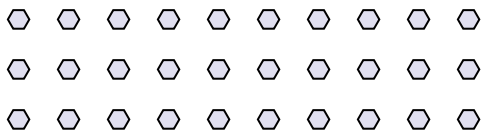
4) There are 25 shapes below. How many groups of 5 can you make with them? How many will you have left over?



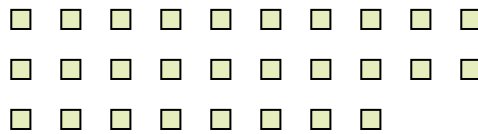
5) There are 13 shapes below. How many groups of 3 can you make with them? How many will you have left over?




6) There are 30 shapes below. How many groups of 4 can you make with them? How many will you have left over?



7) There are 28 shapes below. How many groups of 2 can you make with them? How many will you have left over?



8) There are 26 shapes below. How many groups of 6 can you make with them? How many will you have left over?



9) There are 20 shapes below. How many groups of 7 can you make with them? How many will you have left over?



Answers

Ex. 2 3

1. 2 4

2. 1 4

3. 2 3

4. 5 0

5. 4 1

6. 7 2

7. 14 0

8. 4 2

9. 2 6