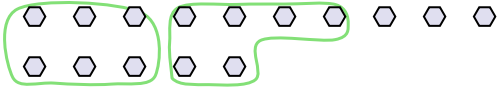




Use the shapes provided to answer the questions.

Answers

Ex) There are 15 shapes below. How many groups of 6 can you make with them? How many will you have left over?

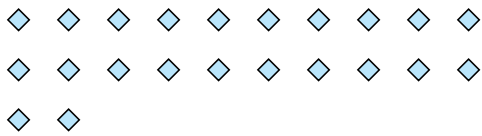


1) There are 14 shapes below. How many groups of 6 can you make with them? How many will you have left over?




Ex. 2 3

2) There are 22 shapes below. How many groups of 7 can you make with them? How many will you have left over?



3) There are 16 shapes below. How many groups of 4 can you make with them? How many will you have left over?



1. _____

2. _____

3. _____

4. _____

5. _____

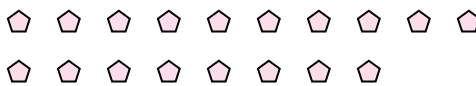
6. _____

7. _____

4) There are 18 shapes below. How many groups of 8 can you make with them? How many will you have left over?




5) There are 18 shapes below. How many groups of 4 can you make with them? How many will you have left over?



8. _____

9. _____


6) There are 13 shapes below. How many groups of 6 can you make with them? How many will you have left over?



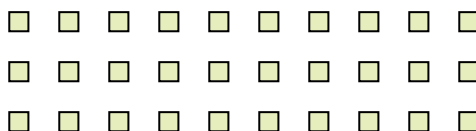
7) There are 17 shapes below. How many groups of 5 can you make with them? How many will you have left over?



8) There are 29 shapes below. How many groups of 9 can you make with them? How many will you have left over?



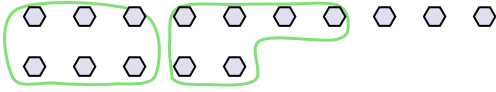
9) There are 30 shapes below. How many groups of 8 can you make with them? How many will you have left over?





Use the shapes provided to answer the questions.

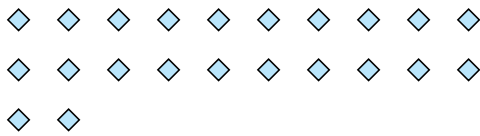
Ex) There are 15 shapes below. How many groups of 6 can you make with them? How many will you have left over?




1) There are 14 shapes below. How many groups of 6 can you make with them? How many will you have left over?



2) There are 22 shapes below. How many groups of 7 can you make with them? How many will you have left over?



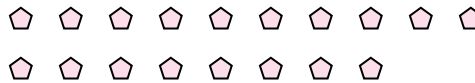
3) There are 16 shapes below. How many groups of 4 can you make with them? How many will you have left over?




4) There are 18 shapes below. How many groups of 8 can you make with them? How many will you have left over?



5) There are 18 shapes below. How many groups of 4 can you make with them? How many will you have left over?




6) There are 13 shapes below. How many groups of 6 can you make with them? How many will you have left over?



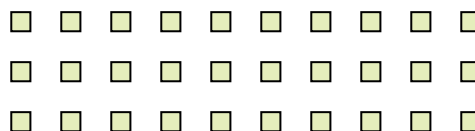
7) There are 17 shapes below. How many groups of 5 can you make with them? How many will you have left over?



8) There are 29 shapes below. How many groups of 9 can you make with them? How many will you have left over?



9) There are 30 shapes below. How many groups of 8 can you make with them? How many will you have left over?



Answers

Ex. 2 3

1. 2 2

2. 3 1

3. 4 0

4. 2 2

5. 4 2

6. 2 1

7. 3 2

8. 3 2

9. 3 6