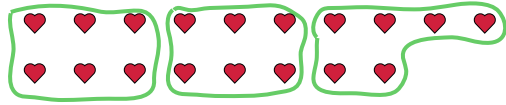




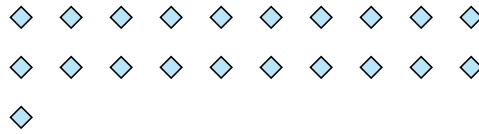
Use the shapes provided to answer the questions.

Answers

Ex) How many groups of 6 can you make with the 18 shapes below?



1) How many groups of 7 can you make with the 21 shapes below?

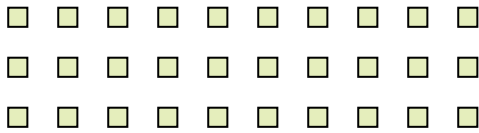


Ex. 3

1. _____

2. _____

2) How many groups of 6 can you make with the 30 shapes below?



3) How many groups of 4 can you make with the 28 shapes below?



3. _____

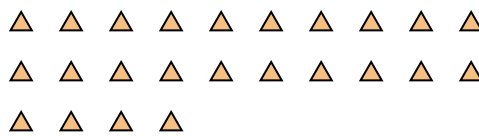
4. _____

5. _____

4) How many groups of 9 can you make with the 27 shapes below?



5) How many groups of 6 can you make with the 24 shapes below?



6. _____

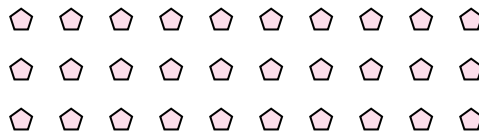
7. _____

8. _____

6) How many groups of 3 can you make with the 30 shapes below?



7) How many groups of 5 can you make with the 30 shapes below?



9. _____

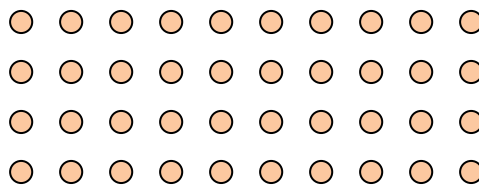
10. _____

11. _____

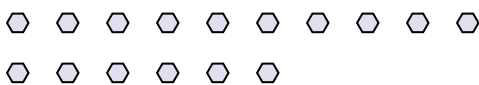
8) How many groups of 7 can you make with the 14 shapes below?




9) How many groups of 5 can you make with the 40 shapes below?



10) How many groups of 2 can you make with the 16 shapes below?




11) How many groups of 5 can you make with the 30 shapes below?



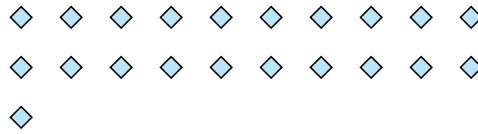


Use the shapes provided to answer the questions.

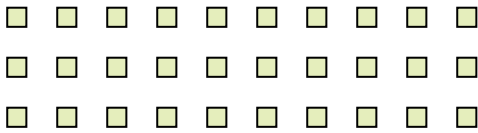
Ex) How many groups of 6 can you make with the 18 shapes below?



1) How many groups of 7 can you make with the 21 shapes below?




2) How many groups of 6 can you make with the 30 shapes below?



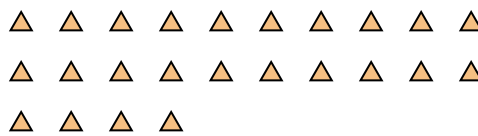
3) How many groups of 4 can you make with the 28 shapes below?




4) How many groups of 9 can you make with the 27 shapes below?



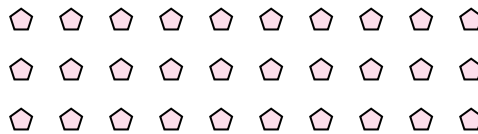
5) How many groups of 6 can you make with the 24 shapes below?



6) How many groups of 3 can you make with the 30 shapes below?



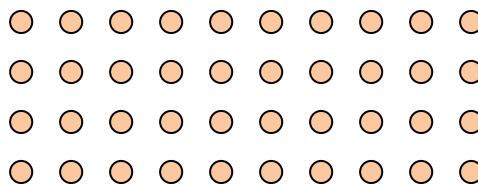
7) How many groups of 5 can you make with the 30 shapes below?



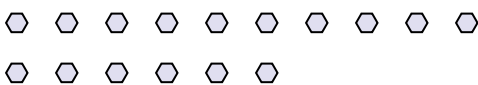
8) How many groups of 7 can you make with the 14 shapes below?




9) How many groups of 5 can you make with the 40 shapes below?



10) How many groups of 2 can you make with the 16 shapes below?



11) How many groups of 5 can you make with the 30 shapes below?



Answers

Ex. 3

1. 3

2. 5

3. 7

4. 3

5. 4

6. 10

7. 6

8. 2

9. 8

10. 8

11. 6