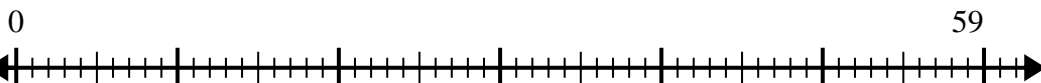




Use the number line to solve the division problem.

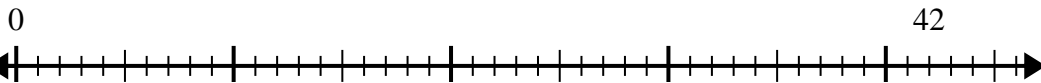
Answers

1) $59 \div 7 =$



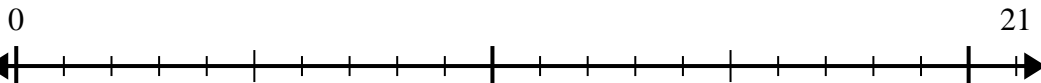
1. _____

2) $42 \div 5 =$



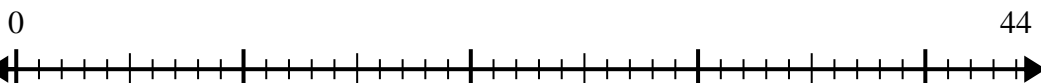
2. _____

3) $21 \div 4 =$



3. _____

4) $44 \div 7 =$



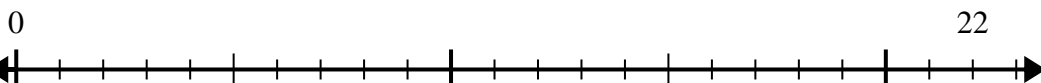
4. _____

5) $60 \div 8 =$



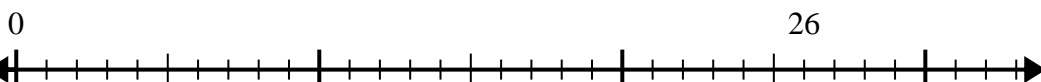
5. _____

6) $22 \div 5 =$



6. _____

7) $26 \div 4 =$



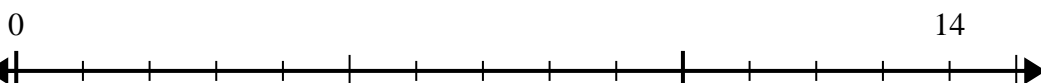
7. _____

8) $54 \div 8 =$



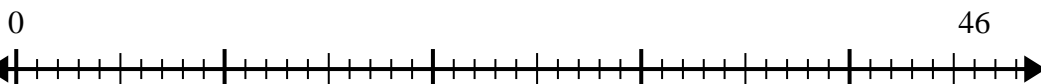
8. _____

9) $14 \div 4 =$



9. _____

10) $46 \div 6 =$

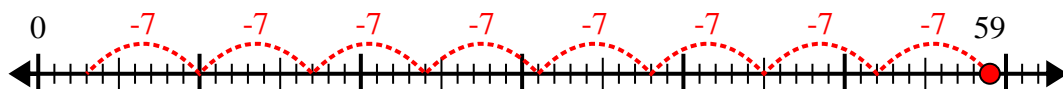


10. _____

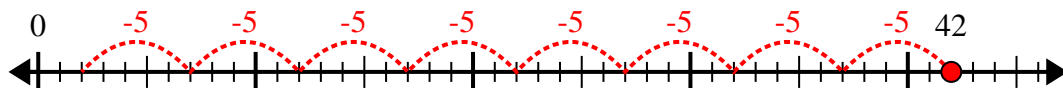


Use the number line to solve the division problem.

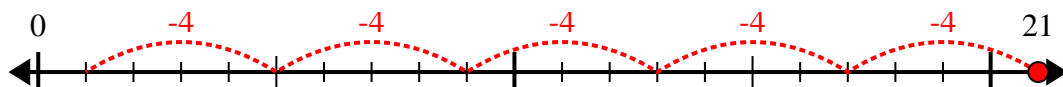
1) $59 \div 7 =$



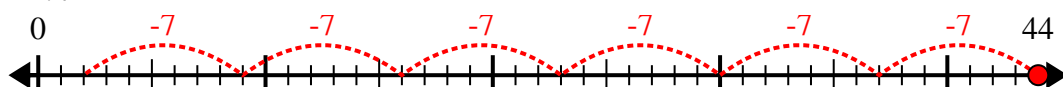
2) $42 \div 5 =$



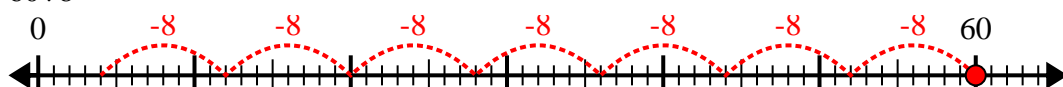
3) $21 \div 4 =$



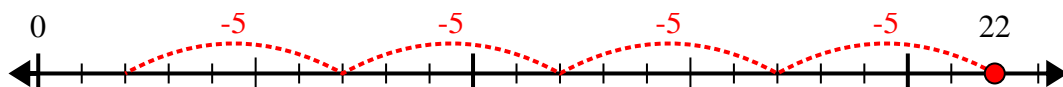
4) $44 \div 7 =$



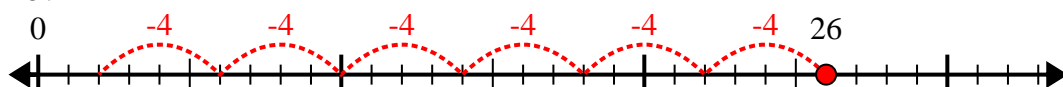
5) $60 \div 8 =$



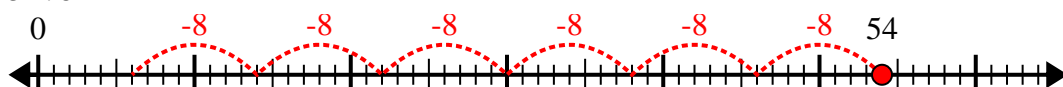
6) $22 \div 5 =$



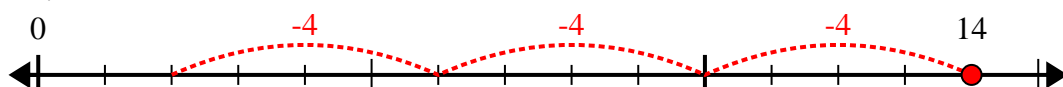
7) $26 \div 4 =$



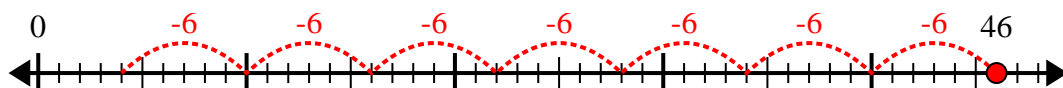
8) $54 \div 8 =$



9) $14 \div 4 =$



10) $46 \div 6 =$



Answers

1. 8r3

2. 8r2

3. 5r1

4. 6r2

5. 7r4

6. 4r2

7. 6r2

8. 6r6

9. 3r2

10. 7r4