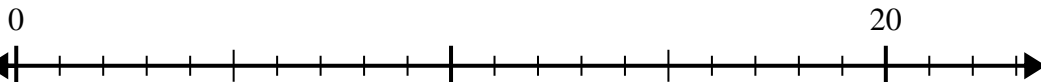




Use the number line to solve the division problem.

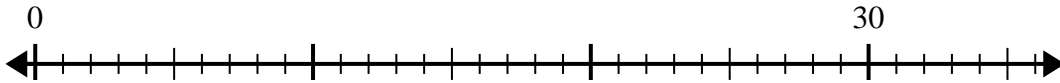
Answers

1) $20 \div 4 =$



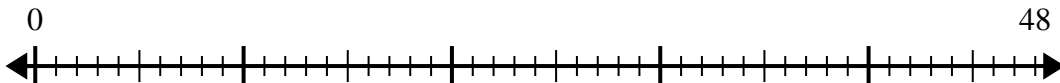
1. _____

2) $30 \div 5 =$



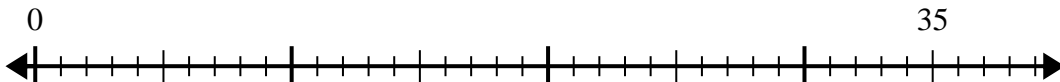
2. _____

3) $48 \div 8 =$



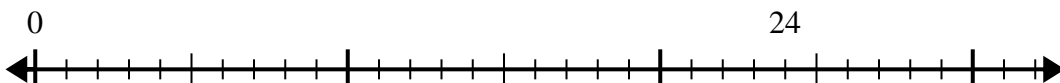
3. _____

4) $35 \div 5 =$



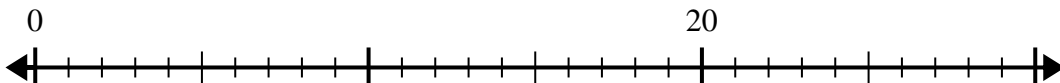
4. _____

5) $24 \div 4 =$



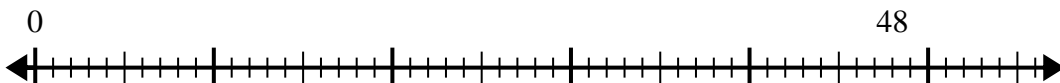
5. _____

6) $20 \div 5 =$



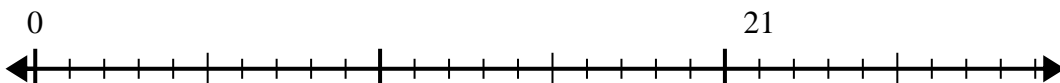
6. _____

7) $48 \div 6 =$



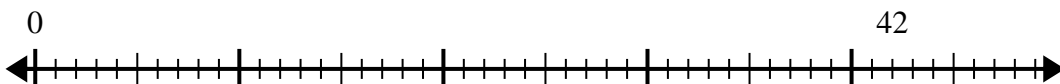
7. _____

8) $21 \div 7 =$



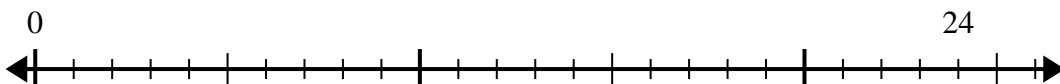
8. _____

9) $42 \div 7 =$



9. _____

10) $24 \div 8 =$

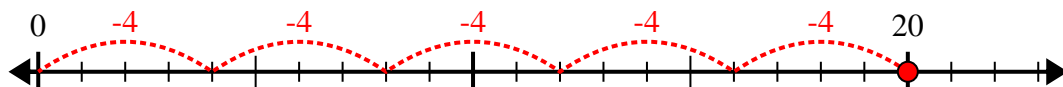


10. _____

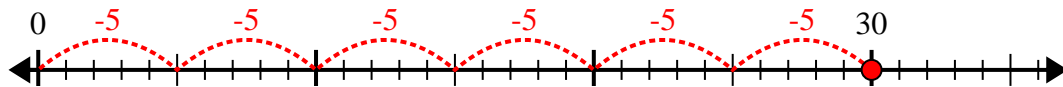


Use the number line to solve the division problem.

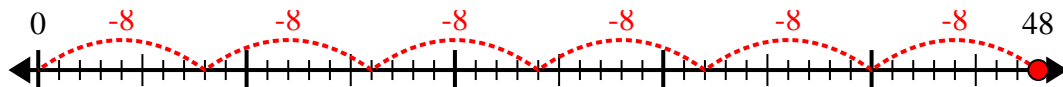
1) $20 \div 4 =$



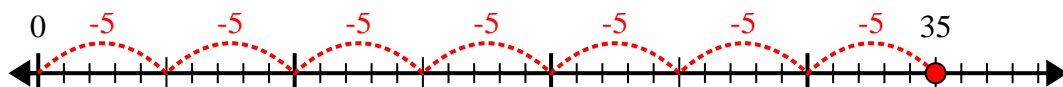
2) $30 \div 5 =$



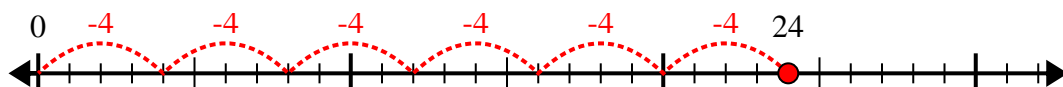
3) $48 \div 8 =$



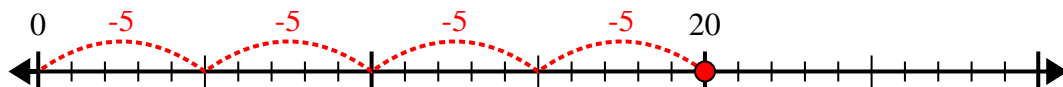
4) $35 \div 5 =$



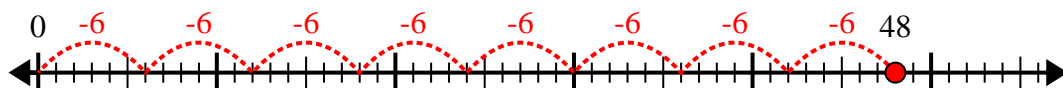
5) $24 \div 4 =$



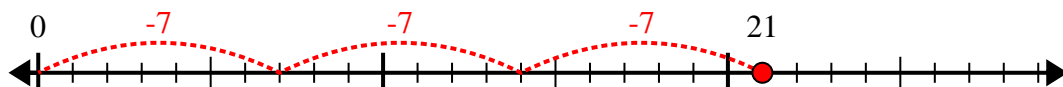
6) $20 \div 5 =$



7) $48 \div 6 =$



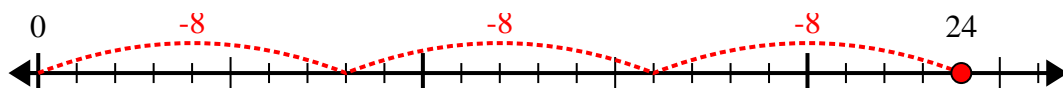
8) $21 \div 7 =$



9) $42 \div 7 =$



10) $24 \div 8 =$



Answers

1. 5

2. 6

3. 6

4. 7

5. 6

6. 4

7. 8

8. 3

9. 6

10. 3