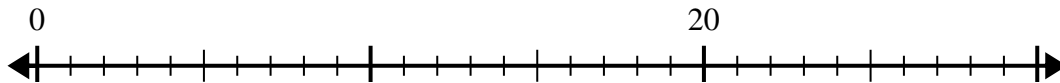




Use the number line to solve the division problem.

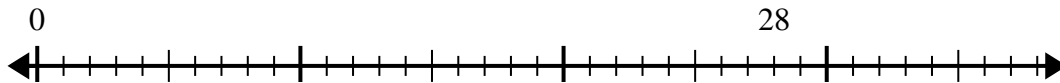
Answers

1) $20 \div 5 =$



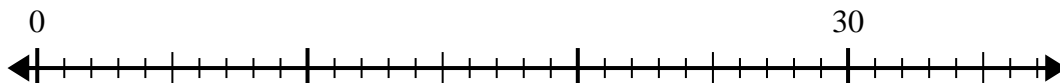
1. _____

2) $28 \div 4 =$



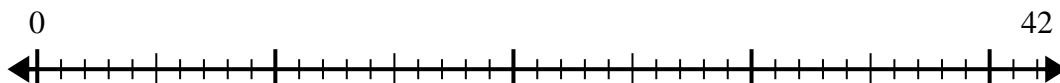
2. _____

3) $30 \div 6 =$



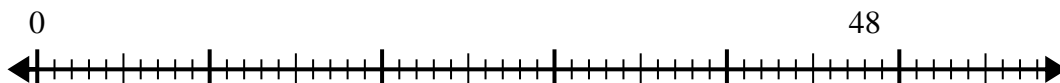
3. _____

4) $42 \div 6 =$



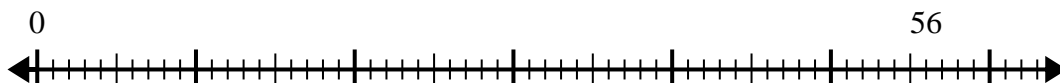
4. _____

5) $48 \div 6 =$



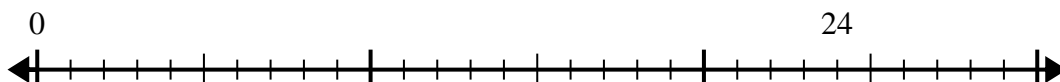
5. _____

6) $56 \div 8 =$



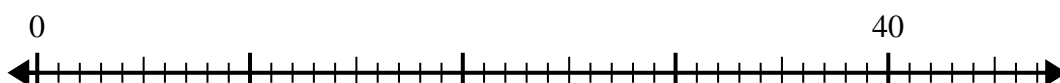
6. _____

7) $24 \div 6 =$



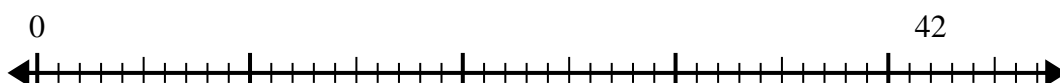
7. _____

8) $40 \div 8 =$



8. _____

9) $42 \div 7 =$



9. _____

10) $32 \div 4 =$

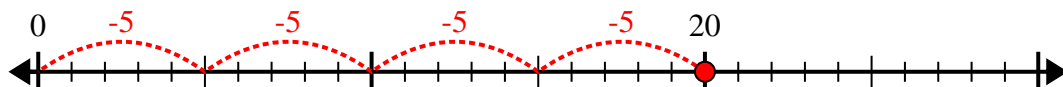


10. _____

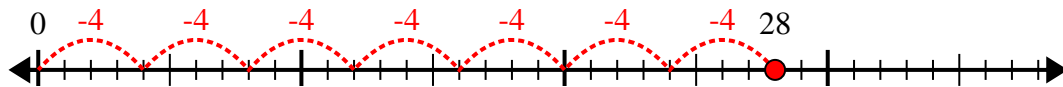


Use the number line to solve the division problem.

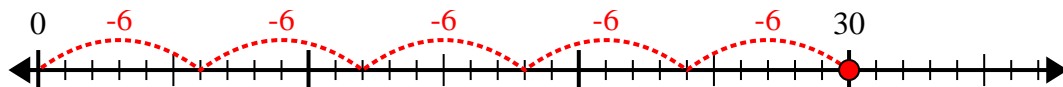
1) $20 \div 5 =$



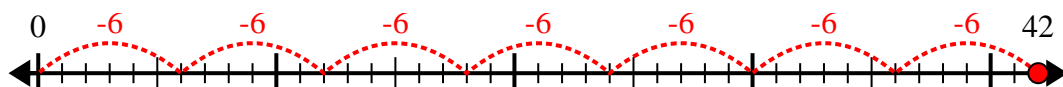
2) $28 \div 4 =$



3) $30 \div 6 =$



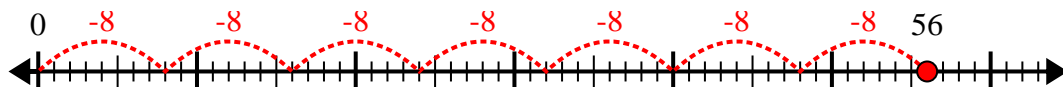
4) $42 \div 6 =$



5) $48 \div 6 =$



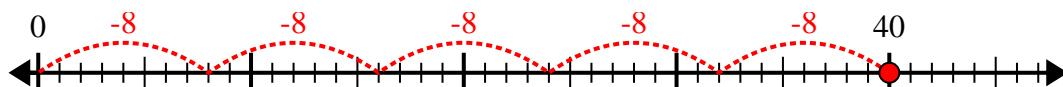
6) $56 \div 8 =$



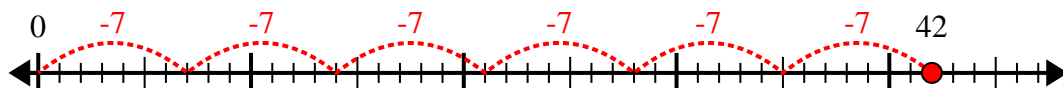
7) $24 \div 6 =$



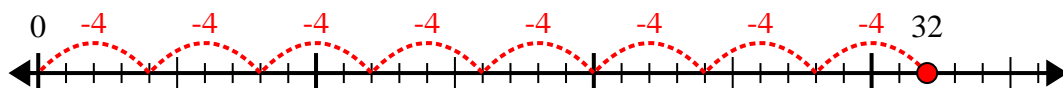
8) $40 \div 8 =$



9) $42 \div 7 =$



10) $32 \div 4 =$



Answers

1. 4

2. 7

3. 5

4. 7

5. 8

6. 7

7. 4

8. 5

9. 6

10. 8