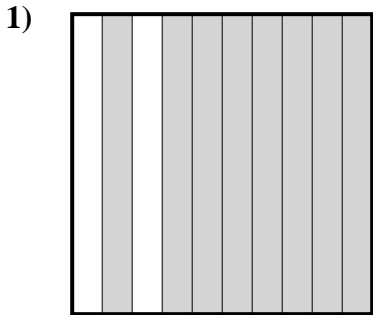


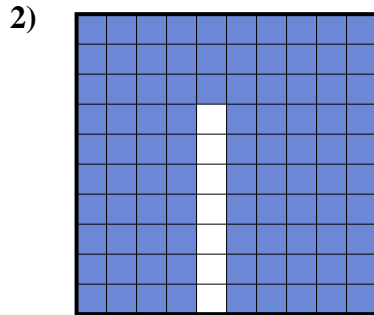


Determine which letter best represents the amount shaded of the whole.

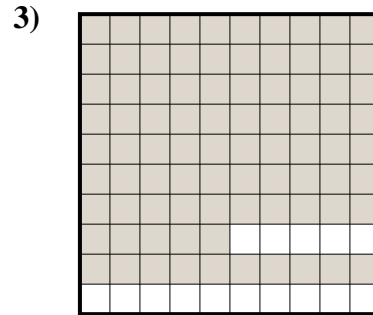
Answers



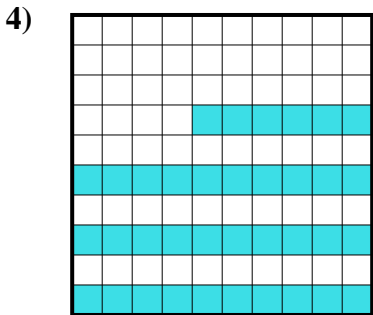
- A. 800.00
- B. 80
- C. 0.8
- D. 8



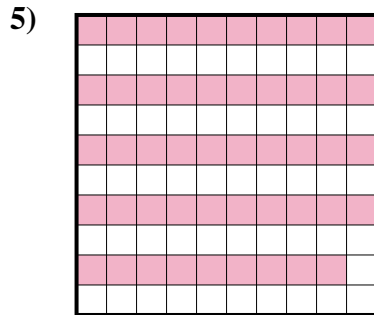
- A. 0.093
- B. 930.0
- C. 93
- D. 0.93




- A. 0.85
- B. 0.085
- C. 85
- D. 8.5



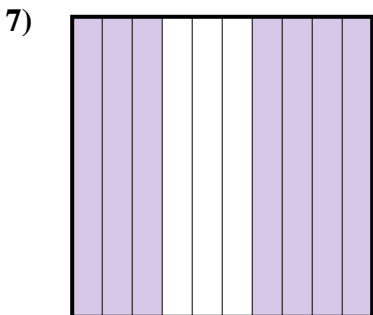
- A. 0.36
- B. 3.6
- C. 360.0
- D. 360.00



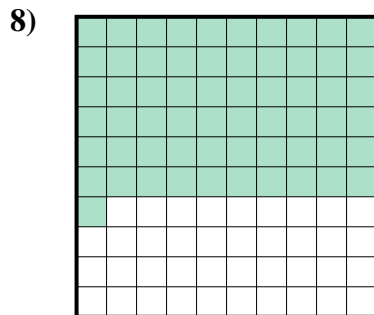
- A. 0.49
- B. 49
- C. 490.0
- D. 490.00



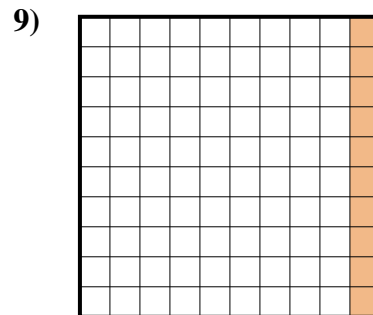
- A. 200.0
- B. 0.02
- C. 200.00
- D. 0.2



- A. 7
- B. 0.7
- C. 700.0
- D. 700.00



- A. 0.61
- B. 610.0
- C. 6.1
- D. 61



- A. 10
- B. 0.01
- C. 1
- D. 0.1

1. _____

2. _____

3. _____

4. _____

5. _____

6. _____

7. _____

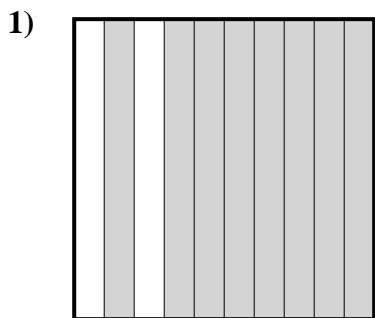
8. _____

9. _____

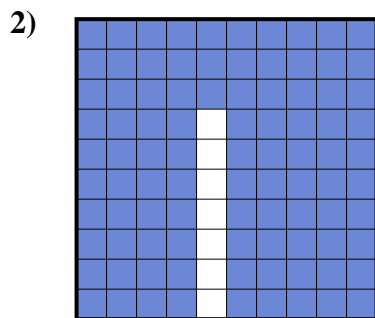


Determine which letter best represents the amount shaded of the whole.

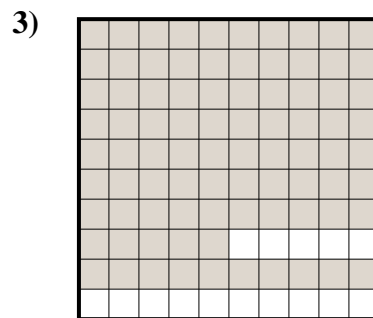
Answers



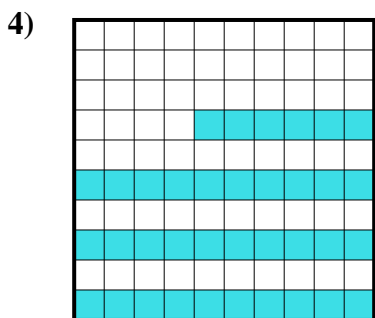
- A. 800.00
- B. 80
- C. 0.8
- D. 8



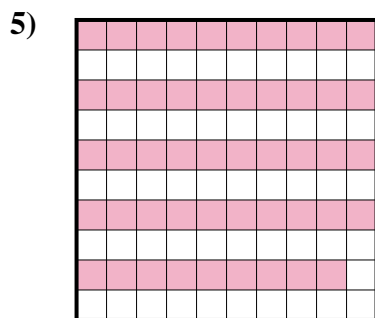
- A. 0.093
- B. 930.0
- C. 93
- D. 0.93




- A. 0.85
- B. 0.085
- C. 85
- D. 8.5



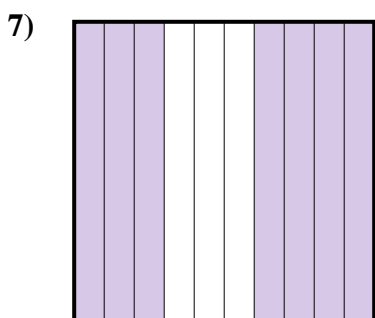
- A. 0.36
- B. 3.6
- C. 360.0
- D. 360.00



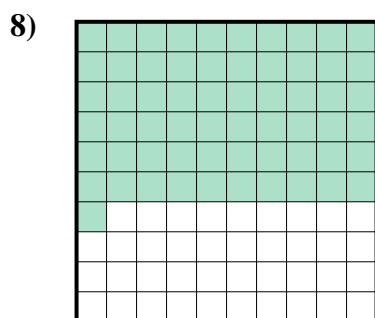
- A. 0.49
- B. 49
- C. 490.0
- D. 490.00



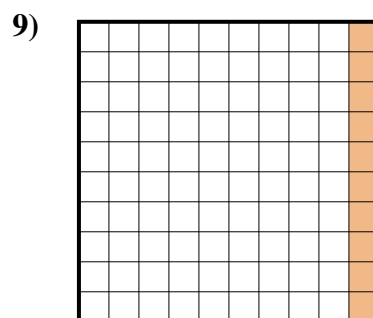
- A. 200.0
- B. 0.02
- C. 200.00
- D. 0.2



- A. 7
- B. 0.7
- C. 700.0
- D. 700.00



- A. 0.61
- B. 610.0
- C. 6.1
- D. 61



- A. 10
- B. 0.01
- C. 1
- D. 0.1

- 1. **C**
- 2. **D**
- 3. **A**
- 4. **A**
- 5. **A**
- 6. **D**
- 7. **B**
- 8. **A**
- 9. **D**