


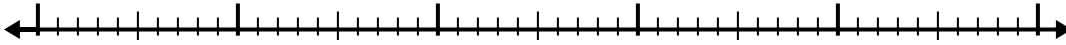


Use the number line to solve each problem.

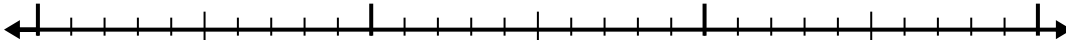
1) $8.9 - 3.4 =$



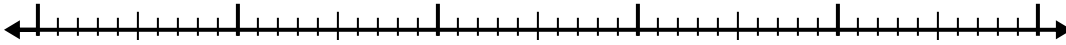
2) $10.3 - 2.5 =$



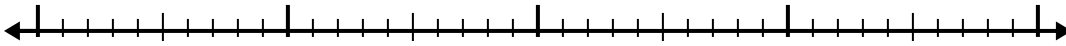
3) $7.2 - 1.9 =$



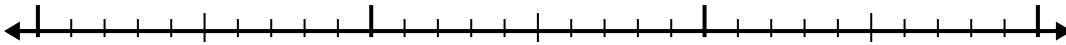
4) $12.2 - 3.7 =$



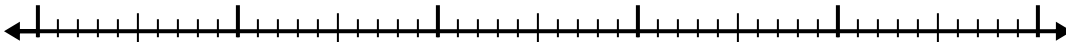
5) $7.8 - 2.2 =$



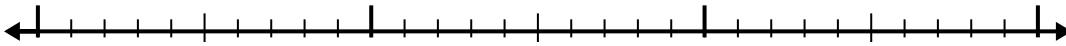
6) $10 - 1.7 =$



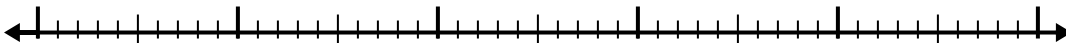
7) $11.8 - 3.1 =$




8) $3.3 - 1.1 =$



9) $7.4 - 3.1 =$



10) $8.6 - 1.1 =$



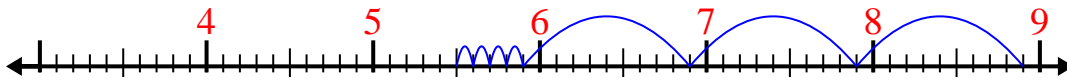
Answers

- 1. _____
- 2. _____
- 3. _____
- 4. _____
- 5. _____
- 6. _____
- 7. _____
- 8. _____
- 9. _____
- 10. _____

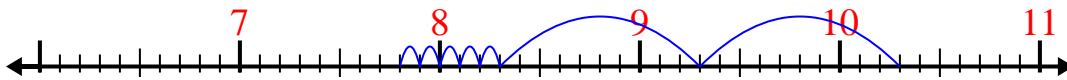


Use the number line to solve each problem.


1) $8.9 - 3.4 =$



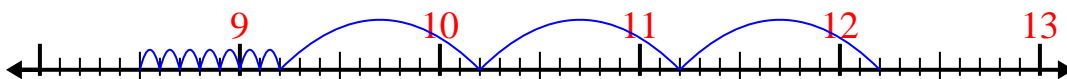
2) $10.3 - 2.5 =$



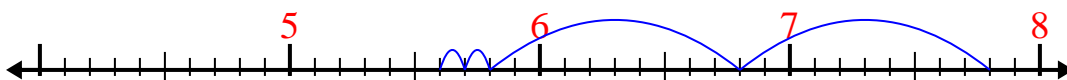
3) $7.2 - 1.9 =$



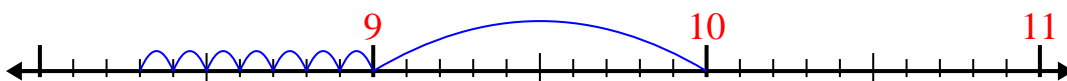
4) $12.2 - 3.7 =$



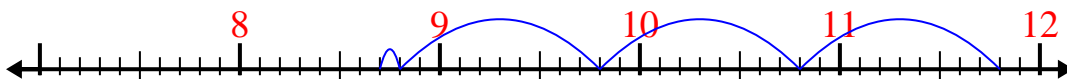
5) $7.8 - 2.2 =$



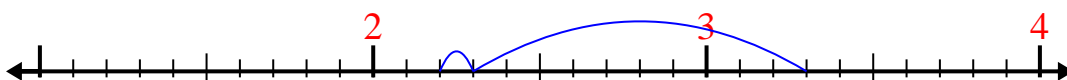
6) $10 - 1.7 =$



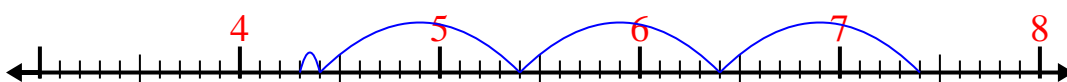
7) $11.8 - 3.1 =$



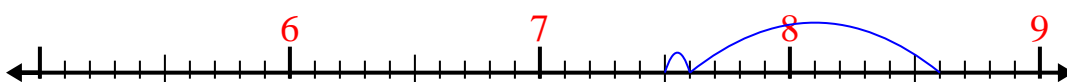
8) $3.3 - 1.1 =$



9) $7.4 - 3.1 =$



10) $8.6 - 1.1 =$

Answers1. 5.52. 7.83. 5.34. 8.55. 5.66. 8.37. 8.78. 2.29. 4.310. 7.5