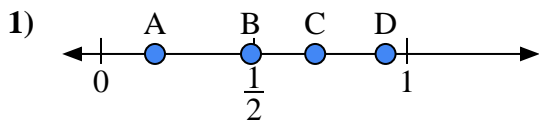


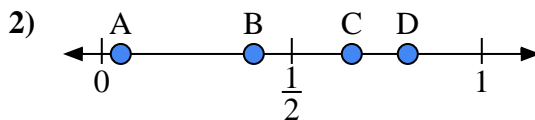


Use the number lines to answer the questions.

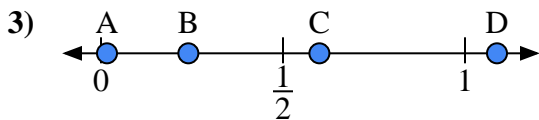
Answers



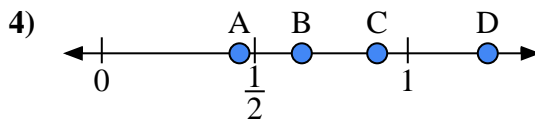
- a) Which letter best represents the location of 0.7?
- b) Which letter best represents the location of 0.93?



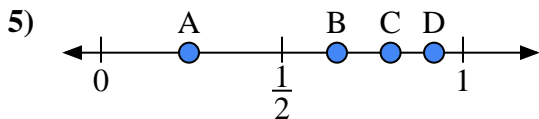
- a) Which letter best represents the location of 0.40?
- b) Which letter best represents the location of 0.05?



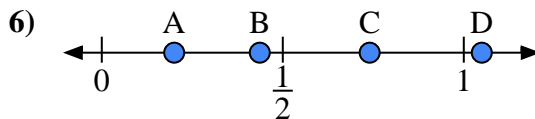
- a) Which letter best represents the location of 0.60?
- b) Which letter best represents the location of 0.24?



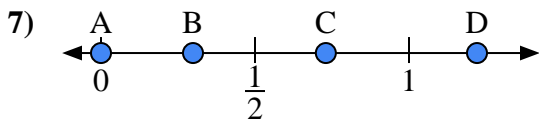
- a) Which letter best represents the location of 0.90?
- b) Which letter best represents the location of 0.45?



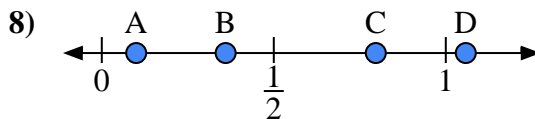
- a) Which letter best represents the location of 0.8?
- b) Which letter best represents the location of 0.92?



- a) Which letter best represents the location of 0.20?
- b) Which letter best represents the location of 0.74?



- a) Which letter best represents the location of 0.00?
- b) Which letter best represents the location of 0.73?

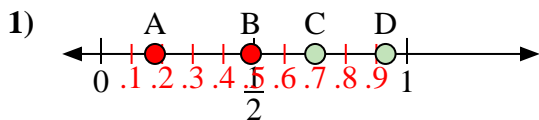


- a) Which letter best represents the location of 0.1?
- b) Which letter best represents the location of 0.36?

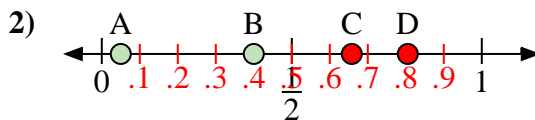
- 1. _____
- 2. _____
- 3. _____
- 4. _____
- 5. _____
- 6. _____
- 7. _____
- 8. _____



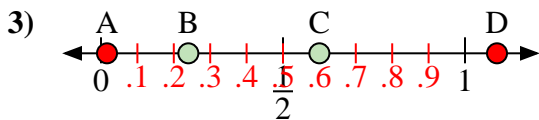
Use the number lines to answer the questions.



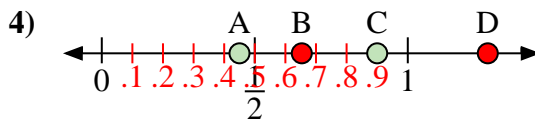
- a) Which letter best represents the location of 0.7?
- b) Which letter best represents the location of 0.93?



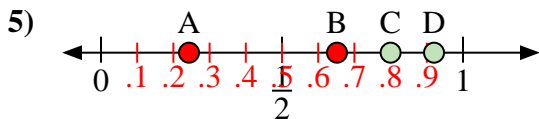
- a) Which letter best represents the location of 0.40?
- b) Which letter best represents the location of 0.05?



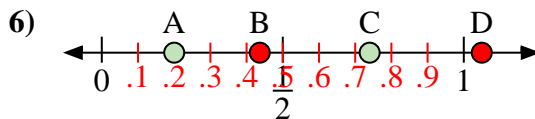
- a) Which letter best represents the location of 0.60?
- b) Which letter best represents the location of 0.24?



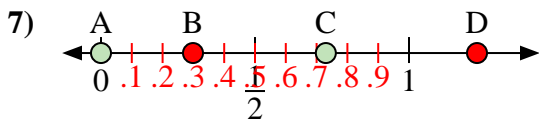
- a) Which letter best represents the location of 0.90?
- b) Which letter best represents the location of 0.45?



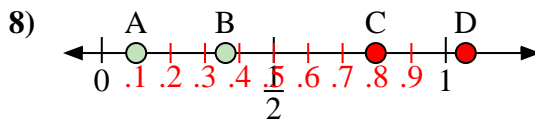
- a) Which letter best represents the location of 0.8?
- b) Which letter best represents the location of 0.92?



- a) Which letter best represents the location of 0.20?
- b) Which letter best represents the location of 0.74?



- a) Which letter best represents the location of 0.00?
- b) Which letter best represents the location of 0.73?



- a) Which letter best represents the location of 0.1?
- b) Which letter best represents the location of 0.36?

Answers

- 1. C D
- 2. B A
- 3. C B
- 4. C A
- 5. C D
- 6. A C
- 7. A C
- 8. A B