



Use the visual model to solve each problem.

1)  $0.5 \times 0.7 =$




2)  $0.8 \times 0.8 =$




3)  $0.5 \times 0.8 =$




4)  $0.7 \times 0.6 =$




5)  $0.7 \times 0.3 =$




6)  $0.4 \times 0.3 =$




7)  $0.3 \times 0.4 =$



8)  $0.2 \times 0.2 =$



9)  $0.2 \times 0.1 =$




10)  $0.4 \times 0.7 =$




11)  $0.7 \times 0.9 =$




12)  $0.9 \times 0.8 =$




13)  $0.8 \times 0.9 =$



14)  $0.7 \times 0.5 =$



15)  $0.9 \times 0.2 =$



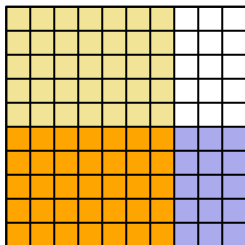
Answers

1. \_\_\_\_\_
2. \_\_\_\_\_
3. \_\_\_\_\_
4. \_\_\_\_\_
5. \_\_\_\_\_
6. \_\_\_\_\_
7. \_\_\_\_\_
8. \_\_\_\_\_
9. \_\_\_\_\_
10. \_\_\_\_\_
11. \_\_\_\_\_
12. \_\_\_\_\_
13. \_\_\_\_\_
14. \_\_\_\_\_
15. \_\_\_\_\_

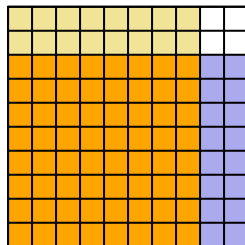


Use the visual model to solve each problem.

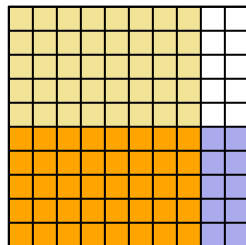
1)  $0.5 \times 0.7 =$



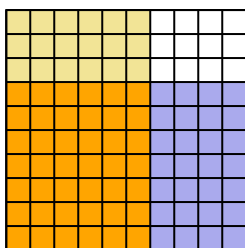
2)  $0.8 \times 0.8 =$



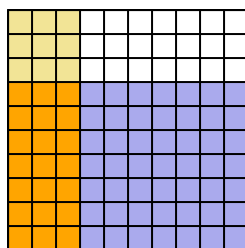
3)  $0.5 \times 0.8 =$



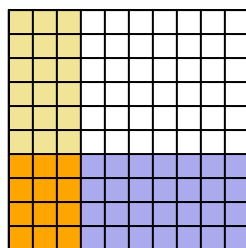
4)  $0.7 \times 0.6 =$



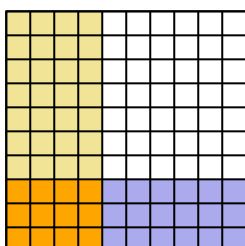
5)  $0.7 \times 0.3 =$



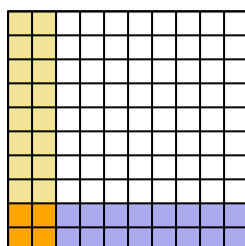
6)  $0.4 \times 0.3 =$



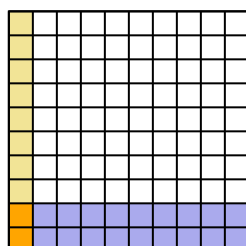
7)  $0.3 \times 0.4 =$



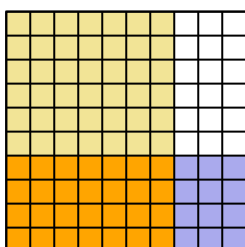
8)  $0.2 \times 0.2 =$



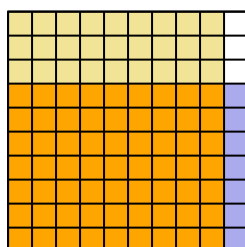
9)  $0.2 \times 0.1 =$



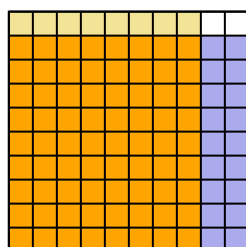
10)  $0.4 \times 0.7 =$



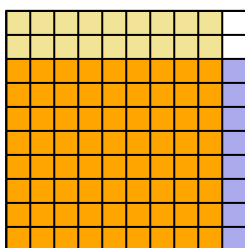
11)  $0.7 \times 0.9 =$



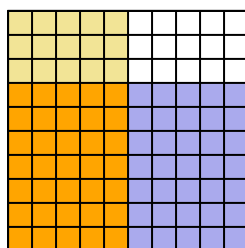
12)  $0.9 \times 0.8 =$



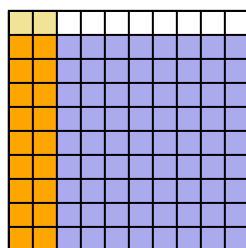
13)  $0.8 \times 0.9 =$



14)  $0.7 \times 0.5 =$



15)  $0.9 \times 0.2 =$



**Answers**

1.  $\frac{35}{100} = 0.35$
2.  $\frac{64}{100} = 0.64$
3.  $\frac{40}{100} = 0.4$
4.  $\frac{42}{100} = 0.42$
5.  $\frac{21}{100} = 0.21$
6.  $\frac{12}{100} = 0.12$
7.  $\frac{12}{100} = 0.12$
8.  $\frac{4}{100} = 0.04$
9.  $\frac{2}{100} = 0.02$
10.  $\frac{28}{100} = 0.28$
11.  $\frac{63}{100} = 0.63$
12.  $\frac{72}{100} = 0.72$
13.  $\frac{72}{100} = 0.72$
14.  $\frac{35}{100} = 0.35$
15.  $\frac{18}{100} = 0.18$