



Use the visual model to solve each problem.


1)  $0.4 \times 0.9 =$




2)  $0.4 \times 0.3 =$




3)  $0.7 \times 0.1 =$




4)  $0.8 \times 0.2 =$




5)  $0.1 \times 0.6 =$




6)  $0.3 \times 0.3 =$




7)  $0.1 \times 0.1 =$



8)  $0.1 \times 0.7 =$



9)  $0.2 \times 0.6 =$




10)  $0.1 \times 0.3 =$




11)  $0.1 \times 0.9 =$




12)  $0.6 \times 0.2 =$




13)  $0.5 \times 0.1 =$



14)  $0.9 \times 0.5 =$



15)  $0.1 \times 0.5 =$



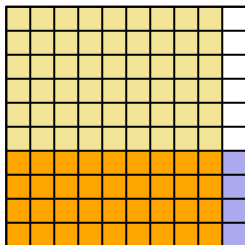
Answers

- 1. \_\_\_\_\_
- 2. \_\_\_\_\_
- 3. \_\_\_\_\_
- 4. \_\_\_\_\_
- 5. \_\_\_\_\_
- 6. \_\_\_\_\_
- 7. \_\_\_\_\_
- 8. \_\_\_\_\_
- 9. \_\_\_\_\_
- 10. \_\_\_\_\_
- 11. \_\_\_\_\_
- 12. \_\_\_\_\_
- 13. \_\_\_\_\_
- 14. \_\_\_\_\_
- 15. \_\_\_\_\_

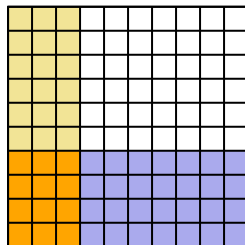


Use the visual model to solve each problem.

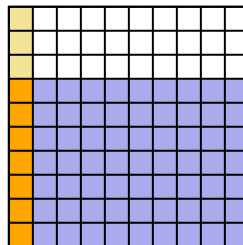
1)  $0.4 \times 0.9 =$



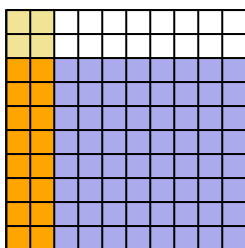
2)  $0.4 \times 0.3 =$



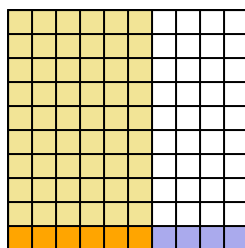
3)  $0.7 \times 0.1 =$



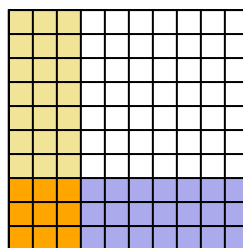
4)  $0.8 \times 0.2 =$



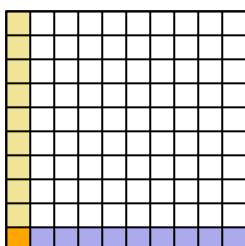
5)  $0.1 \times 0.6 =$



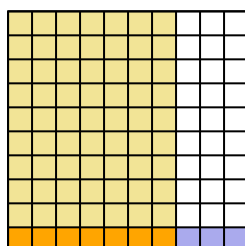
6)  $0.3 \times 0.3 =$



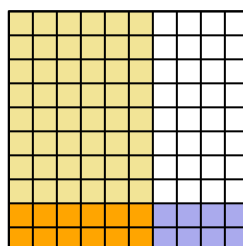
7)  $0.1 \times 0.1 =$



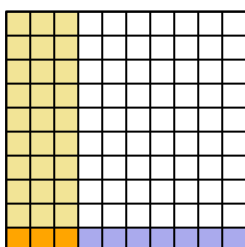
8)  $0.1 \times 0.7 =$



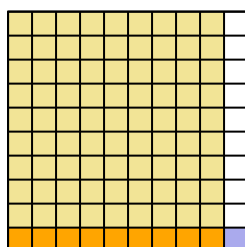
9)  $0.2 \times 0.6 =$



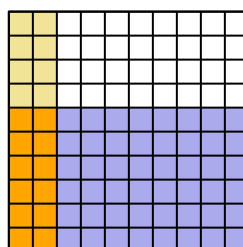
10)  $0.1 \times 0.3 =$



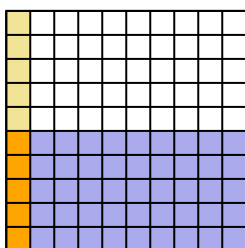
11)  $0.1 \times 0.9 =$



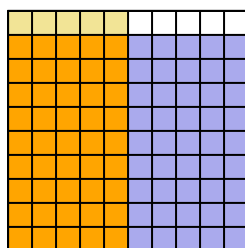
12)  $0.6 \times 0.2 =$



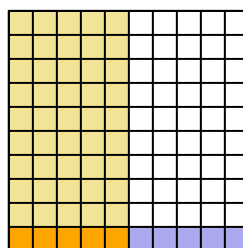
13)  $0.5 \times 0.1 =$



14)  $0.9 \times 0.5 =$



15)  $0.1 \times 0.5 =$



**Answers**

1.  $\frac{36}{100} = 0.36$

2.  $\frac{12}{100} = 0.12$

3.  $\frac{7}{100} = 0.07$

4.  $\frac{16}{100} = 0.16$

5.  $\frac{6}{100} = 0.06$

6.  $\frac{9}{100} = 0.09$

7.  $\frac{1}{100} = 0.01$

8.  $\frac{7}{100} = 0.07$

9.  $\frac{12}{100} = 0.12$

10.  $\frac{3}{100} = 0.03$

11.  $\frac{9}{100} = 0.09$

12.  $\frac{12}{100} = 0.12$

13.  $\frac{5}{100} = 0.05$

14.  $\frac{45}{100} = 0.45$

15.  $\frac{5}{100} = 0.05$