




Use the number line to solve each problem.

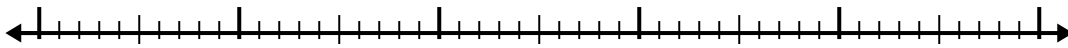
1)  $7.7 + 1.4 =$



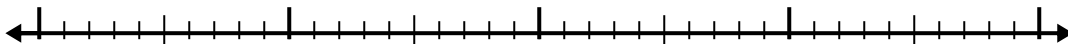
2)  $7.3 + 1.8 =$



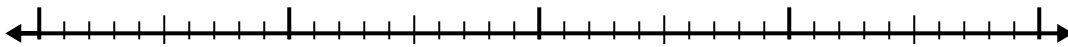
3)  $7 + 3.9 =$



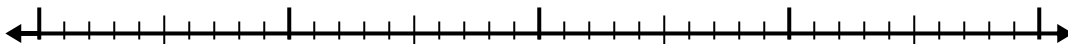
4)  $7.7 + 2.8 =$




5)  $2.9 + 2.6 =$



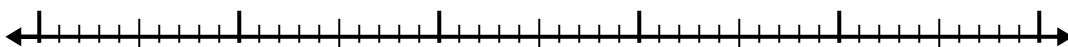
6)  $6.4 + 1.3 =$



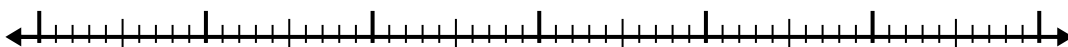
7)  $4.1 + 3.6 =$




8)  $7 + 3.1 =$



9)  $7.3 + 3.7 =$



10)  $5.7 + 1.4 =$



Answers

1. \_\_\_\_\_

2. \_\_\_\_\_

3. \_\_\_\_\_

4. \_\_\_\_\_

5. \_\_\_\_\_

6. \_\_\_\_\_

7. \_\_\_\_\_

8. \_\_\_\_\_

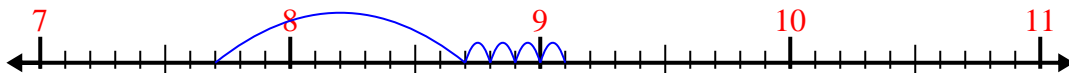
9. \_\_\_\_\_

10. \_\_\_\_\_

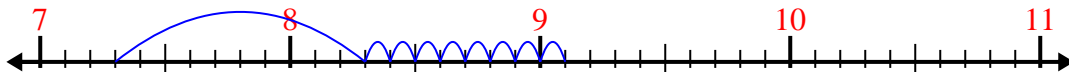


Use the number line to solve each problem.

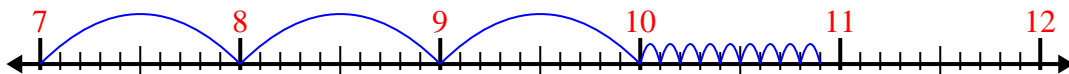
1)  $7.7 + 1.4 =$



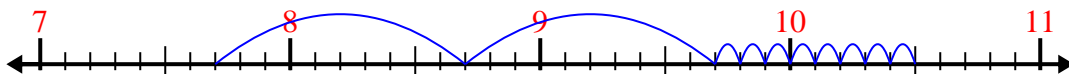
2)  $7.3 + 1.8 =$



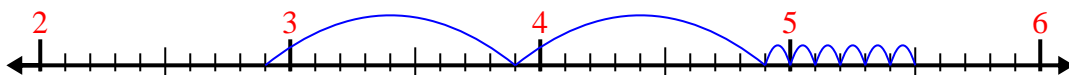
3)  $7 + 3.9 =$



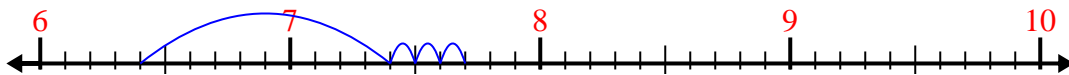
4)  $7.7 + 2.8 =$



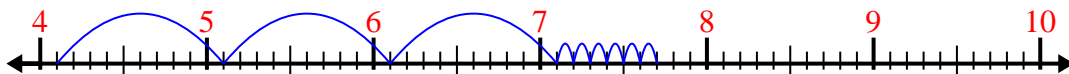
5)  $2.9 + 2.6 =$



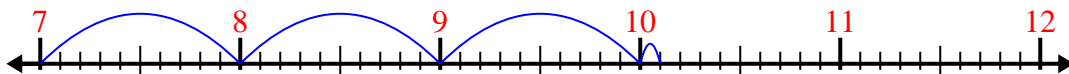
6)  $6.4 + 1.3 =$



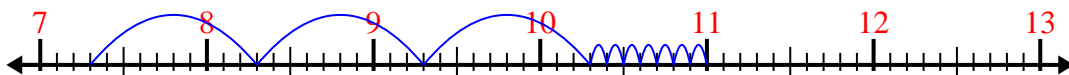
7)  $4.1 + 3.6 =$



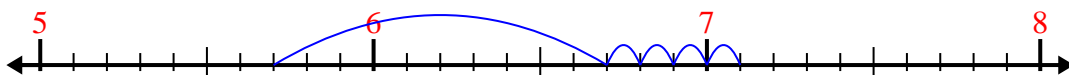
8)  $7 + 3.1 =$



9)  $7.3 + 3.7 =$



10)  $5.7 + 1.4 =$



Answers

1. 9.1

2. 9.1

3. 10.9

4. 10.5

5. 5.5

6. 7.7

7. 7.7

8. 10.1

9. 11.0

10. 7.1