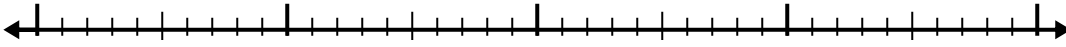




Use the number line to solve each problem.

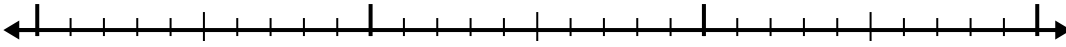
1) $4.4 + 2.6 =$



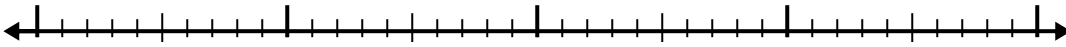
2) $3.5 + 2.7 =$



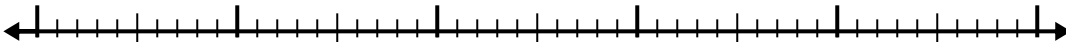
3) $1.3 + 1.2 =$



4) $3.3 + 1.9 =$



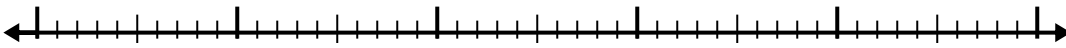
5) $8.9 + 3.4 =$



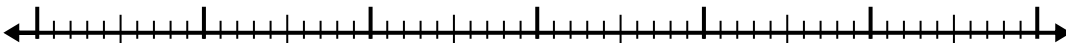
6) $8.3 + 2.7 =$



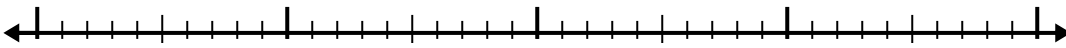
7) $5.3 + 2.7 =$



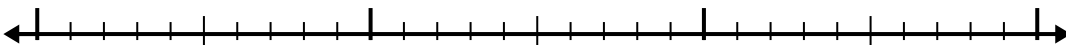
8) $1.9 + 3.1 =$



9) $8.6 + 2.3 =$



10) $4 + 1.1 =$



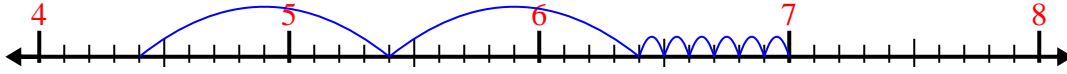
Answers

- 1. _____
- 2. _____
- 3. _____
- 4. _____
- 5. _____
- 6. _____
- 7. _____
- 8. _____
- 9. _____
- 10. _____

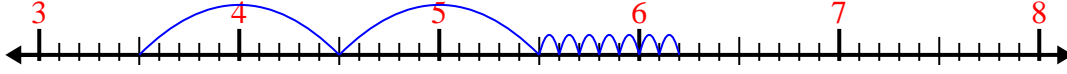


Use the number line to solve each problem.

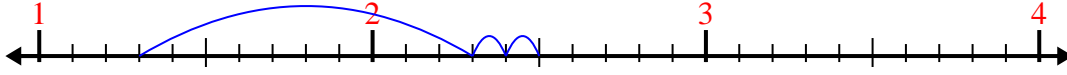
1) $4.4 + 2.6 =$



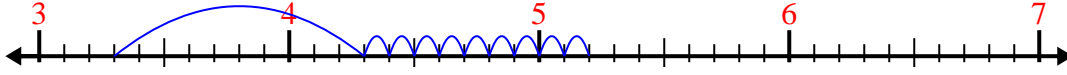
2) $3.5 + 2.7 =$



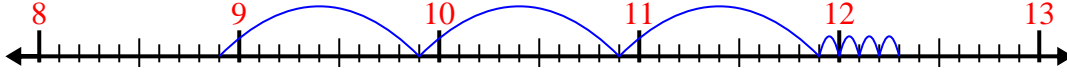
3) $1.3 + 1.2 =$



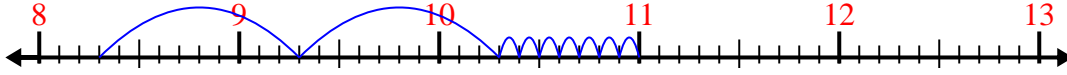
4) $3.3 + 1.9 =$



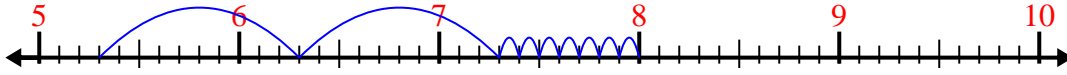
5) $8.9 + 3.4 =$



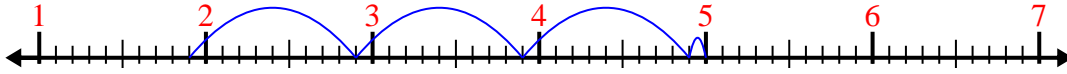
6) $8.3 + 2.7 =$



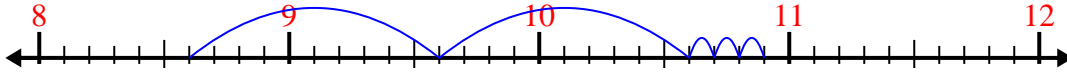
7) $5.3 + 2.7 =$



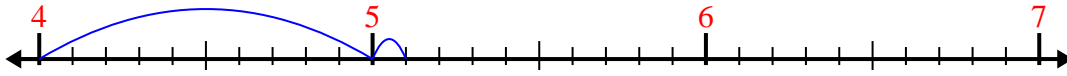
8) $1.9 + 3.1 =$



9) $8.6 + 2.3 =$



10) $4 + 1.1 =$



Answers

1. 7.0

2. 6.2

3. 2.5

4. 5.2

5. 12.3

6. 11.0

7. 8.0

8. 5.0

9. 10.9

10. 5.1