


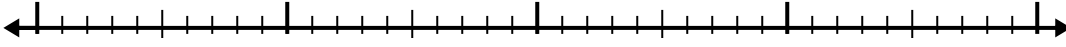


Use the number line to solve each problem.

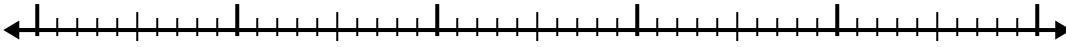
1) $5.5 + 3.6 =$



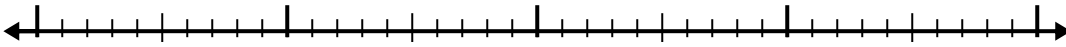
2) $6.5 + 1.6 =$



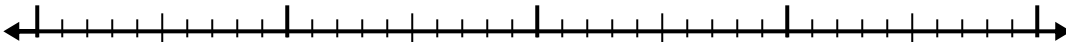
3) $3.5 + 3.2 =$



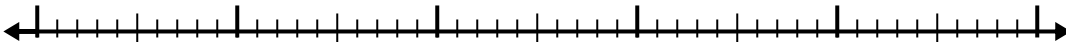
4) $7.7 + 2.6 =$




5) $3.9 + 1.9 =$



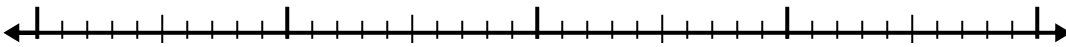
6) $5.9 + 2.3 =$



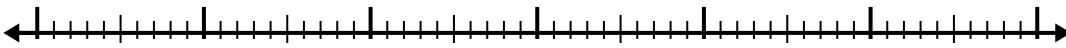
7) $4.3 + 1.6 =$



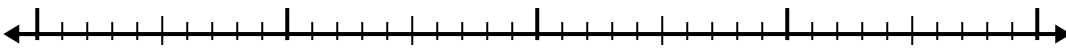
8) $8.3 + 2.9 =$



9) $7 + 3.5 =$



10) $5.6 + 2.4 =$



Answers

1. _____

2. _____

3. _____

4. _____

5. _____

6. _____

7. _____

8. _____

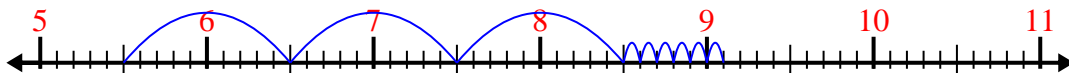
9. _____

10. _____

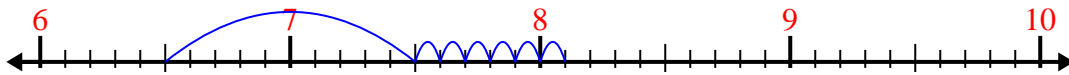


Use the number line to solve each problem.

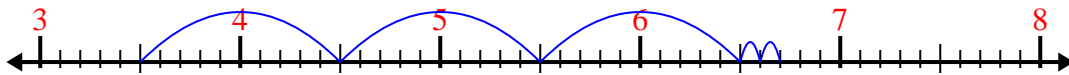
1) $5.5 + 3.6 =$



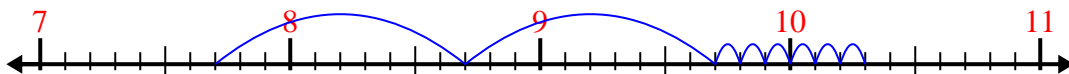
2) $6.5 + 1.6 =$



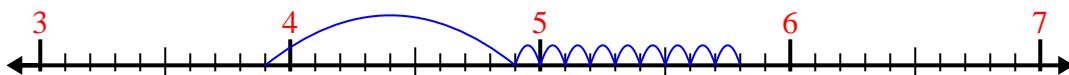
3) $3.5 + 3.2 =$



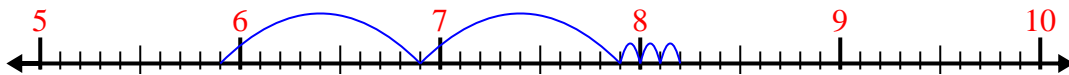
4) $7.7 + 2.6 =$



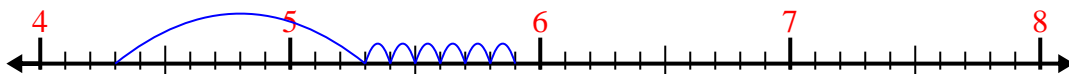
5) $3.9 + 1.9 =$



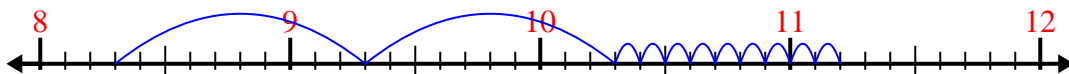
6) $5.9 + 2.3 =$



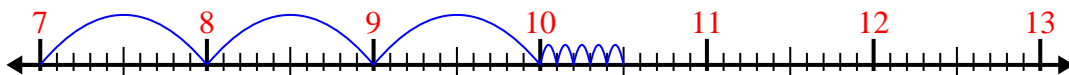
7) $4.3 + 1.6 =$



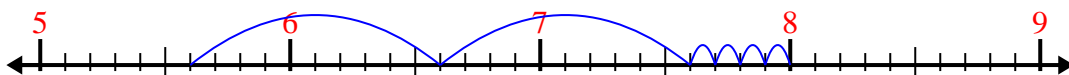
8) $8.3 + 2.9 =$



9) $7 + 3.5 =$



10) $5.6 + 2.4 =$



Answers

1. 9.1

2. 8.1

3. 6.7

4. 10.3

5. 5.8

6. 8.2

7. 5.9

8. 11.2

9. 10.5

10. 8.0