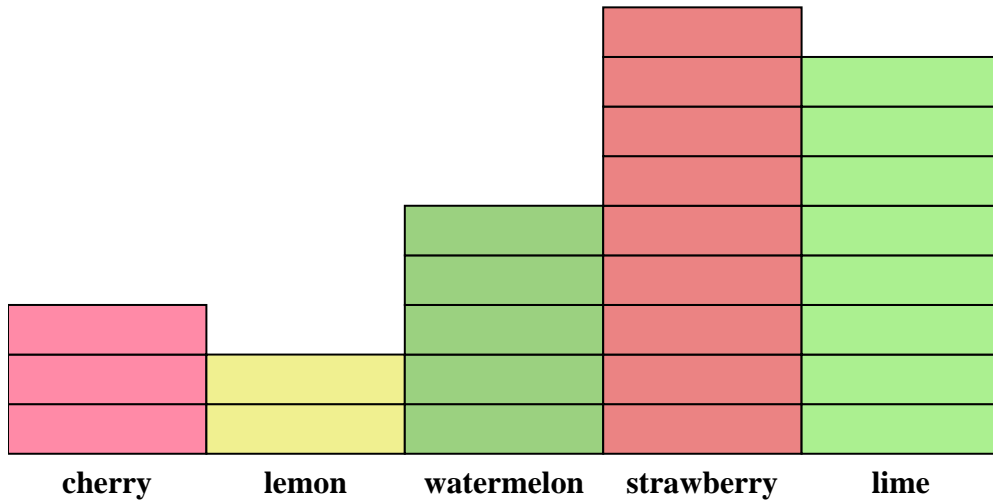




Solve each problem.



Each  = 2 pieces

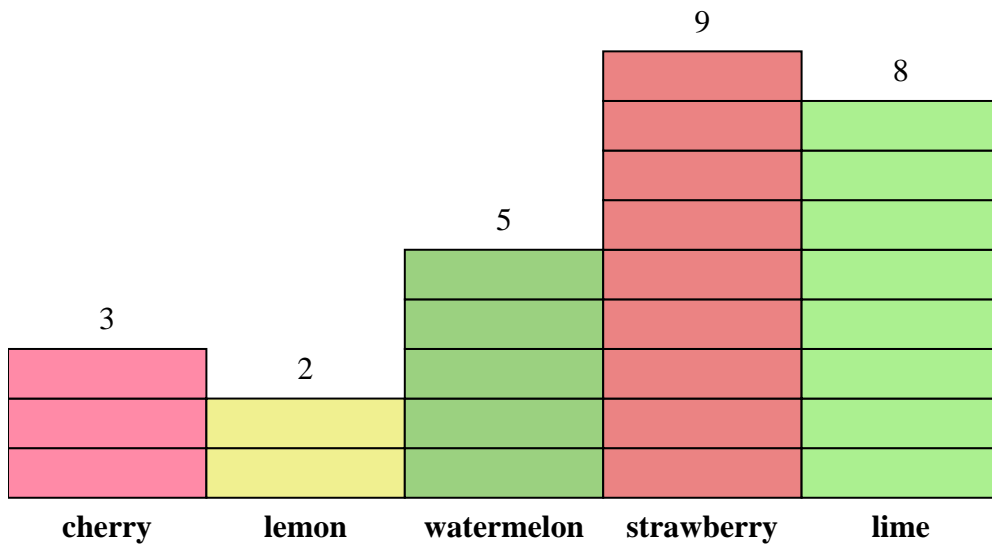
Answers

1. \_\_\_\_\_
2. \_\_\_\_\_
3. \_\_\_\_\_
4. \_\_\_\_\_
5. \_\_\_\_\_
6. \_\_\_\_\_
7. \_\_\_\_\_
8. \_\_\_\_\_
9. \_\_\_\_\_
10. \_\_\_\_\_

- 1) How many more lime pieces were there than lemon pieces?
- 2) Which flavor had the most pieces in the bag?
- 3) Which flavor had the fewest pieces in the bag?
- 4) How many pieces were there total in the box?
- 5) Were there fewer strawberry pieces or lime pieces?
- 6) Were there more lime pieces or cherry pieces?
- 7) Which flavor had exactly 16 pieces in the bag?
- 8) How many pieces were strawberry?
- 9) What is the combined number of watermelon and lime pieces?
- 10) What is the difference in the number of watermelon pieces and the number of cherry pieces?



Solve each problem.



Each  = 2 pieces

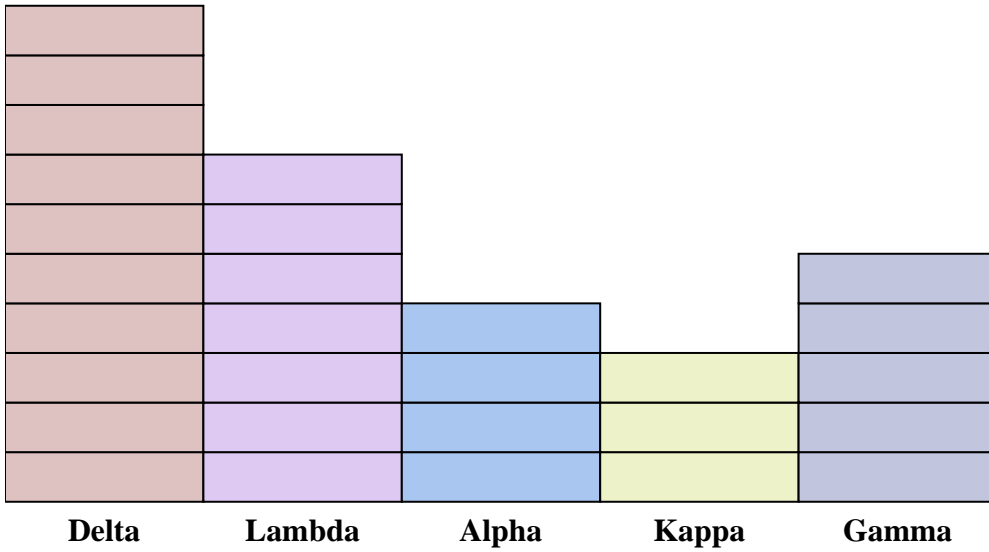
Answers

- How many more lime pieces were there than lemon pieces?
- Which flavor had the most pieces in the bag?
- Which flavor had the fewest pieces in the bag?
- How many pieces were there total in the box?
- Were there fewer strawberry pieces or lime pieces?
- Were there more lime pieces or cherry pieces?
- Which flavor had exactly 16 pieces in the bag?
- How many pieces were strawberry?
- What is the combined number of watermelon and lime pieces?
- What is the difference in the number of watermelon pieces and the number of cherry pieces?

- 12**
- strawberry**
- lemon**
- 54**
- lime**
- lime**
- lime**
- 18**
- 26**
- 4**



Solve each problem.



Each  = 2 points

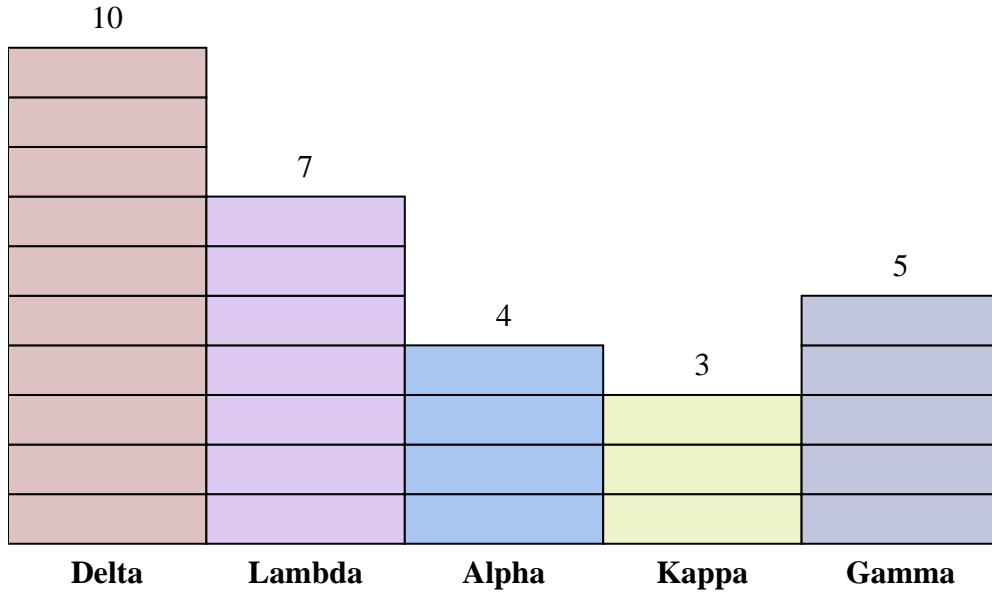
Answers

1. \_\_\_\_\_
2. \_\_\_\_\_
3. \_\_\_\_\_
4. \_\_\_\_\_
5. \_\_\_\_\_
6. \_\_\_\_\_
7. \_\_\_\_\_
8. \_\_\_\_\_
9. \_\_\_\_\_
10. \_\_\_\_\_

- 1) How many more points did team Alpha score than team Kappa?
- 2) Which team scored the most points?
- 3) Which team scored the fewest points?
- 4) What is the total number of points earned in the game?
- 5) Did team Gamma or team Lambda score fewer points?
- 6) Did team Kappa or team Gamma score more points?
- 7) Which team scored 8 points?
- 8) How many points did team Lambda score?
- 9) What is the combined points scored by Lambda and Kappa?
- 10) What is the difference in the number of points Delta scored and the number Lambda scored?



Solve each problem.



Each  = 2 points

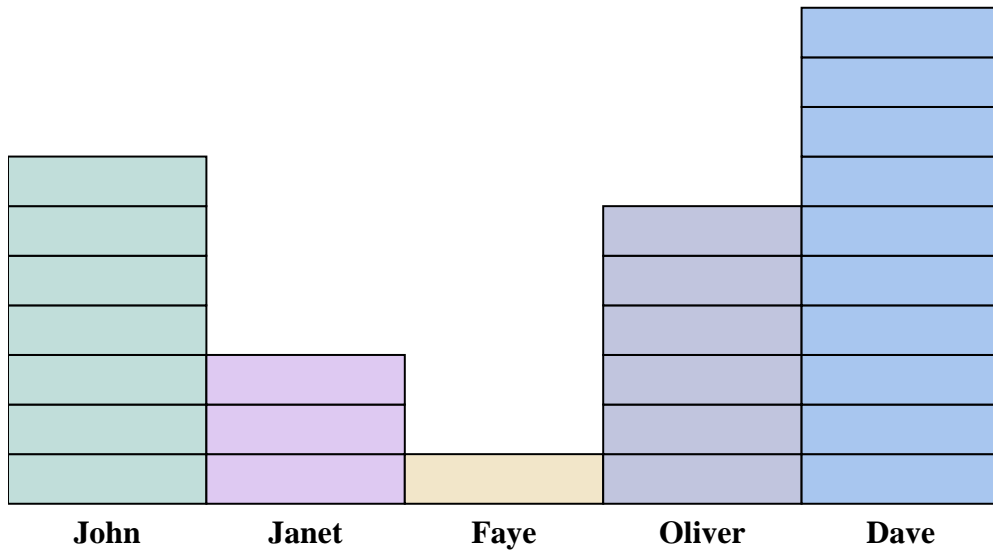
- How many more points did team Alpha score than team Kappa?
- Which team scored the most points?
- Which team scored the fewest points?
- What is the total number of points earned in the game?
- Did team Gamma or team Lambda score fewer points?
- Did team Kappa or team Gamma score more points?
- Which team scored 8 points?
- How many points did team Lambda score?
- What is the combined points scored by Lambda and Kappa?
- What is the difference in the number of points Delta scored and the number Lambda scored?

Answers

- 2**
- Delta**
- Kappa**
- 58**
- Gamma**
- Gamma**
- Alpha**
- 14**
- 20**
- 6**



Solve each problem.



Each  = 2 cans

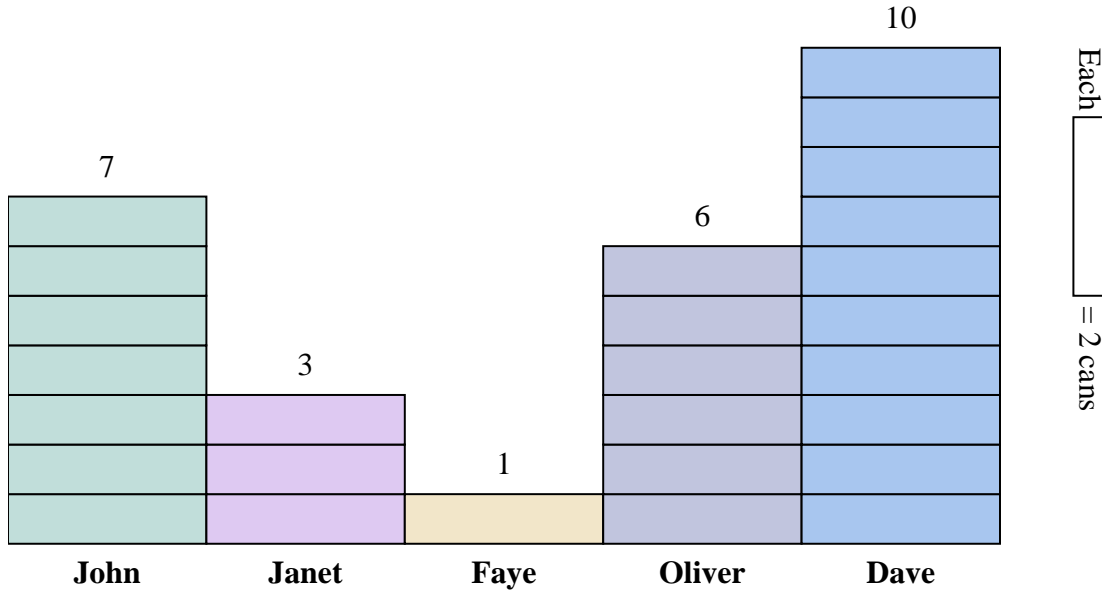
Answers

1. \_\_\_\_\_
2. \_\_\_\_\_
3. \_\_\_\_\_
4. \_\_\_\_\_
5. \_\_\_\_\_
6. \_\_\_\_\_
7. \_\_\_\_\_
8. \_\_\_\_\_
9. \_\_\_\_\_
10. \_\_\_\_\_

- 1) How many more cans did Oliver collect than Janet?
- 2) Who collected the most cans?
- 3) Who collected the fewest cans?
- 4) How many cans total did all the students collect?
- 5) Who collected fewer cans? Oliver or Faye?
- 6) Did Faye or did Janet collect more cans?
- 7) Who collected exactly 14 cans?
- 8) How many cans did Faye collect?
- 9) What is the combined number of cans Dave collected and Faye collected?
- 10) What is the difference in the number of cans John collected and the number Faye collected?



Solve each problem.




Answers

1. 6
2. Dave
3. Faye
4. 54
5. Faye
6. Janet
7. John
8. 2
9. 22
10. 12

- 1) How many more cans did Oliver collect than Janet?
- 2) Who collected the most cans?
- 3) Who collected the fewest cans?
- 4) How many cans total did all the students collect?
- 5) Who collected fewer cans? Oliver or Faye?
- 6) Did Faye or did Janet collect more cans?
- 7) Who collected exactly 14 cans?
- 8) How many cans did Faye collect?
- 9) What is the combined number of cans Dave collected and Faye collected?
- 10) What is the difference in the number of cans John collected and the number Faye collected?



Solve each problem.



Each  = 2 votes

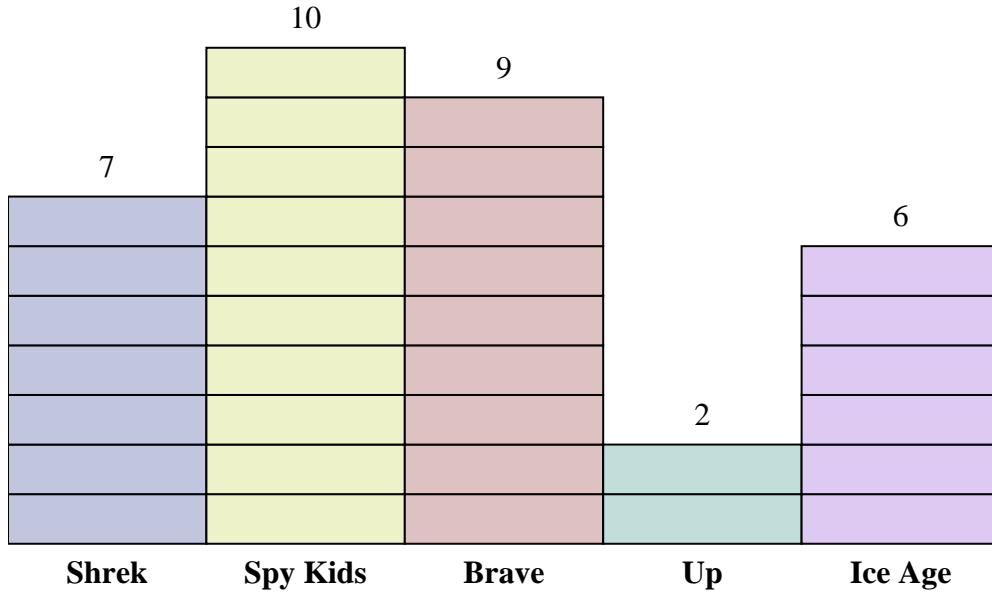
Answers

1. \_\_\_\_\_
2. \_\_\_\_\_
3. \_\_\_\_\_
4. \_\_\_\_\_
5. \_\_\_\_\_
6. \_\_\_\_\_
7. \_\_\_\_\_
8. \_\_\_\_\_
9. \_\_\_\_\_
10. \_\_\_\_\_

- 1) How many more votes did Shrek receive than Up?
- 2) Which movie received the most votes?
- 3) Which movie received the fewest votes?
- 4) What is the total number of students who voted?
- 5) Did fewer students vote for Spy Kids or for Up?
- 6) Did more people vote for Shrek or for Ice Age?
- 7) Which movie received exactly 14 votes?
- 8) How many people voted for Ice Age?
- 9) What is the combined number of people who voted for Brave and Shrek?
- 10) What is the difference in the number of people who voted for Shrek and the number who voted for Spy Kids?



Solve each problem.



Each [block] = 2 votes

Answers

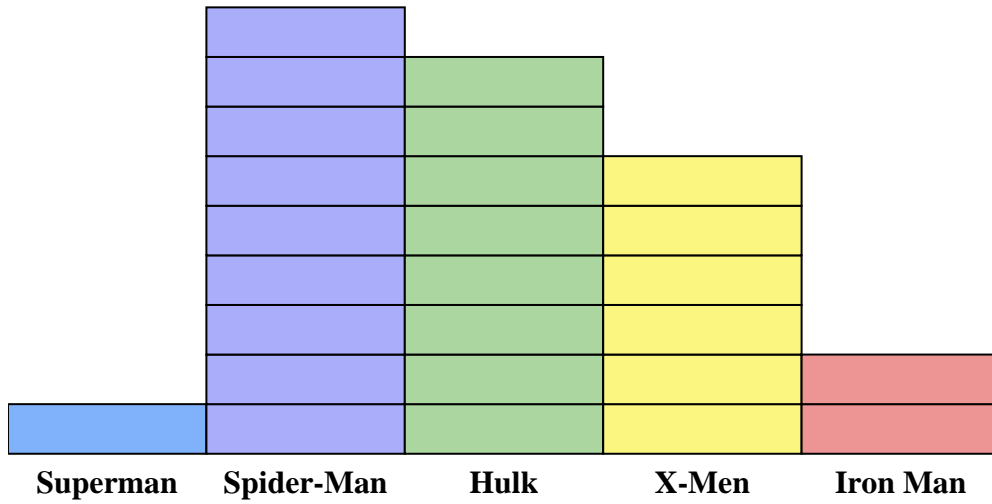
1. 10
2. Spy Kids
3. Up
4. 68
5. Up
6. Shrek
7. Shrek
8. 12
9. 32
10. 6

- 1) How many more votes did Shrek receive than Up?
- 2) Which movie received the most votes?
- 3) Which movie received the fewest votes?
- 4) What is the total number of students who voted?
- 5) Did fewer students vote for Spy Kids or for Up?
- 6) Did more people vote for Shrek or for Ice Age?
- 7) Which movie received exactly 14 votes?
- 8) How many people voted for Ice Age?
- 9) What is the combined number of people who voted for Brave and Shrek?
- 10) What is the difference in the number of people who voted for Shrek and the number who voted for Spy Kids?





Solve each problem.



Each  = 2 issues sold

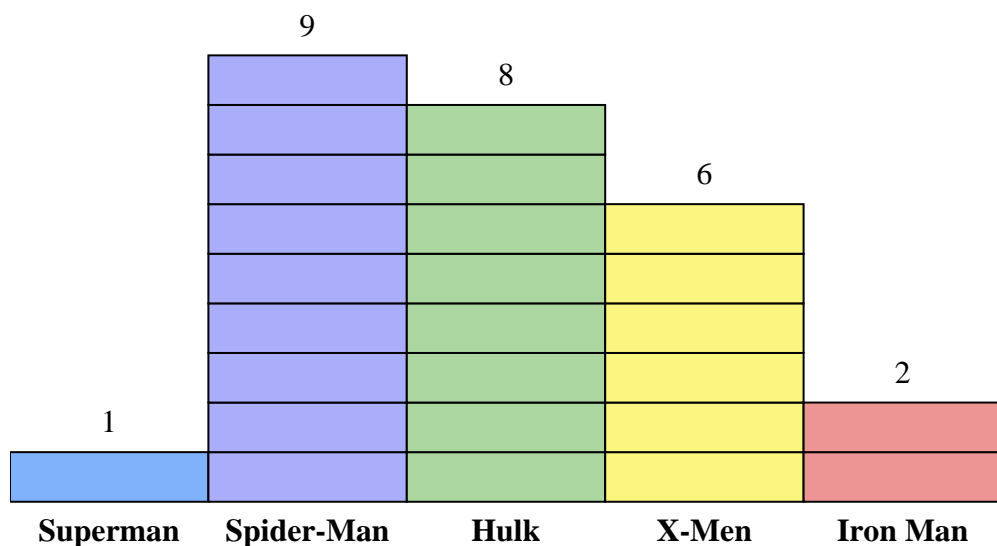
Answers

1. \_\_\_\_\_
2. \_\_\_\_\_
3. \_\_\_\_\_
4. \_\_\_\_\_
5. \_\_\_\_\_
6. \_\_\_\_\_
7. \_\_\_\_\_
8. \_\_\_\_\_
9. \_\_\_\_\_
10. \_\_\_\_\_

- 1) How many more issues of Spider-Man were sold than issues of X-Men?
- 2) Which comic series sold the most issues?
- 3) Which comic series sold the fewest issues?
- 4) What is the total number of issues sold for all the comics?
- 5) Which sold fewer, issues of Iron Man or issues of Hulk?
- 6) Which comic series sold more, Superman or Iron Man?
- 7) Which comic series sold exactly 2 issues?
- 8) How many issues of X-Men were sold?
- 9) What is the combined number of X-Men and Hulk issues sold?
- 10) What is the difference in the number of X-Men issues sold and the number of Iron Man issues sold?



Solve each problem.



Each  = 2 issues sold

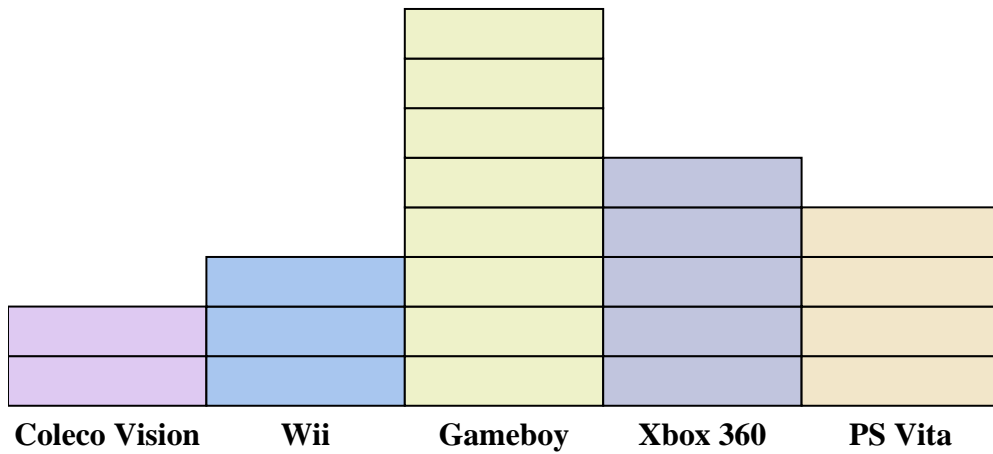
Answers

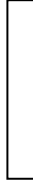
- How many more issues of Spider-Man were sold than issues of X-Men?
- Which comic series sold the most issues?
- Which comic series sold the fewest issues?
- What is the total number of issues sold for all the comics?
- Which sold fewer, issues of Iron Man or issues of Hulk?
- Which comic series sold more, Superman or Iron Man?
- Which comic series sold exactly 2 issues?
- How many issues of X-Men were sold?
- What is the combined number of X-Men and Hulk issues sold?
- What is the difference in the number of X-Men issues sold and the number of Iron Man issues sold?

- 6
- Spider-Man
- Superman
- 52
- Iron Man
- Iron Man
- Superman
- 12
- 28
- 8



Solve each problem.



Each  = 2 people owned

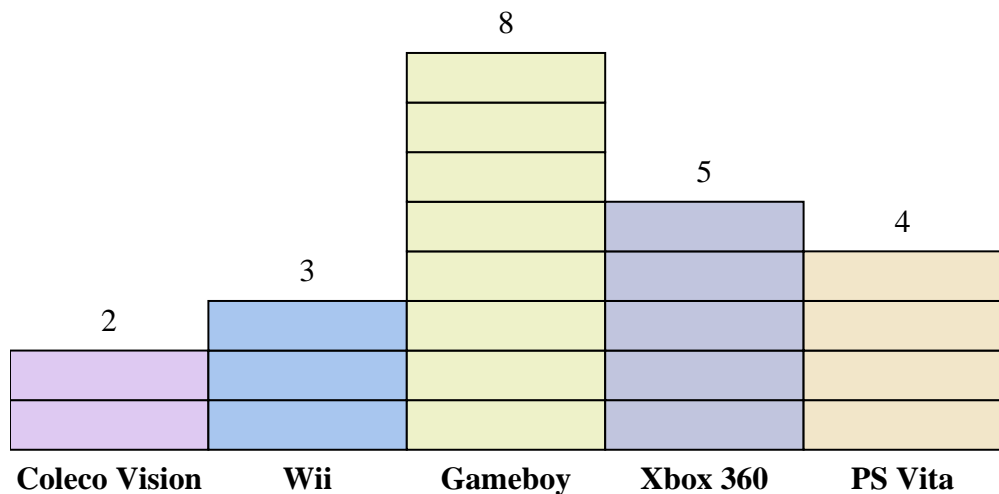
Answers

1. \_\_\_\_\_
2. \_\_\_\_\_
3. \_\_\_\_\_
4. \_\_\_\_\_
5. \_\_\_\_\_
6. \_\_\_\_\_
7. \_\_\_\_\_
8. \_\_\_\_\_
9. \_\_\_\_\_
10. \_\_\_\_\_

- 1) How many more people owned a Xbox 360 than owned a PS Vita?
- 2) Which console did the largest number of people own?
- 3) Which console did the fewest number of people own?
- 4) How many consoles total did the people own?
- 5) Did fewer people own a Coleco Visions or a Gameboys?
- 6) Did more people own a Wiis or a Gameboys?
- 7) Which console did exactly 8 people own?
- 8) How many people owned a Coleco Vision?
- 9) What is the combined number of PS Vitas and Coleco Visions owned?
- 10) What is the difference in the number of people who owned a Xbox 360 and the number who owned a Gameboy?



Solve each problem.



Each  = 2 people owned

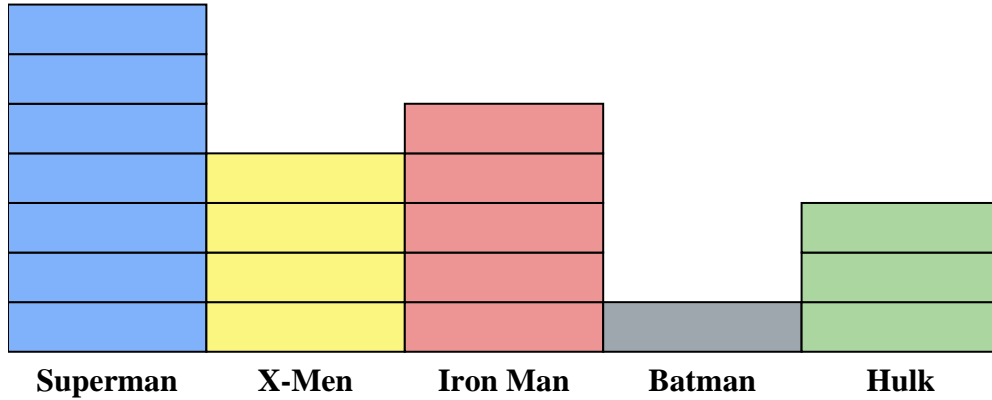
Answers

1. 2
2. Gameboy
3. Coleco Vision
4. 44
5. Coleco Vision
6. Gameboy
7. PS Vita
8. 4
9. 12
10. 6

- 1) How many more people owned a Xbox 360 than owned a PS Vita?
- 2) Which console did the largest number of people own?
- 3) Which console did the fewest number of people own?
- 4) How many consoles total did the people own?
- 5) Did fewer people own a Coleco Visions or a Gameboys?
- 6) Did more people own a Wiis or a Gameboys?
- 7) Which console did exactly 8 people own?
- 8) How many people owned a Coleco Vision?
- 9) What is the combined number of PS Vitas and Coleco Visions owned?
- 10) What is the difference in the number of people who owned a Xbox 360 and the number who owned a Gameboy?



Solve each problem.



Each  = 2 issues sold

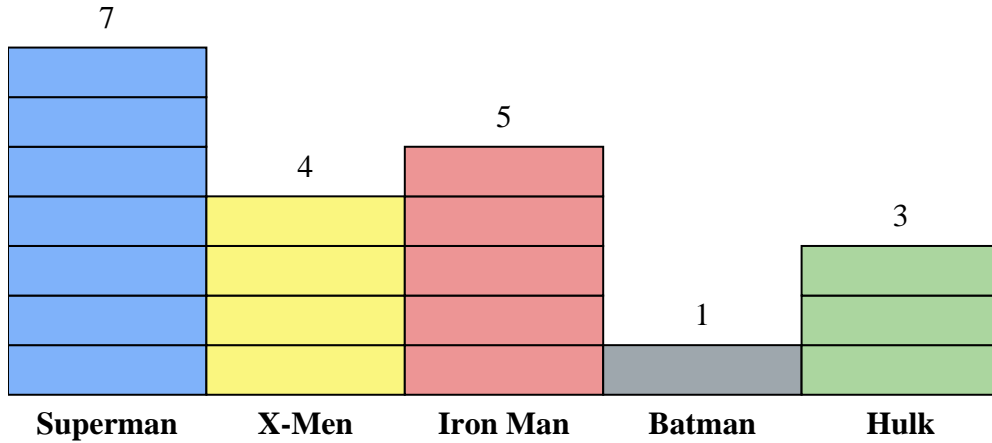
Answers

1. \_\_\_\_\_
2. \_\_\_\_\_
3. \_\_\_\_\_
4. \_\_\_\_\_
5. \_\_\_\_\_
6. \_\_\_\_\_
7. \_\_\_\_\_
8. \_\_\_\_\_
9. \_\_\_\_\_
10. \_\_\_\_\_

- 1) How many more issues of Iron Man were sold than issues of Hulk?
- 2) Which comic series sold the most issues?
- 3) Which comic series sold the fewest issues?
- 4) What is the total number of issues sold for all the comics?
- 5) Which sold fewer, issues of Batman or issues of Iron Man?
- 6) Which comic series sold more, Batman or X-Men?
- 7) Which comic series sold exactly 8 issues?
- 8) How many issues of Batman were sold?
- 9) What is the combined number of Iron Man and Superman issues sold?
- 10) What is the difference in the number of X-Men issues sold and the number of Hulk issues sold?



Solve each problem.



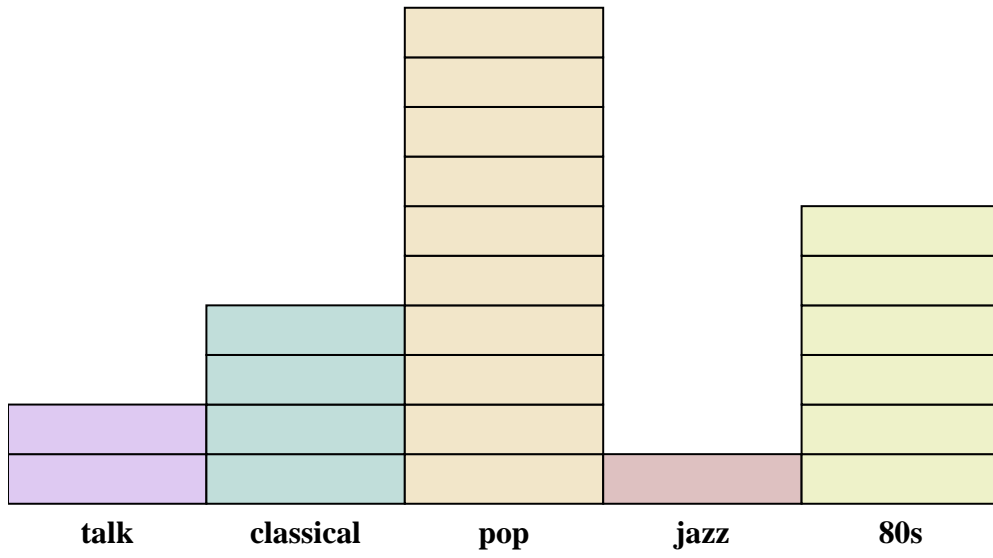
Answers

1. 4
2. Superman
3. Batman
4. 40
5. Batman
6. X-Men
7. X-Men
8. 2
9. 24
10. 2

- 1) How many more issues of Iron Man were sold than issues of Hulk?
- 2) Which comic series sold the most issues?
- 3) Which comic series sold the fewest issues?
- 4) What is the total number of issues sold for all the comics?
- 5) Which sold fewer, issues of Batman or issues of Iron Man?
- 6) Which comic series sold more, Batman or X-Men?
- 7) Which comic series sold exactly 8 issues?
- 8) How many issues of Batman were sold?
- 9) What is the combined number of Iron Man and Superman issues sold?
- 10) What is the difference in the number of X-Men issues sold and the number of Hulk issues sold?



Solve each problem.



Each  = 2 ads played

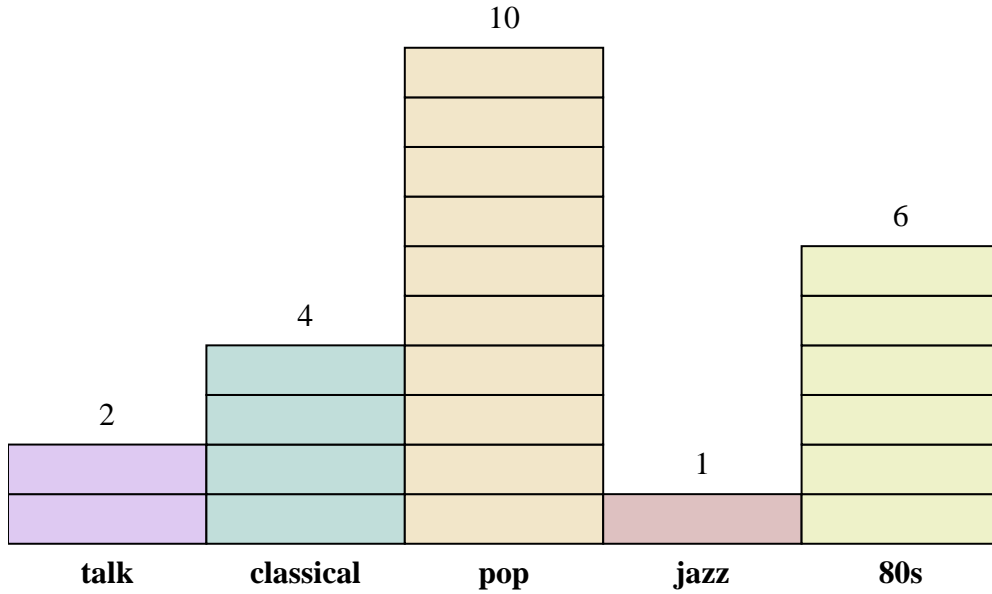
Answers

1. \_\_\_\_\_
2. \_\_\_\_\_
3. \_\_\_\_\_
4. \_\_\_\_\_
5. \_\_\_\_\_
6. \_\_\_\_\_
7. \_\_\_\_\_
8. \_\_\_\_\_
9. \_\_\_\_\_
10. \_\_\_\_\_

- 1) How many more ads did the talk station have than the jazz station?
- 2) Which station had the most ads?
- 3) Which station had the fewest ads?
- 4) What is the total number of ads on all the stations?
- 5) Were there fewer ads on the classical station or the talk station?
- 6) Were there more ads on the pop station or the talk station?
- 7) Which station had exactly 20 ads?
- 8) How many ads were on the talk station?
- 9) What is the combined number of ads played on the jazz station and the classical station?
- 10) What is the difference in the number of ads played on the pop station and the number played on the 80s station?



Solve each problem.



Each  = 2 ads played

Answers


1. 2
2. pop
3. jazz
4. 46
5. talk
6. pop
7. pop
8. 4
9. 10
10. 8

- 1) How many more ads did the talk station have than the jazz station?
- 2) Which station had the most ads?
- 3) Which station had the fewest ads?
- 4) What is the total number of ads on all the stations?
- 5) Were there fewer ads on the classical station or the talk station?
- 6) Were there more ads on the pop station or the talk station?
- 7) Which station had exactly 20 ads?
- 8) How many ads were on the talk station?
- 9) What is the combined number of ads played on the jazz station and the classical station?
- 10) What is the difference in the number of ads played on the pop station and the number played on the 80s station?





Solve each problem.



Each  = 2 votes

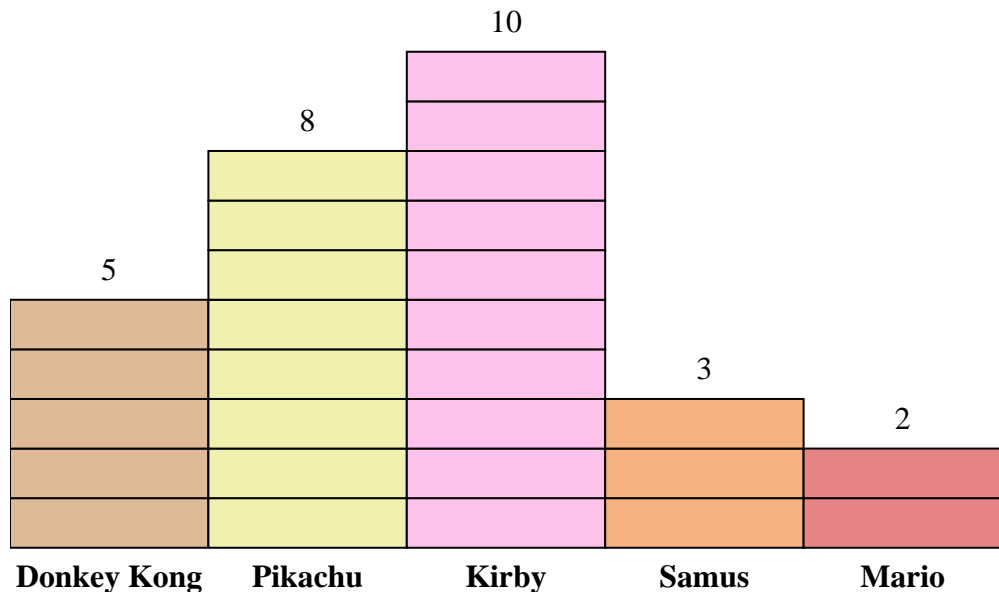
Answers

1. \_\_\_\_\_
2. \_\_\_\_\_
3. \_\_\_\_\_
4. \_\_\_\_\_
5. \_\_\_\_\_
6. \_\_\_\_\_
7. \_\_\_\_\_
8. \_\_\_\_\_
9. \_\_\_\_\_
10. \_\_\_\_\_

- 1) How many more people liked Donkey Kong than liked Mario?
- 2) Which character did the largest number of people say was their favorite?
- 3) Which character did the fewest number of people say was their favorite?
- 4) How many people total answered the poll?
- 5) Did fewer people like Pikachu or Kirby?
- 6) Did more people like Samus or Mario?
- 7) Which character did exactly 4 people say was their favorite?
- 8) How many people liked Pikachu the best?
- 9) What is the combined number of people who liked Kirby and Mario?
- 10) What is the difference in the number of people who liked Kirby and the number who liked Samus?



Solve each problem.



Each = 2 votes

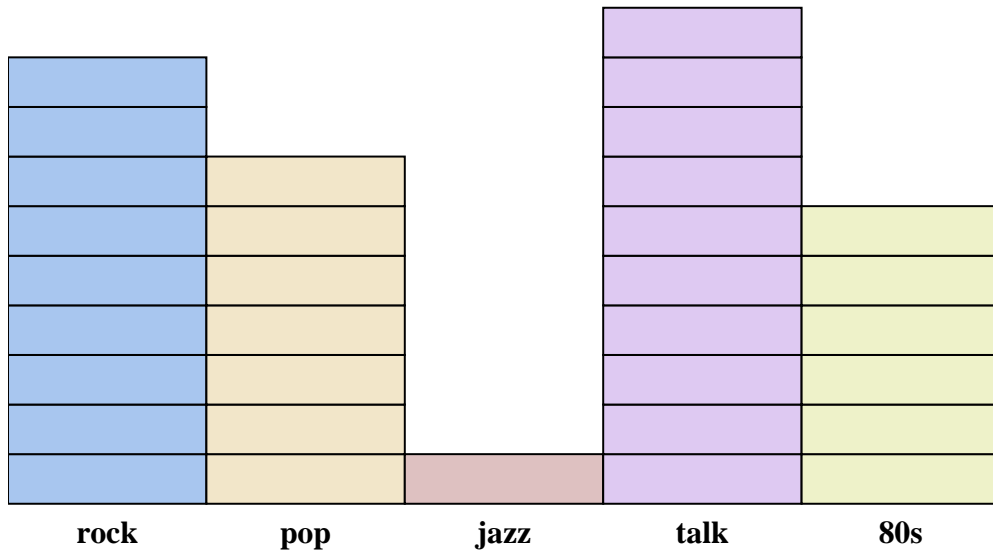
Answers

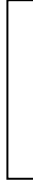
1. 6
2. Kirby
3. Mario
4. 56
5. Pikachu
6. Samus
7. Mario
8. 16
9. 24
10. 14

- 1) How many more people liked Donkey Kong than liked Mario?
- 2) Which character did the largest number of people say was their favorite?
- 3) Which character did the fewest number of people say was their favorite?
- 4) How many people total answered the poll?
- 5) Did fewer people like Pikachu or Kirby?
- 6) Did more people like Samus or Mario?
- 7) Which character did exactly 4 people say was their favorite?
- 8) How many people liked Pikachu the best?
- 9) What is the combined number of people who liked Kirby and Mario?
- 10) What is the difference in the number of people who liked Kirby and the number who liked Samus?



Solve each problem.



Each  = 2 ads played

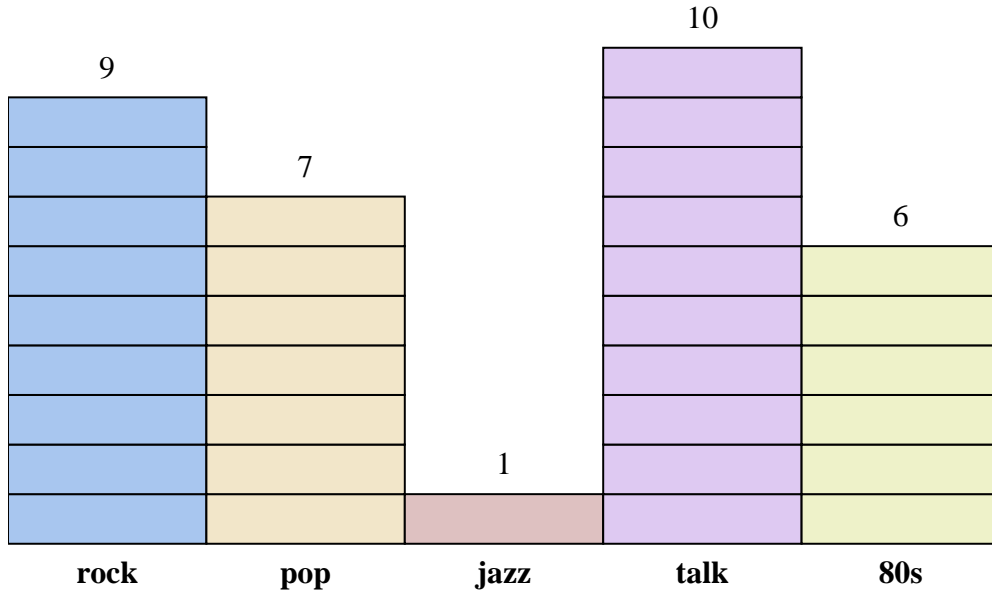
Answers

1. \_\_\_\_\_
2. \_\_\_\_\_
3. \_\_\_\_\_
4. \_\_\_\_\_
5. \_\_\_\_\_
6. \_\_\_\_\_
7. \_\_\_\_\_
8. \_\_\_\_\_
9. \_\_\_\_\_
10. \_\_\_\_\_

- 1) How many more ads did the rock station have than the pop station?
- 2) Which station had the most ads?
- 3) Which station had the fewest ads?
- 4) What is the total number of ads on all the stations?
- 5) Were there fewer ads on the talk station or the jazz station?
- 6) Were there more ads on the jazz station or the rock station?
- 7) Which station had exactly 14 ads?
- 8) How many ads were on the 80s station?
- 9) What is the combined number of ads played on the talk station and the rock station?
- 10) What is the difference in the number of ads played on the 80s station and the number played on the pop station?



Solve each problem.



Each  = 2 ads played

Answers

1. 4
2. talk
3. jazz
4. 66
5. jazz
6. rock
7. pop
8. 12
9. 38
10. 2

- 1) How many more ads did the rock station have than the pop station?
- 2) Which station had the most ads?
- 3) Which station had the fewest ads?
- 4) What is the total number of ads on all the stations?
- 5) Were there fewer ads on the talk station or the jazz station?
- 6) Were there more ads on the jazz station or the rock station?
- 7) Which station had exactly 14 ads?
- 8) How many ads were on the 80s station?
- 9) What is the combined number of ads played on the talk station and the rock station?
- 10) What is the difference in the number of ads played on the 80s station and the number played on the pop station?