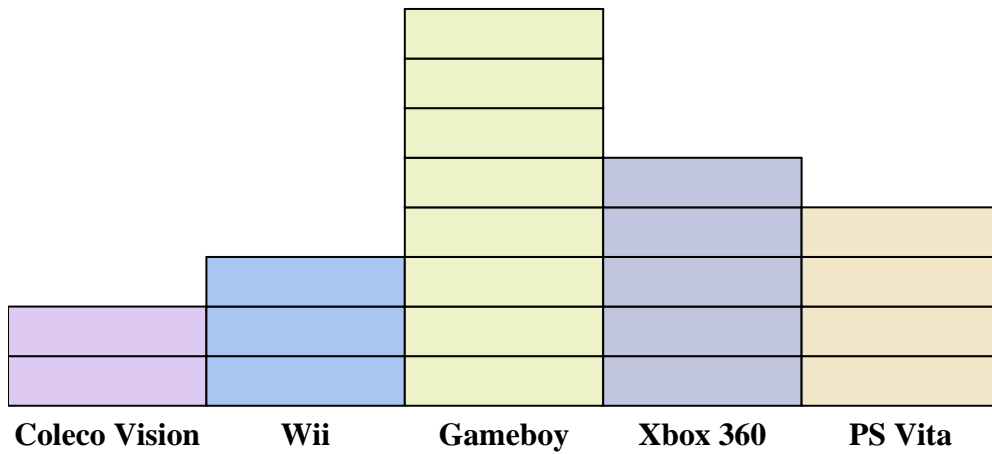
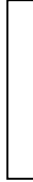




Solve each problem.



Each  = 2 people owned

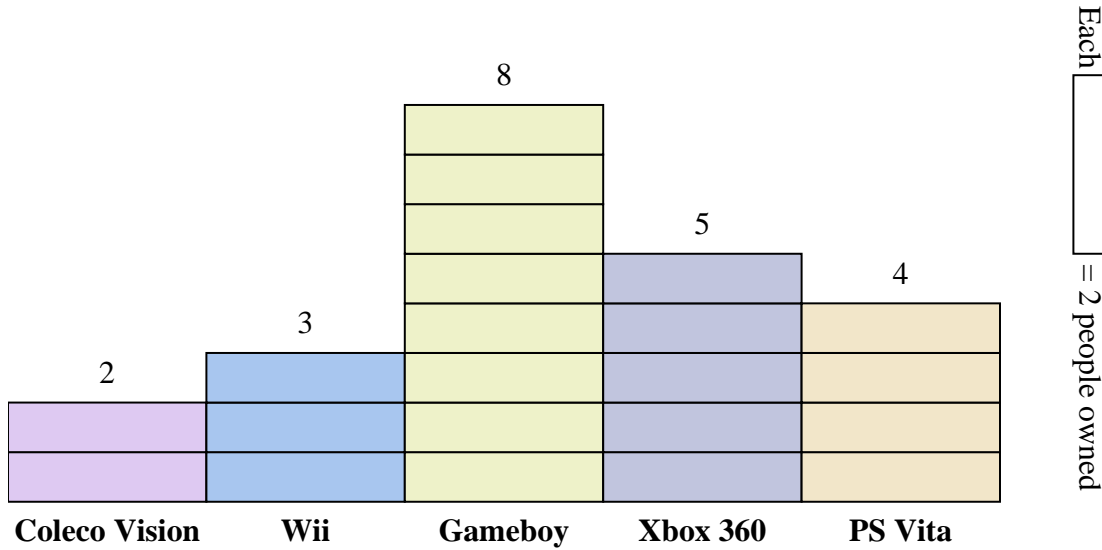
Answers

1. _____
2. _____
3. _____
4. _____
5. _____
6. _____
7. _____
8. _____
9. _____
10. _____

- 1) How many more people owned a Xbox 360 than owned a PS Vita?
- 2) Which console did the largest number of people own?
- 3) Which console did the fewest number of people own?
- 4) How many consoles total did the people own?
- 5) Did fewer people own a Coleco Visions or a Gameboys?
- 6) Did more people own a Wiis or a Gameboys?
- 7) Which console did exactly 8 people own?
- 8) How many people owned a Coleco Vision?
- 9) What is the combined number of PS Vitas and Coleco Visions owned?
- 10) What is the difference in the number of people who owned a Xbox 360 and the number who owned a Gameboy?



Solve each problem.



- How many more people owned a Xbox 360 than owned a PS Vita?
- Which console did the largest number of people own?
- Which console did the fewest number of people own?
- How many consoles total did the people own?
- Did fewer people own a Coleco Visions or a Gameboys?
- Did more people own a Wiis or a Gameboys?
- Which console did exactly 8 people own?
- How many people owned a Coleco Vision?
- What is the combined number of PS Vitas and Coleco Visions owned?
- What is the difference in the number of people who owned a Xbox 360 and the number who owned a Gameboy?

Answers

- 2
- Gameboy
- Coleco Vision
- 44
- Coleco Vision
- Gameboy
- PS Vita
- 4
- 12
- 6