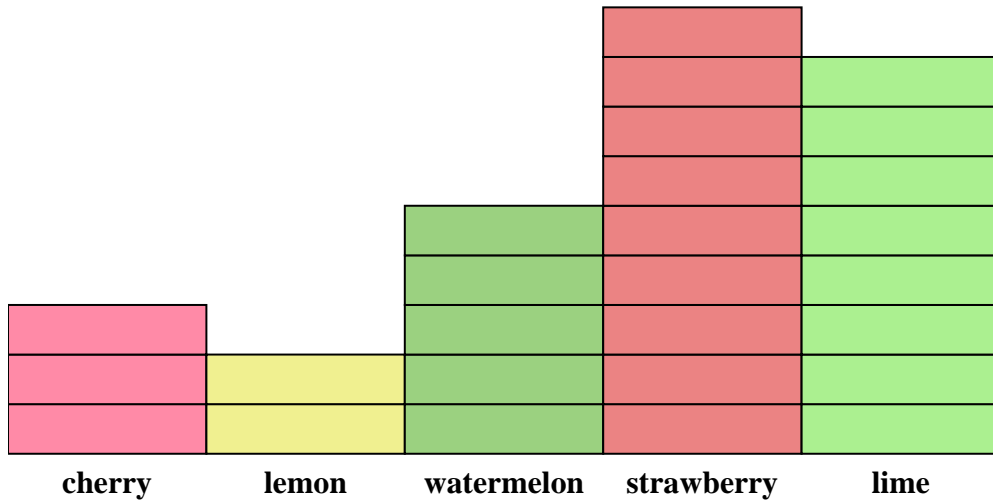




Solve each problem.



Each  = 2 pieces

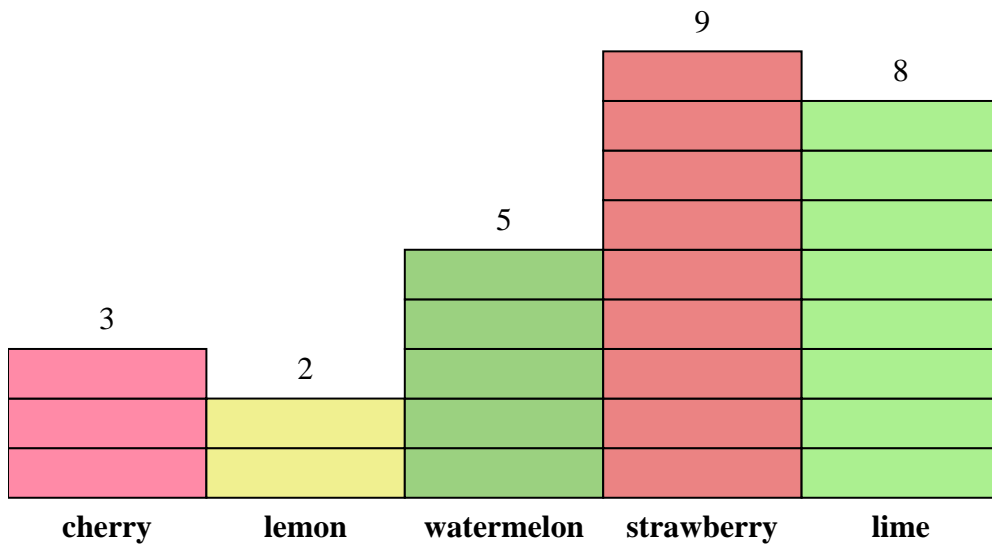
Answers

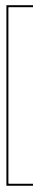
1. _____
2. _____
3. _____
4. _____
5. _____
6. _____
7. _____
8. _____
9. _____
10. _____

- 1) How many more lime pieces were there than lemon pieces?
- 2) Which flavor had the most pieces in the bag?
- 3) Which flavor had the fewest pieces in the bag?
- 4) How many pieces were there total in the box?
- 5) Were there fewer strawberry pieces or lime pieces?
- 6) Were there more lime pieces or cherry pieces?
- 7) Which flavor had exactly 16 pieces in the bag?
- 8) How many pieces were strawberry?
- 9) What is the combined number of watermelon and lime pieces?
- 10) What is the difference in the number of watermelon pieces and the number of cherry pieces?



Solve each problem.



Each  = 2 pieces

Answers

1. 12
2. strawberry
3. lemon
4. 54
5. lime
6. lime
7. lime
8. 18
9. 26
10. 4

- 1) How many more lime pieces were there than lemon pieces?
- 2) Which flavor had the most pieces in the bag?
- 3) Which flavor had the fewest pieces in the bag?
- 4) How many pieces were there total in the box?
- 5) Were there fewer strawberry pieces or lime pieces?
- 6) Were there more lime pieces or cherry pieces?
- 7) Which flavor had exactly 16 pieces in the bag?
- 8) How many pieces were strawberry?
- 9) What is the combined number of watermelon and lime pieces?
- 10) What is the difference in the number of watermelon pieces and the number of cherry pieces?