

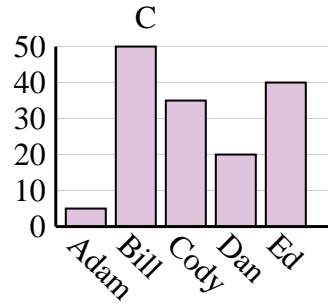
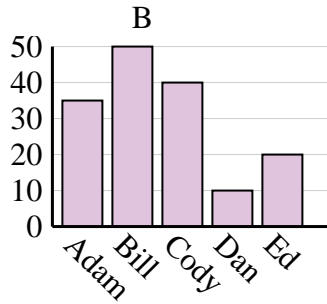
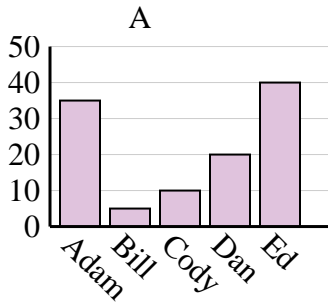


Determine which graph (A, B or C) best represents the information in the table.

Answers

1)

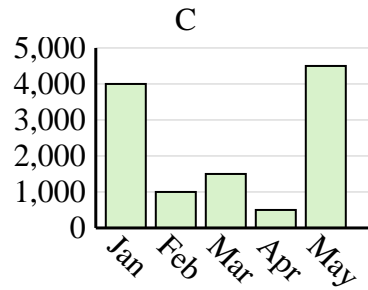
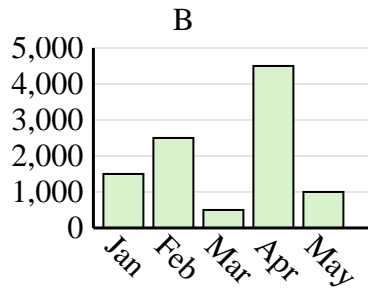
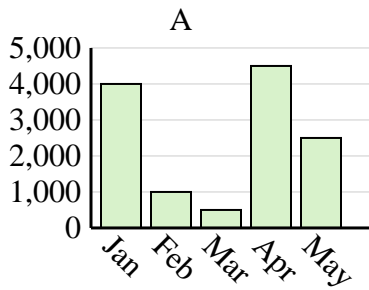
Name	Adam	Bill	Cody	Dan	Ed
Points	35	50	40	10	20



1. \_\_\_\_\_
2. \_\_\_\_\_
3. \_\_\_\_\_
4. \_\_\_\_\_

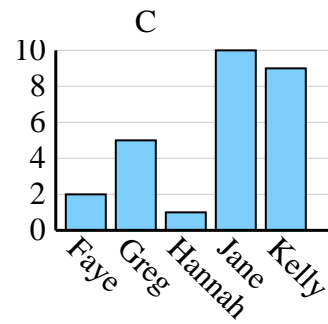
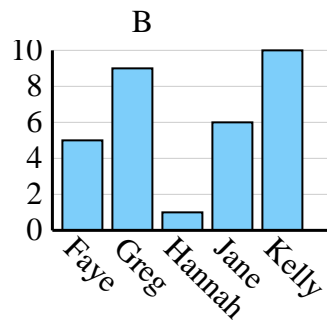
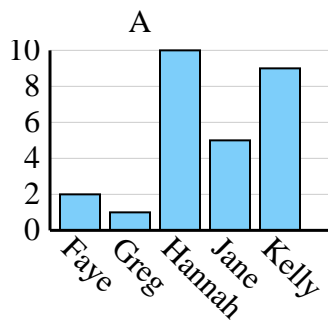
2)

Sales	Jan	Feb	Mar	Apr	May
Month	4,000	1,000	1,500	500	4,500



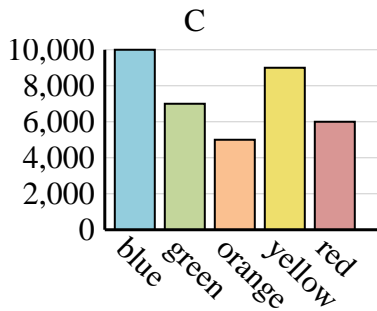
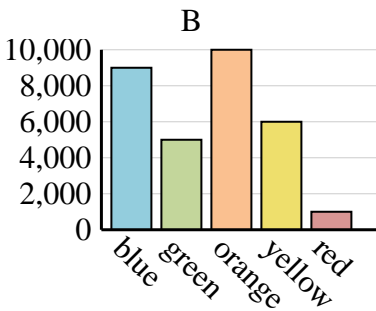
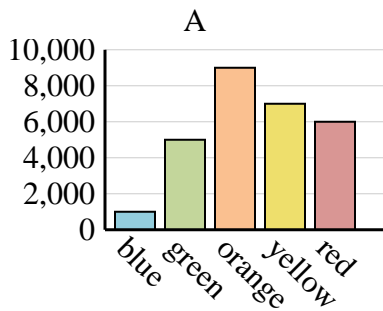
3)

Name	Faye	Greg	Hannah	Jane	Kelly
States Lived In	5	9	1	6	10



4)

Favorite Color	blue	green	orange	yellow	red
People	1,000	5,000	9,000	7,000	6,000

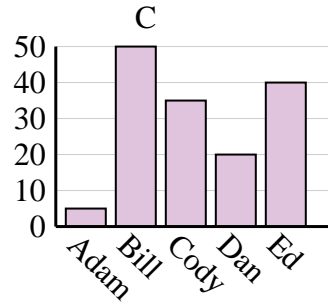
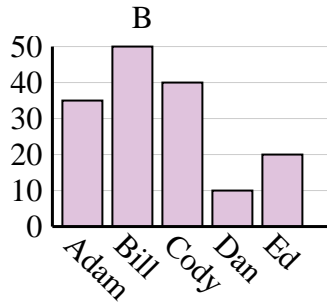
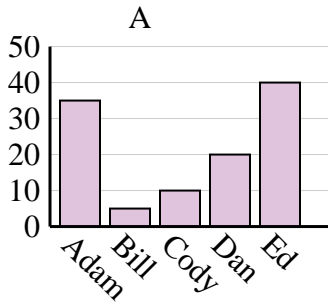




Determine which graph (A, B or C) best represents the information in the table.

Answers

<b>Name</b>	Adam	Bill	Cody	Dan	Ed
<b>Points</b>	35	50	40	10	20



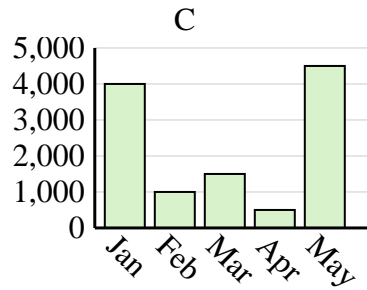
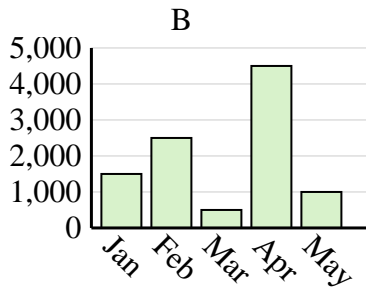
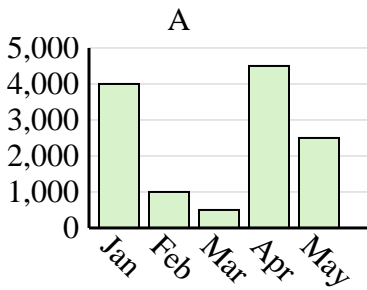
1. **B**

2. **C**

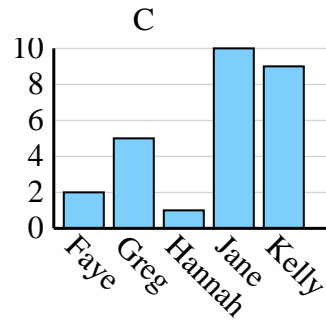
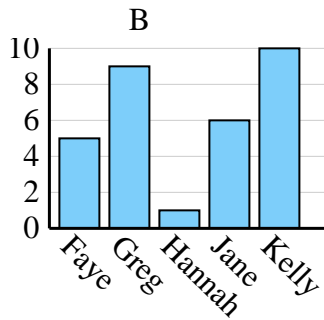
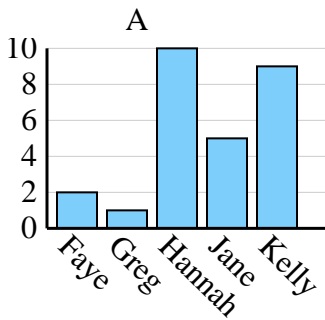
3. **B**

4. **A**

<b>Sales</b>	Jan	Feb	Mar	Apr	May
<b>Month</b>	4,000	1,000	1,500	500	4,500



<b>Name</b>	Faye	Greg	Hannah	Jane	Kelly
<b>States Lived In</b>	5	9	1	6	10



<b>Favorite Color</b>	blue	green	orange	yellow	red
<b>People</b>	1,000	5,000	9,000	7,000	6,000

