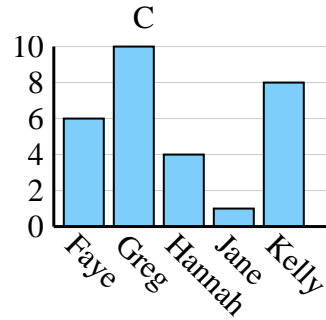
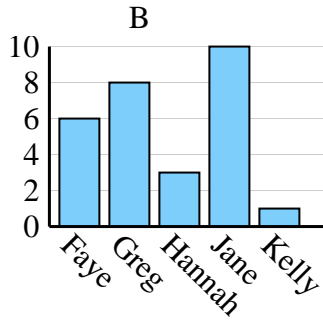
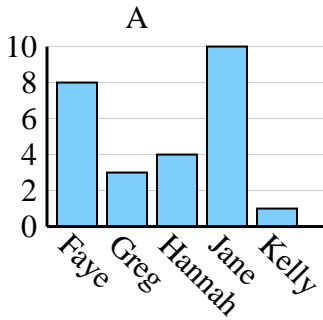




Determine which graph (A, B or C) best represents the information in the table.

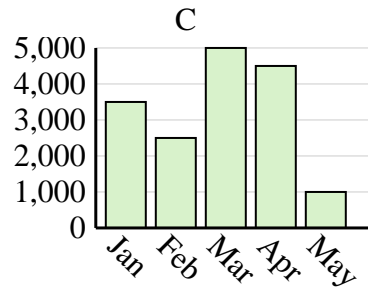
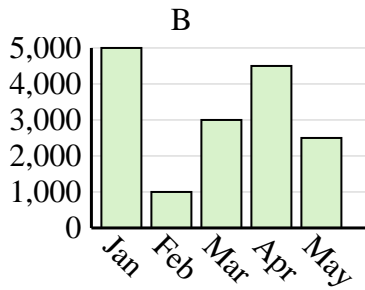
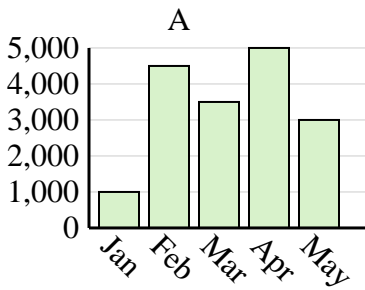
Answers

1)	<b>Name</b>	Faye	Greg	Hannah	Jane	Kelly
	<b>States Lived In</b>	6	10	4	1	8

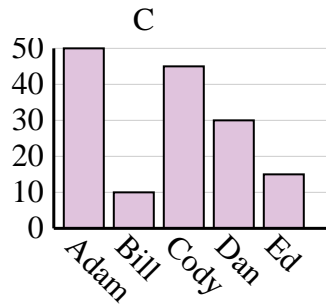
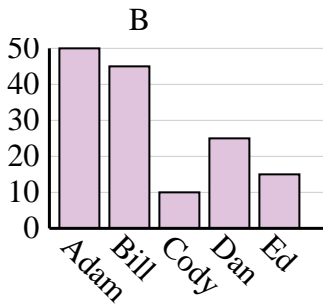
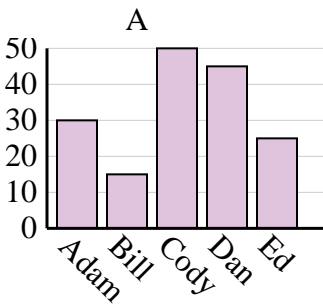


1. \_\_\_\_\_
2. \_\_\_\_\_
3. \_\_\_\_\_
4. \_\_\_\_\_

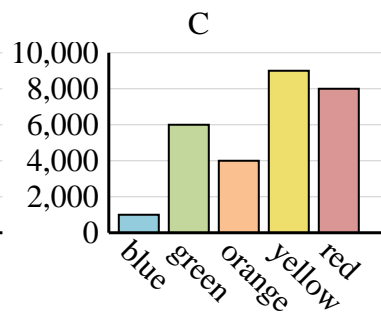
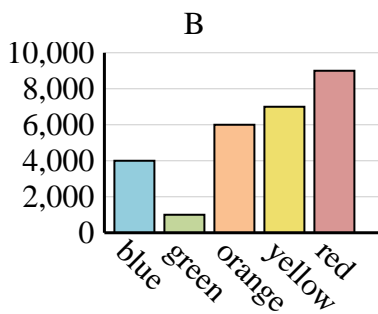
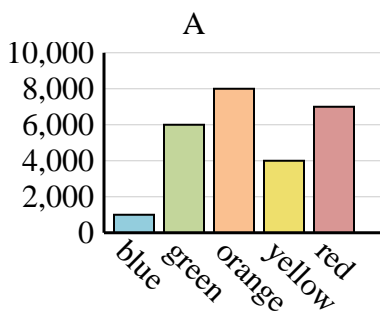
2)	<b>Sales</b>	Jan	Feb	Mar	Apr	May
	<b>Month</b>	3,500	2,500	5,000	4,500	1,000



3)	<b>Name</b>	Adam	Bill	Cody	Dan	Ed
	<b>Points</b>	30	15	50	45	25



4)	<b>Favorite Color</b>	blue	green	orange	yellow	red
	<b>People</b>	4,000	1,000	6,000	7,000	9,000

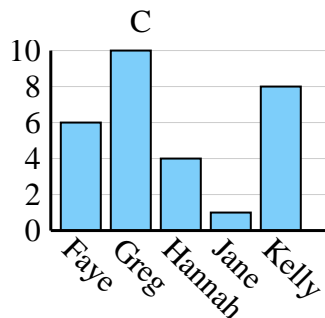
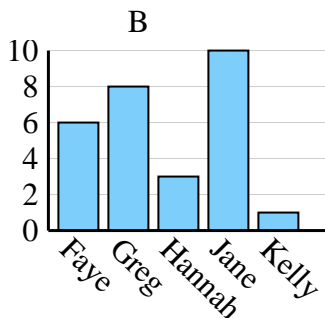
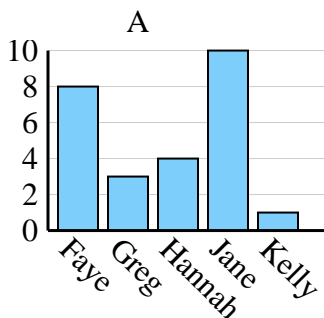




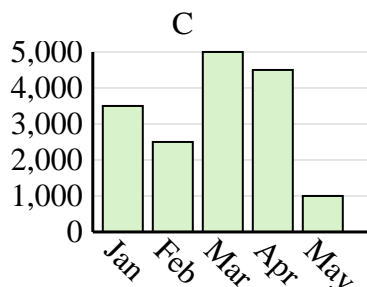
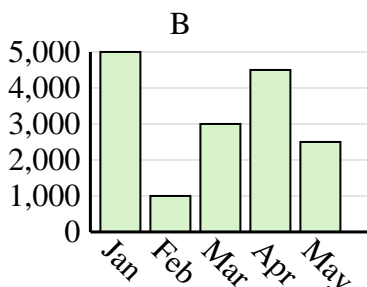
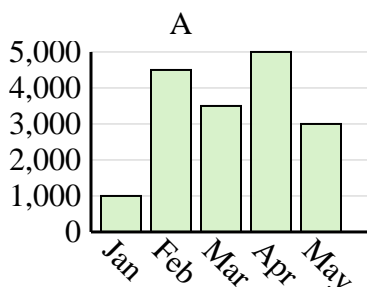
Determine which graph (A, B or C) best represents the information in the table.

Answers

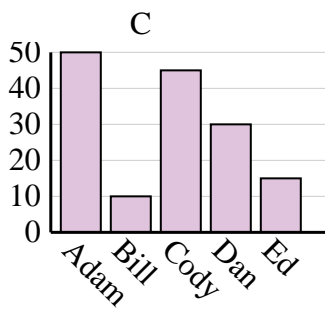
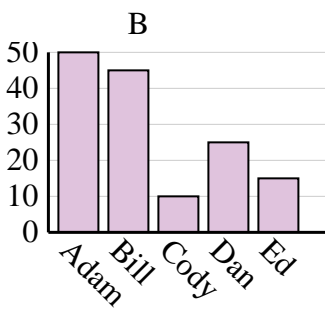
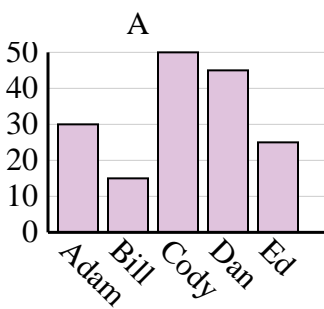
<b>Name</b>	Faye	Greg	Hannah	Jane	Kelly
<b>States Lived In</b>	6	10	4	1	8



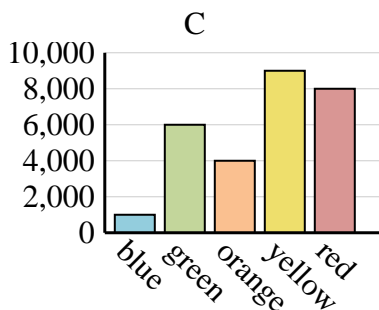
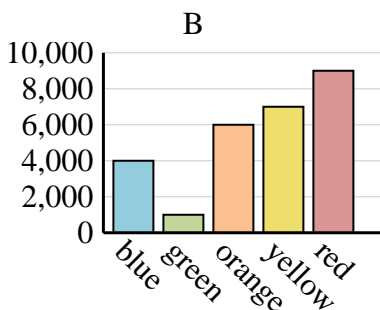
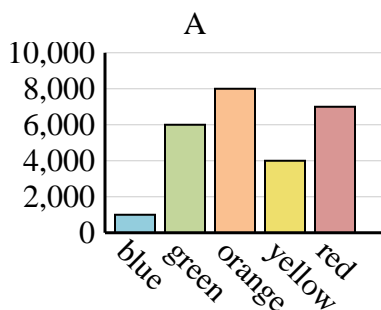
<b>Sales</b>	Jan	Feb	Mar	Apr	May
<b>Month</b>	3,500	2,500	5,000	4,500	1,000



<b>Name</b>	Adam	Bill	Cody	Dan	Ed
<b>Points</b>	30	15	50	45	25



<b>Favorite Color</b>	blue	green	orange	yellow	red
<b>People</b>	4,000	1,000	6,000	7,000	9,000



1. **C**
2. **C**
3. **A**
4. **B**