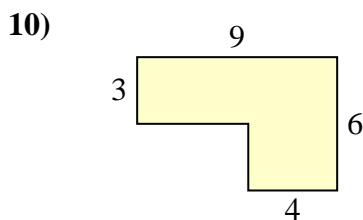
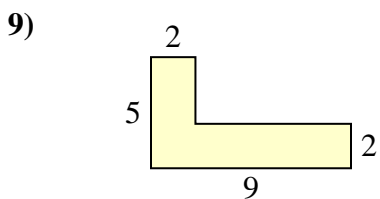
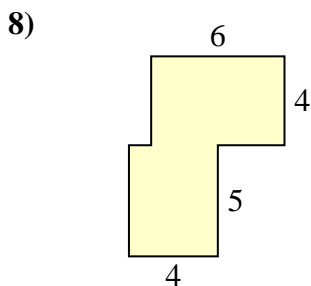
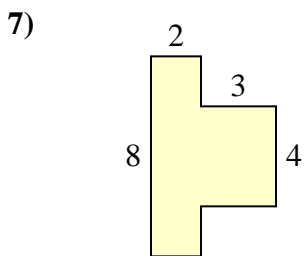
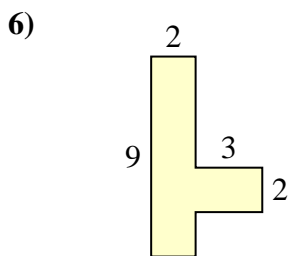
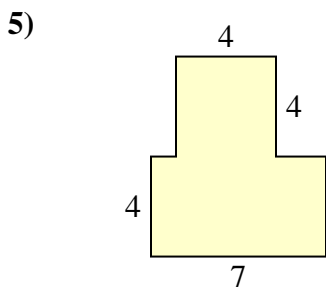
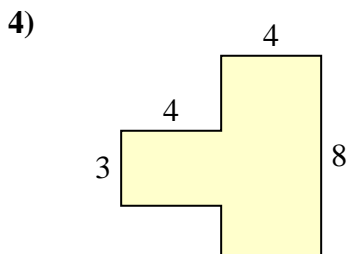
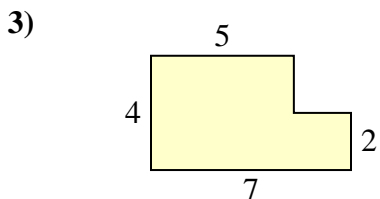
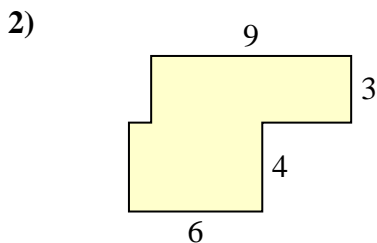
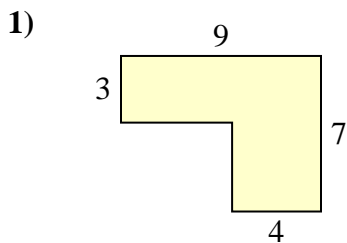




Find the total area of each shape. Measurement is in millimeters (mm). Not to scale.

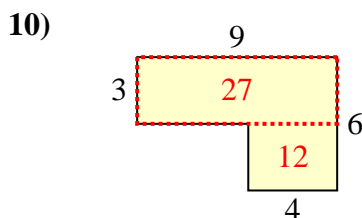
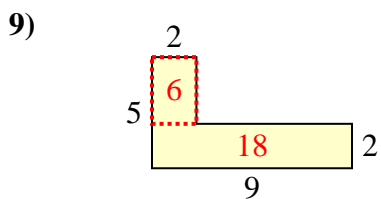
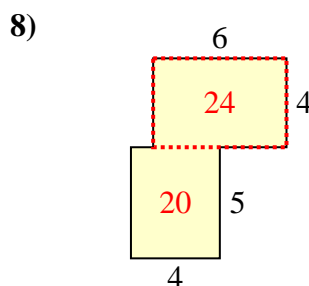
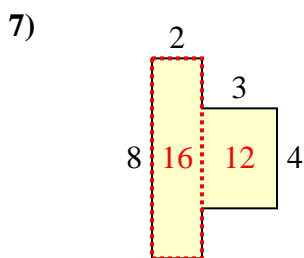
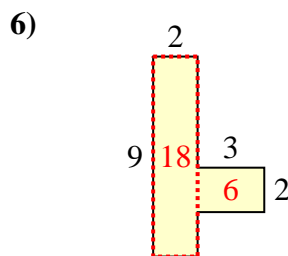
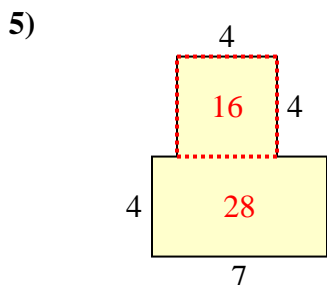
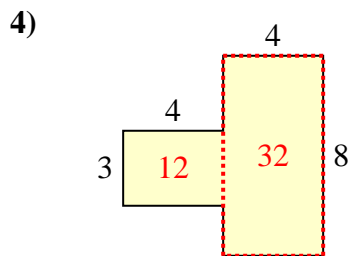
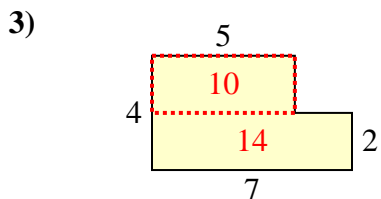
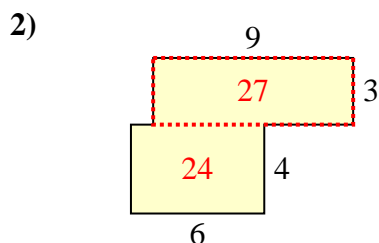
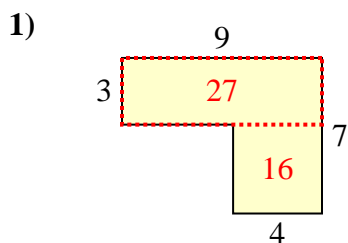
Answers



1. \_\_\_\_\_
2. \_\_\_\_\_
3. \_\_\_\_\_
4. \_\_\_\_\_
5. \_\_\_\_\_
6. \_\_\_\_\_
7. \_\_\_\_\_
8. \_\_\_\_\_
9. \_\_\_\_\_
10. \_\_\_\_\_



Find the total area of each shape. Measurement is in millimeters (mm). Not to scale.



Answers

1. 43 mm<sup>2</sup>
2. 51 mm<sup>2</sup>
3. 24 mm<sup>2</sup>
4. 44 mm<sup>2</sup>
5. 44 mm<sup>2</sup>
6. 24 mm<sup>2</sup>
7. 28 mm<sup>2</sup>
8. 44 mm<sup>2</sup>
9. 24 mm<sup>2</sup>
10. 39 mm<sup>2</sup>