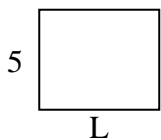


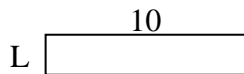


Determine the value of 'L'.

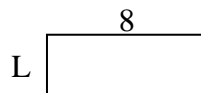
1) Area = $30u^2$



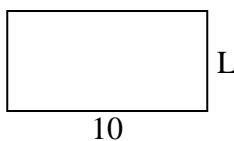
2) Area = $20u^2$



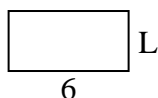
3) Area = $24u^2$



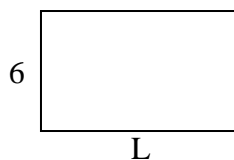
4) Area = $50u^2$



5) Area = $18u^2$



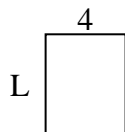
6) Area = $60u^2$



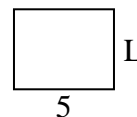
7) Area = $9u^2$



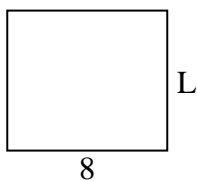
8) Area = $20u^2$



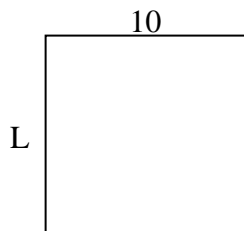
9) Area = $20u^2$



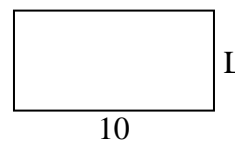
10) Area = $56u^2$



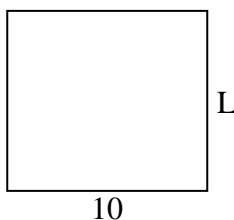
11) Area = $100u^2$




12) Area = $50u^2$




13) Area = $90u^2$



14) Area = $18u^2$



15) Area = $60u^2$



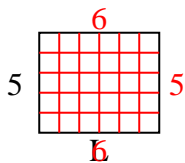
Answers

1. _____
2. _____
3. _____
4. _____
5. _____
6. _____
7. _____
8. _____
9. _____
10. _____
11. _____
12. _____
13. _____
14. _____
15. _____

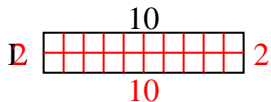


Determine the value of 'L'.

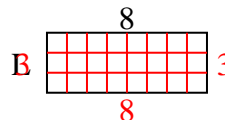
1) Area = $30u^2$



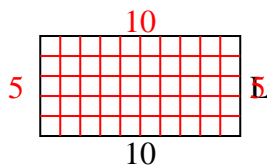
2) Area = $20u^2$



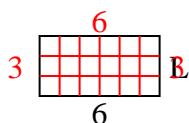
3) Area = $24u^2$



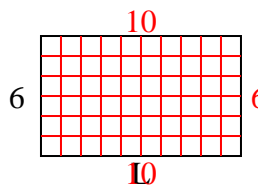
4) Area = $50u^2$



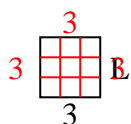
5) Area = $18u^2$



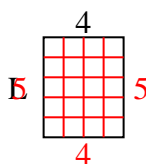
6) Area = $60u^2$



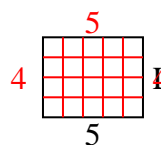
7) Area = $9u^2$



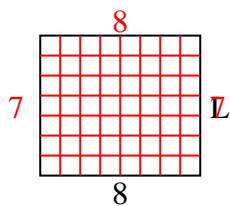
8) Area = $20u^2$



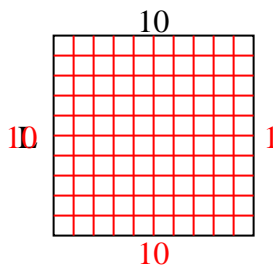
9) Area = $20u^2$



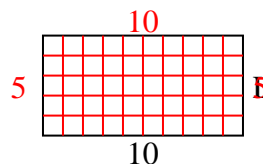
10) Area = $56u^2$



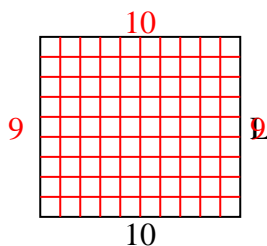
11) Area = $100u^2$



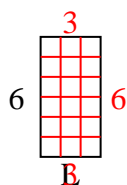
12) Area = $50u^2$



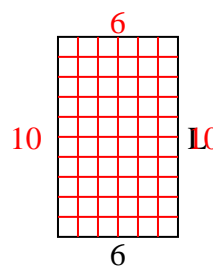
13) Area = $90u^2$



14) Area = $18u^2$



15) Area = $60u^2$



Answers

1. 6

2. 2

3. 3

4. 5

5. 3

6. 10

7. 3

8. 5

9. 4

10. 7

11. 10

12. 5

13. 9

14. 3

15. 10