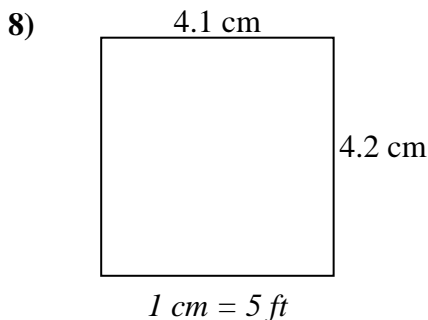
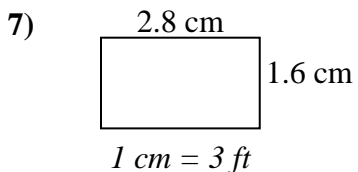
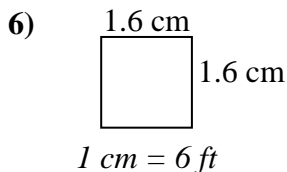
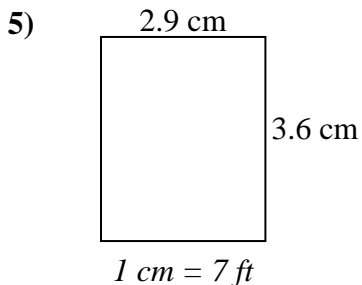
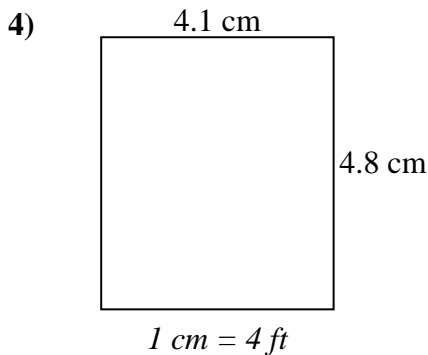
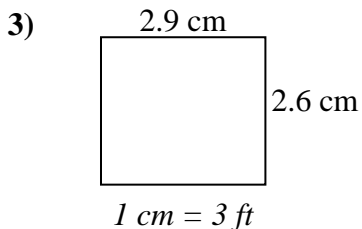
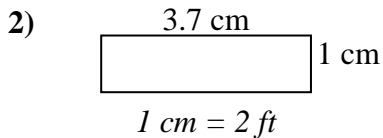
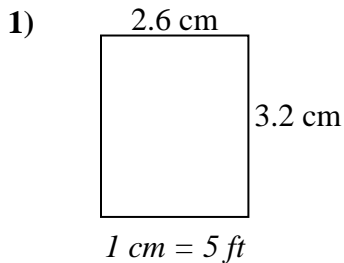




Determine the actual width, height and area of each scale rectangle.

Round the area to the nearest whole number.



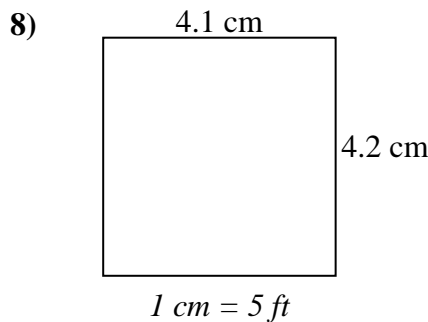
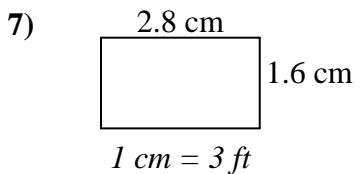
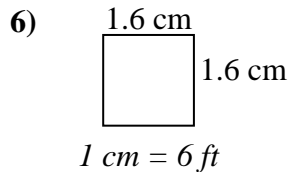
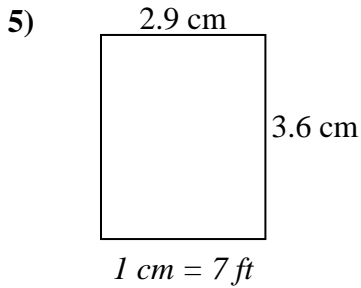
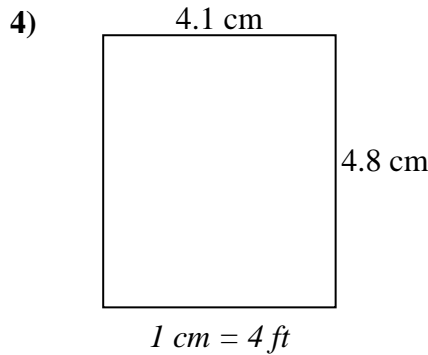
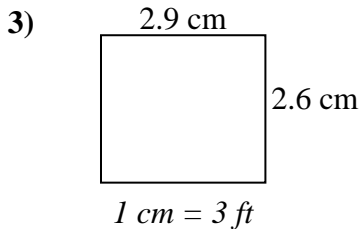
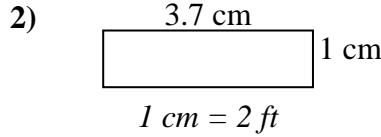
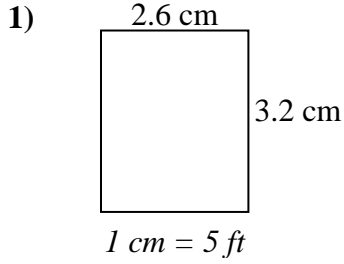
Answers

1. \_\_\_\_\_
2. \_\_\_\_\_
3. \_\_\_\_\_
4. \_\_\_\_\_
5. \_\_\_\_\_
6. \_\_\_\_\_
7. \_\_\_\_\_
8. \_\_\_\_\_



Determine the actual width, height and area of each scale rectangle.

Round the area to the nearest whole number.



Answers

1. 13   16   208
2. 7.4   2   15
3. 8.7   7.8   68
4. 16.4   19.2   315
5. 20.3   25.2   512
6. 9.6   9.6   92
7. 8.4   4.8   40
8. 20.5   21   431