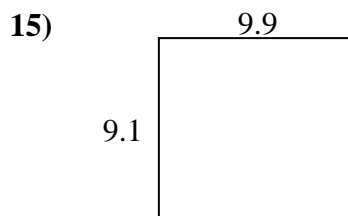
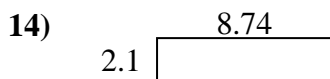
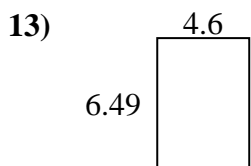
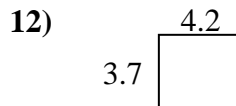
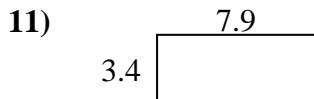
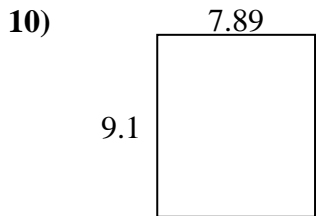
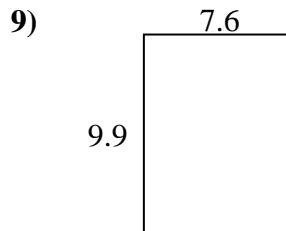
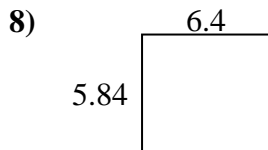
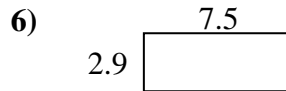
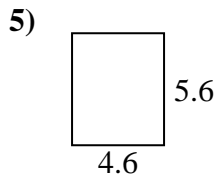
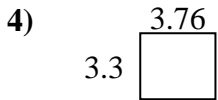
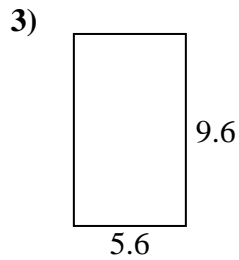
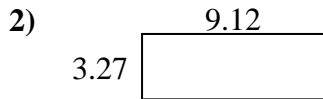
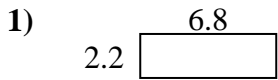




Find the perimeter and area of each figure. Answer to the nearest 10th.

Answers

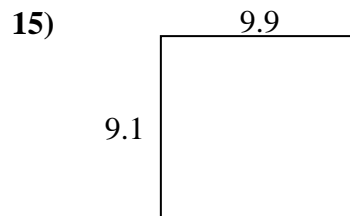
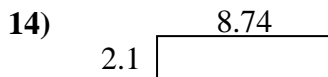
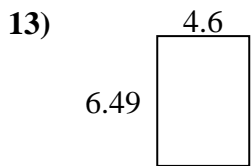
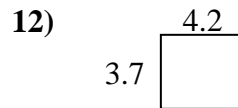
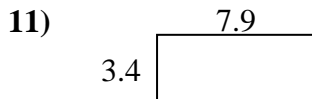
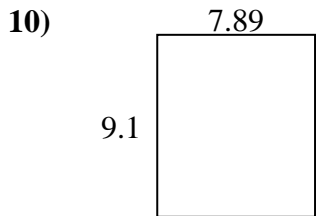
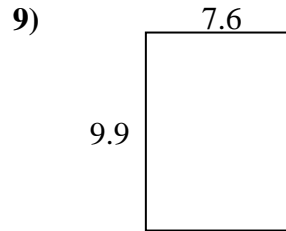
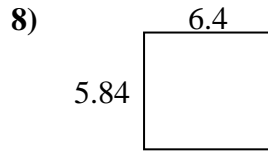
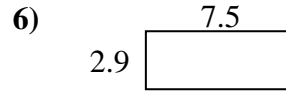
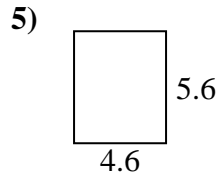
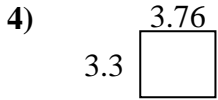
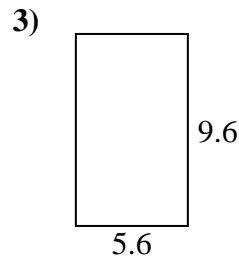
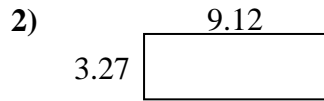
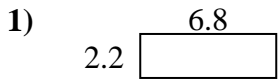


1. _____
2. _____
3. _____
4. _____
5. _____
6. _____
7. _____
8. _____
9. _____
10. _____
11. _____
12. _____
13. _____
14. _____
15. _____



Find the perimeter and area of each figure. Answer to the nearest 10th.

Answers



1. 15.0 18.0

2. 29.8 24.8

3. 53.8 30.4

4. 12.4 14.1

5. 25.8 20.4

6. 21.8 20.8

7. 24.2 24.4

8. 37.4 24.5

9. 75.2 35.0

10. 71.8 34.0

11. 26.9 22.6

12. 15.5 15.8

13. 29.9 22.2

14. 18.4 21.7

15. 90.1 38.0