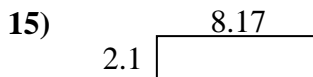

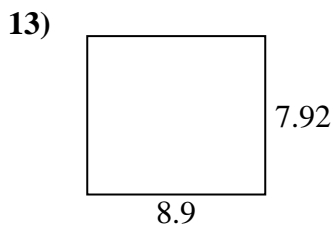
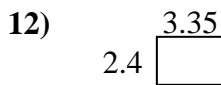
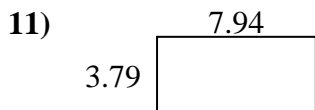
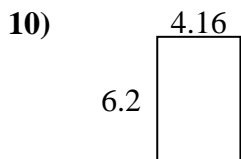
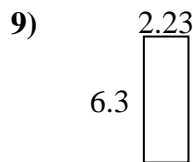
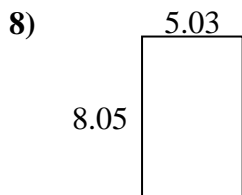
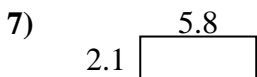
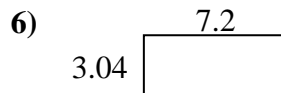
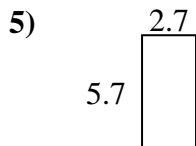
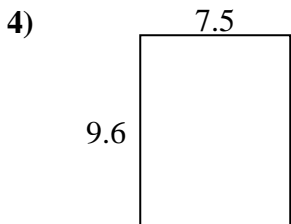
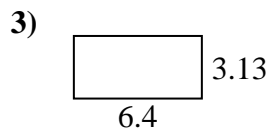






Find the perimeter and area of each figure. Answer to the nearest 10th.

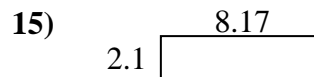
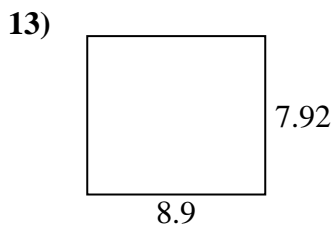
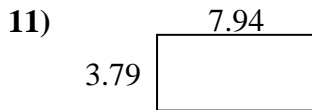
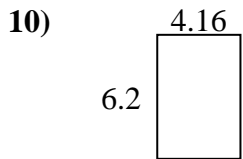
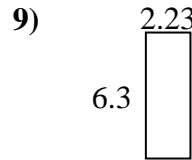
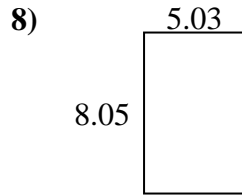
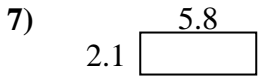
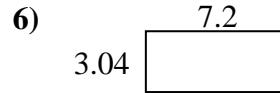
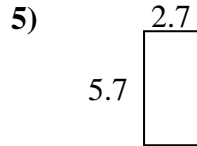
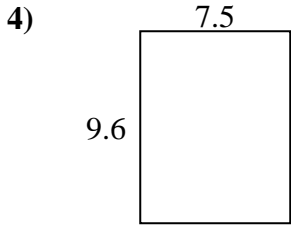
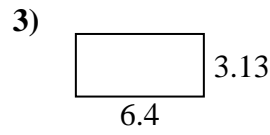
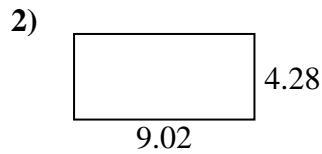


Answers

1. _____
2. _____
3. _____
4. _____
5. _____
6. _____
7. _____
8. _____
9. _____
10. _____
11. _____
12. _____
13. _____
14. _____
15. _____



Find the perimeter and area of each figure. Answer to the nearest 10th.



Answers

1.	<u>30.7</u>	<u>25.2</u>
2.	<u>38.6</u>	<u>26.6</u>
3.	<u>20.0</u>	<u>19.1</u>
4.	<u>72.0</u>	<u>34.2</u>
5.	<u>15.4</u>	<u>16.8</u>
6.	<u>21.9</u>	<u>20.5</u>
7.	<u>12.2</u>	<u>15.8</u>
8.	<u>40.5</u>	<u>26.2</u>
9.	<u>14.0</u>	<u>17.1</u>
10.	<u>25.8</u>	<u>20.7</u>
11.	<u>30.1</u>	<u>23.5</u>
12.	<u>8.0</u>	<u>11.5</u>
13.	<u>70.5</u>	<u>33.6</u>
14.	<u>25.6</u>	<u>22.1</u>
15.	<u>17.2</u>	<u>20.5</u>