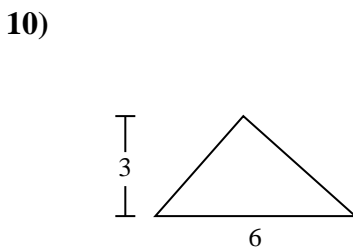
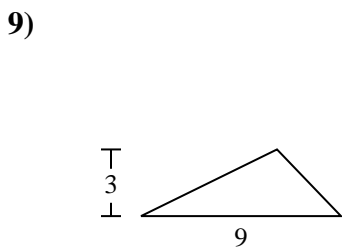
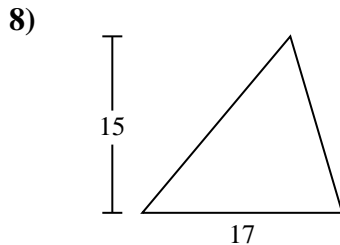
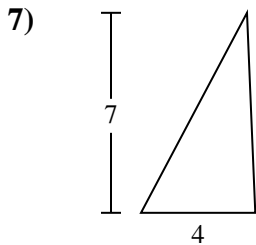
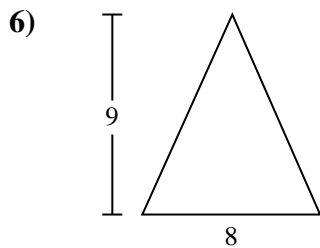
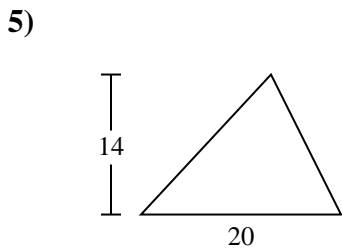
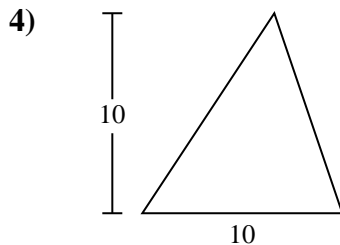
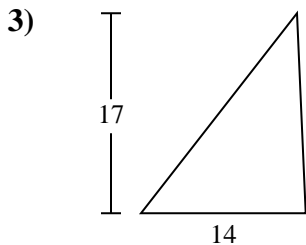
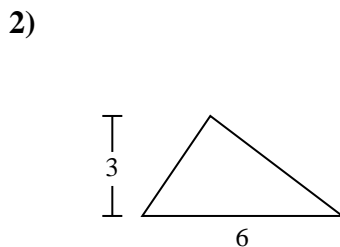
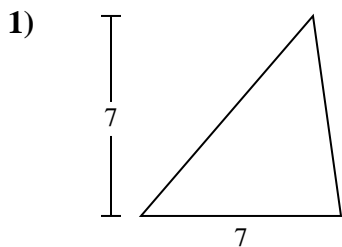




Find the area of the triangle. Round your answer to the nearest 10th.

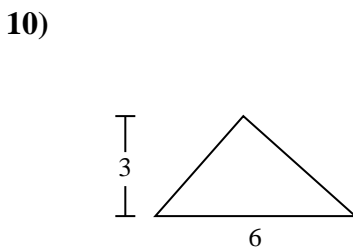
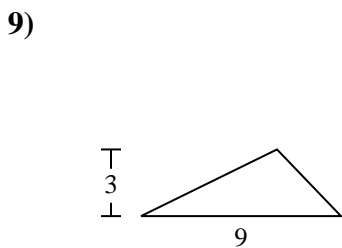
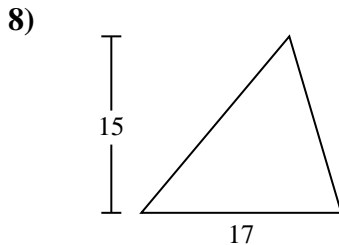
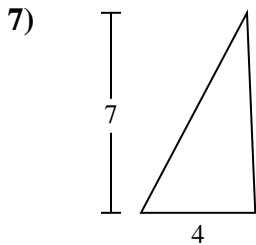
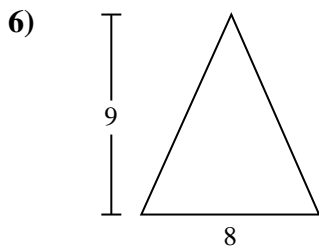
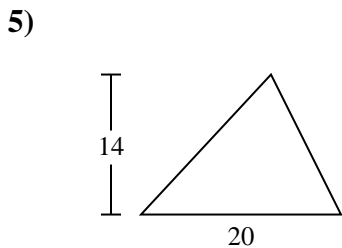
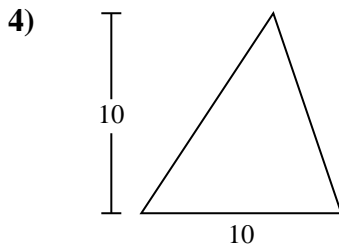
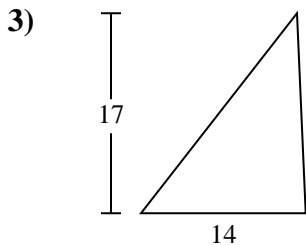
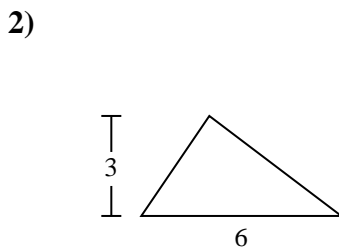
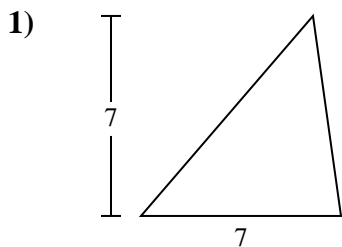


Answers

- 1. _____
- 2. _____
- 3. _____
- 4. _____
- 5. _____
- 6. _____
- 7. _____
- 8. _____
- 9. _____
- 10. _____



Find the area of the triangle. Round your answer to the nearest 10th.



Answers

- 1. 24.5
- 2. 9
- 3. 119
- 4. 50
- 5. 140
- 6. 36
- 7. 14
- 8. 127.5
- 9. 13.5
- 10. 9



Find the area of the triangle. Round your answer to the nearest 10th.

127.5

13.5

119

140

14

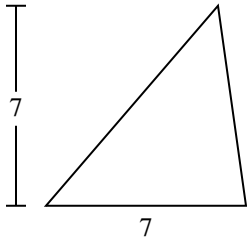
24.5

9

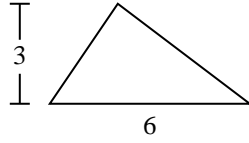
36

50

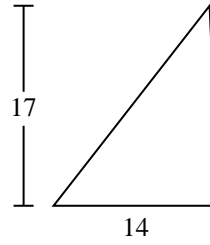
1)



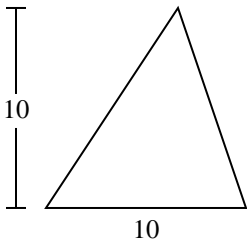
2)



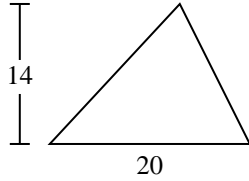
3)



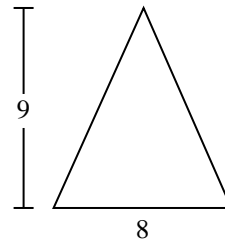
4)



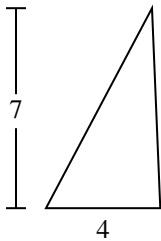
5)



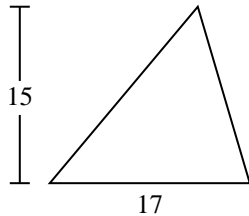
6)



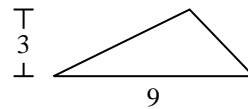
7)



8)



9)



Answers

1. _____
2. _____
3. _____
4. _____
5. _____
6. _____
7. _____
8. _____
9. _____