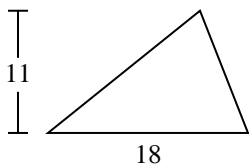




Find the area of the triangle. Round your answer to the nearest 10th.

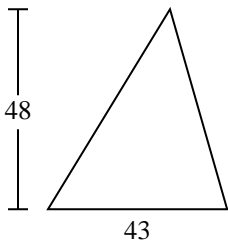
1)



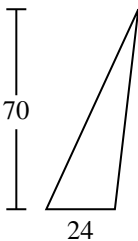
2)



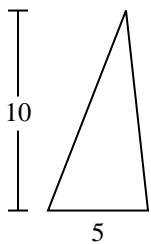
3)



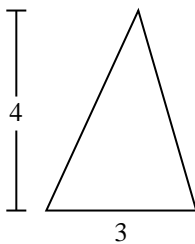
4)



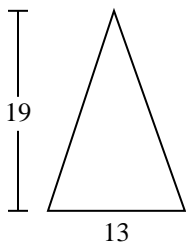
5)



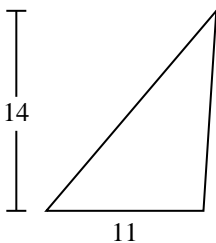
6)



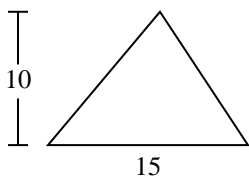
7)



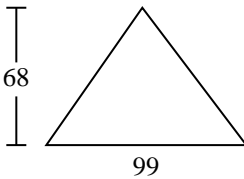
8)



9)



10)



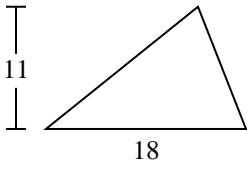
Answers

- 1. _____
- 2. _____
- 3. _____
- 4. _____
- 5. _____
- 6. _____
- 7. _____
- 8. _____
- 9. _____
- 10. _____



Find the area of the triangle. Round your answer to the nearest 10th.

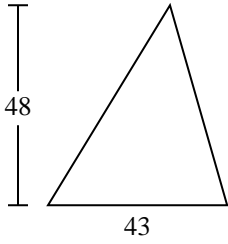
1)



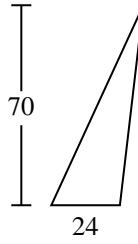
2)



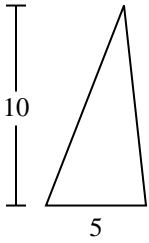
3)



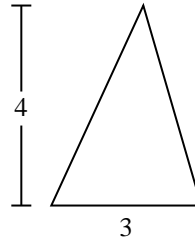
4)



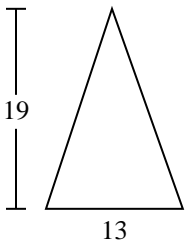
5)



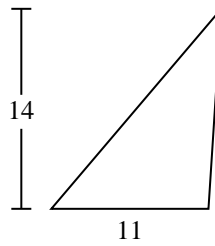
6)



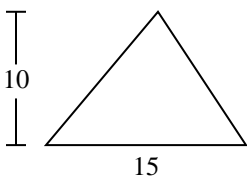
7)



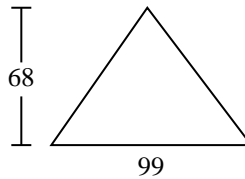
8)



9)



10)



Answers

1. 99

2. 7

3. 1,032

4. 840

5. 25

6. 6

7. 123.5

8. 77

9. 75

10. 3,366

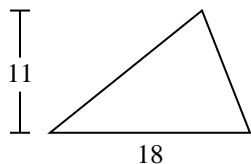


Find the area of the triangle. Round your answer to the nearest 10th.

77	6	99	1,032	25
840	75	123.5	7	

Answers

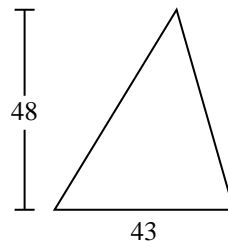
1)



2)



3)



1. _____

2. _____

3. _____

4. _____

5. _____

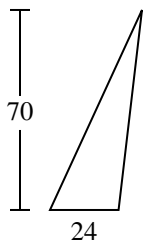
6. _____

7. _____

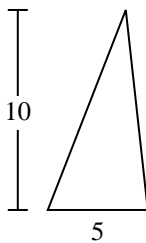
8. _____

9. _____

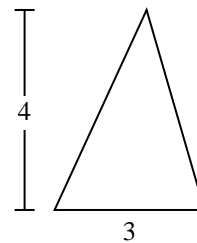
4)



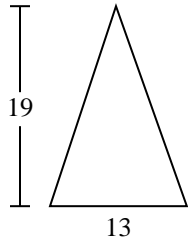
5)



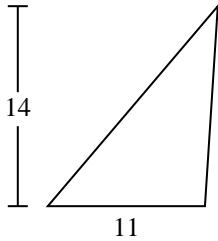
6)



7)



8)



9)

