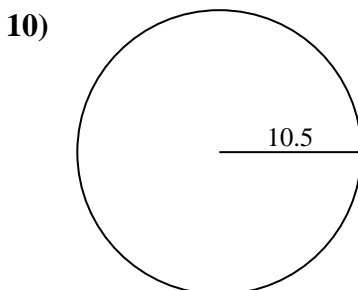
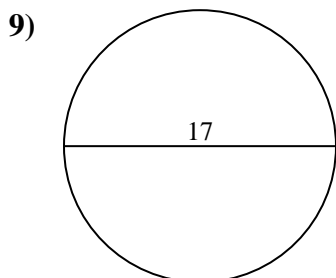
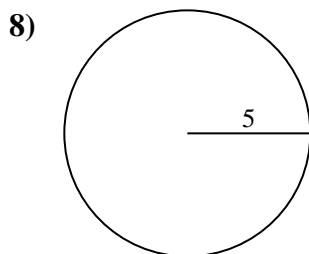
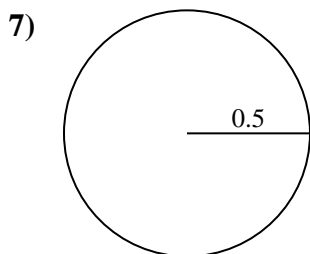
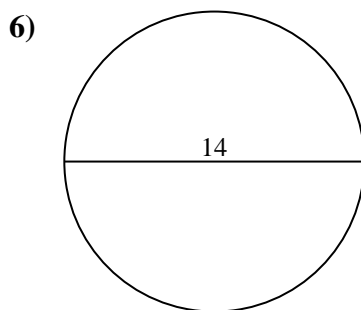
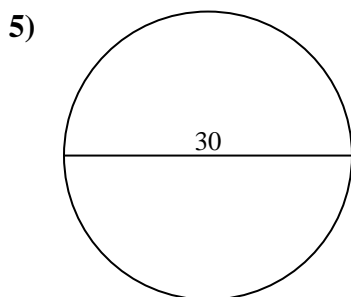
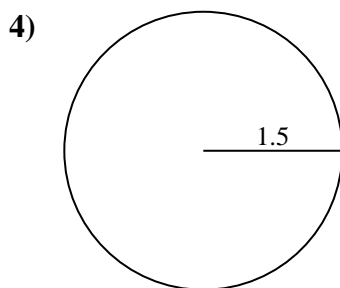
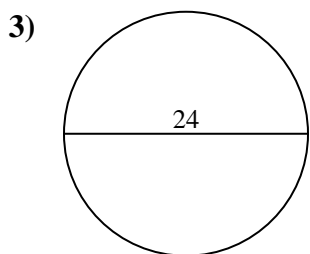
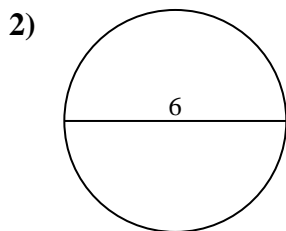
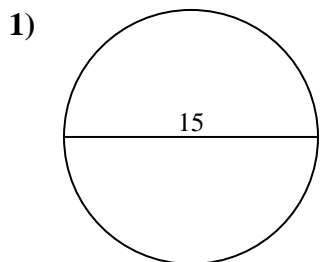




Find the area of the circle. Round to the nearest 10th.

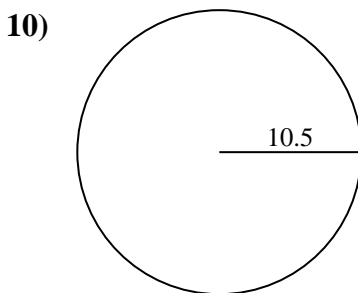
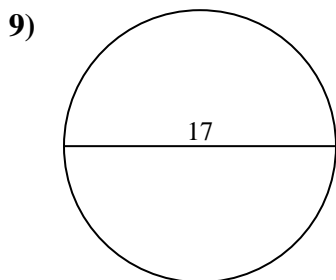
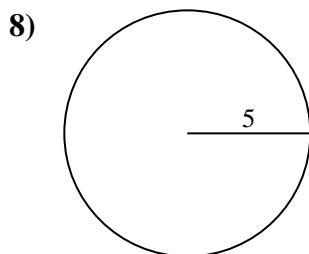
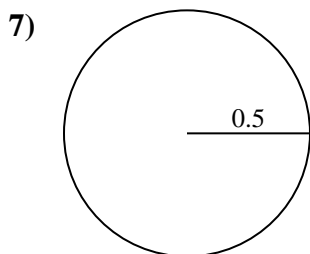
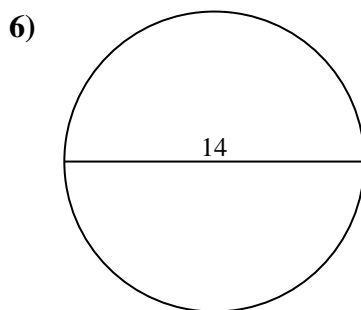
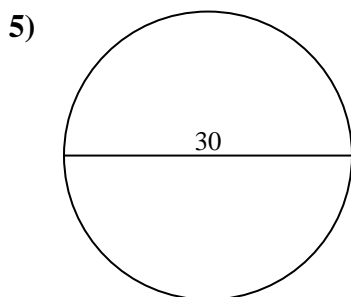
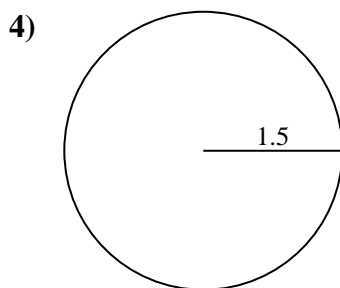
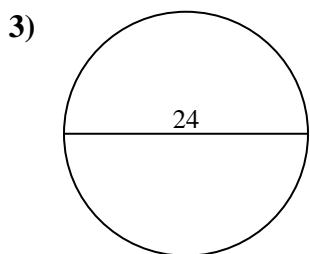
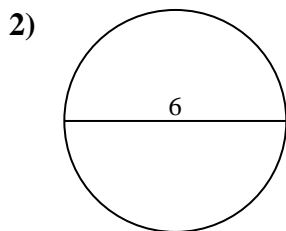
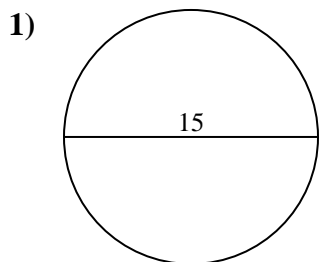
Answers



- 1. _____
- 2. _____
- 3. _____
- 4. _____
- 5. _____
- 6. _____
- 7. _____
- 8. _____
- 9. _____
- 10. _____



Find the area of the circle. Round to the nearest 10th.



Answers

- 1. 176.7
- 2. 28.3
- 3. 452.4
- 4. 7.1
- 5. 706.9
- 6. 153.9
- 7. 0.8
- 8. 78.5
- 9. 227
- 10. 346.4



Find the area of the circle. Round to the nearest 10th.

452.4	0.8	153.9	7.1	227
28.3	78.5	706.9	176.7	

Answers

- 1. _____
- 2. _____
- 3. _____
- 4. _____
- 5. _____
- 6. _____
- 7. _____
- 8. _____
- 9. _____

