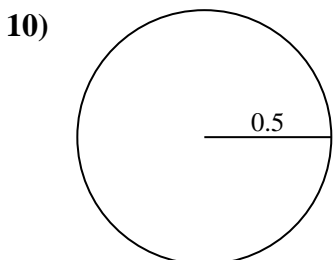
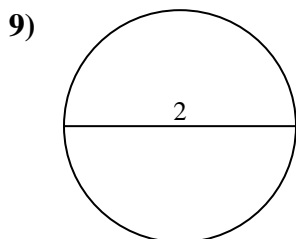
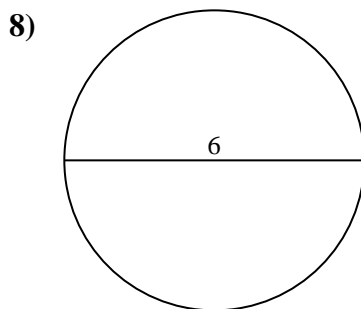
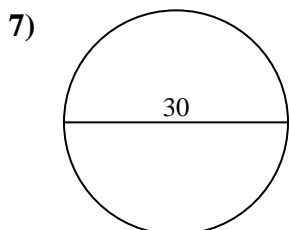
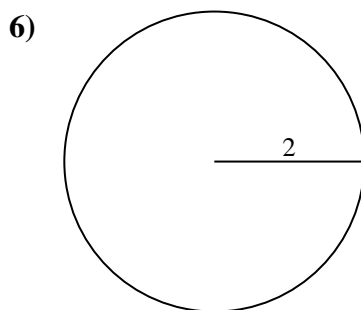
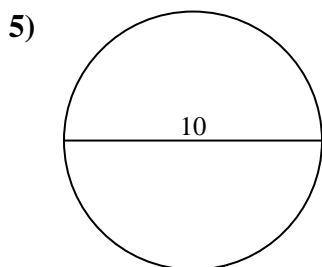
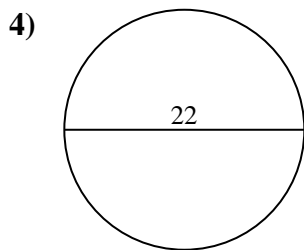
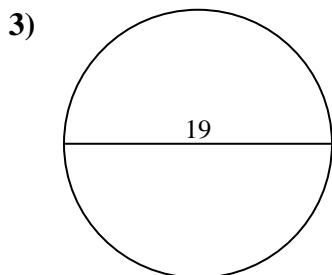
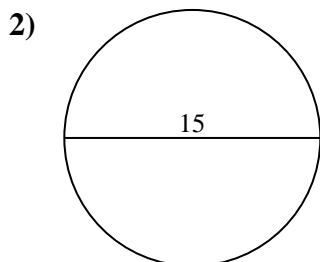
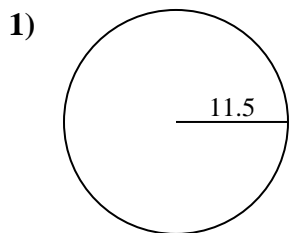




Find the area of the circle. Round to the nearest 10th.

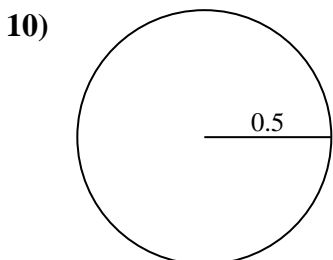
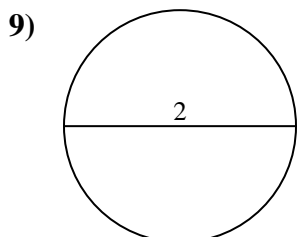
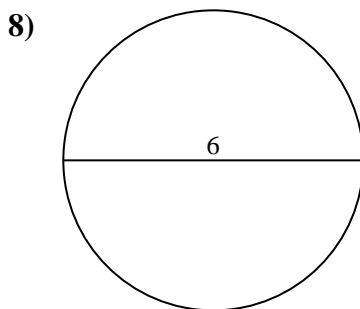
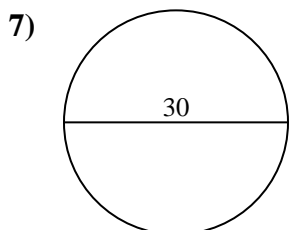
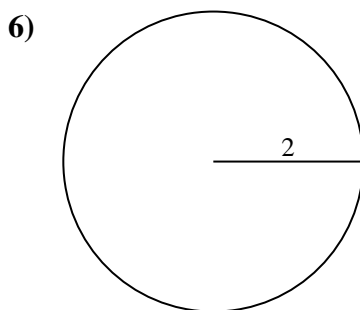
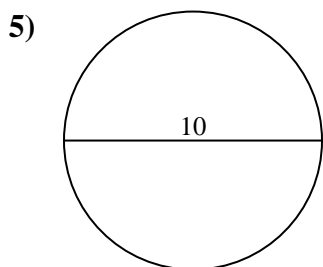
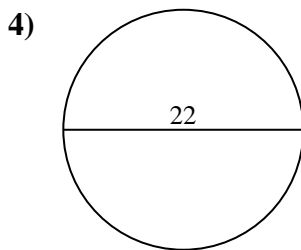
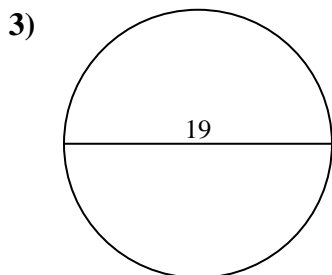
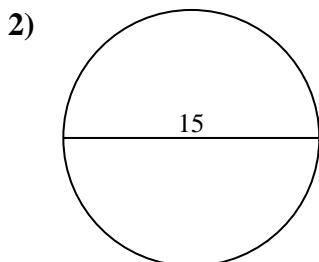
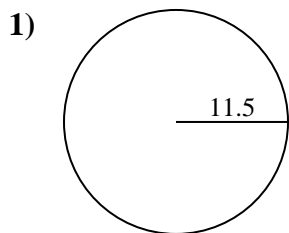
Answers



- 1. _____
- 2. _____
- 3. _____
- 4. _____
- 5. _____
- 6. _____
- 7. _____
- 8. _____
- 9. _____
- 10. _____



Find the area of the circle. Round to the nearest 10th.



Answers

- 1. 415.5
- 2. 176.7
- 3. 283.5
- 4. 380.1
- 5. 78.5
- 6. 12.6
- 7. 706.9
- 8. 28.3
- 9. 3.1
- 10. 0.8



Find the area of the circle. Round to the nearest 10th.

283.5	176.7	415.5	3.1	78.5
380.1	706.9	28.3	12.6	

Answers

1. _____
2. _____
3. _____
4. _____
5. _____
6. _____
7. _____
8. _____
9. _____

