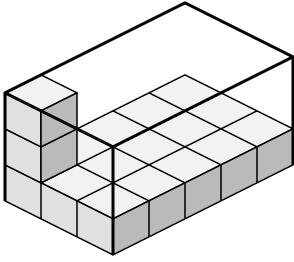


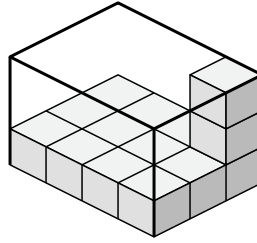


Determine the volume of each box. Each block is 1 cubic unit ( $u^3$ ).

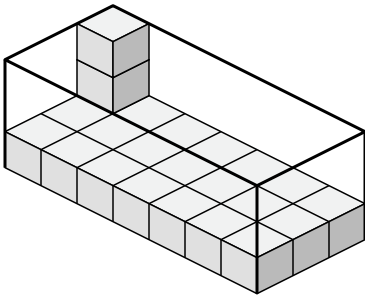
1)



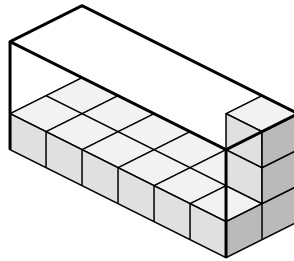
2)



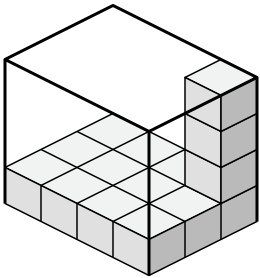
3)



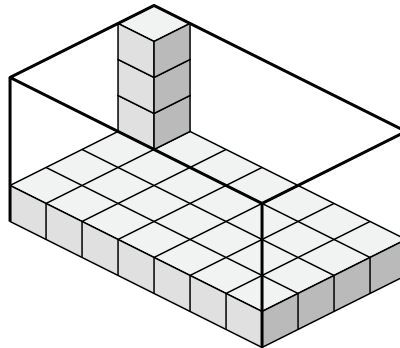
4)



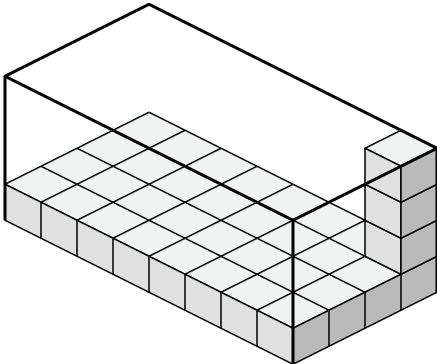
5)



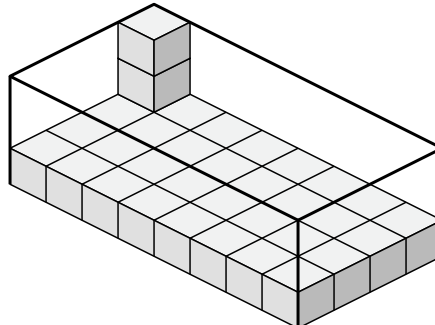
6)



7)



8)



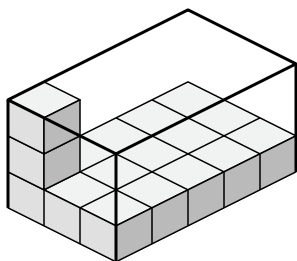
Answers

- 1. \_\_\_\_\_
- 2. \_\_\_\_\_
- 3. \_\_\_\_\_
- 4. \_\_\_\_\_
- 5. \_\_\_\_\_
- 6. \_\_\_\_\_
- 7. \_\_\_\_\_
- 8. \_\_\_\_\_

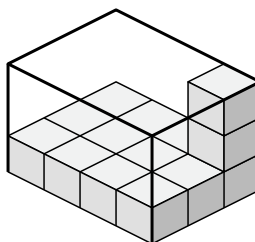


Determine the volume of each box. Each block is 1 cubic unit ( $u^3$ ).

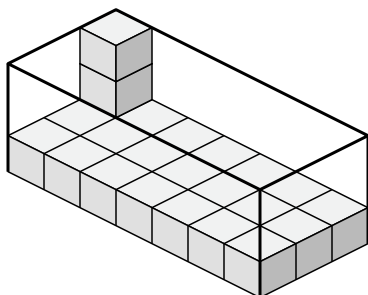
1)



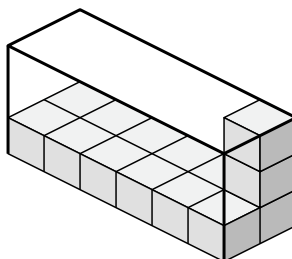
2)



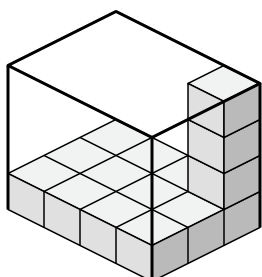
3)



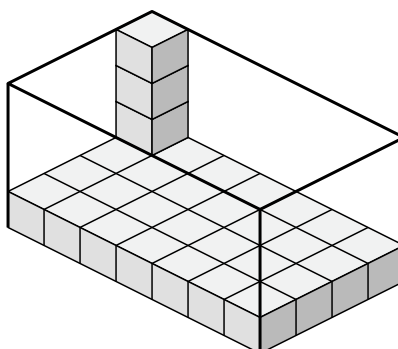
4)



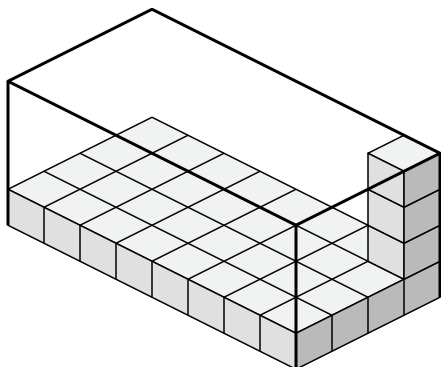
5)



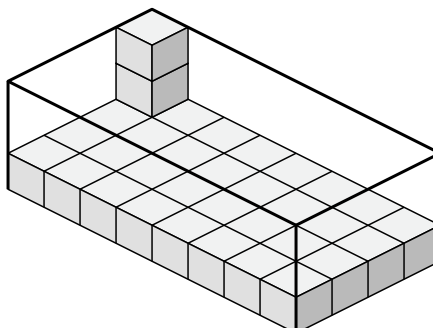
6)



7)



8)



Answers

1. 45  $u^3$

2. 36  $u^3$

3. 63  $u^3$

4. 36  $u^3$

5. 48  $u^3$

6. 112  $u^3$

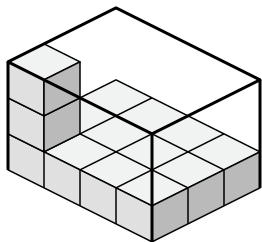
7. 128  $u^3$

8. 96  $u^3$

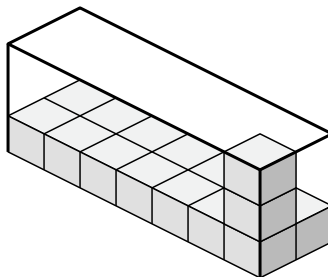


Determine the volume of each box. Each block is 1 cubic unit ( $u^3$ ).

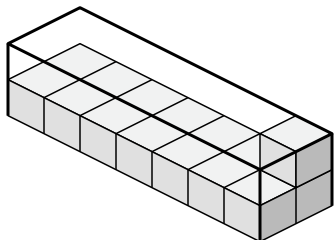
1)



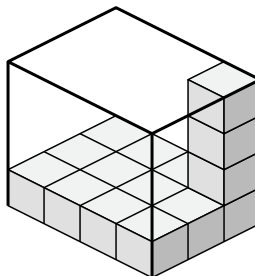
2)



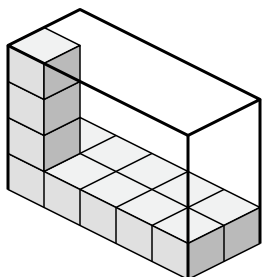
3)



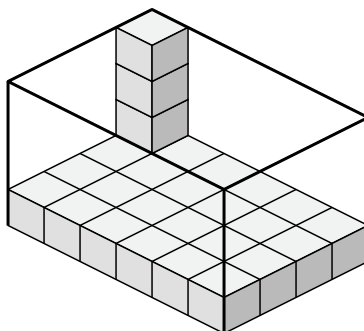
4)



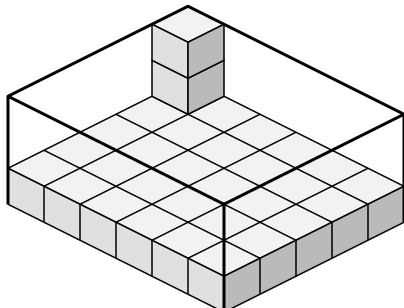
5)



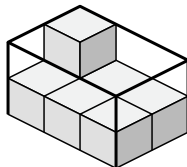
6)



7)



8)



Answers

1. \_\_\_\_\_

2. \_\_\_\_\_

3. \_\_\_\_\_

4. \_\_\_\_\_

5. \_\_\_\_\_

6. \_\_\_\_\_

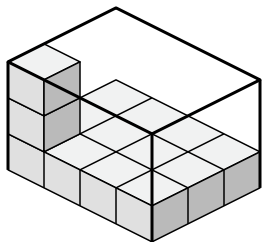
7. \_\_\_\_\_

8. \_\_\_\_\_

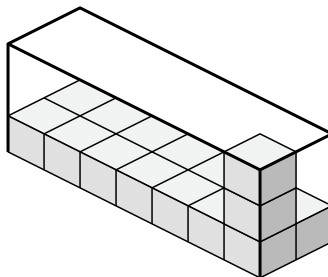


Determine the volume of each box. Each block is 1 cubic unit ( $u^3$ ).

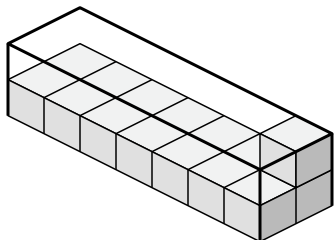
1)



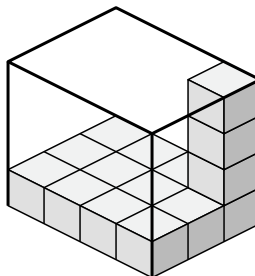
2)



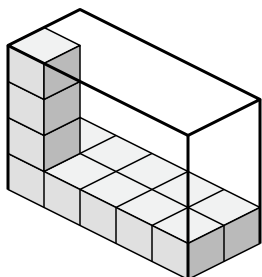
3)



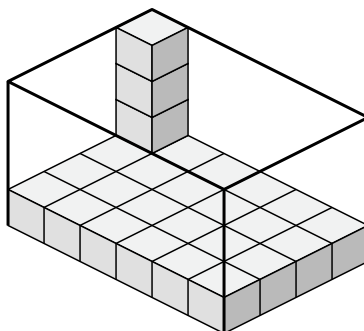
4)



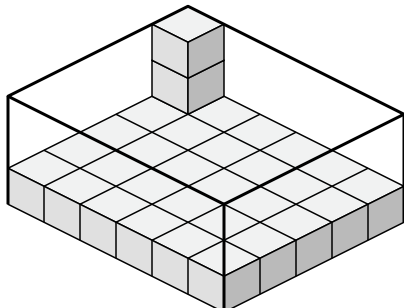
5)



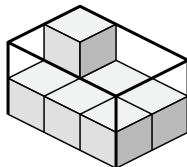
6)



7)



8)



Answers

1. 36  $u^3$

2. 42  $u^3$

3. 28  $u^3$

4. 48  $u^3$

5. 40  $u^3$

6. 96  $u^3$

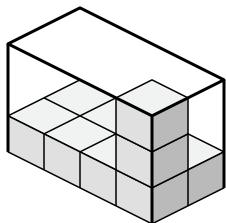
7. 90  $u^3$

8. 12  $u^3$

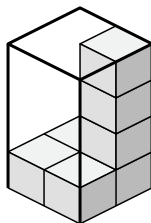


Determine the volume of each box. Each block is 1 cubic unit ( $u^3$ ).

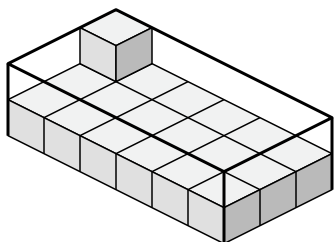
1)



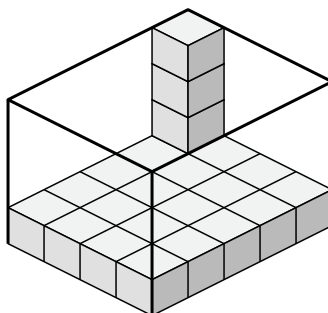
2)



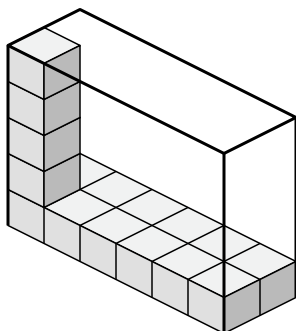
3)



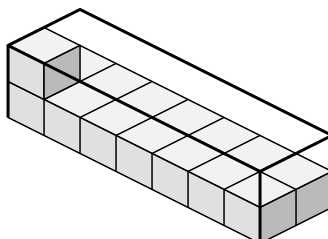
4)



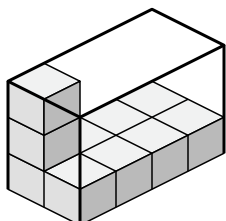
5)



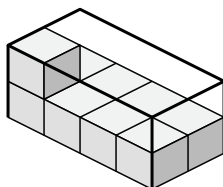
6)



7)



8)



Answers

1. \_\_\_\_\_

2. \_\_\_\_\_

3. \_\_\_\_\_

4. \_\_\_\_\_

5. \_\_\_\_\_

6. \_\_\_\_\_

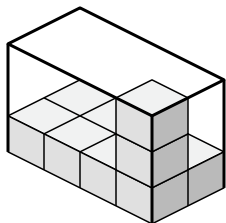
7. \_\_\_\_\_

8. \_\_\_\_\_

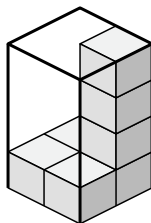


Determine the volume of each box. Each block is 1 cubic unit ( $u^3$ ).

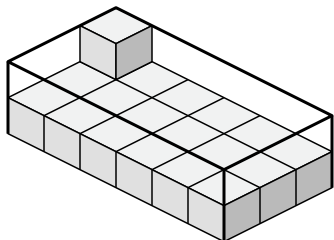
1)



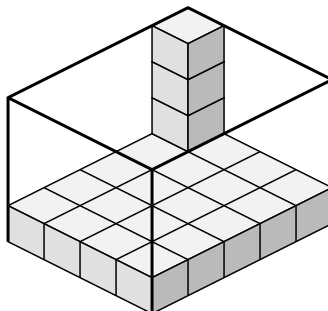
2)



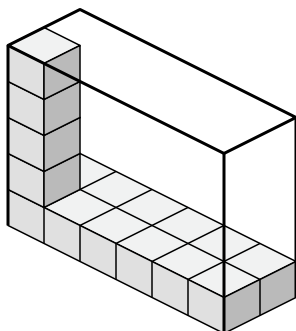
3)



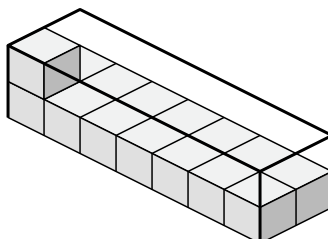
4)



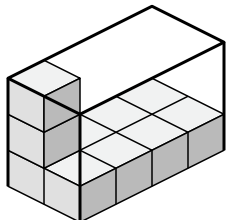
5)



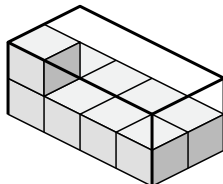
6)



7)



8)



Answers

1. 24  $u^3$

2. 16  $u^3$

3. 36  $u^3$

4. 80  $u^3$

5. 60  $u^3$

6. 28  $u^3$

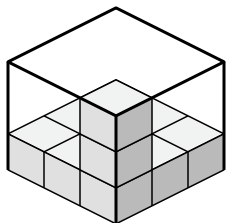
7. 24  $u^3$

8. 16  $u^3$

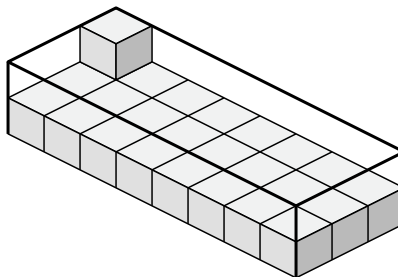


Determine the volume of each box. Each block is 1 cubic unit ( $u^3$ ).

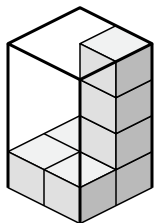
1)



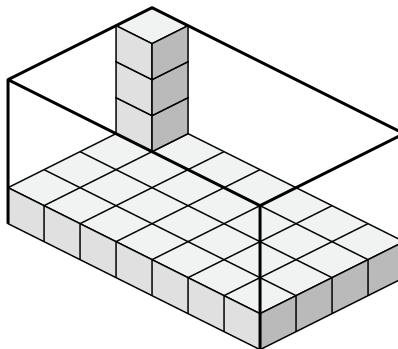
2)



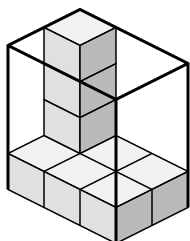
3)



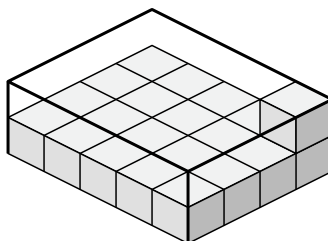
4)



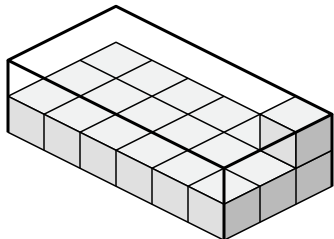
5)



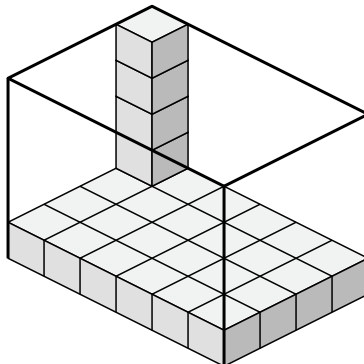
6)



7)



8)



Answers

1. \_\_\_\_\_

2. \_\_\_\_\_

3. \_\_\_\_\_

4. \_\_\_\_\_

5. \_\_\_\_\_

6. \_\_\_\_\_

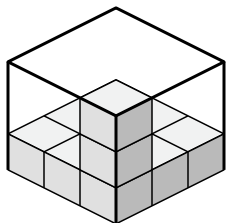
7. \_\_\_\_\_

8. \_\_\_\_\_

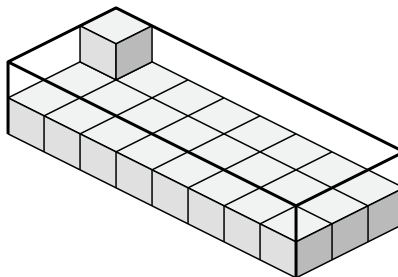


Determine the volume of each box. Each block is 1 cubic unit ( $u^3$ ).

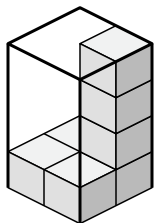
1)



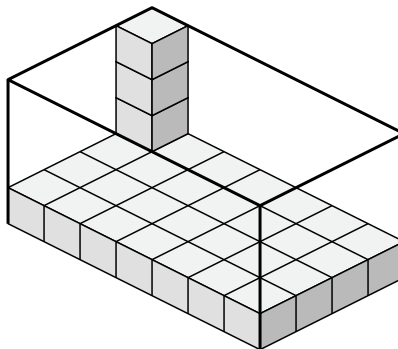
2)



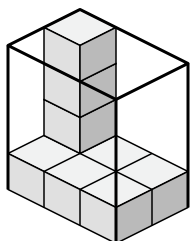
3)



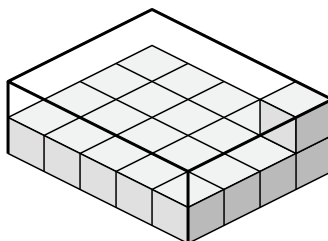
4)



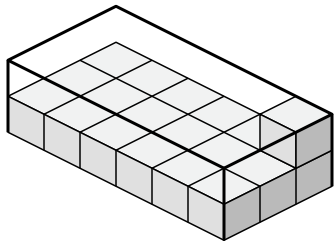
5)



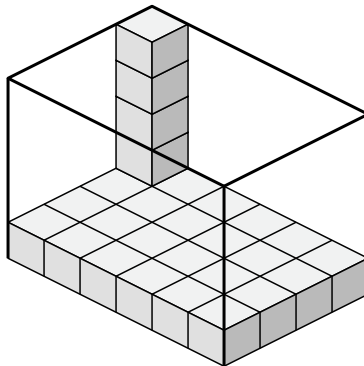
6)



7)



8)



Answers

1. 27  $u^3$

2. 48  $u^3$

3. 16  $u^3$

4. 112  $u^3$

5. 24  $u^3$

6. 40  $u^3$

7. 36  $u^3$

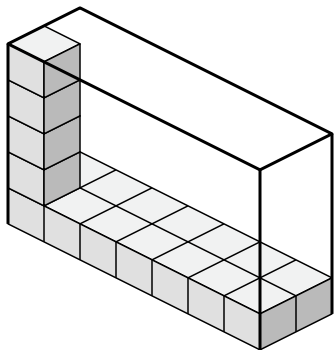
8. 120  $u^3$



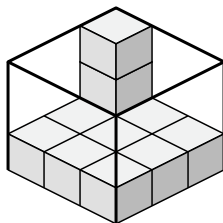


Determine the volume of each box. Each block is 1 cubic unit ( $u^3$ ).

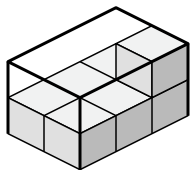
1)



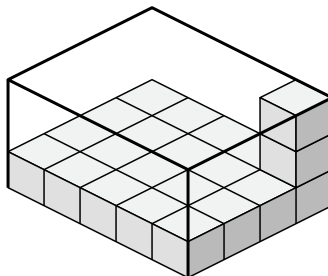
2)



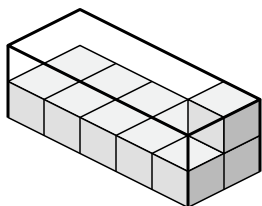
3)



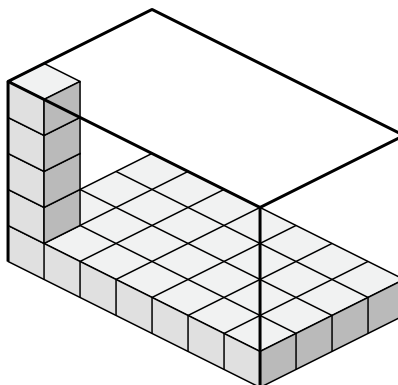
4)



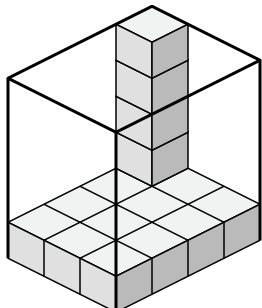
5)



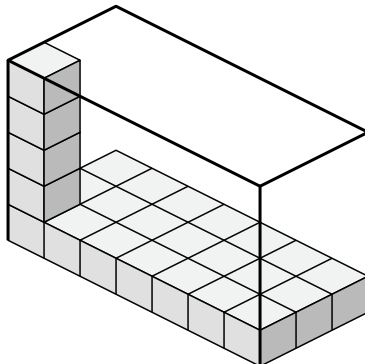
6)



7)



8)



Answers

1. \_\_\_\_\_

2. \_\_\_\_\_

3. \_\_\_\_\_

4. \_\_\_\_\_

5. \_\_\_\_\_

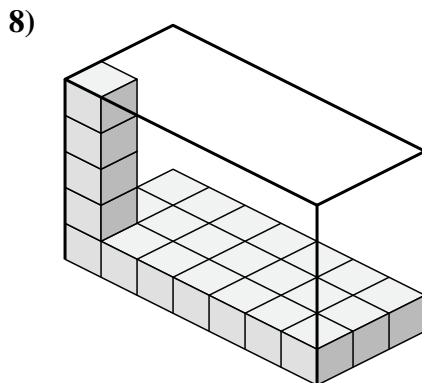
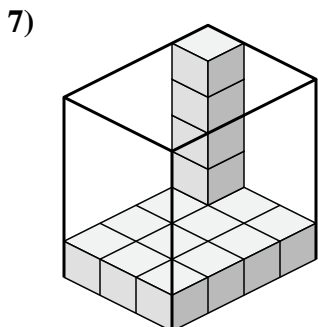
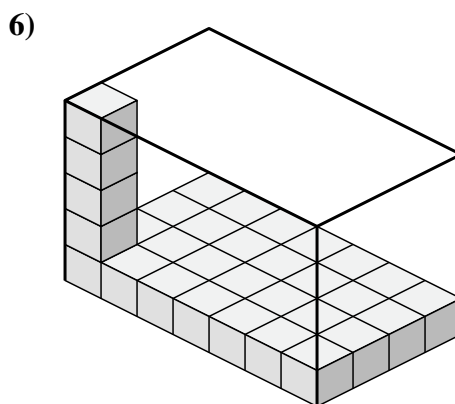
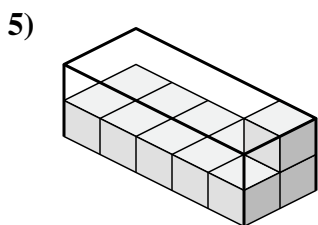
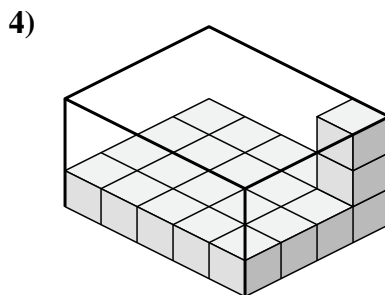
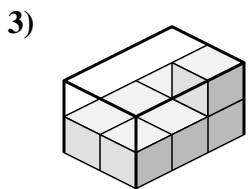
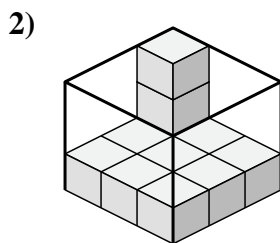
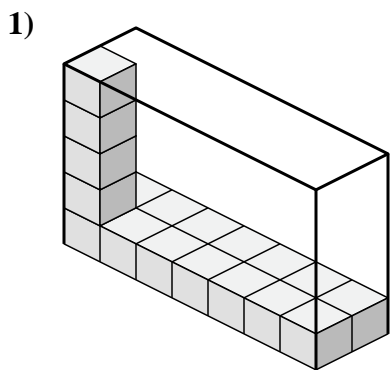
6. \_\_\_\_\_

7. \_\_\_\_\_

8. \_\_\_\_\_



Determine the volume of each box. Each block is 1 cubic unit ( $u^3$ ).



Answers

1. 70  $u^3$

2. 27  $u^3$

3. 12  $u^3$

4. 60  $u^3$

5. 20  $u^3$

6. 140  $u^3$

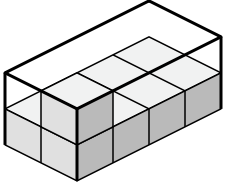
7. 60  $u^3$

8. 105  $u^3$

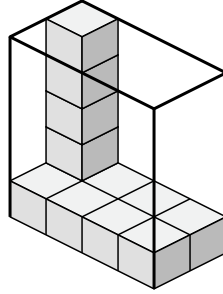


Determine the volume of each box. Each block is 1 cubic unit ( $u^3$ ).

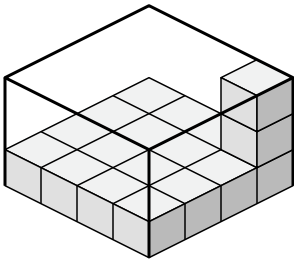
1)



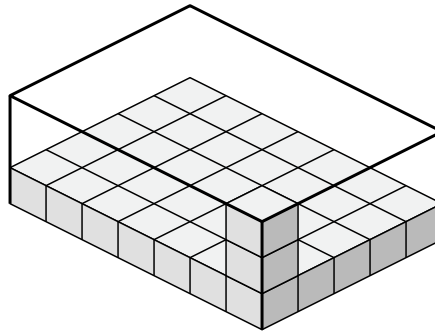
2)



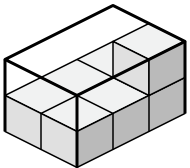
3)



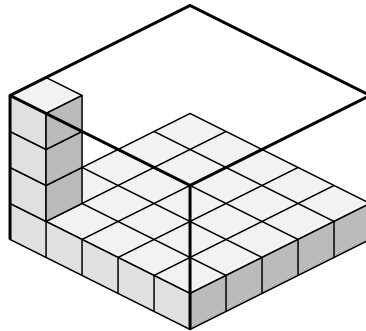
4)



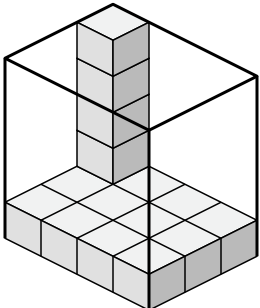
5)



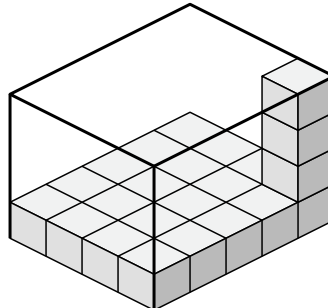
6)



7)



8)



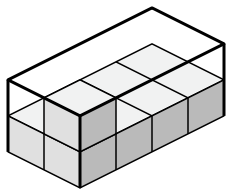
Answers

- 1. \_\_\_\_\_
- 2. \_\_\_\_\_
- 3. \_\_\_\_\_
- 4. \_\_\_\_\_
- 5. \_\_\_\_\_
- 6. \_\_\_\_\_
- 7. \_\_\_\_\_
- 8. \_\_\_\_\_

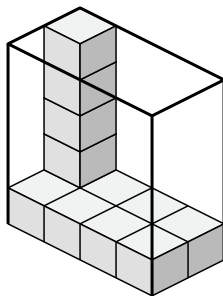


Determine the volume of each box. Each block is 1 cubic unit ( $u^3$ ).

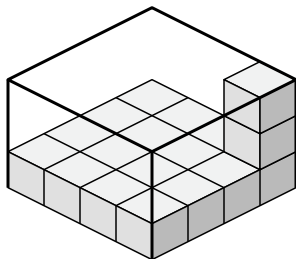
1)



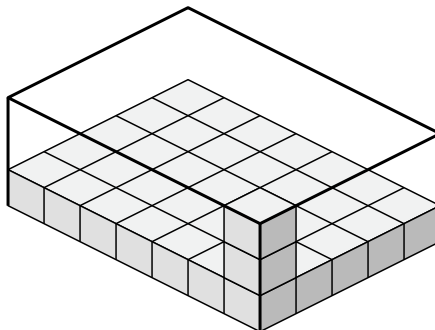
2)



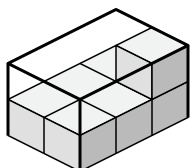
3)



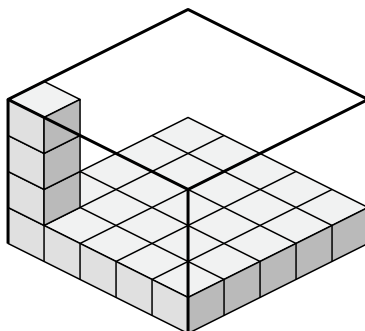
4)



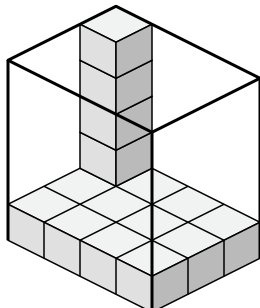
5)



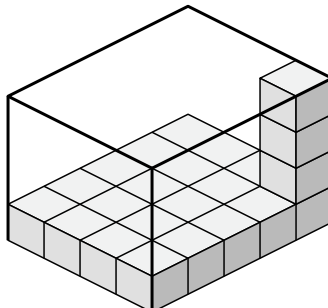
6)



7)



8)



Answers

1. 16  $u^3$

2. 40  $u^3$

3. 48  $u^3$

4. 105  $u^3$

5. 12  $u^3$

6. 100  $u^3$

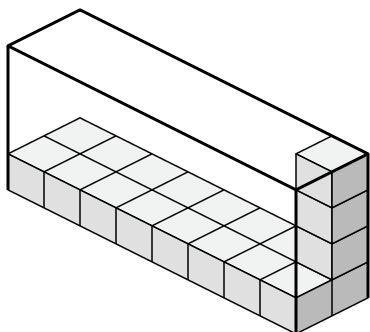
7. 60  $u^3$

8. 80  $u^3$

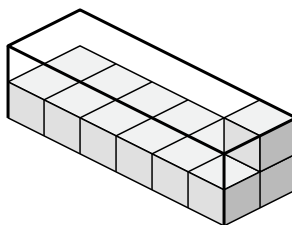


Determine the volume of each box. Each block is 1 cubic unit ( $u^3$ ).

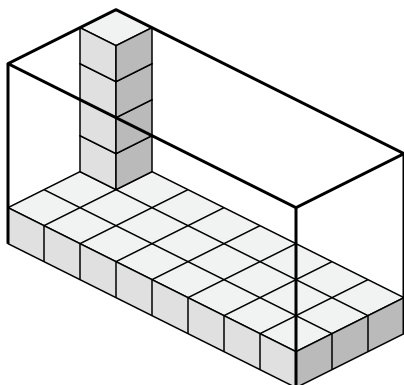
1)



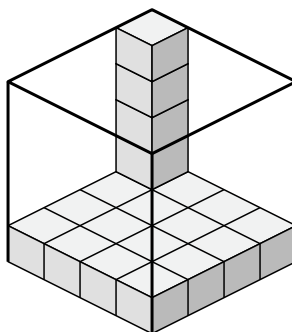
2)



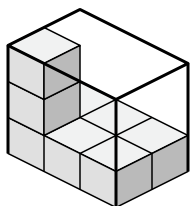
3)



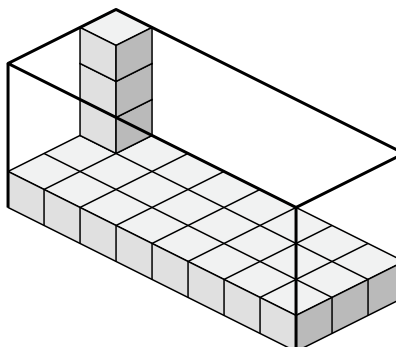
4)



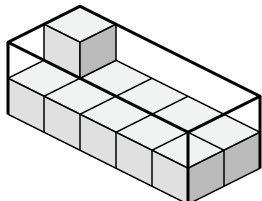
5)



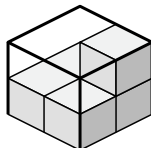
6)



7)



8)



Answers

1. \_\_\_\_\_

2. \_\_\_\_\_

3. \_\_\_\_\_

4. \_\_\_\_\_

5. \_\_\_\_\_

6. \_\_\_\_\_

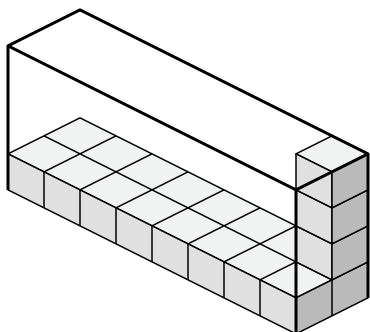
7. \_\_\_\_\_

8. \_\_\_\_\_

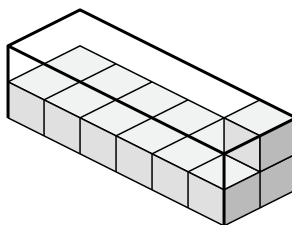


Determine the volume of each box. Each block is 1 cubic unit ( $u^3$ ).

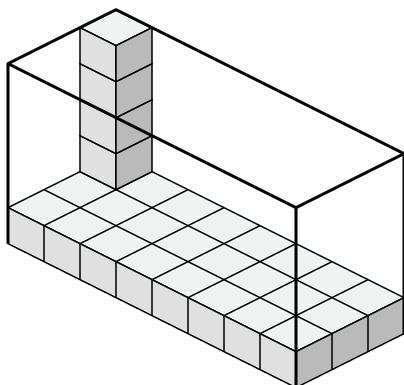
1)



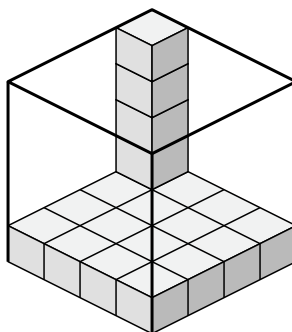
2)



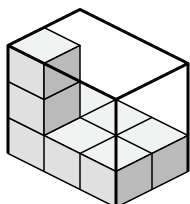
3)



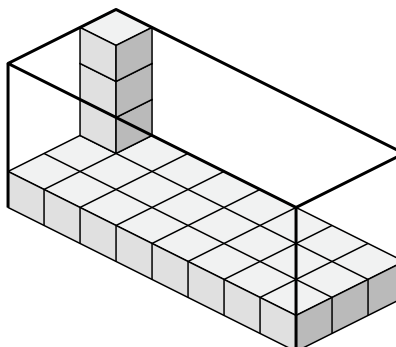
4)



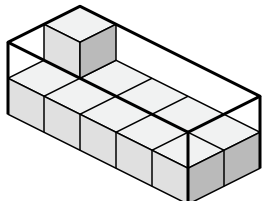
5)



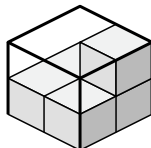
6)



7)



8)



Answers

1. 64  $u^3$

2. 24  $u^3$

3. 120  $u^3$

4. 80  $u^3$

5. 18  $u^3$

6. 96  $u^3$

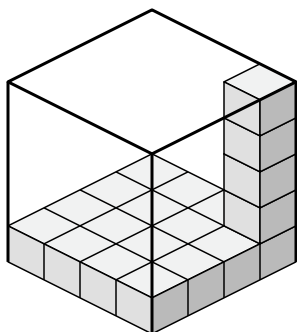
7. 20  $u^3$

8. 8  $u^3$

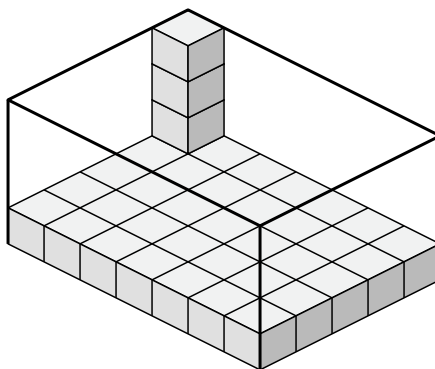


Determine the volume of each box. Each block is 1 cubic unit ( $u^3$ ).

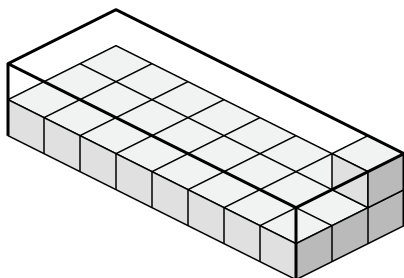
1)



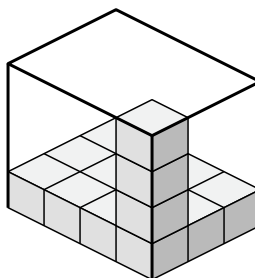
2)



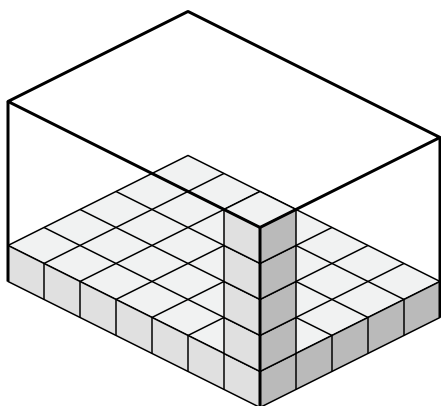
3)



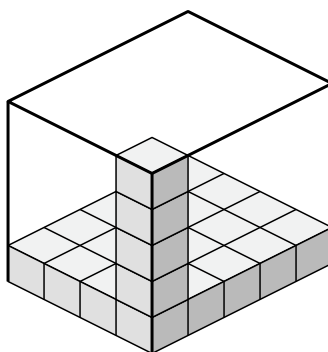
4)



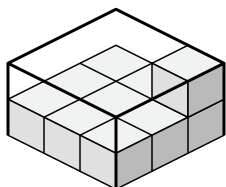
5)



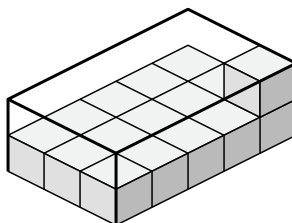
6)



7)



8)



Answers

1. \_\_\_\_\_

2. \_\_\_\_\_

3. \_\_\_\_\_

4. \_\_\_\_\_

5. \_\_\_\_\_

6. \_\_\_\_\_

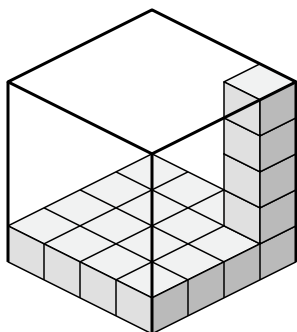
7. \_\_\_\_\_

8. \_\_\_\_\_

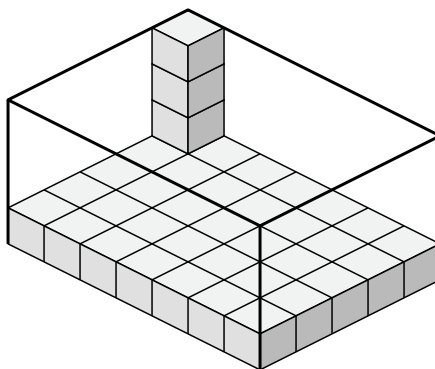


Determine the volume of each box. Each block is 1 cubic unit ( $u^3$ ).

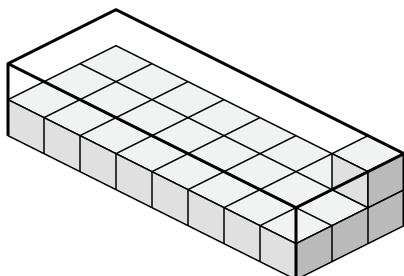
1)



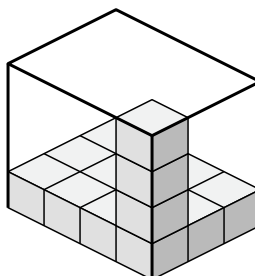
2)



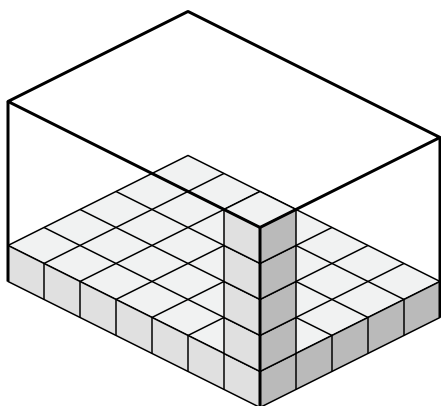
3)



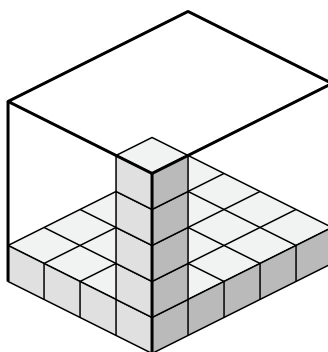
4)



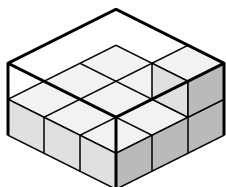
5)



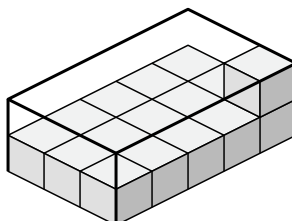
6)



7)



8)



Answers

1. 80  $u^3$

2. 140  $u^3$

3. 48  $u^3$

4. 48  $u^3$

5. 175  $u^3$

6. 100  $u^3$

7. 18  $u^3$

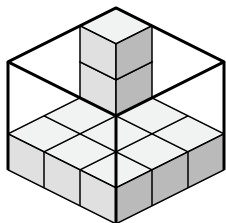
8. 30  $u^3$



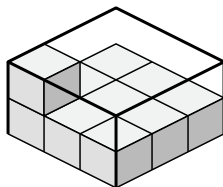


Determine the volume of each box. Each block is 1 cubic unit (u<sup>3</sup>).

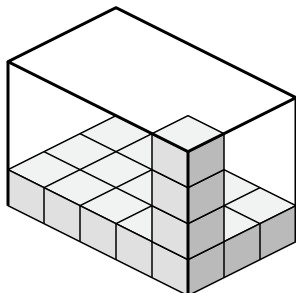
1)



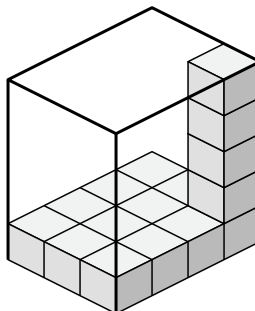
2)



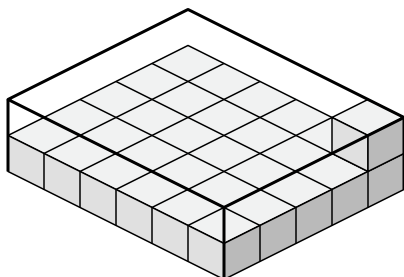
3)



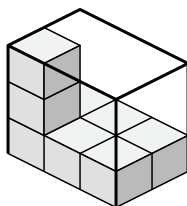
4)



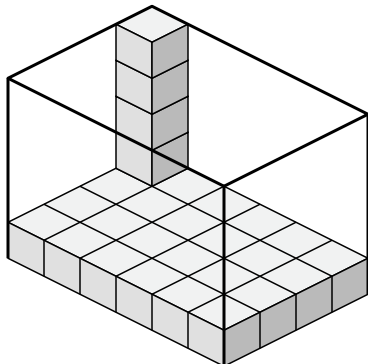
5)



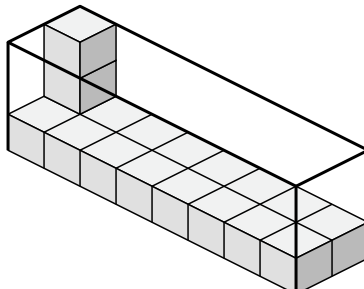
6)



7)



8)



Answers

1. \_\_\_\_\_

2. \_\_\_\_\_

3. \_\_\_\_\_

4. \_\_\_\_\_

5. \_\_\_\_\_

6. \_\_\_\_\_

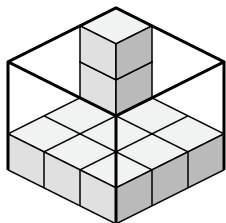
7. \_\_\_\_\_

8. \_\_\_\_\_

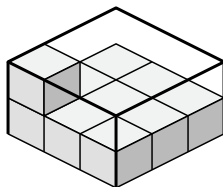


Determine the volume of each box. Each block is 1 cubic unit ( $u^3$ ).

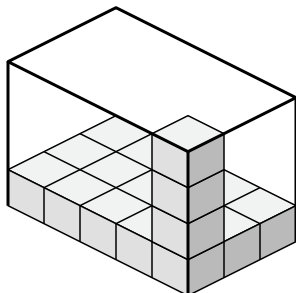
1)



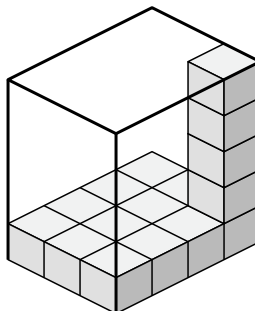
2)



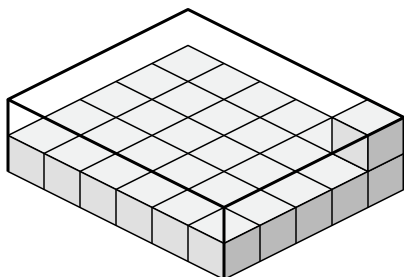
3)



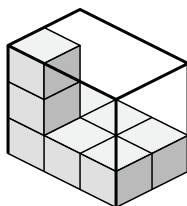
4)



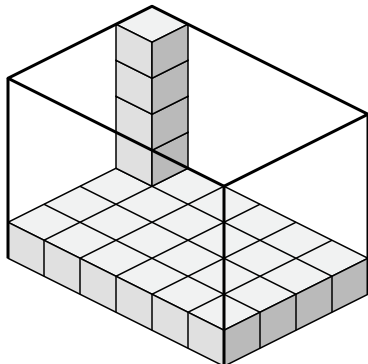
5)



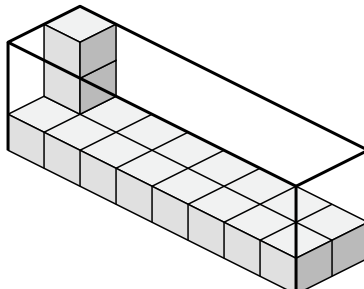
6)



7)



8)



Answers

1. 27  $u^3$

2. 18  $u^3$

3. 60  $u^3$

4. 60  $u^3$

5. 60  $u^3$

6. 18  $u^3$

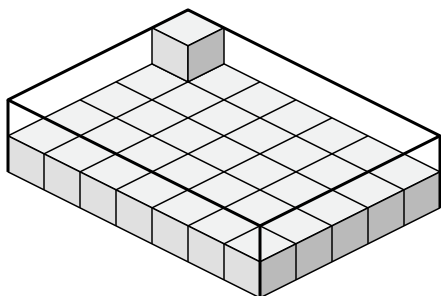
7. 120  $u^3$

8. 48  $u^3$

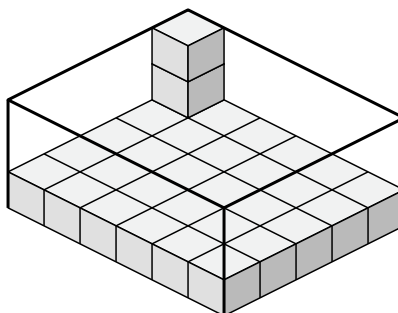


Determine the volume of each box. Each block is 1 cubic unit ( $u^3$ ).

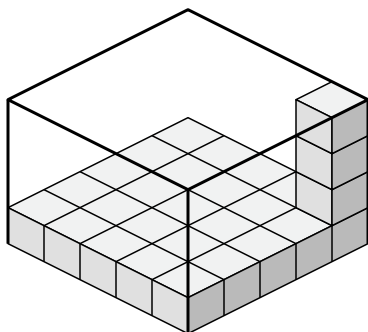
1)



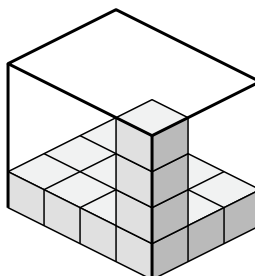
2)



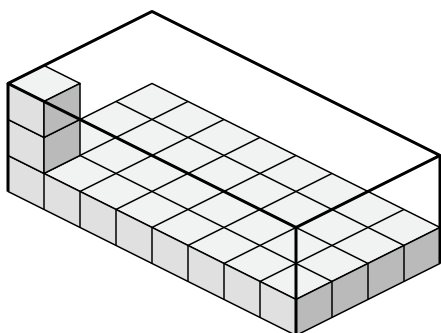
3)



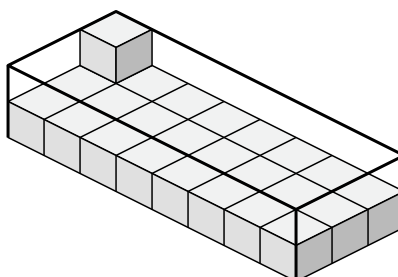
4)



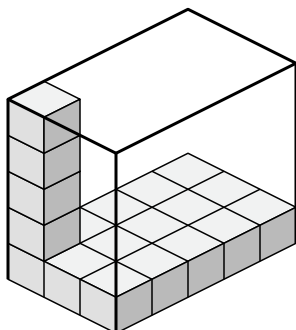
5)



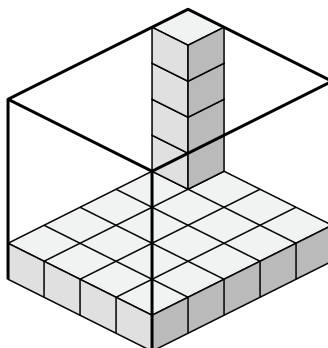
6)



7)



8)



Answers

1. \_\_\_\_\_

2. \_\_\_\_\_

3. \_\_\_\_\_

4. \_\_\_\_\_

5. \_\_\_\_\_

6. \_\_\_\_\_

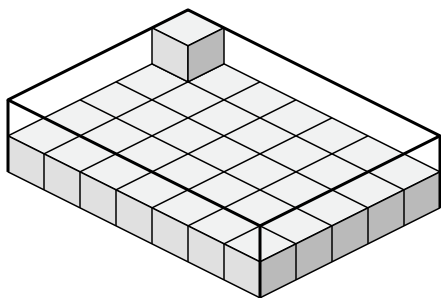
7. \_\_\_\_\_

8. \_\_\_\_\_

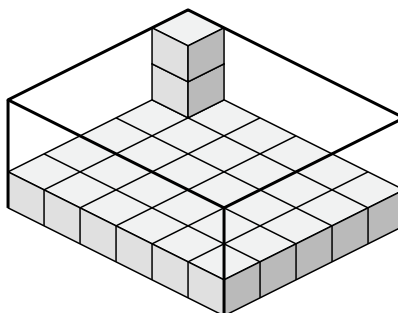


Determine the volume of each box. Each block is 1 cubic unit ( $u^3$ ).

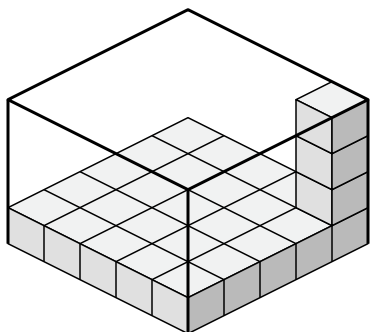
1)



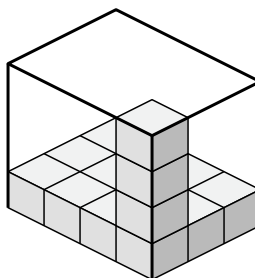
2)



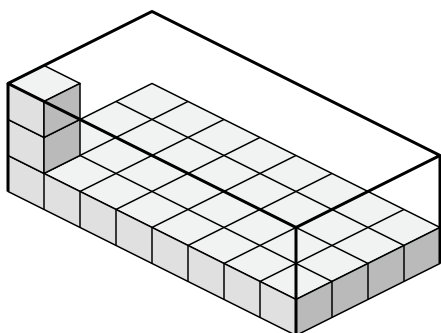
3)



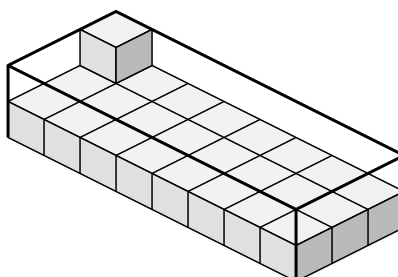
4)



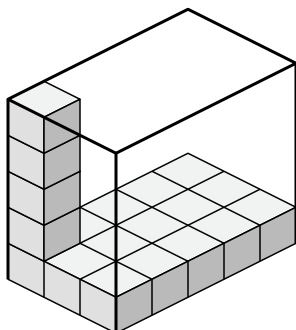
5)



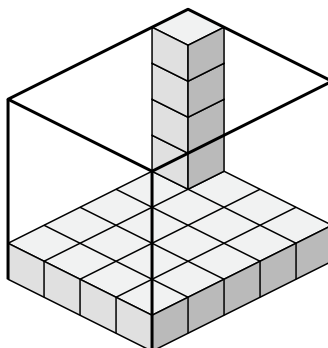
6)



7)



8)



Answers

1. 70  $u^3$

2. 90  $u^3$

3. 100  $u^3$

4. 48  $u^3$

5. 96  $u^3$

6. 48  $u^3$

7. 75  $u^3$

8. 100  $u^3$