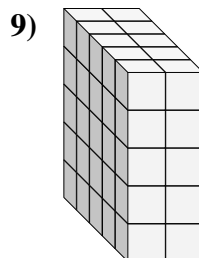
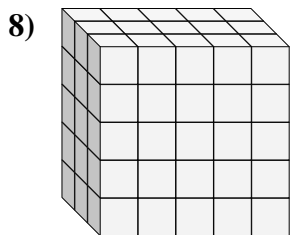
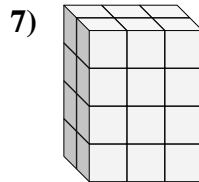
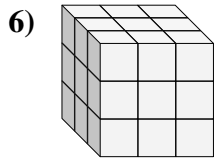
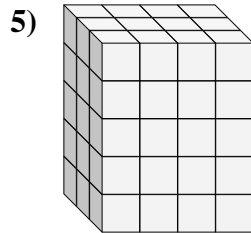
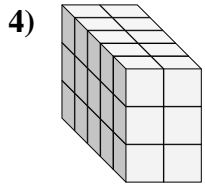
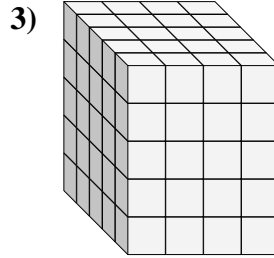
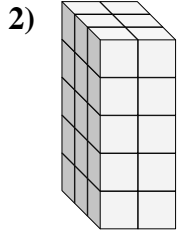
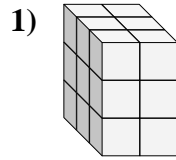
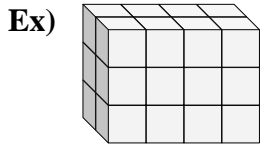




Find the length, width and height of the rectangular prism. Then find the volume.



Answers

Ex. 2 4 3 24

1. \_\_\_\_\_

2. \_\_\_\_\_

3. \_\_\_\_\_

4. \_\_\_\_\_

5. \_\_\_\_\_

6. \_\_\_\_\_

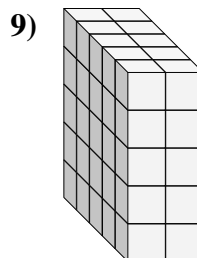
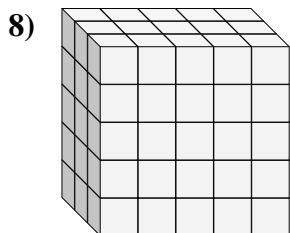
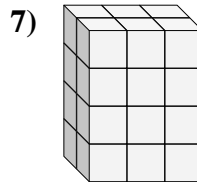
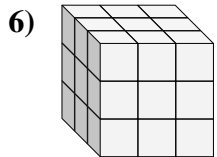
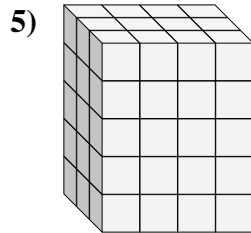
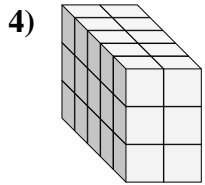
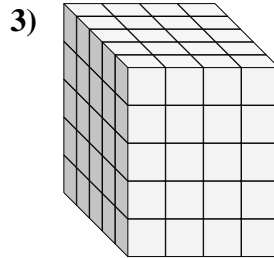
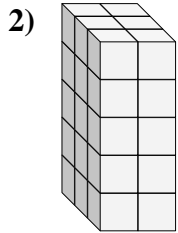
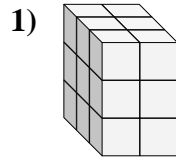
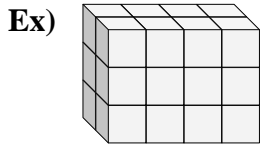
7. \_\_\_\_\_

8. \_\_\_\_\_

9. \_\_\_\_\_



Find the length, width and height of the rectangular prism. Then find the volume.



Answers

Ex. 2 4 3 24

1. 3 2 3 18

2. 3 2 5 30

3. 5 4 5 100

4. 5 2 3 30

5. 3 4 5 60

6. 3 3 3 27

7. 2 3 4 24

8. 3 5 5 75

9. 5 2 5 50