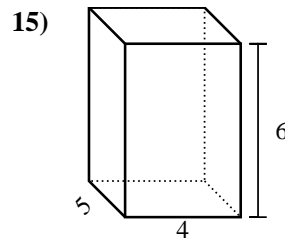
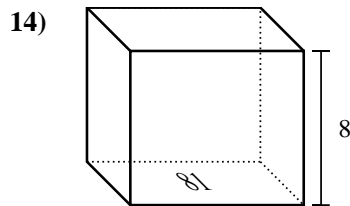
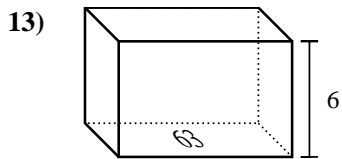
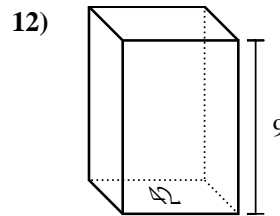
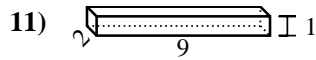
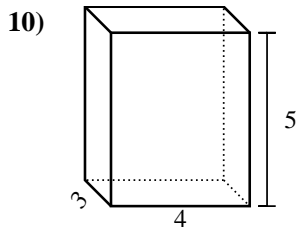
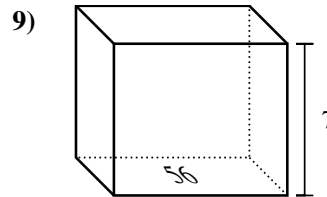
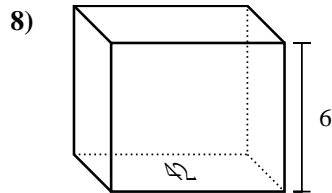
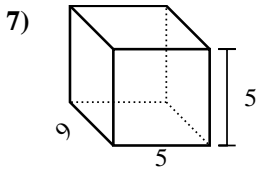
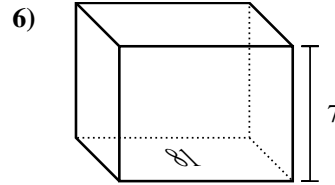
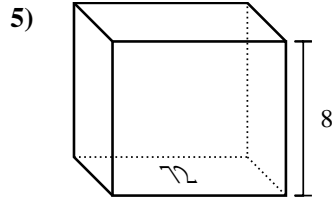
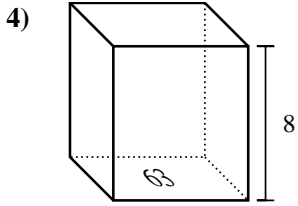
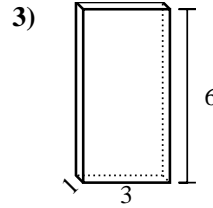
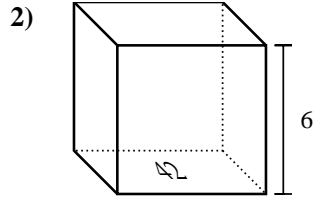
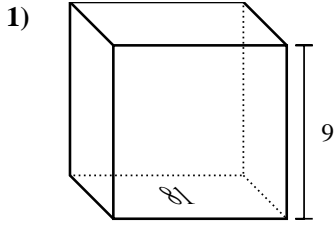




Find the volume of each rectangular prism. Units are in cm (not to scale). Remember $V = BH$ and $V = L \times W \times H$

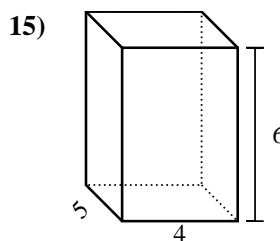
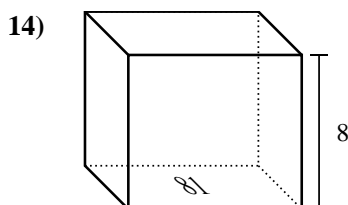
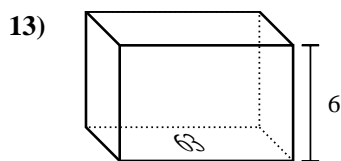
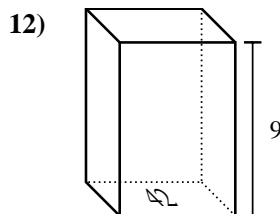
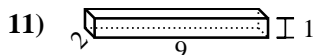
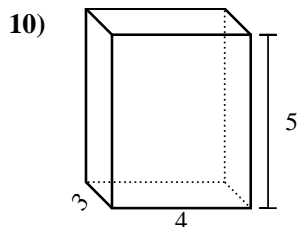
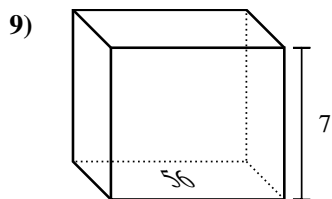
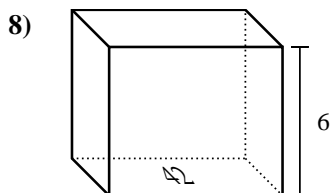
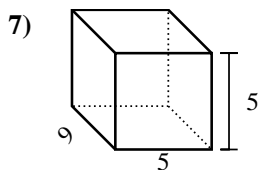
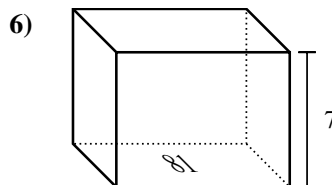
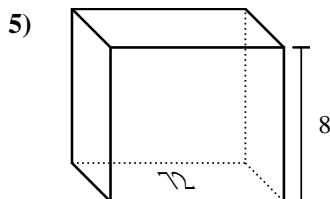
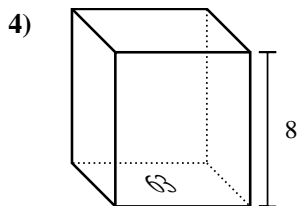
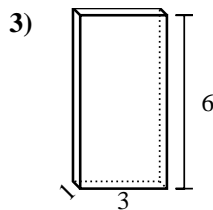
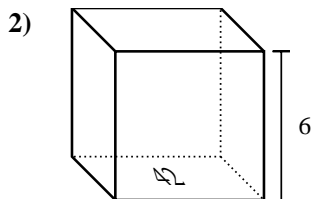
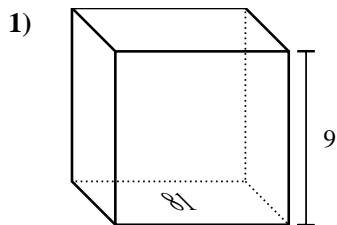
Answers



1. _____
2. _____
3. _____
4. _____
5. _____
6. _____
7. _____
8. _____
9. _____
10. _____
11. _____
12. _____
13. _____
14. _____
15. _____



Find the volume of each rectangular prism. Units are in cm (not to scale). Remember $V = BH$ and $V = L \times W \times H$



Answers

1. 729 cm³
2. 252 cm³
3. 18 cm³
4. 504 cm³
5. 576 cm³
6. 567 cm³
7. 225 cm³
8. 252 cm³
9. 392 cm³
10. 60 cm³
11. 18 cm³
12. 378 cm³
13. 378 cm³
14. 648 cm³
15. 120 cm³